

Sue Pemberton
Series Editor: Julian Gilbey

Cambridge International
AS & A Level Mathematics:
Pure Mathematics 1

Coursebook

Completely **Cambridge**
Cambridge resources
for
Cambridge qualifications

Sue Pemberton

Series Editor: Julian Gilbey

**Cambridge International
AS & A Level Mathematics:**

Pure Mathematics 1

Coursebook



CAMBRIDGE
UNIVERSITY PRESS

University Printing House, Cambridge CB2 8BS, United Kingdom

One Liberty Plaza, 20th Floor, New York, NY 10006, USA

477 Williamstown Road, Port Melbourne, VIC 3207, Australia

314–321, 3rd Floor, Plot 3, Splendor Forum, Jasola District Centre, New Delhi – 110025, India

79 Anson Road, #06–04/06, Singapore 079906

Cambridge University Press is part of the University of Cambridge.

It furthers the University's mission by disseminating knowledge in the pursuit of education, learning and research at the highest international levels of excellence.

www.cambridge.org

Information on this title: www.cambridge.org/9781108407144

© Cambridge University Press 2018

This publication is in copyright. Subject to statutory exception and to the provisions of relevant collective licensing agreements, no reproduction of any part may take place without the written permission of Cambridge University Press.

First published 2018

20 19 18 17 16 15 14 13 12 11 10 9 8 7 6 5 4 3 2 1

Printed in the United Kingdom by Latimer Trend

A catalogue record for this publication is available from the British Library

ISBN 978-1-108-40714-4 Paperback

Cambridge University Press has no responsibility for the persistence or accuracy of URLs for external or third-party internet websites referred to in this publication, and does not guarantee that any content on such websites is, or will remain, accurate or appropriate. Information regarding prices, travel timetables, and other factual information given in this work is correct at the time of first printing but Cambridge University Press does not guarantee the accuracy of such information thereafter.

® *IGCSE* is a registered trademark

Past exam paper questions throughout are reproduced by permission of Cambridge Assessment International Education. Cambridge Assessment International Education bears no responsibility for the example answers to questions taken from its past question papers which are contained in this publication.

The questions, example answers, marks awarded and/or comments that appear in this book were written by the author(s). In examination, the way marks would be awarded to answers like these may be different.

.....
NOTICE TO TEACHERS IN THE UK

It is illegal to reproduce any part of this work in material form (including photocopying and electronic storage) except under the following circumstances:

- (i) where you are abiding by a licence granted to your school or institution by the Copyright Licensing Agency;
- (ii) where no such licence exists, or where you wish to exceed the terms of a licence, and you have gained the written permission of Cambridge University Press;
- (iii) where you are allowed to reproduce without permission under the provisions of Chapter 3 of the Copyright, Designs and Patents Act 1988, which covers, for example, the reproduction of short passages within certain types of educational anthology and reproduction for the purposes of setting examination questions.

Contents

Series introduction	vi
How to use this book	viii
Acknowledgements	x
1 Quadratics	1
1.1 Solving quadratic equations by factorisation	3
1.2 Completing the square	6
1.3 The quadratic formula	10
1.4 Solving simultaneous equations (one linear and one quadratic)	11
1.5 Solving more complex quadratic equations	15
1.6 Maximum and minimum values of a quadratic function	17
1.7 Solving quadratic inequalities	21
1.8 The number of roots of a quadratic equation	24
1.9 Intersection of a line and a quadratic curve	27
End-of-chapter review exercise 1	31
2 Functions	33
2.1 Definition of a function	34
2.2 Composite functions	39
2.3 Inverse functions	43
2.4 The graph of a function and its inverse	48
2.5 Transformations of functions	51
2.6 Reflections	55
2.7 Stretches	57
2.8 Combined transformations	59
End-of-chapter review exercise 2	67
3 Coordinate geometry	70
3.1 Length of a line segment and midpoint	72
3.2 Parallel and perpendicular lines	75
3.3 Equations of straight lines	78
3.4 The equation of a circle	82
3.5 Problems involving intersections of lines and circles	88
End-of-chapter review exercise 3	92

Cross-topic review exercise 1	95
4 Circular measure	99
4.1 Radians	101
4.2 Length of an arc	104
4.3 Area of a sector	107
End-of-chapter review exercise 4	112
5 Trigonometry	116
5.1 Angles between 0° and 90°	118
5.2 The general definition of an angle	121
5.3 Trigonometric ratios of general angles	123
5.4 Graphs of trigonometric functions	127
5.5 Inverse trigonometric functions	136
5.6 Trigonometric equations	140
5.7 Trigonometric identities	145
5.8 Further trigonometric equations	149
End-of-chapter review exercise 5	153
6 Series	155
6.1 Binomial expansion of $(a + b)^n$	156
6.2 Binomial coefficients	160
6.3 Arithmetic progressions	166
6.4 Geometric progressions	171
6.5 Infinite geometric series	175
6.6 Further arithmetic and geometric series	180
End-of-chapter review exercise 6	183
Cross-topic review exercise 2	186
7 Differentiation	190
7.1 Derivatives and gradient functions	191
7.2 The chain rule	198
7.3 Tangents and normals	201
7.4 Second derivatives	205
End-of-chapter review exercise 7	209

8 Further differentiation	211
8.1 Increasing and decreasing functions	213
8.2 Stationary points	216
8.3 Practical maximum and minimum problems	221
8.4 Rates of change	227
8.5 Practical applications of connected rates of change	230
End-of-chapter review exercise 8	235
9 Integration	238
9.1 Integration as the reverse of differentiation	239
9.2 Finding the constant of integration	244
9.3 Integration of expressions of the form $(ax + b)^n$	247
9.4 Further indefinite integration	249
9.5 Definite integration	250
9.6 Area under a curve	253
9.7 Area bounded by a curve and a line or by two curves	260
9.8 Improper integrals	264
9.9 Volumes of revolution	268
End-of-chapter review exercise 9	276
Cross-topic review exercise 3	280
Practice exam-style paper	284
Answers	286
Glossary	317
Index	319

Series introduction

Cambridge International AS & A Level Mathematics can be a life-changing course. On the one hand, it is a facilitating subject: there are many university courses that either require an A Level or equivalent qualification in mathematics or prefer applicants who have it. On the other hand, it will help you to learn to think more precisely and logically, while also encouraging creativity. Doing mathematics can be like doing art: just as an artist needs to master her tools (use of the paintbrush, for example) and understand theoretical ideas (perspective, colour wheels and so on), so does a mathematician (using tools such as algebra and calculus, which you will learn about in this course). But this is only the technical side: the joy in art comes through creativity, when the artist uses her tools to express ideas in novel ways. Mathematics is very similar: the tools are needed, but the deep joy in the subject comes through solving problems.

You might wonder what a mathematical ‘problem’ is. This is a very good question, and many people have offered different answers. You might like to write down your own thoughts on this question, and reflect on how they change as you progress through this course. One possible idea is that a mathematical problem is a mathematical question that you do not immediately know how to answer. (If you do know how to answer it immediately, then we might call it an ‘exercise’ instead.) Such a problem will take time to answer: you may have to try different approaches, using different tools or ideas, on your own or with others, until you finally discover a way into it. This may take minutes, hours, days or weeks to achieve, and your sense of achievement may well grow with the effort it has taken.

vi

In addition to the mathematical tools that you will learn in this course, the problem-solving skills that you will develop will also help you throughout life, whatever you end up doing. It is very common to be faced with problems, be it in science, engineering, mathematics, accountancy, law or beyond, and having the confidence to systematically work your way through them will be very useful.

This series of Cambridge International AS & A Level Mathematics coursebooks, written for the Cambridge Assessment International Education syllabus for examination from 2020, will support you both to learn the mathematics required for these examinations and to develop your mathematical problem-solving skills. The new examinations may well include more unfamiliar questions than in the past, and having these skills will allow you to approach such questions with curiosity and confidence.

In addition to problem solving, there are two other key concepts that Cambridge Assessment International Education have introduced in this syllabus: namely communication and mathematical modelling. These appear in various forms throughout the coursebooks.

Communication in speech, writing and drawing lies at the heart of what it is to be human, and this is no less true in mathematics. While there is a temptation to think of mathematics as only existing in a dry, written form in textbooks, nothing could be further from the truth: mathematical communication comes in many forms, and discussing mathematical ideas with colleagues is a major part of every mathematician’s working life. As you study this course, you will work on many problems. Exploring them or struggling with them together with a classmate will help you both to develop your understanding and thinking, as well as improving your (mathematical) communication skills. And being able to convince someone that your reasoning is correct, initially verbally and then in writing, forms the heart of the mathematical skill of ‘proof’.

Mathematical modelling is where mathematics meets the ‘real world’. There are many situations where people need to make predictions or to understand what is happening in the world, and mathematics frequently provides tools to assist with this. Mathematicians will look at the real world situation and attempt to capture the key aspects of it in the form of equations, thereby building a model of reality. They will use this model to make predictions, and where possible test these against reality. If necessary, they will then attempt to improve the model in order to make better predictions. Examples include weather prediction and climate change modelling, forensic science (to understand what happened at an accident or crime scene), modelling population change in the human, animal and plant kingdoms, modelling aircraft and ship behaviour, modelling financial markets and many others. In this course, we will be developing tools which are vital for modelling many of these situations.

To support you in your learning, these coursebooks have a variety of new features, for example:

- **Explore activities:** These activities are designed to offer problems for classroom use. They require thought and deliberation: some introduce a new idea, others will extend your thinking, while others can support consolidation. The activities are often best approached by working in small groups and then sharing your ideas with each other and the class, as they are not generally routine in nature. This is one of the ways in which you can develop problem-solving skills and confidence in handling unfamiliar questions.
- **Questions labelled as P, M or PS:** These are questions with a particular emphasis on ‘Proof’, ‘Modelling’ or ‘Problem solving’. They are designed to support you in preparing for the new style of examination. They may or may not be harder than other questions in the exercise.
- **The language of the explanatory sections** makes much more use of the words ‘we’, ‘us’ and ‘our’ than in previous coursebooks. This language invites and encourages you to be an active participant rather than an observer, simply following instructions (‘you do this, then you do that’). It is also the way that professional mathematicians usually write about mathematics. The new examinations may well present you with unfamiliar questions, and if you are used to being active in your mathematics, you will stand a better chance of being able to successfully handle such challenges.

At various points in the books, there are also web links to relevant Underground Mathematics resources, which can be found on the free undergroundmathematics.org website. Underground Mathematics has the aim of producing engaging, rich materials for all students of Cambridge International AS & A Level Mathematics and similar qualifications. These high-quality resources have the potential to simultaneously develop your mathematical thinking skills and your fluency in techniques, so we do encourage you to make good use of them.

We wish you every success as you embark on this course.

Julian Gilbey
London, 2018

Past exam paper questions throughout are reproduced by permission of Cambridge Assessment International Education. Cambridge Assessment International Education bears no responsibility for the example answers to questions taken from its past question papers which are contained in this publication.

The questions, example answers, marks awarded and/or comments that appear in this book were written by the author(s). In examination, the way marks would be awarded to answers like these may be different.

How to use this book

Throughout this book you will notice particular features that are designed to help your learning. This section provides a brief overview of these features.

In this chapter you will learn how to:

- use the expansion of $(a + b)^n$, where n is a positive integer
- recognise arithmetic and geometric progressions
- use the formulae for the n th term and for the sum of the first n terms to solve problems involving arithmetic or geometric progressions
- use the condition for the convergence of a geometric progression, and the formula for the sum to infinity of a convergent geometric progression.

Learning objectives indicate the important concepts within each chapter and help you to navigate through the coursebook.

KEY POINT 1.4

If we multiply or divide both sides of an inequality by a negative number then the inequality sign must be reversed.

Key point boxes contain a summary of the most important methods, facts and formulae.

completing the square

Key terms are important terms in the topic that you are learning. They are highlighted in orange bold. The **glossary** contains clear definitions of these key terms.

EXPLORE 6.2

Consider the expansion:

$$(1+x)^5 = 1 + 5x + 10x^2 + 10x^3 + 5x^4 + x^5$$

The coefficients are: 1 5 10 10 5 1

- Find the nCr function on your calculator. On some calculators this may be ${}_nC_r$ or $\binom{n}{r}$.

1 Use your calculator to find the value of:

$$\binom{5}{0}, \binom{5}{1}, \binom{5}{2}, \binom{5}{3}, \binom{5}{4} \text{ and } \binom{5}{5}.$$

Explore boxes contain enrichment activities for extension work. These activities promote group work and peer-to-peer discussion, and are intended to deepen your understanding of a concept. (Answers to the Explore questions are provided in the Teacher's Resource.)

PREREQUISITE KNOWLEDGE

Where it comes from	What you should be able to do	Check your skills
IGCSE / O Level Mathematics	Solve quadratic equations by factorising.	1 Solve. a $x^2 + x - 12 = 0$ b $x^2 - 6x + 9 = 0$ c $3x^2 - 17x - 6 = 0$
IGCSE / O Level Mathematics	Solve linear inequalities.	2 Solve. a $5x - 8 > 2$ b $3 - 2x \leq 7$
IGCSE / O Level Mathematics	Solve simultaneous linear equations.	3 Solve. a $2x + 3y = 13$ $7x - 5y = -1$ b $2x - 7y = 31$ $3x + 5y = -31$
IGCSE / O Level Additional Mathematics	Carry out simple manipulation of surds.	4 Simplify. a $\sqrt{20}$ b $(\sqrt{5})^2$ c $\frac{8}{\sqrt{2}}$

Prerequisite knowledge exercises identify prior learning that you need to have covered before starting the chapter. Try the questions to identify any areas that you need to review before continuing with the chapter.

WORKED EXAMPLE 3.12

Find the centre and the radius of the circle $x^2 + y^2 + 10x - 8y - 40 = 0$.

Answer

We answer this question by first completing the square

$$\begin{aligned} x^2 + 10x + y^2 - 8y - 40 &= 0 && \text{Complete the square.} \\ (x+5)^2 - 5^2 + (y-4)^2 - 4^2 - 40 &= 0 && \text{Collect constant terms together.} \\ (x+5)^2 + (y-4)^2 &= 81 && \text{Compare with } (x-a)^2 + (y-b)^2 = r^2. \\ a = -5 & \quad b = 4 & \quad r^2 = 81 \\ \text{Centre} = (-5, 4) & \text{ and radius} = 9. \end{aligned}$$

Worked examples provide step-by-step approaches to answering questions. The left side shows a fully worked solution, while the right side contains a commentary explaining each step in the working.

TIP

It is important to remember to show appropriate calculations in coordinate geometry questions. Answers from scale drawings are not accepted.

Tip boxes contain helpful guidance about calculating or checking your answers.

REWIND

In Section 2.5 we learnt about the inverse of a function. Here we will look at the particular case of the inverse of a trigonometric function.

FAST FORWARD

In the Pure Mathematics 2 and 3 Coursebook, Chapter 7, you will learn how to expand these expressions for any real value of n .

Rewind and **Fast forward** boxes direct you to related learning. **Rewind** boxes refer to earlier learning, in case you need to revise a topic. **Fast forward** boxes refer to topics that you will cover at a later stage, in case you would like to extend your study.

DID YOU KNOW?

A geographical coordinate system is used to describe the location of any point on the Earth's surface. The coordinates used are longitude and latitude. 'Horizontal' circles and 'vertical' circles form the 'grid'. The horizontal circles are perpendicular to the axis of rotation of the Earth and are known as lines of latitude. The vertical circles pass through the North and South poles and are known as lines of longitude.

Did you know? boxes contain interesting facts showing how Mathematics relates to the wider world.

Checklist of learning and understanding**Binomial expansions**

Binomial coefficients, denoted by nC_r or $\binom{n}{r}$, can be found by using:

- Pascal's triangle

- the formulae $\binom{n}{r} = \frac{n!}{r!(n-r)!}$ or $\binom{n}{r} = \frac{n \times (n-1) \times (n-2) \times \dots \times (n-r+1)}{r \times (r-1) \times (r-2) \times \dots \times 3 \times 2 \times 1}$

At the end of each chapter there is a **Checklist of learning and understanding**.

The checklist contains a summary of the concepts that were covered in the chapter. You can use this to quickly check that you have covered the main topics.

CROSS-TOPIC REVIEW EXERCISE 1

- 1 A car of mass 1500 kg is on a straight horizontal road. The car accelerates from 20 m s^{-1} to 24 m s^{-1} in 10 s. The car has a constant driving force and there is resistance of 100 N. Find the size of the driving force. [4]
- 2 A particle starts from rest at a point X and moves in a straight line until 40 s later it reaches a point Y , which is 145 m from X . For $0 \text{ s} < t < 5 \text{ s}$ the particle accelerates at 0.8 m s^{-2} . For $5 \text{ s} < t < 30 \text{ s}$ it remains at constant velocity. For $30 \text{ s} < t < 40 \text{ s}$ it decelerates at a constant rate, but does not come to rest.

Cross-topic review exercises appear after several chapters, and cover topics from across the preceding chapters.

E

Extension material goes beyond the syllabus. It is highlighted by a red line to the left of the text.

WEB LINK

Try the *Sequences and Counting and Binomial* resources on the Underground Mathematics website.

Web link boxes contain links to useful resources on the internet.

Throughout each chapter there are multiple exercises containing practice questions. The questions are coded:

- PS** These questions focus on problem-solving.
- P** These questions focus on proofs.
- M** These questions focus on modelling.
- You should not use a calculator for these questions.
- You can use a calculator for these questions.
- These questions are taken from past examination papers.

The **End-of-chapter review** contains exam-style questions covering all topics in the chapter. You can use this to check your understanding of the topics you have covered. The number of marks gives an indication of how long you should be spending on the question. You should spend more time on questions with higher mark allocations; questions with only one or two marks should not need you to spend time doing complicated calculations or writing long explanations.

END-OF-CHAPTER REVIEW EXERCISE 7

- 1 Differentiate $\frac{3x^3 - 7}{4x}$ with respect to x . [3]
- 2 Find the gradient of the curve $y = \frac{8}{4x - 5}$ at the point where $x = 2$. [3]
- 3 A curve has equation $y = 3x^3 - 2x^2 + x - 7$. Show that the gradient of the curve is never negative. [3]
- 4 The equation of a curve is $y = (3 - 5x)^2 - 2x$. Find $\frac{dy}{dx}$ and $\frac{d^2y}{dx^2}$. [3]
- 5 Find the gradient of the curve $y = \frac{15}{x^2 - 2x}$ at the point where $x = 5$. [4]

Acknowledgements

The authors and publishers acknowledge the following sources of copyright material and are grateful for the permissions granted. While every effort has been made, it has not always been possible to identify the sources of all the material used, or to trace all copyright holders. If any omissions are brought to our notice, we will be happy to include the appropriate acknowledgements on reprinting.

Past examination questions throughout are reproduced by permission of Cambridge Assessment International Education.

The following questions are used by permission of the Underground Mathematics website: Exercise 1F Question 9, Exercise 3C Question 16, Exercise 3E Questions 6 and 7, Exercise 4B Question 10.

Thanks to the following for permission to reproduce images:

Cover image iStock/Getty Images

Inside (*in order of appearance*) English Heritage/Heritage Images/Getty Images, Sean Russell/Getty Images, Gopinath Duraisamy/EyeEm/Getty Images, Frank Fell/robertharding/Getty Images, Fred Icke/EyeEm/Getty Images, Ralph Grunewald/Getty Images, Gustavo Miranda Holley/Getty Images, shannonstent/Getty Images, wragg/Getty Images, Dimitrios Pikros/EyeEm/Getty Images



Chapter 1

Quadratics

In this chapter you will learn how to:

- carry out the process of completing the square for a quadratic polynomial $ax^2 + bx + c$ and use a completed square form
- find the discriminant of a quadratic polynomial $ax^2 + bx + c$ and use the discriminant
- solve quadratic equations, and quadratic inequalities, in one unknown
- solve by substitution a pair of simultaneous equations of which one is linear and one is quadratic
- recognise and solve equations in x that are quadratic in some function of x
- understand the relationship between a graph of a quadratic function and its associated algebraic equation, and use the relationship between points of intersection of graphs and solutions of equations.

PREREQUISITE KNOWLEDGE

Where it comes from	What you should be able to do	Check your skills
IGCSE® / O Level Mathematics	Solve quadratic equations by factorising.	1 Solve: a $x^2 + x - 12 = 0$ b $x^2 - 6x + 9 = 0$ c $3x^2 - 17x - 6 = 0$
IGCSE / O Level Mathematics	Solve linear inequalities.	2 Solve: a $5x - 8 > 2$ b $3 - 2x \leq 7$
IGCSE / O Level Mathematics	Solve simultaneous linear equations.	3 Solve: a $2x + 3y = 13$ $7x - 5y = -1$ b $2x - 7y = 31$ $3x + 5y = -31$
IGCSE / O Level Additional Mathematics	Carry out simple manipulation of surds.	4 Simplify: a $\sqrt{20}$ b $(\sqrt{5})^2$ c $\frac{8}{\sqrt{2}}$

Why do we study quadratics?

At IGCSE / O Level, you will have learnt about straight-line graphs and their properties. They arise in the world around you. For example, a cell phone contract might involve a fixed monthly charge and then a certain cost per minute for calls: the monthly cost, y , is then given as $y = mx + c$, where c is the fixed monthly charge, m is the cost per minute and x is the number of minutes used.

Quadratic functions are of the form $y = ax^2 + bx + c$ (where $a \neq 0$) and they have interesting properties that make them behave very differently from linear functions. A quadratic function has a maximum or a minimum value, and its graph has interesting symmetry. Studying quadratics offers a route into thinking about more complicated functions such as $y = 7x^5 - 4x^4 + x^2 + x + 3$.

You will have plotted graphs of quadratics such as $y = 10 - x^2$ before starting your A Level course. These are most familiar as the shape of the path of a ball as it travels through the air (called its *trajectory*). Discovering that the trajectory is a quadratic was one of Galileo's major successes in the early 17th century. He also discovered that the vertical motion of a ball thrown straight upwards can be modelled by a quadratic, as you will learn if you go on to study the Mechanics component.



WEB LINK

Try the *Quadratics* resource on the Underground Mathematics website (www.undergroundmathematics.org).

1.1 Solving quadratic equations by factorisation

You already know the factorisation method and the quadratic formula method to solve quadratic equations algebraically.

This section consolidates and builds on your previous work on solving quadratic equations by factorisation.

EXPLORE 1.1

$$2x^2 + 3x - 5 = (x - 1)(x - 2)$$

This is Rosa's solution to the previous equation:

Factorise the left-hand side: $(x - 1)(2x + 5) = (x - 1)(x - 2)$

Divide both sides by $(x - 1)$: $2x + 5 = x - 2$

Rearrange: $x = -7$

Discuss her solution with your classmates and explain why her solution is not fully correct.

Now solve the equation correctly.

WORKED EXAMPLE 1.1

Solve:

a $6x^2 + 5 = 17x$

b $9x^2 - 39x - 30 = 0$

Answer

a $6x^2 + 5 = 17x$ ••• Write in the form $ax^2 + bx + c = 0$.

$6x^2 - 17x + 5 = 0$ ••• Factorise.

$(2x - 5)(3x - 1) = 0$ ••• Use the fact that if $pq = 0$, then $p = 0$ or $q = 0$.

$2x - 5 = 0$ or $3x - 1 = 0$ ••• Solve.

$x = \frac{5}{2}$ or $x = \frac{1}{3}$

b $9x^2 - 39x - 30 = 0$ ••• Divide both sides by the common factor of 3.

$3x^2 - 13x - 10 = 0$ ••• Factorise.

$(3x + 2)(x - 5) = 0$

$3x + 2 = 0$ or $x - 5 = 0$ ••• Solve.

$x = -\frac{2}{3}$ or $x = 5$



TIP

Divide by a common factor first, if possible.

WORKED EXAMPLE 1.2

Solve $\frac{21}{2x} - \frac{2}{x+3} = 1$.

Answer

$$\frac{21}{2x} - \frac{2}{x+3} = 1$$

Multiply both sides by $2x(x+3)$.

$$21(x+3) - 4x = 2x(x+3)$$

Expand brackets and rearrange.

$$2x^2 - 11x - 63 = 0$$

Factorise.

$$(2x+7)(x-9) = 0$$

$$2x+7 = 0 \text{ or } x-9 = 0$$

Solve.

$$x = -\frac{7}{2} \text{ or } x = 9$$

WORKED EXAMPLE 1.3

Solve $\frac{3x^2 + 26x + 35}{x^2 + 8} = 0$.

Answer

$$\frac{3x^2 + 26x + 35}{x^2 + 8} = 0$$

Multiply both sides by $x^2 + 8$.

$$3x^2 + 26x + 35 = 0$$

Factorise.

$$(3x+5)(x+7) = 0$$

$$3x+5 = 0 \text{ or } x+7 = 0$$

Solve.

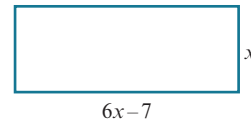
$$x = -\frac{5}{3} \text{ or } x = -7$$

WORKED EXAMPLE 1.4

A rectangle has sides of length x cm and $(6x - 7)$ cm.

The area of the rectangle is 90 cm².

Find the lengths of the sides of the rectangle.



Answer

$$\text{Area} = x(6x - 7) = 6x^2 - 7x = 90$$

Rearrange.

$$6x^2 - 7x - 90 = 0$$

Factorise.

$$(2x - 9)(3x + 10) = 0$$

$$2x - 9 = 0 \text{ or } 3x + 10 = 0$$

Solve.

$$x = \frac{9}{2} \text{ or } x = -\frac{10}{3}$$

Length is a positive quantity, so $x = 4\frac{1}{2}$.

When $x = 4\frac{1}{2}$, $6x - 7 = 20$.

The rectangle has sides of length $4\frac{1}{2}$ cm and 20 cm.

EXPLORE 1.2

A $4(2x^2 + x - 6) = 1$

B $(x^2 - 3x + 1)^6 = 1$

C $(x^2 - 3x + 1)(2x^2 + x - 6) = 1$

1 Discuss with your classmates how you would solve each of these equations.

2 Solve:

a equation A

b equation B

c equation C

3 State how many values of x satisfy:

a equation A

b equation B

c equation C

4 Discuss your results.



TIP

Remember to check each of your answers.

EXERCISE 1A

1 Solve by factorisation.

a $x^2 + 3x - 10 = 0$

b $x^2 - 7x + 12 = 0$

c $x^2 - 6x - 16 = 0$

d $5x^2 + 19x + 12 = 0$

e $20 - 7x = 6x^2$

f $x(10x - 13) = 3$

2 Solve:

a $x - \frac{6}{x-5} = 0$

b $\frac{2}{x} + \frac{3}{x+2} = 1$

c $\frac{5x+1}{4} - \frac{2x-1}{2} = x^2$

d $\frac{5}{x+3} + \frac{3x}{x+4} = 2$

e $\frac{3}{x+1} + \frac{1}{x(x+1)} = 2$

f $\frac{3}{x+2} + \frac{1}{x-1} = \frac{1}{(x+1)(x+2)}$

3 Solve:

a $\frac{3x^2 + x - 10}{x^2 - 7x + 6} = 0$

b $\frac{x^2 + x - 6}{x^2 + 5} = 0$

c $\frac{x^2 - 9}{7x + 10} = 0$

d $\frac{x^2 - 2x - 8}{x^2 + 7x + 10} = 0$

e $\frac{6x^2 + x - 2}{x^2 + 7x + 4} = 0$

f $\frac{2x^2 + 9x - 5}{x^4 + 1} = 0$

4 Find the real solutions of the following equations.

a $8(x^2 + 2x - 15) = 1$

b $4(2x^2 - 11x + 15) = 1$

c $2(x^2 - 4x + 6) = 8$

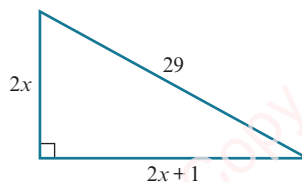
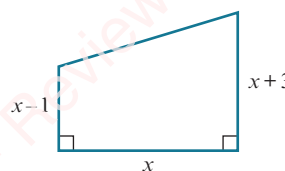
d $3(2x^2 + 9x + 2) = \frac{1}{9}$

e $(x^2 + 2x - 14)^5 = 1$

f $(x^2 - 7x + 11)^8 = 1$

5 The diagram shows a right-angled triangle with sides $2x$ cm, $(2x + 1)$ cm and 29 cm.a Show that $2x^2 + x - 210 = 0$.

b Find the lengths of the sides of the triangle.

6 The area of the trapezium is 35.75 cm^2 . Find the value of x .

PS 7 Solve $(x^2 - 11x + 29)^{(6x^2 + x - 2)} = 1$.



TIP

Check that your answers satisfy the original equation.



WEB LINK

Try the *Factorisable quadratics* resource on the Underground Mathematics website.

1.2 Completing the square

Another method we can use for solving quadratic equations is **completing the square**.

The method of completing the square aims to rewrite a quadratic expression using only one occurrence of the variable, making it an easier expression to work with.

If we expand the expressions $(x + d)^2$ and $(x - d)^2$, we obtain the results:

$$(x + d)^2 = x^2 + 2dx + d^2 \quad \text{and} \quad (x - d)^2 = x^2 - 2dx + d^2$$

Rearranging these gives the following important results:

KEY POINT 1.1

$$x^2 + 2dx = (x + d)^2 - d^2 \quad \text{and} \quad x^2 - 2dx = (x - d)^2 - d^2$$

To complete the square for $x^2 + 10x$, we can use the first of the previous results as follows:

$$\begin{aligned} 10 \div 2 &= 5 \\ x^2 + 10x &= (x + 5)^2 - 5^2 \\ x^2 + 10x &= (x + 5)^2 - 25 \end{aligned}$$

To complete the square for $x^2 + 8x - 7$, we again use the first result applied to the $x^2 + 8x$ part, as follows:

$$\begin{aligned} 8 \div 2 &= 4 \\ x^2 + 8x - 7 &= (x + 4)^2 - 4^2 - 7 \\ x^2 + 8x - 7 &= (x + 4)^2 - 23 \end{aligned}$$

To complete the square for $2x^2 - 12x + 5$, we must first take a factor of 2 out of the first two terms, so:

$$\begin{aligned} 2x^2 - 12x + 5 &= 2(x^2 - 6x) + 5 \\ 6 \div 2 &= 3 \\ x^2 - 6x &= (x - 3)^2 - 3^2, \text{ giving} \\ 2x^2 - 12x + 5 &= 2[(x - 3)^2 - 9] + 5 = 2(x - 3)^2 - 13 \end{aligned}$$

We can also use an algebraic method for completing the square, as shown in Worked example 1.5.

WORKED EXAMPLE 1.5

Express $2x^2 - 12x + 3$ in the form $p(x - q)^2 + r$, where p , q and r are constants to be found.

Answer

$$2x^2 - 12x + 3 = p(x - q)^2 + r$$

Expanding the brackets and simplifying gives:

$$2x^2 - 12x + 3 = px^2 - 2pqx + pq^2 + r$$

Comparing coefficients of x^2 , coefficients of x and the constant gives

$$2 = p \text{-----} (1) \qquad -12 = -2pq \text{-----} (2) \qquad 3 = pq^2 + r \text{-----} (3)$$

Substituting $p = 2$ in equation (2) gives $q = 3$

Substituting $p = 2$ and $q = 3$ in equation (3) therefore gives $r = -15$

$$2x^2 - 12x + 3 = 2(x - 3)^2 - 15$$

WORKED EXAMPLE 1.6

Express $4x^2 + 20x + 5$ in the form $(ax + b)^2 + c$, where a , b and c are constants to be found.

Answer

$$4x^2 + 20x + 5 = (ax + b)^2 + c$$

Expanding the brackets and simplifying gives:

$$4x^2 + 20x + 5 = a^2x^2 + 2abx + b^2 + c$$

Comparing coefficients of x^2 , coefficients of x and the constant gives

$$4 = a^2 \text{ ----- (1)} \quad 20 = 2ab \text{ ----- (2)} \quad 5 = b^2 + c \text{ ----- (3)}$$

Equation (1) gives $a = \pm 2$.

Substituting $a = 2$ into equation (2) gives $b = 5$.

Substituting $b = 5$ into equation (3) gives $c = -20$.

$$4x^2 + 20x + 5 = (2x + 5)^2 - 20$$

Alternatively:

Substituting $a = -2$ into equation (2) gives $b = -5$.

Substituting $b = -5$ into equation (3) gives $c = -20$.

$$4x^2 + 20x + 5 = (-2x - 5)^2 - 20 = (2x + 5)^2 - 20$$

WORKED EXAMPLE 1.7

Use completing the square to solve the equation $\frac{5}{x+2} + \frac{3}{x-5} = 1$.

Leave your answers in surd form.

Answer

$$\frac{5}{x+2} + \frac{3}{x-5} = 1 \quad \dots \dots \dots \text{Multiply both sides by } (x+2)(x-5).$$

$$5(x-5) + 3(x+2) = (x+2)(x-5) \quad \dots \dots \dots \text{Expand brackets and collect terms.}$$

$$x^2 - 11x + 9 = 0 \quad \dots \dots \dots \text{Complete the square.}$$

$$\left(x - \frac{11}{2}\right)^2 - \left(\frac{11}{2}\right)^2 + 9 = 0$$

$$\left(x - \frac{11}{2}\right)^2 = \frac{85}{4}$$

$$x - \frac{11}{2} = \pm \sqrt{\frac{85}{4}}$$

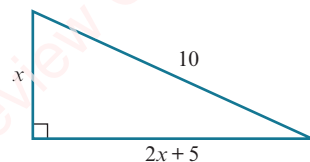
$$x = \frac{11}{2} \pm \frac{\sqrt{85}}{2}$$

$$x = \frac{1}{2}(11 \pm \sqrt{85})$$

EXERCISE 1B

- 1 Express each of the following in the form $(x + a)^2 + b$.
- a $x^2 - 6x$ b $x^2 + 8x$ c $x^2 - 3x$ d $x^2 + 15x$
 e $x^2 + 4x + 8$ f $x^2 - 4x - 8$ g $x^2 + 7x + 1$ h $x^2 - 3x + 4$
- 2 Express each of the following in the form $a(x + b)^2 + c$.
- a $2x^2 - 12x + 19$ b $3x^2 - 12x - 1$ c $2x^2 + 5x - 1$ d $2x^2 + 7x + 5$
- 3 Express each of the following in the form $a - (x + b)^2$.
- a $4x - x^2$ b $8x - x^2$ c $4 - 3x - x^2$ d $9 + 5x - x^2$
- 4 Express each of the following in the form $p - q(x + r)^2$.
- a $7 - 8x - 2x^2$ b $3 - 12x - 2x^2$ c $13 + 4x - 2x^2$ d $2 + 5x - 3x^2$
- 5 Express each of the following in the form $(ax + b)^2 + c$.
- a $9x^2 - 6x - 3$ b $4x^2 + 20x + 30$ c $25x^2 + 40x - 4$ d $9x^2 - 42x + 61$
- 6 Solve by completing the square.
- a $x^2 + 8x - 9 = 0$ b $x^2 + 4x - 12 = 0$ c $x^2 - 2x - 35 = 0$
 d $x^2 - 9x + 14 = 0$ e $x^2 + 3x - 18 = 0$ f $x^2 + 9x - 10 = 0$
- 7 Solve by completing the square. Leave your answers in surd form.
- a $x^2 + 4x - 7 = 0$ b $x^2 - 10x + 2 = 0$ c $x^2 + 8x - 1 = 0$
 d $2x^2 - 4x - 5 = 0$ e $2x^2 + 6x + 3 = 0$ f $2x^2 - 8x - 3 = 0$
- 8 Solve $\frac{5}{x+2} + \frac{3}{x-4} = 2$. Leave your answers in surd form.

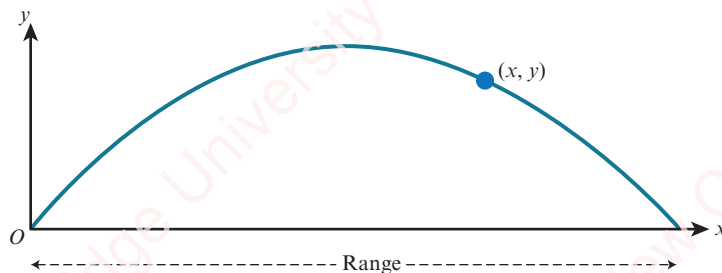
- PS** 9 The diagram shows a right-angled triangle with sides x m, $(2x + 5)$ m and 10 m.



Find the value of x . Leave your answer in surd form.

- PS** 10 Find the real solutions of the equation $(3x^2 + 5x - 7)^4 = 1$.

- PS** 11 The path of a projectile is given by the equation $y = (\sqrt{3})x - \frac{49x^2}{9000}$, where x and y are measured in metres.



- a Find the range of this projectile.
 b Find the maximum height reached by this projectile.



TIP

You will learn how to derive formulae such as this if you go on to study Further Mathematics.

1.3 The quadratic formula

We can solve quadratic equations using the **quadratic formula**.

If $ax^2 + bx + c = 0$, where a , b and c are constants and $a \neq 0$, then

KEY POINT 1.2

$$x = \frac{-b \pm \sqrt{b^2 - 4ac}}{2a}$$

The quadratic formula can be proved by completing the square for the equation

$$ax^2 + bx + c = 0:$$

$$ax^2 + bx + c = 0$$

Divide both sides by a .

$$x^2 + \frac{b}{a}x + \frac{c}{a} = 0$$

Complete the square.

$$\left(x + \frac{b}{2a}\right)^2 - \left(\frac{b}{2a}\right)^2 + \frac{c}{a} = 0$$

Rearrange the equation.

$$\left(x + \frac{b}{2a}\right)^2 = \frac{b^2}{4a^2} - \frac{c}{a}$$

Write the right-hand side as a single fraction.

$$\left(x + \frac{b}{2a}\right)^2 = \frac{b^2 - 4ac}{4a^2}$$

Find the square root of both sides.

$$x + \frac{b}{2a} = \pm \frac{\sqrt{b^2 - 4ac}}{2a}$$

Subtract $\frac{b}{2a}$ from both sides.

$$x = -\frac{b}{2a} \pm \frac{\sqrt{b^2 - 4ac}}{2a}$$

Write the right-hand side as a single fraction.

$$x = \frac{-b \pm \sqrt{b^2 - 4ac}}{2a}$$

WORKED EXAMPLE 1.8

Solve the equation $6x^2 - 3x - 2 = 0$.

Write your answers correct to 3 significant figures.

Answer

Using $a = 6$, $b = -3$ and $c = -2$ in the quadratic formula gives:

$$x = \frac{-(-3) \pm \sqrt{(-3)^2 - 4 \times 6 \times (-2)}}{2 \times 6}$$

$$x = \frac{3 + \sqrt{57}}{12} \text{ or } x = \frac{3 - \sqrt{57}}{12}$$

$$x = 0.879 \text{ or } x = -0.379 \text{ (to 3 significant figures)}$$

EXERCISE 1C

- Solve using the quadratic formula. Give your answer correct to 2 decimal places.
 - $x^2 - 10x - 3 = 0$
 - $x^2 + 6x + 4 = 0$
 - $x^2 + 3x - 5 = 0$
 - $2x^2 + 5x - 6 = 0$
 - $4x^2 + 7x + 2 = 0$
 - $5x^2 + 7x - 2 = 0$
- A rectangle has sides of length x cm and $(3x - 2)$ cm.
The area of the rectangle is 63 cm^2 .
Find the value of x , correct to 3 significant figures.
- Rectangle A has sides of length x cm and $(2x - 4)$ cm.
Rectangle B has sides of length $(x + 1)$ cm and $(5 - x)$ cm.
Rectangle A and rectangle B have the same area.
Find the value of x , correct to 3 significant figures.
- Solve the equation $\frac{5}{x-3} + \frac{2}{x+1} = 1$.
Give your answers correct to 3 significant figures.
- Solve the quadratic equation $ax^2 - bx + c = 0$, giving your answers in terms of a , b and c .
How do the solutions of this equation relate to the solutions of the equation $ax^2 + bx + c = 0$?

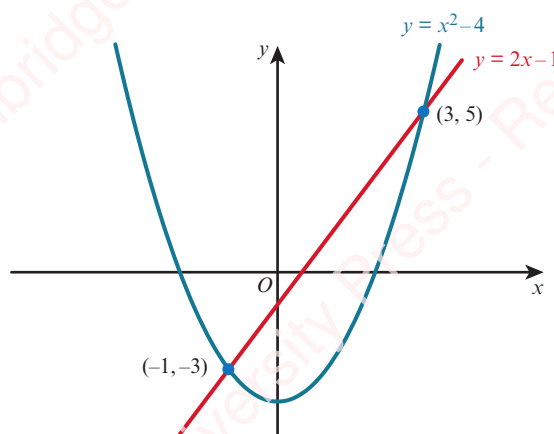


WEB LINK

Try the *Quadratic solving sorter* resource on the Underground Mathematics website.

1.4 Solving simultaneous equations (one linear and one quadratic)

In this section, we shall learn how to solve simultaneous equations where one equation is linear and the second equation is quadratic.



The diagram shows the graphs of $y = x^2 - 4$ and $y = 2x - 1$.

The coordinates of the points of intersection of the two graphs are $(-1, -3)$ and $(3, 5)$.

It follows that $x = -1, y = -3$ and $x = 3, y = 5$ are the solutions of the simultaneous equations $y = x^2 - 4$ and $y = 2x - 1$.

The solutions can also be found algebraically:

$$y = x^2 - 4 \quad \text{----- (1)}$$

$$y = 2x - 1 \quad \text{----- (2)}$$

Substitute for y from equation (2) into equation (1):

$$2x - 1 = x^2 - 4 \quad \text{Rearrange.}$$

$$x^2 - 2x - 3 = 0 \quad \text{Factorise.}$$

$$(x + 1)(x - 3) = 0$$

$$x = -1 \text{ or } x = 3$$

Substituting $x = -1$ into equation (2) gives $y = -2 - 1 = -3$.

Substituting $x = 3$ into equation (2) gives $y = 6 - 1 = 5$.

The solutions are: $x = -1, y = -3$ and $x = 3, y = 5$.

In general, an equation in x and y is called *quadratic* if it has the form

$$ax^2 + bxy + cy^2 + dx + ey + f = 0, \text{ where at least one of } a, b \text{ and } c \text{ is non-zero.}$$

Our technique for solving one linear and one quadratic equation will work for these more general quadratics, too. (The graph of a general quadratic function such as this is called a *conic*.)

WORKED EXAMPLE 1.9

Solve the simultaneous equations.

$$2x + 2y = 7$$

$$x^2 - 4y^2 = 8$$

Answer

$$2x + 2y = 7 \quad \text{----- (1)}$$

$$x^2 - 4y^2 = 8 \quad \text{----- (2)}$$

From equation (1), $x = \frac{7 - 2y}{2}$.

Substitute for x in equation (2):

$$\left(\frac{7 - 2y}{2}\right)^2 - 4y^2 = 8 \quad \text{..... Expand brackets.}$$

$$\frac{49 - 28y + 4y^2}{4} - 4y^2 = 8 \quad \text{..... Multiply both sides by 4.}$$

$$49 - 28y + 4y^2 - 16y^2 = 32 \quad \text{..... Rearrange.}$$

$$12y^2 + 28y - 17 = 0 \quad \text{..... Factorise.}$$

$$(6y + 17)(2y - 1) = 0$$

$$y = -\frac{17}{6} \text{ or } y = \frac{1}{2}$$

Substituting $y = -\frac{17}{6}$ in equation (1) gives $x = \frac{19}{3}$.

Substituting $y = \frac{1}{2}$ into equation (1) gives $x = 3$.

The solutions are: $x = \frac{19}{3}$, $y = -\frac{17}{6}$ and $x = 3$, $y = \frac{1}{2}$.

Alternative method:

From equation (1), $2y = 7 - 2x$.

Substitute for $2y$ in equation (2):

$$x^2 - (7 - 2x)^2 = 8$$

Expand brackets.

$$x^2 - 49 + 28x - 4x^2 = 8$$

Rearrange.

$$3x^2 - 28x + 57 = 0$$

Factorise.

$$(3x - 19)(x - 3) = 0$$

$$x = \frac{19}{3} \text{ or } x = 3$$

The solutions are: $x = \frac{19}{3}$, $y = -\frac{17}{6}$ and $x = 3$, $y = \frac{1}{2}$.

EXERCISE 1D

13

1 Solve the simultaneous equations.

a $y = 6 - x$

b $x + 4y = 6$

c $3y = x + 10$

$y = x^2$

$x^2 + 2xy = 8$

$x^2 + y^2 = 100$

d $y = 3x - 1$

e $x - 2y = 6$

f $4x - 3y = 5$

$8x^2 - 2xy = 4$

$x^2 - 4xy = 20$

$x^2 + 3xy = 10$

g $2x + y = 8$

h $2y - x = 5$

i $x + 2y = 6$

$xy = 8$

$2x^2 - 3y^2 = 15$

$x^2 + y^2 + 4xy = 24$

j $5x - 2y = 23$

k $x - 4y = 2$

l $2x - y = 14$

$x^2 - 5xy + y^2 = 1$

$xy = 12$

$y^2 = 8x + 4$

m $2x + 3y + 19 = 0$

n $x + 2y = 5$

o $x - 12y = 30$

$2x^2 + 3y = 5$

$x^2 + y^2 = 10$

$2y^2 - xy = 20$

2 The sum of two numbers is 26. The product of the two numbers is 153.

a What are the two numbers?

b If instead the product is 150 (and the sum is still 26), what would the two numbers now be?

3 The perimeter of a rectangle is 15.8 cm and its area is 13.5 cm^2 . Find the lengths of the sides of the rectangle.

- 4 The sum of the perimeters of two squares is 50 cm and the sum of the areas is 93.25 cm^2 .

Find the side length of each square.

- 5 The sum of the circumferences of two circles is $36\pi\text{ cm}$ and the sum of the areas is $170\pi\text{ cm}^2$.

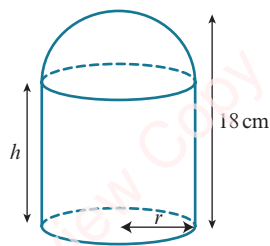
Find the radius of each circle.

- 6 A cuboid has sides of length 5 cm, $x\text{ cm}$ and $y\text{ cm}$. Given that $x + y = 20.5$ and the volume of the cuboid is 360 cm^3 , find the value of x and the value of y .

- 7 The diagram shows a solid formed by joining a hemisphere, of radius $r\text{ cm}$, to a cylinder, of radius $r\text{ cm}$ and height $h\text{ cm}$.

The total height of the solid is 18 cm and the surface area is $205\pi\text{ cm}^2$.

Find the value of r and the value of h .



TIP

The surface area, A , of a sphere with radius r is $A = 4\pi r^2$.

- 8 The line $y = 2 - x$ cuts the curve $5x^2 - y^2 = 20$ at the points A and B .

- a Find the coordinates of the points A and B .
b Find the length of the line AB .

- 9 The line $2x + 5y = 1$ meets the curve $x^2 + 5xy - 4y^2 + 10 = 0$ at the points A and B .

- a Find the coordinates of the points A and B .
b Find the midpoint of the line AB .

- 10 The line $7x + 2y = -20$ intersects the curve $x^2 + y^2 + 4x + 6y - 40 = 0$ at the points A and B . Find the length of the line AB .

- 11 The line $7y - x = 25$ cuts the curve $x^2 + y^2 = 25$ at the points A and B .

Find the equation of the perpendicular bisector of the line AB .

- 12 The straight line $y = x + 1$ intersects the curve $x^2 - y = 5$ at the points A and B .

Given that A lies below the x -axis and the point P lies on AB such that $AP : PB = 4 : 1$, find the coordinates of P .

- 13 The line $x - 2y = 1$ intersects the curve $x + y^2 = 9$ at two points, A and B .

Find the equation of the perpendicular bisector of the line AB .

PS

- 14 a Split 10 into two parts so that the difference between the squares of the parts is 60.
b Split N into two parts so that the difference between the squares of the parts is D .



WEB LINK

Try the *Elliptical crossings* resource on the Underground Mathematics website.

1.5 Solving more complex quadratic equations

You may be asked to solve an equation that is quadratic in some function of x .

WORKED EXAMPLE 1.10

Solve the equation $4x^4 - 37x^2 + 9 = 0$.

Answer

Method 1: Substitution method

$$4x^4 - 37x^2 + 9 = 0$$

$$\text{Let } y = x^2.$$

$$4y^2 - 37y + 9 = 0$$

$$(4y - 1)(y - 9) = 0$$

$$y = \frac{1}{4} \text{ or } y = 9$$

$$x^2 = \frac{1}{4} \text{ or } x^2 = 9$$

$$x = \pm \frac{1}{2} \text{ or } x = \pm 3$$

Method 2: Factorise directly

$$4x^4 - 37x^2 + 9 = 0$$

$$(4x^2 - 1)(x^2 - 9) = 0$$

$$x^2 = \frac{1}{4} \text{ or } x^2 = 9$$

$$x = \pm \frac{1}{2} \text{ or } x = \pm 3$$

Substitute x^2 for y .

WORKED EXAMPLE 1.11

Solve the equation $x - 4\sqrt{x} - 12 = 0$.

Answer

$$x - 4\sqrt{x} - 12 = 0$$

$$\text{Let } y = \sqrt{x}.$$

$$y^2 - 4y - 12 = 0$$

$$(y - 6)(y + 2) = 0$$

$$y = 6 \text{ or } y = -2$$

$$\sqrt{x} = 6 \text{ or } \sqrt{x} = -2$$

$$\therefore x = 36$$

Substitute \sqrt{x} for y .

$\sqrt{x} = -2$ has no solutions as \sqrt{x} is never negative.

WORKED EXAMPLE 1.12

Solve the equation $3(9^x) - 28(3^x) + 9 = 0$.

Answer

$$3(3^x)^2 - 28(3^x) + 9 = 0$$

Let $y = 3^x$.

$$3y^2 - 28y + 9 = 0$$

$$(3y - 1)(y - 9) = 0$$

$$y = \frac{1}{3} \text{ or } y = 9$$

Substitute 3^x for y .

$$3^x = \frac{1}{3} \text{ or } 3^x = 9$$

$\frac{1}{3} = 3^{-1}$ and $9 = 3^2$.

$$x = -1 \text{ or } x = 2$$

EXERCISE 1E

1 Find the real values of x that satisfy the following equations.

a $x^4 - 13x^2 + 36 = 0$

b $x^6 - 7x^3 - 8 = 0$

c $x^4 - 6x^2 + 5 = 0$

d $2x^4 - 11x^2 + 5 = 0$

e $3x^4 + x^2 - 4 = 0$

f $8x^6 - 9x^3 + 1 = 0$

g $x^4 + 2x^2 - 15 = 0$

h $x^4 + 9x^2 + 14 = 0$

i $x^8 - 15x^4 - 16 = 0$

j $32x^{10} - 31x^5 - 1 = 0$

k $\frac{9}{x^4} + \frac{5}{x^2} = 4$

l $\frac{8}{x^6} + \frac{7}{x^3} = 1$

2 Solve:

a $2x - 9\sqrt{x} + 10 = 0$

b $\sqrt{x}(\sqrt{x} + 1) = 6$

c $6x - 17\sqrt{x} + 5 = 0$

d $10x + \sqrt{x} - 2 = 0$

e $8x + 5 = 14\sqrt{x}$

f $3\sqrt{x} + \frac{5}{\sqrt{x}} = 16$

3 The curve $y = 2\sqrt{x}$ and the line $3y = x + 8$ intersect at the points A and B .

a Write down an equation satisfied by the x -coordinates of A and B .

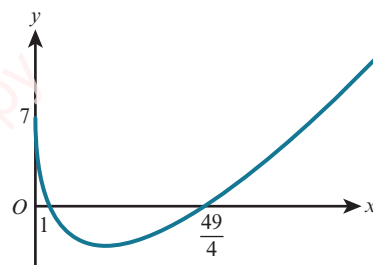
b Solve your equation in part a and, hence, find the coordinates of A and B .

c Find the length of the line AB .

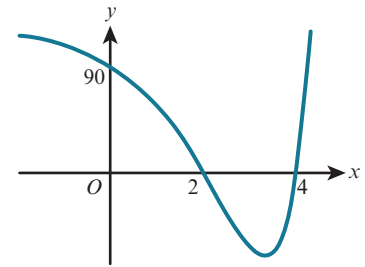
PS

4 The graph shows $y = ax + b\sqrt{x} + c$ for $x \geq 0$. The graph crosses the x -axis at the points $(1, 0)$ and $(\frac{49}{4}, 0)$ and it meets the y -axis at the point $(0, 7)$.

Find the value of a , the value of b and the value of c .



- PS** 5 The graph shows $y = a(2^{2x}) + b(2^x) + c$.
The graph crosses the axes at the points (2, 0), (4, 0) and (0, 90).
Find the value of a , the value of b and the value of c .



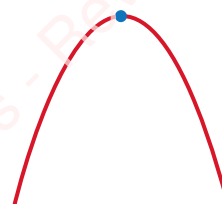
1.6 Maximum and minimum values of a quadratic function

The general form of a quadratic function is $f(x) = ax^2 + bx + c$, where a , b and c are constants and $a \neq 0$.

The shape of the graph of the function $f(x) = ax^2 + bx + c$ is called a **parabola**.
The orientation of the parabola depends on the value of a , the coefficient of x^2 .



If $a > 0$, the curve has a **minimum point** that occurs at the lowest point of the curve.



If $a < 0$, the curve has a **maximum point** that occurs at the highest point of the curve.



TIP

A point where the gradient is zero is called a **stationary point** or a **turning point**.

In the case of a parabola, we also call this point the **vertex** of the parabola.

Every parabola has a line of symmetry that passes through the vertex.

One important skill that we will develop during this course is 'graph sketching'.

A sketch graph needs to show the key features and behaviour of a function.

When we sketch the graph of a quadratic function, the key features are:

- the general shape of the graph
- the axis intercepts
- the coordinates of the vertex.

Depending on the context we should show some or all of these.

The skills you developed earlier in this chapter should enable you to draw a clear sketch graph for any quadratic function.



WEB LINK

Try the *Quadratic symmetry* resource on the Underground Mathematics website for a further explanation of this.

i DID YOU KNOW?



If we rotate a parabola about its axis of symmetry, we obtain a three-dimensional shape called a *paraboloid*. Satellite dishes are paraboloid shapes. They have the special property that light rays are reflected to meet at a single point, if they are parallel to the axis of symmetry of the dish. This single point is called the *focus* of the satellite dish. A receiver at the focus of the paraboloid then picks up all the information entering the dish.

WORKED EXAMPLE 1.13

For the function $f(x) = x^2 - 3x - 4$:

- Find the axes crossing points for the graph of $y = f(x)$.
- Sketch the graph of $y = f(x)$ and find the coordinates of the vertex.

Answer

a $y = x^2 - 3x - 4$

When $x = 0$, $y = -4$

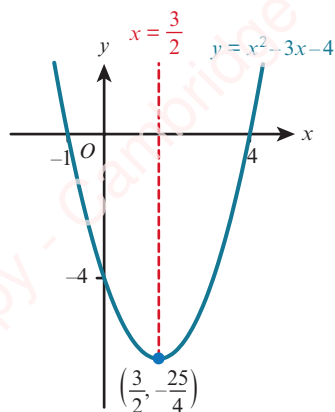
When $y = 0$, $x^2 - 3x - 4 = 0$

$$(x + 1)(x - 4) = 0$$

$$x = -1 \text{ or } x = 4$$

Axes crossing points are: $(0, -4)$, $(-1, 0)$ and $(4, 0)$.

- The line of symmetry cuts the x -axis midway between the axis intercepts of -1 and 4 .



Hence, the line of symmetry is $x = \frac{3}{2}$.

When $x = \frac{3}{2}$, $y = \left(\frac{3}{2}\right)^2 - 3\left(\frac{3}{2}\right) - 4$

$$y = -\frac{25}{4}$$

Since $a > 0$, the curve is U-shaped.

Minimum point = $\left(\frac{3}{2}, -\frac{25}{4}\right)$



TIP

Write your answer in fraction form.

Completing the square is an alternative method that can be used to help sketch the graph of a quadratic function.

Completing the square for $x^2 - 3x - 4$ gives:

$$\begin{aligned} x^2 - 3x - 4 &= \left(x - \frac{3}{2}\right)^2 - \left(\frac{3}{2}\right)^2 - 4 \\ &= \left(x - \frac{3}{2}\right)^2 - \frac{25}{4} \end{aligned}$$

This part of the expression is a square so it will be at least zero. The smallest value it can be is 0. This occurs when $x = \frac{3}{2}$.

The minimum value of $\left(x - \frac{3}{2}\right)^2 - \frac{25}{4}$ is $-\frac{25}{4}$ and this minimum occurs when $x = \frac{3}{2}$.

So the function $f(x) = x^2 - 3x - 4$ has a minimum point at $\left(\frac{3}{2}, -\frac{25}{4}\right)$.

The line of symmetry is $x = \frac{3}{2}$.

KEY POINT 1.3

If $f(x) = ax^2 + bx + c$ is written in the form $f(x) = a(x - h)^2 + k$, then:

- the line of symmetry is $x = h = -\frac{b}{2a}$
- if $a > 0$, there is a minimum point at (h, k)
- if $a < 0$, there is a maximum point at (h, k) .

WORKED EXAMPLE 1.14

Sketch the graph of $y = 16x - 7 - 4x^2$.

Answer

Completing the square gives:

$$16x - 7 - 4x^2 = 9 - 4(x - 2)^2$$

The maximum value of $9 - 4(x - 2)^2$ is 9 and this maximum occurs when $x = 2$.

So the function $f(x) = 16x - 7 - 4x^2$ has a maximum point at $(2, 9)$.

The line of symmetry is $x = 2$.

When $x = 0$, $y = -7$

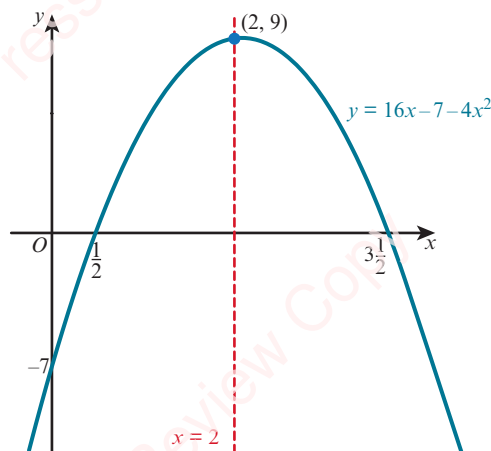
When $y = 0$, $9 - 4(x - 2)^2 = 0$

$$(x - 2)^2 = \frac{9}{4}$$

$$x - 2 = \pm \frac{3}{2}$$

$$x = 3\frac{1}{2} \text{ or } x = \frac{1}{2}$$

This part of the expression is a square so $(x - 2)^2 \geq 0$. The smallest value it can be is 0. This occurs when $x = 2$. Since this is being *subtracted* from 9, the whole expression is *greatest* when $x = 2$.



EXERCISE 1F

- 1 Use the symmetry of each quadratic function to find the maximum or minimum points.

Sketch each graph, showing all axes crossing points.

a $y = x^2 - 6x + 8$

b $y = x^2 + 5x - 14$

c $y = 2x^2 + 7x - 15$

d $y = 12 + x - x^2$

- 2 a Express $2x^2 - 8x + 5$ in the form $a(x + b)^2 + c$, where a , b and c are integers.

b Write down the equation of the line of symmetry for the graph of $y = 2x^2 - 8x + 1$.

- 3 a Express $7 + 5x - x^2$ in the form $a - (x + b)^2$, where a , and b are constants.

b Find the coordinates of the turning point of the curve $y = 7 + 5x - x^2$, stating whether it is a maximum or a minimum point.

- 4 a Express $2x^2 + 9x + 4$ in the form $a(x + b)^2 + c$, where a , b and c are constants.

b Write down the coordinates of the vertex of the curve $y = 2x^2 + 9x + 4$, and state whether this is a maximum or a minimum point.

- 5 Find the minimum value of $x^2 - 7x + 8$ and the corresponding value of x .

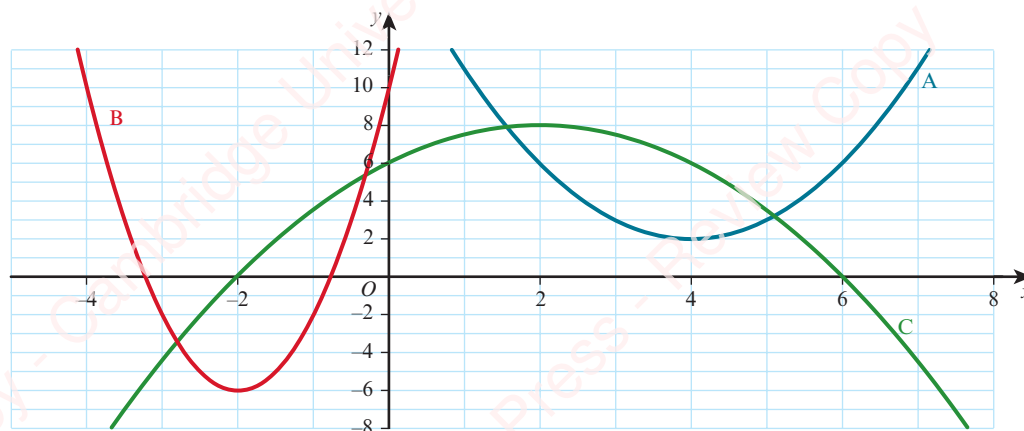
- 6 a Write $1 + x - 2x^2$ in the form $p - 2(x - q)^2$.

b Sketch the graph of $y = 1 + x - 2x^2$.

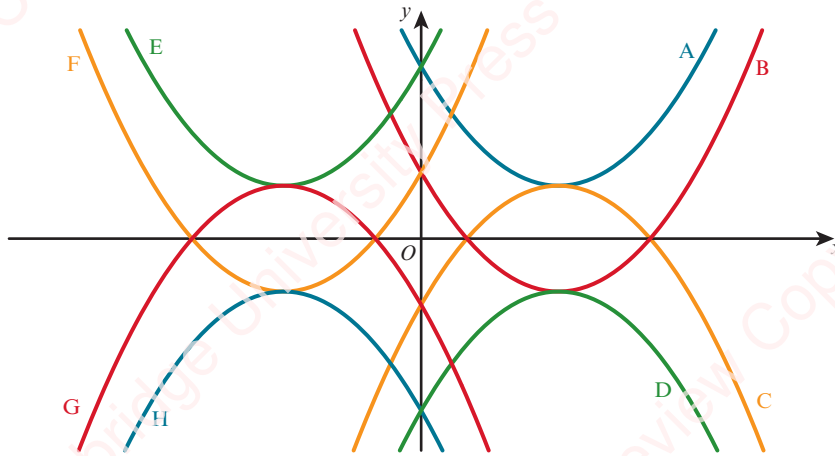
- 7 Prove that the graph of $y = 4x^2 + 2x + 5$ does not intersect the x -axis.

PS

- 8 Find the equations of parabolas A, B and C.



- PS** 9 The diagram shows eight parabolas.
- The equations of two of the parabolas are $y = x^2 - 6x + 13$ and $y = -x^2 - 6x - 5$.
- Identify these two parabolas and find the equation of each of the other parabolas.
 - Use graphing software to create your own parabola pattern.



[This question is an adaptation of *Which parabola?* on the Underground Mathematics website and was developed from an original idea from NRICH.]

- PS** 10 A parabola passes through the points $(0, -24)$, $(-2, 0)$ and $(4, 0)$.
Find the equation of the parabola.
- PS** 11 A parabola passes through the points $(-2, -3)$, $(2, 9)$ and $(6, 5)$.
Find the equation of the parabola.
- P** 12 Prove that any quadratic that has its vertex at (p, q) has an equation of the form $y = ax^2 - 2apx + ap^2 + q$ for some non-zero real number a .

1.7 Solving quadratic inequalities

We already know how to solve linear inequalities.

The following text shows two examples.

$$\text{Solve } 2(x + 7) < -4.$$

$$2x + 14 < -4$$

$$2x < -18$$

$$x < -9$$

Expand brackets.

Subtract 14 from both sides.

Divide both sides by 2.

$$\text{Solve } 11 - 2x \geq 5.$$

$$-2x \geq -6$$

$$x \leq 3$$

Subtract 11 from both sides.

Divide both sides by -2 .

The second of the previous examples uses the important rule that:

KEY POINT 1.4

If we multiply or divide both sides of an inequality by a negative number, then the inequality sign must be reversed.

Quadratic inequalities can be solved by sketching a graph and considering when the graph is above or below the x -axis.

WORKED EXAMPLE 1.15

Solve $x^2 - 5x - 14 > 0$.

Answer

Sketch the graph of $y = x^2 - 5x - 14$.

When $y = 0$, $x^2 - 5x - 14 = 0$

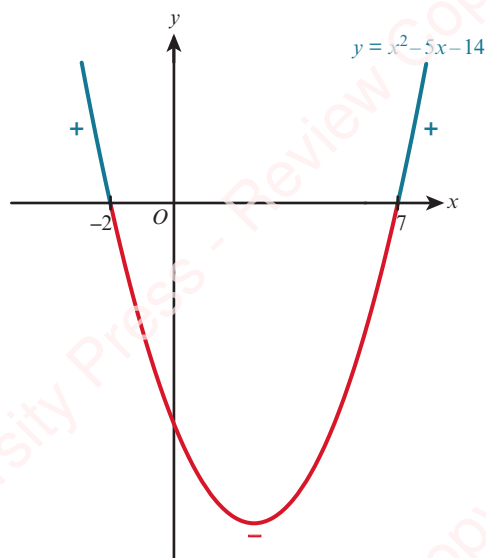
$$(x + 2)(x - 7) = 0$$

$$x = -2 \text{ or } x = 7$$

So the x -axis crossing points are -2 and 7 .

For $x^2 - 5x - 14 > 0$ we need to find the range of values of x for which the curve is positive (above the x -axis).

The solution is $x < -2$ or $x > 7$.



TIP

For the sketch graph, you only need to identify which way up the graph is and where the x -intercepts are: you do not need to find the vertex or the y -intercept.

WORKED EXAMPLE 1.16

Solve $2x^2 + 3x \leq 27$.

Answer

Rearranging: $2x^2 + 3x - 27 \leq 0$

Sketch the graph of $y = 2x^2 + 3x - 27$.

When $y = 0$, $2x^2 + 3x - 27 = 0$

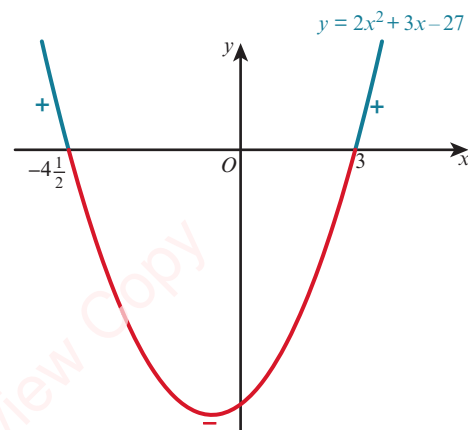
$$(2x + 9)(x - 3) = 0$$

$$x = -4\frac{1}{2} \text{ or } x = 3$$

So the x -axis intercepts are $-4\frac{1}{2}$ and 3 .

For $2x^2 + 3x - 27 \leq 0$ we need to find the range of values of x for which the curve is either zero or negative (below the x -axis).

The solution is $-4\frac{1}{2} \leq x \leq 3$.



EXPLORE 1.3

Ivan is asked to solve the inequality $\frac{2x-4}{x} \geq 7$.

This is his solution:

Multiply both sides by x : $2x - 4 \geq 7x$

Subtract $2x$ from both sides: $-4 \geq 5x$

Divide both sides by 5 : $x \leq -\frac{4}{5}$

Anika checks to see if $x = -1$ satisfies the original inequality.

She writes:

When $x = -1$: $(2(-1) - 4) \div (-1) = 6$

Hence, $x = -1$ is a value of x that does not satisfy the original inequality.

So Ivan's solution must be incorrect!

Discuss Ivan's solution with your classmates and explain Ivan's error.

How could Ivan have approached this problem to obtain a correct solution?

EXERCISE 1G

1 Solve:

a $x(x-3) \leq 0$

b $(x-3)(x+2) > 0$

c $(x-6)(x-4) \leq 0$

d $(2x+3)(x-2) < 0$

e $(5-x)(x+6) \geq 0$

f $(1-3x)(2x+1) < 0$

2 Solve:

a $x^2 - 25 \geq 0$

b $x^2 + 7x + 10 \leq 0$

c $x^2 + 6x - 7 > 0$

d $14x^2 + 17x - 6 \leq 0$

e $6x^2 - 23x + 20 < 0$

f $4 - 7x - 2x^2 < 0$

3 Solve:

a $x^2 < 36 - 5x$

b $15x < x^2 + 56$

c $x(x+10) \leq 12 - x$

d $x^2 + 4x < 3(x+2)$

e $(x+3)(1-x) < x-1$

f $(4x+3)(3x-1) < 2x(x+3)$

g $(x+4)^2 \geq 25$

h $(x-2)^2 > 14 - x$

i $6x(x+1) < 5(7-x)$

4 Find the range of values of x for which $\frac{5}{2x^2 + x - 15} < 0$.

5 Find the set of values of x for which:

a $x^2 - 3x \geq 10$ and $(x-5)^2 < 4$

b $x^2 + 4x - 21 \leq 0$ and $x^2 - 9x + 8 > 0$

c $x^2 + x - 2 > 0$ and $x^2 - 2x - 3 \geq 0$

6 Find the range of values of x for which $2^{x^2 - 3x - 40} > 1$.

E

7 Solve:

a $\frac{x}{x-1} \geq 3$

b $\frac{x(x-1)}{x+1} > x$

c $\frac{x^2-9}{x-1} \geq 4$

d $\frac{x^2-2x-15}{x-2} \geq 0$

e $\frac{x^2+4x-5}{x^2-4} \leq 0$

f $\frac{x-3}{x+4} \geq \frac{x+2}{x-5}$

1.8 The number of roots of a quadratic equation

If $f(x)$ is a function, then we call the solutions to the equation $f(x) = 0$ the **roots** of $f(x)$.

Consider solving the following three quadratic equations of the form $ax^2 + bx + c = 0$

using the formula $x = \frac{-b \pm \sqrt{b^2 - 4ac}}{2a}$.

$x^2 + 2x - 8 = 0$ $x = \frac{-2 \pm \sqrt{2^2 - 4 \times 1 \times (-8)}}{2 \times 1}$ $x = \frac{-2 \pm \sqrt{36}}{2}$ $x = 2$ or $x = -4$ two distinct real roots	$x^2 + 6x + 9 = 0$ $x = \frac{-6 \pm \sqrt{6^2 - 4 \times 1 \times 9}}{2 \times 1}$ $x = \frac{-6 \pm \sqrt{0}}{2}$ $x = -3$ or $x = -3$ two equal real roots	$x^2 + 2x + 6 = 0$ $x = \frac{-2 \pm \sqrt{2^2 - 4 \times 1 \times 6}}{2 \times 1}$ $x = \frac{-2 \pm \sqrt{-20}}{2}$ no real solution no real roots
--	--	---

The part of the quadratic formula underneath the square root sign is called the **discriminant**.

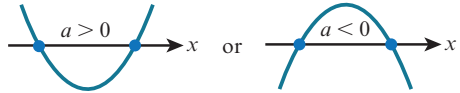
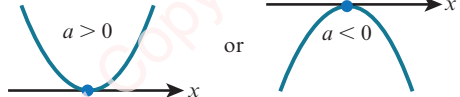
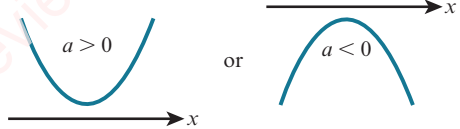
KEY POINT 1.5

The discriminant of $ax^2 + bx + c = 0$ is $b^2 - 4ac$.

The sign (positive, zero or negative) of the discriminant tells us how many roots there are for a particular quadratic equation.

$b^2 - 4ac$	Nature of roots
> 0	two distinct real roots
$= 0$	two equal real roots (or 1 repeated real root)
< 0	no real roots

There is a connection between the roots of the quadratic equation $ax^2 + bx + c = 0$ and the corresponding curve $y = ax^2 + bx + c$.

$b^2 - 4ac$	Nature of roots of $ax^2 + bx + c = 0$	Shape of curve $y = ax^2 + bx + c$
> 0	two distinct real roots	The curve cuts the x -axis at two distinct points. 
$= 0$	two equal real roots (or 1 repeated real root)	The curve touches the x -axis at one point. 
< 0	no real roots	The curve is entirely above or entirely below the x -axis. 

WORKED EXAMPLE 1.17

Find the values of k for which the equation $4x^2 + kx + 1 = 0$ has two equal roots.

Answer

For two equal roots: $b^2 - 4ac = 0$

$$k^2 - 4 \times 4 \times 1 = 0$$

$$k^2 = 16$$

$$k = -4 \text{ or } k = 4$$

WORKED EXAMPLE 1.18

Find the values of k for which $x^2 - 5x + 9 = k(5 - x)$ has two equal roots.

Answer

$$x^2 - 5x + 9 = k(5 - x) \quad \dots \dots \dots \text{Rearrange the equation into the form } ax^2 + bx + c = 0.$$

$$x^2 - 5x + 9 - 5k + kx = 0$$

$$x^2 + (k - 5)x + 9 - 5k = 0$$

For two equal roots: $b^2 - 4ac = 0$

$$(k - 5)^2 - 4 \times 1 \times (9 - 5k) = 0$$

$$k^2 - 10k + 25 - 36 + 20k = 0$$

$$k^2 + 10k - 11 = 0$$

$$(k + 11)(k - 1) = 0$$

$$k = -11 \text{ or } k = 1$$

WORKED EXAMPLE 1.19

Find the values of k for which $kx^2 - 2kx + 8 = 0$ has two distinct roots.

Answer

$$kx^2 - 2kx + 8 = 0$$

For two distinct roots:

$$b^2 - 4ac > 0$$

$$(-2k)^2 - 4 \times k \times 8 > 0$$

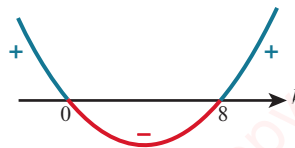
$$4k^2 - 32k > 0$$

$$4k(k - 8) > 0$$

Critical values are 0 and 8.

Note that the critical values are where $4k(k - 8) = 0$.

Hence, $k < 0$ or $k > 8$.



EXERCISE 1H

- 1 Find the discriminant for each equation and, hence, decide if the equation has two distinct roots, two equal roots or no real roots.

a $x^2 - 12x + 36 = 0$

b $x^2 + 5x - 36 = 0$

c $x^2 + 9x + 2 = 0$

d $4x^2 - 4x + 1 = 0$

e $2x^2 - 7x + 8 = 0$

f $3x^2 + 10x - 2 = 0$

- 2 Use the discriminant to determine the nature of the roots of $2 - 5x = \frac{4}{x}$.

- 3 The equation $x^2 + bx + c = 0$ has roots -5 and 7 .

Find the value of b and the value of c .

- 4 Find the values of k for which the following equations have two equal roots.

a $x^2 + kx + 4 = 0$

b $4x^2 + 4(k - 2)x + k = 0$

c $(k + 2)x^2 + 4k = (4k + 2)x$

d $x^2 - 2x + 1 = 2k(k - 2)$

e $(k + 1)x^2 + kx - 2k = 0$

f $4x^2 - (k - 2)x + 9 = 0$

- 5 Find the values of k for which the following equations have two distinct roots.

a $x^2 + 8x + 3 = k$

b $2x^2 - 5x = 4 - k$

c $kx^2 - 4x + 2 = 0$

d $kx^2 + 2(k - 1)x + k = 0$

e $2x^2 = 2(x - 1) + k$

f $kx^2 + (2k - 5)x = 1 - k$

- 6 Find the values of k for which the following equations have no real roots.

a $kx^2 - 4x + 8 = 0$

b $3x^2 + 5x + k + 1 = 0$

c $2x^2 + 8x - 5 = kx^2$

d $2x^2 + k = 3(x - 2)$

e $kx^2 + 2kx = 4x - 6$

f $kx^2 + kx = 3x - 2$

- 7 The equation $kx^2 + px + 5 = 0$ has repeated real roots.

Find k in terms of p .

- 8 Find the range of values of k for which the equation $kx^2 - 5x + 2 = 0$ has real roots.

- P** 9 Prove that the roots of the equation $2kx^2 + 5x - k = 0$ are real and distinct for all real values of k .

- P** 10 Prove that the roots of the equation $x^2 + (k - 2)x - 2k = 0$ are real and distinct for all real values of k .

- P** 11 Prove that $x^2 + kx + 2 = 0$ has real roots if $k \geq 2\sqrt{2}$.

For which other values of k does the equation have real roots?


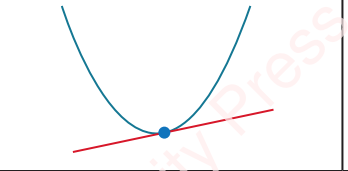
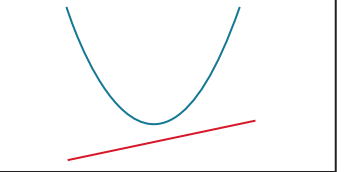


WEB LINK

Try the *Discriminating* resource on the Underground Mathematics website.

1.9 Intersection of a line and a quadratic curve

When considering the intersection of a straight line and a parabola, there are three possible situations.

Situation 1	Situation 2	Situation 3
		
two points of intersection	one point of intersection	no points of intersection
The line cuts the curve at two distinct points.	The line touches the curve at one point. This means that the line is a tangent to the curve.	The line does not intersect the curve.

We have already learnt that to find the points of intersection of a straight line and a quadratic curve, we solve their equations simultaneously.

The discriminant of the resulting equation then enables us to say how many points of intersection there are. The three possible situations are shown in the following table.

$b^2 - 4ac$	Nature of roots	Line and curve
> 0	two distinct real roots	two distinct points of intersection
$= 0$	two equal real roots (repeated roots)	one point of intersection (line is a tangent)
< 0	no real roots	no points of intersection

WORKED EXAMPLE 1.20

Find the value of k for which $y = x + k$ is a tangent to the curve $y = x^2 + 5x + 2$.

Answer

$$x^2 + 5x + 2 = x + k$$

$$x^2 + 4x + (2 - k) = 0$$

Since the line is a tangent to the curve, the discriminant of the quadratic must be zero, so:

$$b^2 - 4ac = 0$$

$$4^2 - 4 \times 1 \times (2 - k) = 0$$

$$16 - 8 + 4k = 0$$

$$4k = -8$$

$$k = -2$$

WORKED EXAMPLE 1.21

Find the set of values of k for which $y = kx - 1$ intersects the curve $y = x^2 - 2x$ at two distinct points.

Answer

$$x^2 - 2x = kx - 1$$

$$x^2 - (k+2)x + 1 = 0$$

Since the line intersects the curve at two distinct points, we must have discriminant > 0 .

$$b^2 - 4ac > 0$$

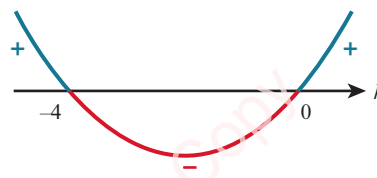
$$(k+2)^2 - 4 \times 1 \times 1 > 0$$

$$k^2 + 4k > 0$$

$$k(k+4) > 0$$

Critical values are -4 and 0 .

Hence, $k < -4$ or $k > 0$.



This next example involves a more general quadratic equation. Our techniques for finding the conditions for intersection of a straight line and a quadratic equation will work for this more general quadratic equation too.

WORKED EXAMPLE 1.22

Find the set of values of k for which the line $2x + y = k$ does not intersect the curve $xy = 8$.

Answer

Substituting $y = k - 2x$ into $xy = 8$ gives:

$$x(k - 2x) = 8$$

$$2x^2 - kx + 8 = 0$$

Since the line and curve do not intersect, we must have discriminant < 0 .

$$b^2 - 4ac < 0$$

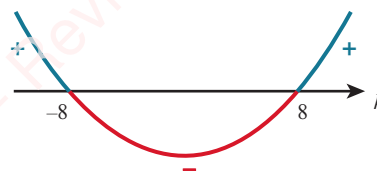
$$(-k)^2 - 4 \times 2 \times 8 < 0$$

$$k^2 - 64 < 0$$

$$(k+8)(k-8) < 0$$

Critical values are -8 and 8 .

Hence, $-8 < k < 8$.



EXERCISE 1I

- 1 Find the values of k for which the line $y = kx + 1$ is a tangent to the curve $y = x^2 - 7x + 2$.
- 2 Find the values of k for which the x -axis is a tangent to the curve $y = x^2 - (k + 3)x + (3k + 4)$.
- 3 Find the value of k for which the line $x + ky = 12$ is a tangent to the curve $y = \frac{5}{x - 2}$.
Can you explain graphically why there is only one such value of k ? (You may want to use graph-drawing software to help with this.)
- 4 The line $y = k - 3x$ is a tangent to the curve $x^2 + 2xy - 20 = 0$.
 - a Find the possible values of k .
 - b For each of these values of k , find the coordinates of the point of contact of the tangent with the curve.
- 5 Find the values of m for which the line $y = mx + 6$ is a tangent to the curve $y = x^2 - 4x + 7$.
For each of these values of m , find the coordinates of the point where the line touches the curve.
- 6 Find the set of values of k for which the line $y = 2x - 1$ intersects the curve $y = x^2 + kx + 3$ at two distinct points.
- 7 Find the set of values of k for which the line $x + 2y = k$ intersects the curve $xy = 6$ at two distinct points.
- 8 Find the set of values of k for which the line $y = k - x$ cuts the curve $y = 5 - 3x - x^2$ at two distinct points.
- 9 Find the set of values of m for which the line $y = mx + 5$ does not meet the curve $y = x^2 - x + 6$.
- 10 Find the set of values of k for which the line $y = 2x - 10$ does not meet the curve $y = x^2 - 6x + k$.
- 11 Find the value of k for which the line $y = kx + 6$ is a tangent to the curve $x^2 + y^2 - 10x + 8y = 84$.
- P** 12 The line $y = mx + c$ is a tangent to the curve $y = x^2 - 4x + 4$.
Prove that $m^2 + 8m + 4c = 0$.
- P** 13 The line $y = mx + c$ is a tangent to the curve $ax^2 + by^2 = c$, where a, b, c and m are constants.
Prove that $m^2 = \frac{abc - a}{b}$.

Checklist of learning and understanding

Quadratic equations can be solved by:

- factorisation
- completing the square
- using the quadratic formula $x = \frac{-b \pm \sqrt{b^2 - 4ac}}{2a}$.

Solving simultaneous equations where one is linear and one is quadratic

- Rearrange the linear equation to make either x or y the subject.
- Substitute this for x or y in the quadratic equation and then solve.

Maximum and minimum points and lines of symmetry

For a quadratic function $f(x) = ax^2 + bx + c$ that is written in the form $f(x) = a(x - h)^2 + k$:

- the line of symmetry is $x = h = -\frac{b}{2a}$
- if $a > 0$, there is a minimum point at (h, k)
- if $a < 0$, there is a maximum point at (h, k) .

Quadratic equation $ax^2 + bx + c = 0$ and corresponding curve $y = ax^2 + bx + c$


- Discriminant $= b^2 - 4ac$.
- If $b^2 - 4ac > 0$, then the equation $ax^2 + bx + c = 0$ has two distinct real roots.
- If $b^2 - 4ac = 0$, then the equation $ax^2 + bx + c = 0$ has two equal real roots.
- If $b^2 - 4ac < 0$, then the equation $ax^2 + bx + c = 0$ has no real roots.
- The condition for a quadratic equation to have real roots is $b^2 - 4ac \geq 0$.

Intersection of a line and a general quadratic curve

- If a line and a general quadratic curve intersect at one point, then the line is a tangent to the curve at that point.
- Solving simultaneously the equations for the line and the curve gives an equation of the form $ax^2 + bx + c = 0$.
- $b^2 - 4ac$ gives information about the intersection of the line and the curve.

$b^2 - 4ac$	Nature of roots	Line and parabola
> 0	two distinct real roots	two distinct points of intersection
$= 0$	two equal real roots	one point of intersection (line is a tangent)
< 0	no real roots	no points of intersection

END-OF-CHAPTER REVIEW EXERCISE 1

- 1 A curve has equation $y = 2xy + 5$ and a line has equation $2x + 5y = 1$.
The curve and the line intersect at the points A and B . Find the coordinates of the midpoint of the line AB . [4]
- 2 a Express $9x^2 - 15x$ in the form $(3x - a)^2 - b$. [2]
b Find the set of values of x that satisfy the inequality $9x^2 - 15x < 6$. [2]
- 3 Find the real roots of the equation $\frac{36}{x^4} + 4 = \frac{25}{x^2}$. [4]
- 4 Find the set of values of k for which the line $y = kx - 3$ intersects the curve $y = x^2 - 9x$ at two distinct points. [4]
- 5 Find the set of values of the constant k for which the line $y = 2x + k$ meets the curve $y = 1 + 2kx - x^2$ at two distinct points. [5]
- 6 a Find the coordinates of the vertex of the parabola $y = 4x^2 - 12x + 7$. [4]
b Find the values of the constant k for which the line $y = kx + 3$ is a tangent to the curve $y = 4x^2 - 12x + 7$. [3]
- 7 A curve has equation $y = 5 - 2x + x^2$ and a line has equation $y = 2x + k$, where k is a constant.
a Show that the x -coordinates of the points of intersection of the curve and the line are given by the equation $x^2 - 4x + (5 - k) = 0$. [1]
b For one value of k , the line intersects the curve at two distinct points, A and B , where the coordinates of A are $(-2, 13)$. Find the coordinates of B . [3]
c For the case where the line is a tangent to the curve at a point C , find the value of k and the coordinates of C . [4]
- 8 A curve has equation $y = x^2 - 5x + 7$ and a line has equation $y = 2x - 3$.
a Show that the curve lies above the x -axis. [3]
b Find the coordinates of the points of intersection of the line and the curve. [3]
c Write down the set of values of x that satisfy the inequality $x^2 - 5x + 7 < 2x - 3$. [1]
- 9 A curve has equation $y = 10x - x^2$.
a Express $10x - x^2$ in the form $a - (x + b)^2$. [3]
b Write down the coordinates of the vertex of the curve. [2]
c Find the set of values of x for which $y \leq 9$. [3]
-  10 A line has equation $y = kx + 6$ and a curve has equation $y = x^2 + 3x + 2k$, where k is a constant.
i For the case where $k = 2$, the line and the curve intersect at points A and B .
Find the distance AB and the coordinates of the mid-point of AB . [5]
ii Find the two values of k for which the line is a tangent to the curve. [4]



11 A curve has equation $y = x^2 - 4x + 4$ and a line has the equation $y = mx$, where m is a constant.

i For the case where $m = 1$, the curve and the line intersect at the points A and B .

Find the coordinates of the mid-point of AB .

[4]

ii Find the non-zero value of m for which the line is a tangent to the curve, and find the coordinates of the point where the tangent touches the curve.

[5]

Cambridge International AS & A Level Mathematics 9709 Paper 11 Q7 June 2013



12 i Express $2x^2 - 4x + 1$ in the form $a(x + b)^2 + c$ and hence state the coordinates of the minimum point, A , on the curve $y = 2x^2 - 4x + 1$.

[4]

The line $x - y + 4 = 0$ intersects the curve $y = 2x^2 - 4x + 1$ at the points P and Q .

It is given that the coordinates of P are $(3, 7)$.

ii Find the coordinates of Q .

[3]

iii Find the equation of the line joining Q to the mid-point of AP .

[3]

Cambridge International AS & A Level Mathematics 9709 Paper 11 Q10 June 2011

Chapter 2

Functions

In this chapter you will learn how to:

- understand the terms function, domain, range, one-one function, inverse function and composition of functions
- identify the range of a given function in simple cases, and find the composition of two given functions
- determine whether or not a given function is one-one, and find the inverse of a one-one function in simple cases
- illustrate in graphical terms the relation between a one-one function and its inverse
- understand and use the transformations of the graph $y = f(x)$ given by $y = f(x) + a$, $y = f(x + a)$, $y = af(x)$, $y = f(ax)$ and simple combinations of these.

PREREQUISITE KNOWLEDGE

Where it comes from	What you should be able to do	Check your skills
IGCSE / O Level Mathematics	Find an output for a given function.	1 If $f(x) = 3x - 2$, find $f(4)$.
IGCSE / O Level Mathematics	Find a composite function.	2 If $f(x) = 2x + 1$ and $g(x) = 1 - x$, find $fg(x)$.
IGCSE / O Level Mathematics	Find the inverse of a simple function.	3 If $f(x) = 5x + 4$, find $f^{-1}(x)$.
Chapter 1	Complete the square.	4 Express $2x^2 - 12x + 5$ in the form $a(x + b)^2 + c$.

Why do we study functions?

At IGCSE / O Level, you learnt how to interpret expressions as functions with inputs and outputs and find simple composite functions and simple inverse functions.

There are many situations in the real world that can be modelled as functions. Some examples are:

- the temperature of a hot drink as it cools over time
- the height of a valve on a bicycle tyre as the bicycle travels along a horizontal road
- the depth of water in a conical container as it is filled from a tap
- the number of bacteria present after the start of an experiment.

Modelling these situations using appropriate functions enables us to make predictions about real-life situations, such as: How long will it take for the number of bacteria to exceed 5 billion?

In this chapter we will develop a deeper understanding of functions and their special properties.

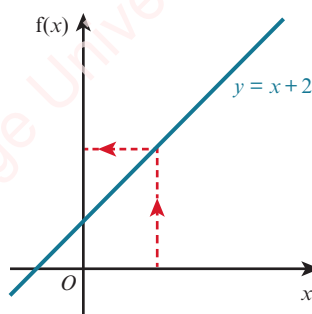
2.1 Definition of a function

A **function** is a relation that uniquely associates members of one set with members of another set.

An alternative name for a function is a **mapping**.

A function can be either a **one-one** function or a **many-one** function.

The function $x \mapsto x + 2$, where $x \in \mathbb{R}$ is an example of a one-one function.



WEB LINK

Try the *Thinking about functions* and *Combining functions* resources on the Underground Mathematics website.



TIP

$x \in \mathbb{R}$ means that x belongs to the set of real numbers.

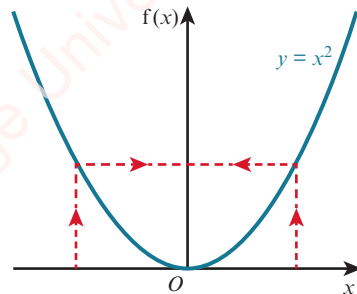
A one-one function has one output value for each input value. Equally important is the fact that for each output value appearing there is only one input value resulting in this output value.

We can write this function as $f : x \mapsto x + 2$ for $x \in \mathbb{R}$ or $f(x) = x + 2$ for $x \in \mathbb{R}$.

$f : x \mapsto x + 2$ is read as ‘the function f is such that x is mapped to $x + 2$ ’ or ‘ f maps x to $x + 2$ ’.

$f(x)$ is the output value of the function f when the input value is x . For example, when $f(x) = x + 2$, $f(5) = 5 + 2 = 7$.

The function $x \mapsto x^2$, where $x \in \mathbb{R}$ is a many-one function.

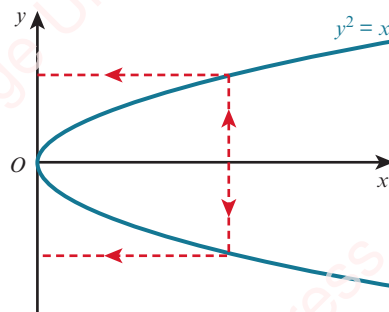


A many-one function has one output value for each input value but each output value can have more than one input value.

We can write this function as $f : x \mapsto x^2$ for $x \in \mathbb{R}$ or $f(x) = x^2$ for $x \in \mathbb{R}$.

$f : x \mapsto x^2$ is read as ‘the function f is such that x is mapped to x^2 ’ or ‘ f maps x to x^2 ’.

If we now consider the graph of $y^2 = x$:



We can see that the input value shown has two output values. This means that this relation is not a function.

The set of input values for a function is called the **domain** of the function.

When defining a function, it is important to also specify its domain.

The set of output values for a function is called the **range** (or codomain) of the function.

WORKED EXAMPLE 2.1

$f(x) = 5 - 2x$ for $x \in \mathbb{R}$, $-4 \leq x \leq 5$.

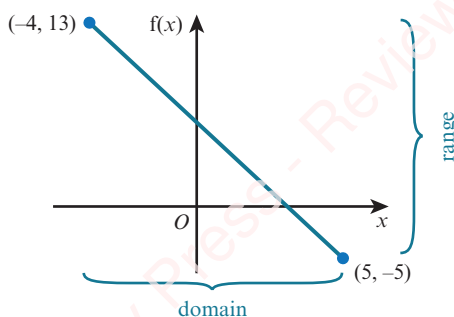
- a Write down the domain of the function f .
- b Sketch the graph of the function f .
- c Write down the range of the function f .

Answer

- a The domain is $-4 \leq x \leq 5$.
- b The graph of $y = 5 - 2x$ is a straight line with gradient -2 and y -intercept 5 .

When $x = -4$, $y = 5 - 2(-4) = 13$

When $x = 5$, $y = 5 - 2(5) = -5$



- c The range is $-5 \leq f(x) \leq 13$.

WORKED EXAMPLE 2.2

The function f is defined by $f(x) = (x - 3)^2 + 8$ for $-1 \leq x \leq 9$.

Sketch the graph of the function.

Find the range of f .

Answer

$f(x) = (x - 3)^2 + 8$ is a positive quadratic function so the graph

will be of the form .

$(x - 3)^2 + 8$

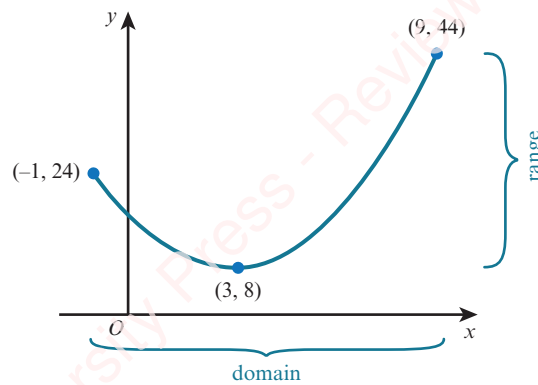
The minimum value of the expression is $0 + 8 = 8$ and this minimum occurs when $x = 3$.

So the function $f(x) = (x - 3)^2 + 8$ will have a minimum point at the point $(3, 8)$.

When $x = -1$, $y = (-1 - 3)^2 + 8 = 24$

When $x = 9$, $y = (9 - 3)^2 + 8 = 44$

The circled part of the expression is a square so it will always be ≥ 0 .
The smallest value it can be is 0 .
This occurs when $x = 3$.



The range is $8 \leq f(x) \leq 44$.

EXERCISE 2A

- 1 Which of these graphs represent functions? If the graph represents a function, state whether it is a one-one function or a many-one function.

a $y = 2x - 3$ for $x \in \mathbb{R}$

b $y = x^2 - 3$ for $x \in \mathbb{R}$

c $y = 2x^3 - 1$ for $x \in \mathbb{R}$

d $y = 2^x$ for $x \in \mathbb{R}$

e $y = \frac{10}{x}$ for $x \in \mathbb{R}, x > 0$

f $y = 3x^2 + 4$ for $x \in \mathbb{R}, x \geq 0$

g $y = \sqrt{x}$ for $x \in \mathbb{R}, x \geq 0$

h $y^2 = 4x$ for $x \in \mathbb{R}$



TIP

$x \in \mathbb{R}, x \geq 0$ is sometimes shortened to just $x \geq 0$.

- 2 a Represent on a graph the function:

$$x \mapsto \begin{cases} 9 - x^2 & \text{for } x \in \mathbb{R}, -3 \leq x \leq 2 \\ 2x + 1 & \text{for } x \in \mathbb{R}, 2 \leq x \leq 4 \end{cases}$$

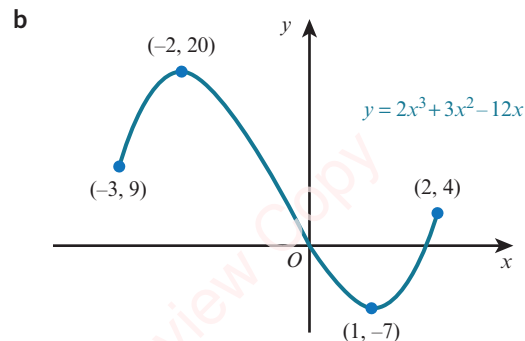
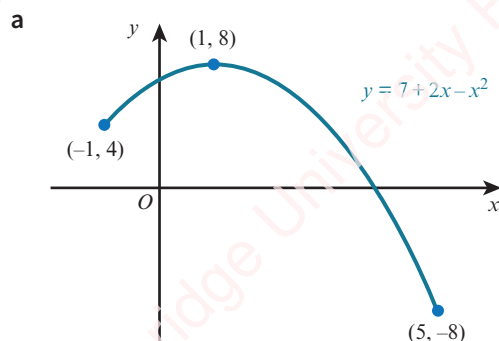
- b State the nature of the function.

- 3 a Represent on a graph the relation:

$$y = \begin{cases} x^2 + 1 & \text{for } 0 \leq x \leq 2 \\ 2x - 3 & \text{for } 2 \leq x \leq 4 \end{cases}$$

- b Explain why this relation is not a function.

- 4 State the domain and range for the functions represented by these two graphs.



5 Find the range for each of these functions.

a $f(x) = x + 4$ for $x > 8$

b $f(x) = 2x - 7$ for $-3 \leq x \leq 2$

c $f(x) = 7 - 2x$ for $-1 \leq x \leq 4$

d $f : x \mapsto 2x^2$ for $1 \leq x \leq 4$

e $f(x) = 2^x$ for $-5 \leq x \leq 4$

f $f(x) = \frac{12}{x}$ for $1 \leq x \leq 8$

6 Find the range for each of these functions.

a $f(x) = x^2 - 2$ for $x \in \mathbb{R}$

b $f : x \mapsto x^2 + 3$ for $-2 \leq x \leq 5$

c $f(x) = 3 - 2x^2$ for $x \leq 2$

d $f(x) = 7 - 3x^2$ for $-1 \leq x \leq 2$

7 Find the range for each of these functions.

a $f(x) = (x - 2)^2 + 5$ for $x \geq 2$

b $f(x) = (2x - 1)^2 - 7$ for $x \geq \frac{1}{2}$

c $f : x \mapsto 8 - (x - 5)^2$ for $4 \leq x \leq 10$

d $f(x) = 1 + \sqrt{x - 4}$ for $x \geq 4$

8 Express each function in the form $a(x + b)^2 + c$, where a , b and c are constants and, hence, state the range of each function.

a $f(x) = x^2 + 6x - 11$ for $x \in \mathbb{R}$

b $f(x) = 3x^2 - 10x + 2$ for $x \in \mathbb{R}$

9 Express each function in the form $a - b(x + c)^2$, where a , b and c are constants and, hence, state the range of each function.

a $f(x) = 7 - 8x - x^2$ for $x \in \mathbb{R}$

b $f(x) = 2 - 6x - 3x^2$ for $x \in \mathbb{R}$

10 a Represent, on a graph, the function:

$$f(x) = \begin{cases} 3 - x^2 & \text{for } 0 \leq x \leq 2 \\ 3x - 7 & \text{for } 2 \leq x \leq 4 \end{cases}$$

b Find the range of the function.

11 The function $f : x \mapsto x^2 + 6x + k$, where k is a constant, is defined for $x \in \mathbb{R}$.

Find the range of f in terms of k .

12 The function $g : x \mapsto 5 - ax - 2x^2$, where a is a constant, is defined for $x \in \mathbb{R}$.

Find the range of g in terms of a .

13 $f(x) = x^2 - 2x - 3$ for $x \in \mathbb{R}$, $-a \leq x \leq a$

If the range of the function f is $-4 \leq f(x) \leq 5$, find the value of a .

14 $f(x) = x^2 + x - 4$ for $x \in \mathbb{R}$, $a \leq x \leq a + 3$

If the range of the function f is $-2 \leq f(x) \leq 16$, find the possible values of a .

15 $f(x) = 2x^2 - 8x + 5$ for $x \in \mathbb{R}$, $0 \leq x \leq k$

a Express $f(x)$ in the form $a(x + b)^2 + c$.

b State the value of k for which the graph of $y = f(x)$ has a line of symmetry.

c For your value of k from part **b**, find the range of f .

16 Find the largest possible domain for each function and state the corresponding range.

a $f(x) = 3x - 1$

b $f(x) = x^2 + 2$

c $f(x) = 2^x$

d $f(x) = \frac{1}{x}$

e $f(x) = \frac{1}{x - 2}$

f $f(x) = \sqrt{x - 3} - 2$

2.2 Composite functions

Most functions that we meet can be described as combinations of two or more functions.

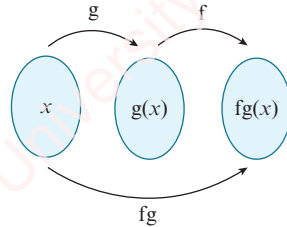
For example, the function $x \mapsto 3x - 7$ is the function ‘multiply by 3 and then subtract 7’.

It is a combination of the two functions g and f , where:

$$g : x \mapsto 3x \quad (\text{the function ‘multiply by 3’})$$

$$f : x \mapsto x - 7 \quad (\text{the function ‘subtract 7’})$$

So, $x \mapsto 3x - 7$ can be described as the function ‘first do g , then do f ’.



When one function is followed by another function, the resulting function is called a **composite function**.

KEY POINT 2.1

$fg(x)$ means the function g acts on x first, then f acts on the result.

There are three important points to remember about composite functions:

KEY POINT 2.2

fg only exists if the range of g is contained within the domain of f .

In general, $fg(x) \neq gf(x)$.

$ff(x)$ means you apply the function f twice.

EXPLORE 2.1

$$f(x) = 2x - 5 \text{ for } x \in \mathbb{R}$$

$$g(x) = 3x - 1 \text{ for } x \in \mathbb{R}$$

Three students are asked to find the composite function $gf(x)$.

Here are their solutions.

Student A

$$\begin{aligned} gf(x) &= (3x - 1)(2x - 5) \\ &= 6x^2 - 17x + 5 \end{aligned}$$

Student B

$$\begin{aligned} gf(x) &= 2(3x - 1) - 5 \\ &= 6x - 7 \end{aligned}$$

Student C

$$\begin{aligned} gf(x) &= 3(2x - 5) - 1 \\ &= 6x - 16 \end{aligned}$$

Discuss these solutions with your classmates.

Which student is correct? What error has each of the other students made?

WORKED EXAMPLE 2.3

$$f(x) = (x - 4)^2 - 1 \text{ for } x \in \mathbb{R}$$

$$g(x) = \frac{2x + 3}{x - 2} \text{ for } x \in \mathbb{R}, x > 2$$

Find $fg(4)$.

Answer

$$fg(4) = f\left(\frac{11}{2}\right)$$

$$= \left(\frac{11}{2} - 4\right)^2 - 1$$

$$= 1\frac{1}{4}$$

$$g \text{ acts on } 4 \text{ first and } g(4) = \frac{2(4) + 3}{4 - 2} = \frac{11}{2}.$$

f is the function 'subtract 4, square and then subtract 1'.

WORKED EXAMPLE 2.4

$$f(x) = 2x + 3 \text{ for } x \in \mathbb{R}$$

$$g(x) = x^2 - 1 \text{ for } x \in \mathbb{R}$$

Find: a $fg(x)$ b $gf(x)$ c $ff(x)$

Answer

$$\text{a } fg(x) = f(x^2 - 1)$$

$$= 2(x^2 - 1) + 3$$

$$= 2x^2 + 1$$

g acts on x first and $g(x) = x^2 - 1$.

f is the function 'double and add 3'.

$$\text{b } gf(x) = g(2x + 3)$$

$$= (2x + 3)^2 - 1$$

$$= 4x^2 + 12x + 9 - 1$$

$$= 4x^2 + 12x + 8$$

f acts on x first and $f(x) = 2x + 3$.

g is the function 'square and subtract 1'.

$$\text{c } ff(x) = f(2x + 3)$$

$$= 2(2x + 3) + 3$$

$$= 4x + 9$$

f is the function 'double and add 3'.

WORKED EXAMPLE 2.5

$$f : x \mapsto \frac{5}{x - 2} \text{ for } x \in \mathbb{R}, x \neq 2$$

$$g(x) = 3 - x^2 \text{ for } x \in \mathbb{R}$$

Find: a $fg(x)$ b $ff(x)$

Answer

$$\text{a } fg(x) = f(3 - x^2)$$

$$= \frac{5}{(3 - x^2) - 2}$$

$$= \frac{5}{1 - x^2}$$

g acts on x first and $g(x) = 3 - x^2$.

f is the function 'subtract 2 and then divide into 5'.

$$\begin{aligned}
 \text{b } ff(x) &= f\left(\frac{5}{x-2}\right) \\
 &= \frac{5}{\frac{5}{x-2}-2} \\
 &= \frac{5(x-2)}{5-2(x-2)} \\
 &= \frac{5x-10}{9-2x}
 \end{aligned}$$

Multiply numerator and denominator by $(x-2)$.

WORKED EXAMPLE 2.6

$$f(x) = x^2 + 4x \text{ for } x \in \mathbb{R}$$

$$g(x) = 3x - 1 \text{ for } x \in \mathbb{R}$$

Find the values of k for which the equation $fg(x) = k$ has real solutions.

Answer

$$\begin{aligned}
 fg(x) &= (3x-1)^2 + 4(3x-1) \\
 &= 9x^2 + 6x - 3
 \end{aligned}$$

Expand brackets and simplify.

When $fg(x) = k$,

$$\begin{aligned}
 9x^2 + 6x - 3 &= k \\
 9x^2 + 6x + (-3 - k) &= 0
 \end{aligned}$$

Rearrange and simplify.

For real solutions:

$$\begin{aligned}
 b^2 - 4ac &\geq 0 \\
 6^2 - 4 \times 9 \times (-3 - k) &\geq 0 \\
 144 + 36k &\geq 0 \\
 k &\geq -4
 \end{aligned}$$

EXERCISE 2B

1 $f(x) = x^2 + 6$ for $x \in \mathbb{R}$

$g(x) = \sqrt{x+3} - 2$ for $x \in \mathbb{R}, x \geq -3$

Find: a $fg(6)$

b $gf(4)$

c $ff(-3)$

2 $h: x \mapsto x + 5$ for $x \in \mathbb{R}, x > 0$

$k: x \mapsto \sqrt{x}$ for $x \in \mathbb{R}, x > 0$

Express each of the following in terms of h and/or k .

a $x \mapsto \sqrt{x} + 5$

b $x \mapsto \sqrt{x+5}$

c $x \mapsto x + 10$

3 $f(x) = ax + b$ for $x \in \mathbb{R}$

Given that $f(5) = 3$ and $f(3) = -3$:

a find the value of a and the value of b

b solve the equation $ff(x) = 4$.

4 $f: x \mapsto 2x + 3$ for $x \in \mathbb{R}$

$g: x \mapsto \frac{12}{1-x}$ for $x \in \mathbb{R}, x \neq 1$

a Find $gf(x)$.

b Solve the equation $gf(x) = 2$.

5 $g(x) = x^2 - 2$ for $x \in \mathbb{R}$

$h(x) = 2x + 5$ for $x \in \mathbb{R}$

a Find $gh(x)$.b Solve the equation $gh(x) = 14$.

6 $f(x) = x^2 + 1$ for $x \in \mathbb{R}$

$g(x) = \frac{3}{x-2}$ for $x \in \mathbb{R}, x \neq 2$

Solve the equation $fg(x) = 5$.

7 $g(x) = \frac{2}{x+1}$ for $x \in \mathbb{R}, x \neq -1$

$h(x) = (x+2)^2 - 5$ for $x \in \mathbb{R}$

Solve the equation $hg(x) = 11$.

8 $f: x \mapsto \frac{x+1}{2}$ for $x \in \mathbb{R}$

$g: x \mapsto \frac{2x+3}{x-1}$ for $x \in \mathbb{R}, x \neq 1$

Solve the equation $gf(x) = 1$.

9 $f(x) = \frac{x+1}{2x+5}$ for $x \in \mathbb{R}, x > 0$

Find an expression for $ff(x)$, giving your answer as a single fraction in its simplest form.

10 $f: x \mapsto x^2$ for $x \in \mathbb{R}$

$g: x \mapsto x+1$ for $x \in \mathbb{R}$

Express each of the following as a composite function, using only f and/or g .

a $x \mapsto (x+1)^2$

b $x \mapsto x^2 + 1$

c $x \mapsto x+2$

d $x \mapsto x^4$

e $x \mapsto x^2 + 2x + 2$

f $x \mapsto x^4 + 2x^2 + 1$

11 $f(x) = x^2 - 3x$ for $x \in \mathbb{R}$

$g(x) = 2x + 5$ for $x \in \mathbb{R}$

Show that the equation $gf(x) = 0$ has no real solutions.

12 $f(x) = k - 2x$ for $x \in \mathbb{R}$

$g(x) = \frac{2}{x}$ for $x \in \mathbb{R}, x \neq 0$

Find the values of k for which the equation $fg(x) = x$ has two equal roots.

13 $f(x) = x^2 - 3x$ for $x \in \mathbb{R}$

$g(x) = 2x - 5$ for $x \in \mathbb{R}$

Find the values of k for which the equation $gf(x) = k$ has real solutions.

14 $f(x) = \frac{x+5}{2x-1}$ for $x \in \mathbb{R}, x \neq \frac{1}{2}$

Show that $ff(x) = x$.

15 $f(x) = 2x^2 + 4x - 8$ for $x \in \mathbb{R}, x \geq k$

a Express $2x^2 + 4x - 8$ in the form $a(x+b)^2 + c$.b Find the least value of k for which the function is one-one.

16 $f(x) = x^2 - 2x + 4$ for $x \in \mathbb{R}$

a Find the set of values of x for which $f(x) \geq 7$.b Express $x^2 - 2x + 4$ in the form $(x-a)^2 + b$.c Write down the range of f .

17 $f(x) = x^2 - 5x$ for $x \in \mathbb{R}$

$g(x) = 2x + 3$ for $x \in \mathbb{R}$

a Find $fg(x)$.b Find the range of the function $fg(x)$.

- 18 $f(x) = \frac{2}{x+1}$ for $x \in \mathbb{R}$, $x \neq -1$
- Find $ff(x)$ and state the domain of this function.
 - Show that if $f(x) = ff(x)$ then $x^2 + x - 2 = 0$.
 - Find the values of x for which $f(x) = ff(x)$.

PS

19

$$P(x) = x^2 - 1 \text{ for } x \in \mathbb{R}$$

$$Q(x) = x + 2 \text{ for } x \in \mathbb{R}$$

$$R(x) = \frac{1}{x} \text{ for } x \in \mathbb{R}, x \neq 0$$

$$S(x) = \sqrt{x+1} - 1 \text{ for } x \in \mathbb{R}, x \geq -1$$

Functions P, Q, R and S are composed in some way to make a new function, $f(x)$.

For each of the following, write $f(x)$ in terms of the functions P, Q, R and/or S, and state the domain and range for each composite function.

a $f(x) = x^2 + 4x + 3$

b $f(x) = x^2 + 1$

c $f(x) = x$

d $f(x) = \frac{1}{x^2} + 1$

e $f(x) = \frac{1}{x+4}$

f $f(x) = x - 2\sqrt{x+1} + 1$

g $f(x) = x - 1$

2.3 Inverse functions

The **inverse of a function** $f(x)$ is the function that undoes what $f(x)$ has done.

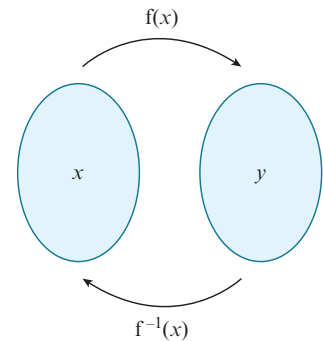
We write the inverse of the function $f(x)$ as $f^{-1}(x)$.

KEY POINT 2.3

$$ff^{-1}(x) = f^{-1}f(x) = x$$

The domain of $f^{-1}(x)$ is the range of $f(x)$.

The range of $f^{-1}(x)$ is the domain of $f(x)$.



43

It is important to remember that not every function has an inverse.

KEY POINT 2.4

An inverse function $f^{-1}(x)$ exists if, and only if, the function $f(x)$ is a one-one mapping.

You should already know how to find the inverse function of some simple one-one mappings.

We want to find the function $f^{-1}(x)$, so if we write $y = f^{-1}(x)$, then $f(y) = f(f^{-1}(x)) = x$, because f and f^{-1} are inverse functions. So if we write $x = f(y)$ and then rearrange it to get $y = \dots$, then the right-hand side will be $f^{-1}(x)$.

We find the inverse of the function $f(x) = 3x - 1$ by following these steps:

Step 1: Write the function as $y =$ \longrightarrow $y = 3x - 1$

Step 2: Interchange the x and y variables. \longrightarrow $x = 3y - 1$

Step 3: Rearrange to make y the subject. \longrightarrow $y = \frac{x+1}{3}$

Hence, if $f(x) = 3x - 1$, then $f^{-1}(x) = \frac{x+1}{3}$.

If f and f^{-1} are the same function, then f is called a **self-inverse function**.

For example, if $f(x) = \frac{1}{x}$ for $x \neq 0$, then $f^{-1}(x) = \frac{1}{x}$ for $x \neq 0$.

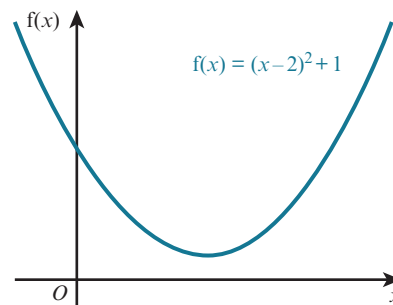
So $f(x) = \frac{1}{x}$ for $x \neq 0$ is a self-inverse function.

EXPLORE 2.2

The diagram shows the function $f(x) = (x-2)^2 + 1$ for $x \in \mathbb{R}$.

Discuss the following questions with your classmates.

- 1 What type of mapping is this function?
- 2 What are the coordinates of the vertex of the parabola?
- 3 What is the domain of the function?
- 4 What is the range of the function?
- 5 Does this function have an inverse?
- 6 If f has an inverse, what is it? If not, then how could you change the domain of f so that the function does have an inverse?



WORKED EXAMPLE 2.7

$$f(x) = \sqrt{x+2} - 7 \text{ for } x \in \mathbb{R}, x \geq -2$$

a Find an expression for $f^{-1}(x)$.

b Solve the equation $f^{-1}(x) = f(62)$.

Answer

a $f(x) = \sqrt{x+2} - 7$

Step 1: Write the function as $y =$ \longrightarrow $y = \sqrt{x+2} - 7$

Step 2: Interchange the x and y variables. \longrightarrow $x = \sqrt{y+2} - 7$

Step 3: Rearrange to make y the subject. \longrightarrow $x + 7 = \sqrt{y+2}$
 $(x + 7)^2 = y + 2$
 $y = (x + 7)^2 - 2$

$$f^{-1}(x) = (x + 7)^2 - 2$$

$$\begin{aligned}
 \text{b } f(62) &= \sqrt{62+2} - 7 = 1 \\
 (x+7)^2 - 2 &= 1 \\
 (x+7)^2 &= 3 \\
 x+7 &= \pm\sqrt{3} \\
 x &= -7 \pm \sqrt{3} \\
 x &= -7 - \sqrt{3} \text{ or } x = -7 + \sqrt{3}
 \end{aligned}$$

The range of f is $f(x) \geq -7$ so the domain of f^{-1} is $x \geq -7$.

Hence, the only solution of $f^{-1}(x) = f(62)$ is $x = -7 + \sqrt{3}$.

WORKED EXAMPLE 2.8

$$f(x) = 5 - (x - 2)^2 \text{ for } x \in \mathbb{R}, k \leq x \leq 6$$

- a State the smallest value of k for which f has an inverse.
 b For this value of k find an expression for $f^{-1}(x)$, and state the domain and range of f^{-1} .

Answer

- a The vertex of the graph of $y = 5 - (x - 2)^2$ is at the point $(2, 5)$.

$$\text{When } x = 6, y = 5 - 4^2 = -11$$

For the function f to have an inverse it must be a one-one function.

Hence, the smallest value of k is 2.

- b $f(x) = 5 - (x - 2)^2$

$$\text{Step 1: Write the function as } y = \longrightarrow y = 5 - (x - 2)^2$$

$$\text{Step 2: Interchange the } x \text{ and } y \text{ variables. } \longrightarrow x = 5 - (y - 2)^2$$

$$\begin{aligned}
 \text{Step 3: Rearrange to make } y \text{ the subject. } \longrightarrow (y - 2)^2 &= 5 - x \\
 y - 2 &= \sqrt{5 - x} \\
 y &= 2 + \sqrt{5 - x}
 \end{aligned}$$

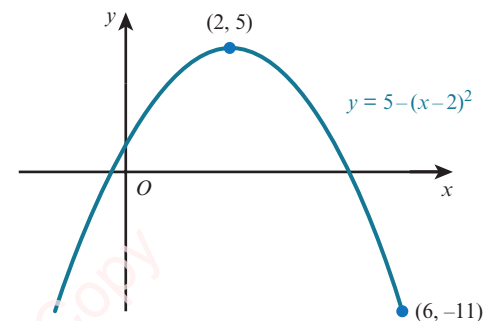
$$\text{Hence, } f^{-1}(x) = 2 + \sqrt{5 - x}.$$

The domain of f^{-1} is the same as the range of f .

Hence, the domain of f^{-1} is $-11 \leq x \leq 5$.

The range of f^{-1} is the same as the domain of f .

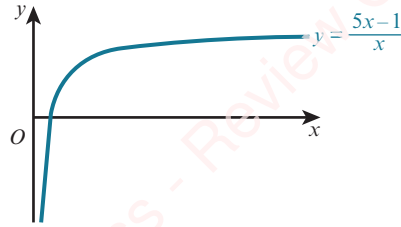
Hence, the range of f^{-1} is $2 \leq f^{-1}(x) \leq 6$.



EXERCISE 2C

- 1 Find an expression for $f^{-1}(x)$ for each of the following functions.
- a $f(x) = 5x - 8$ for $x \in \mathbb{R}$
- b $f(x) = x^2 + 3$ for $x \in \mathbb{R}, x \geq 0$
- c $f(x) = (x - 5)^2 + 3$ for $x \in \mathbb{R}, x \geq 5$
- d $f(x) = \frac{8}{x - 3}$ for $x \in \mathbb{R}, x \neq 3$
- e $f(x) = \frac{x + 7}{x + 2}$ for $x \in \mathbb{R}, x \neq -2$
- f $f(x) = (x - 2)^3 - 1$ for $x \in \mathbb{R}, x \geq 2$
- 2 $f : x \mapsto x^2 + 4x$ for $x \in \mathbb{R}, x \geq -2$
- a State the domain and range of f^{-1} .
- b Find an expression for $f^{-1}(x)$.
- 3 $f : x \mapsto \frac{5}{2x + 1}$ for $x \in \mathbb{R}, x \geq 2$
- a Find an expression for $f^{-1}(x)$.
- b Find the domain of f^{-1} .
- 4 $f : x \mapsto (x + 1)^3 - 4$ for $x \in \mathbb{R}, x \geq 0$
- a Find an expression for $f^{-1}(x)$.
- b Find the domain of f^{-1} .
- 5 $g : x \mapsto 2x^2 - 8x + 10$ for $x \in \mathbb{R}, x \geq 3$
- a Explain why g has an inverse.
- b Find an expression for $g^{-1}(x)$.
- 6 $f : x \mapsto 2x^2 + 12x - 14$ for $x \in \mathbb{R}, x \geq k$
- a Find the least value of k for which f is one-one.
- b Find an expression for $f^{-1}(x)$.
- 7 $f : x \mapsto x^2 - 6x$ for $x \in \mathbb{R}$
- a Find the range of f .
- b State, with a reason, whether f has an inverse.
- 8 $f(x) = 9 - (x - 3)^2$ for $x \in \mathbb{R}, k \leq x \leq 7$
- a State the smallest value of k for which f has an inverse.
- b For this value of k :
- i find an expression for $f^{-1}(x)$
- ii state the domain and range of f^{-1} .

9



The diagram shows the graph of $y = f^{-1}(x)$, where $f^{-1}(x) = \frac{5x-1}{x}$ for $x \in \mathbb{R}$, $0 < x \leq 3$.

- a** Find an expression for $f(x)$.
- b** State the domain of f .
- 10** $f(x) = 3x + a$ for $x \in \mathbb{R}$ $g(x) = b - 5x$ for $x \in \mathbb{R}$
 Given that $gf(-1) = 2$ and $g^{-1}(7) = 1$, find the value of a and the value of b .
- 11** $f(x) = 3x - 1$ for $x \in \mathbb{R}$ $g(x) = \frac{3}{2x-4}$ for $x \in \mathbb{R}$, $x \neq 2$
- a** Find expressions for $f^{-1}(x)$ and $g^{-1}(x)$.
- b** Show that the equation $f^{-1}(x) = g^{-1}(x)$ has two real roots.
- 12** $f : x \mapsto (2x - 1)^3 - 3$ for $x \in \mathbb{R}$, $1 \leq x \leq 3$
- a** Find an expression for $f^{-1}(x)$.
- b** Find the domain of f^{-1} .
- 13** $f : x \mapsto x^2 - 10x$ for $x \in \mathbb{R}$, $x \geq 5$
- a** Express $f(x)$ in the form $(x - a)^2 - b$.
- b** Find an expression for $f^{-1}(x)$ and state the domain of f^{-1} .
- 14** $f(x) = \frac{1}{x-1}$ for $x \in \mathbb{R}$, $x \neq 1$
- a** Find an expression for $f^{-1}(x)$.
- b** Show that if $f(x) = f^{-1}(x)$, then $x^2 - x - 1 = 0$.
- c** Find the values of x for which $f(x) = f^{-1}(x)$.
 Give your answer in surd form.
- 15** Determine which of the following functions are self-inverse functions.
- a** $f(x) = \frac{1}{3-x}$ for $x \in \mathbb{R}$, $x \neq 3$ **b** $f(x) = \frac{2x+1}{x-2}$ for $x \in \mathbb{R}$, $x \neq 2$
- c** $f(x) = \frac{3x+5}{4x-3}$ for $x \in \mathbb{R}$, $x \neq \frac{3}{4}$
- 16** $f : x \mapsto 3x - 5$ for $x \in \mathbb{R}$ $g : x \mapsto 4 - 2x$ for $x \in \mathbb{R}$
- a** Find an expression for $(fg)^{-1}(x)$.
- b** Find expressions for:
- i** $f^{-1}g^{-1}(x)$ **ii** $g^{-1}f^{-1}(x)$.
- c** Comment on your results in part **b**.
 Investigate if this is true for other functions.

2.4 The graph of a function and its inverse

Consider the function defined by $f(x) = 2x + 1$ for $x \in \mathbb{R}$, $-4 \leq x \leq 2$.

$f(-4) = -7$ and $f(2) = 5$.

The domain of f is $-4 \leq x \leq 2$ and the range is $-7 \leq f(x) \leq 5$.

The inverse of this function is $f^{-1}(x) = \frac{x-1}{2}$.

The domain of f^{-1} is the same as the range of f .

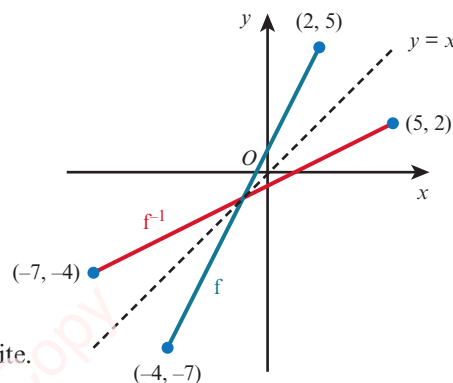
Hence, the domain of f^{-1} is $-7 \leq x \leq 5$.

The range of f^{-1} is the same as the domain of f .

Hence, the range of f^{-1} is $-4 \leq f^{-1}(x) \leq 2$.

The representation of f and f^{-1} on the same graph can be seen in the diagram opposite.

It is important to note that the graphs of f and f^{-1} are reflections of each other in the line $y = x$. This is true for each one-one function and its inverse functions.



KEY POINT 2.5

The graphs of f and f^{-1} are reflections of each other in the line $y = x$.
 This is because $ff^{-1}(x) = x = f^{-1}f(x)$
 When a function f is self-inverse, the graph of f will be symmetrical about the line $y = x$.

WORKED EXAMPLE 2.9

$f(x) = (x - 1)^2 - 2$ for $x \in \mathbb{R}$, $1 \leq x \leq 4$

On the same axes, draw the graph of f and the graph of f^{-1} .

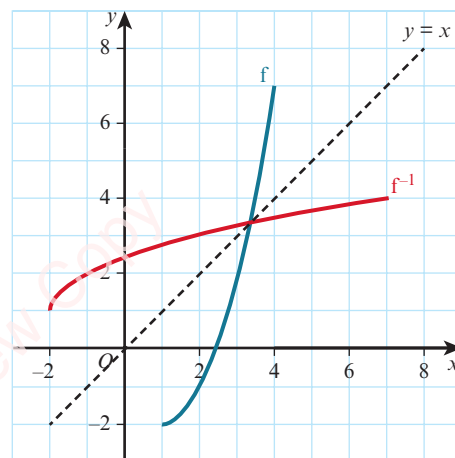
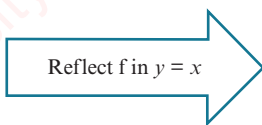
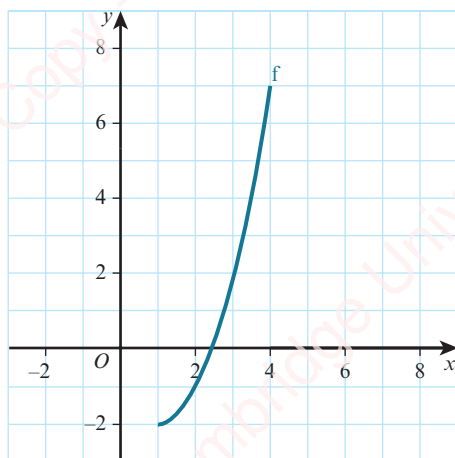
Answer

$y = (x - 1)^2 - 2$

When $x = 4$, $y = 7$.

The function is one-one, so the inverse function exists.

The circled part of the expression is a square so it will always be ≥ 0 . The smallest value it can be is 0. This occurs when $x = 1$. The vertex is at the point $(1, -2)$.



WORKED EXAMPLE 2.10

$$f : x \mapsto \frac{2x+7}{x-2} \text{ for } x \in \mathbb{R}, x \neq 2$$

- a Find an expression for $f^{-1}(x)$.
- b State what your answer to part a tells you about the symmetry of the graph of $y = f(x)$.

Answer

a $f : x \mapsto \frac{2x+7}{x-2}$

Step 1: Write the function as $y =$ \longrightarrow $y = \frac{2x+7}{x-2}$

Step 2: Interchange the x and y variables. \longrightarrow $x = \frac{2y+7}{y-2}$

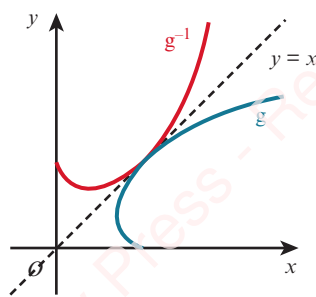
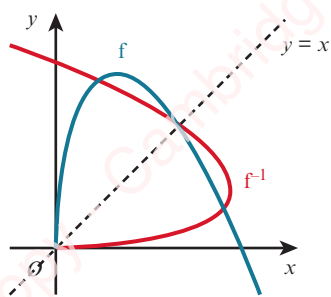
Step 3: Rearrange to make y the subject. \longrightarrow $xy - 2x = 2y + 7$
 $y(x-2) = 2x + 7$
 $y = \frac{2x+7}{x-2}$

Hence $f^{-1}(x) = \frac{2x+7}{x-2}$.

- b $f^{-1}(x) = f(x)$, so the function f is self-inverse.

The graph of $y = f(x)$ is symmetrical about the line $y = x$.

EXPLORE 2.3



Ali states that:

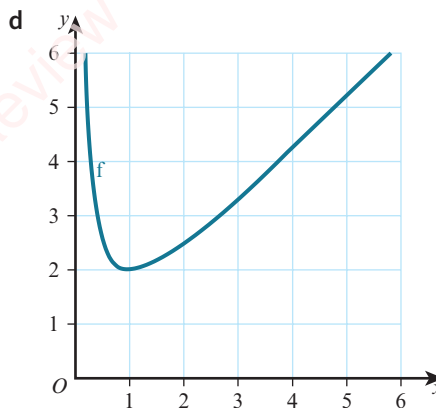
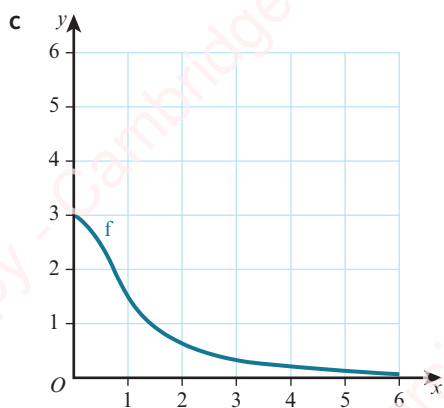
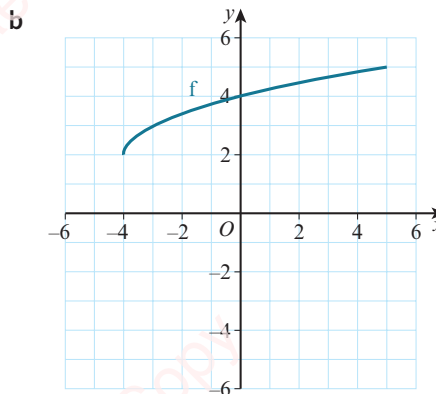
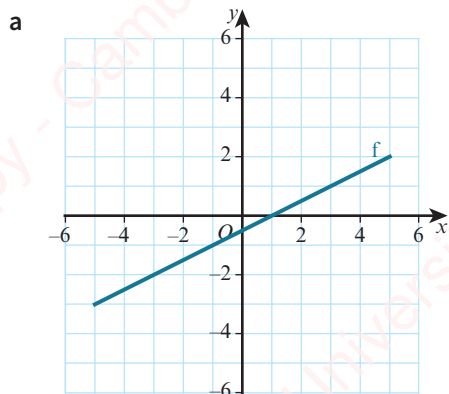
The diagrams show the functions f and g , together with their inverse functions f^{-1} and g^{-1} .

Is Ali correct?

Explain your answer.

EXERCISE 2D

1 On a copy of each grid, draw the graph of $f^{-1}(x)$ if it exists.

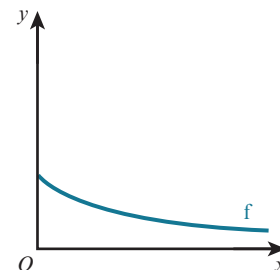


2 $f : x \mapsto 2x - 1$ for $x \in \mathbb{R}, -1 \leq x \leq 3$

- a Find an expression for $f^{-1}(x)$.
- b State the domain and range of f^{-1} .
- c Sketch, on the same diagram, the graphs of $y = f(x)$ and $y = f^{-1}(x)$, making clear the relationship between the graphs.

3 The diagram shows the graph of $y = f(x)$, where $f(x) = \frac{4}{x+2}$ for $x \in \mathbb{R}, x \geq 0$.

- a State the range of f .
- b Find an expression for $f^{-1}(x)$.
- c State the domain and range of f^{-1} .
- d On a copy of the diagram, sketch the graph of $y = f^{-1}(x)$, making clear the relationship between the graphs.



4 For each of the following functions, find an expression for $f^{-1}(x)$ and, hence, decide if the graph of $y = f(x)$ is symmetrical about the line $y = x$.

- a $f(x) = \frac{x+5}{2x-1}$ for $x \in \mathbb{R}, x \neq \frac{1}{2}$
- b $f(x) = \frac{2x-3}{x-5}$ for $x \in \mathbb{R}, x \neq 5$
- c $f(x) = \frac{3x-1}{2x-3}$ for $x \in \mathbb{R}, x \neq \frac{3}{2}$
- d $f(x) = \frac{4x+5}{3x-4}$ for $x \in \mathbb{R}, x \neq \frac{4}{3}$

- P** 5 a $f(x) = \frac{x+a}{bx-1}$ for $x \in \mathbb{R}, x \neq \frac{1}{b}$, where a and b are constants.
Prove that this function is self-inverse.
- b $g(x) = \frac{ax+b}{cx+d}$ for $x \in \mathbb{R}, x \neq -\frac{d}{c}$, where a, b, c and d are constants.
Find the condition for this function to be self-inverse.

2.5 Transformations of functions

At IGCSE / O Level you met various transformations that can be applied to two-dimensional shapes. These included translations, reflections, rotations and enlargements. In this section you will learn how translations, reflections and stretches (and combinations of these) can be used to transform the graph of a function.

EXPLORE 2.4

- a Use graphing software to draw the graphs of $y = x^2$, $y = x^2 + 2$ and $y = x^2 - 3$.
Discuss your observations with your classmates and explain how the second and third graphs could be obtained from the first graph.

b Repeat part a using the graphs $y = \sqrt{x}$, $y = \sqrt{x} + 1$ and $y = \sqrt{x} - 2$.

c Repeat part a using the graphs $y = \frac{12}{x}$, $y = \frac{12}{x} + 5$ and $y = \frac{12}{x} - 4$.

d Can you generalise your results?
- a Use graphing software to draw the graphs of $y = x^2$, $y = (x+2)^2$ and $y = (x-5)^2$.
Discuss your observations with your classmates and explain how the second and third graphs could be obtained from the first graph.

b Repeat part a using the graphs $y = x^3$, $y = (x+1)^3$ and $y = (x-4)^3$.

c Can you generalise your results?
- a Use graphing software to draw the graphs of $y = x^2$ and $y = -x^2$.
Discuss your observations with your classmates and explain how the second graph could be obtained from the first graph.

b Repeat part a using the graphs $y = x^3$ and $y = -x^3$.

c Repeat part a using the graphs $y = 2^x$ and $y = -2^x$.

d Can you generalise your results?
- a Use graphing software to draw the graphs of $y = 5 + x$ and $y = 5 - x$.
Discuss your observations with your classmates and explain how the second graph could be obtained from the first graph.

b Repeat part a using the graphs $y = \sqrt{2+x}$ and $y = \sqrt{2-x}$.

c Can you generalise your results?
- a Use graphing software to draw the graphs of $y = x^2$ and $y = 2x^2$ and $y = (2x)^2$.
Discuss your observations with your classmates and explain how the second graph could be obtained from the first graph.

b Repeat part a using the graphs $y = \sqrt{x}$, $y = 2\sqrt{x}$ and $y = \sqrt{2x}$.

c Repeat part a using the graphs $y = 3^x$, $y = 2 \times 3^x$ and $y = 3^{2x}$.

d Can you generalise your results?

Translations

The diagram shows the graphs of two functions that differ only by a constant.

$$y = x^2 - 2x + 1$$

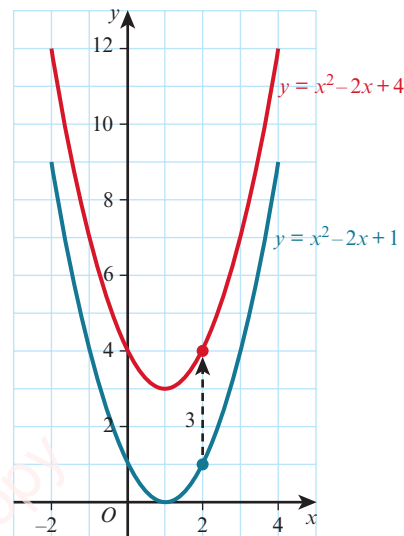
$$y = x^2 - 2x + 4$$

When the x -coordinates on the two graphs are the same ($x = x$) the y -coordinates differ by 3 ($y = y + 3$).

This means that the two curves have exactly the same shape but that they are separated by 3 units in the positive y direction.

Hence, the graph of $y = x^2 - 2x + 4$ is a translation of the graph of $y = x^2 - 2x + 1$

by the vector $\begin{pmatrix} 0 \\ 3 \end{pmatrix}$.



KEY POINT 2.6

The graph of $y = f(x) + a$ is a translation of the graph $y = f(x)$ by the vector $\begin{pmatrix} 0 \\ a \end{pmatrix}$.

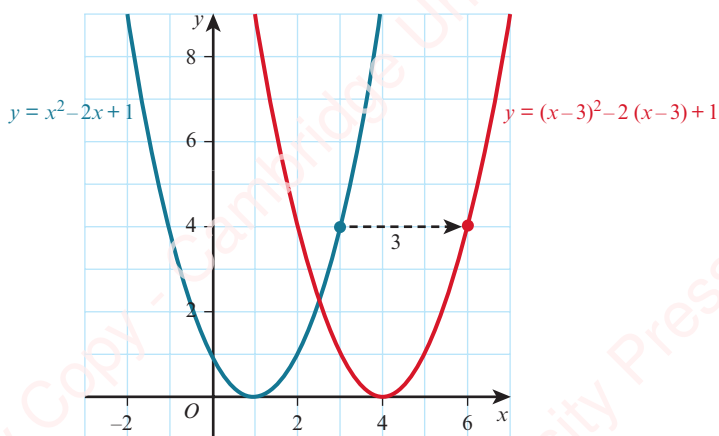
Now consider the two functions:

$$y = x^2 - 2x + 1$$

$$y = (x - 3)^2 - 2(x - 3) + 1$$

We obtain the second function by replacing x by $x - 3$ in the first function.

The graphs of these two functions are:



The curves have exactly the same shape but this time they are separated by 3 units in the positive x -direction.

You may be surprised that the curve has moved in the positive x -direction. Note, however, that a way of obtaining $y = y$ is to have $x = x - 3$ or equivalently $x = x + 3$. This means that the two curves are at the same height when the red curve is 3 units to the right of the blue curve.

Hence, the graph of $y = (x - 3)^2 - 2(x - 3) + 1$ is a translation of the graph of $y = x^2 - 2x + 1$ by the vector $\begin{pmatrix} 3 \\ 0 \end{pmatrix}$.

KEY POINT 2.7

The graph of $y = f(x - a)$ is a translation of the graph $y = f(x)$ by the vector $\begin{pmatrix} a \\ 0 \end{pmatrix}$.

Combining these two results gives:

KEY POINT 2.8

The graph of $y = f(x - a) + b$ is a translation of the graph $y = f(x)$ by the vector $\begin{pmatrix} a \\ b \end{pmatrix}$.

WORKED EXAMPLE 2.11

The graph of $y = x^2 + 5x$ is translated 2 units to the right. Find the equation of the resulting graph. Give your answer in the form $y = ax^2 + bx + c$.

Answer

$$y = x^2 + 5x$$

Replace all occurrences of x by $x - 2$.

$$y = (x - 2)^2 + 5(x - 2)$$

Expand and simplify.

$$y = x^2 + x - 6$$

WORKED EXAMPLE 2.12

The graph of $y = \sqrt{2x}$ is translated by the vector $\begin{pmatrix} -5 \\ 3 \end{pmatrix}$. Find the equation of the resulting graph.

Answer

$$y = \sqrt{2x}$$

Replace x by $x + 5$, and add 3 to the resulting function.

$$y = \sqrt{2(x + 5)} + 3$$

$$y = \sqrt{2x + 10} + 3$$

EXERCISE 2E

1 Find the equation of each graph after the given transformation.

a $y = 2x^2$ after translation by $\begin{pmatrix} 0 \\ 4 \end{pmatrix}$

b $y = 5\sqrt{x}$ after translation by $\begin{pmatrix} 0 \\ -2 \end{pmatrix}$

c $y = 7x^2 - 2x$ after translation by $\begin{pmatrix} 0 \\ 1 \end{pmatrix}$

d $y = x^2 - 1$ after translation by $\begin{pmatrix} 0 \\ 2 \end{pmatrix}$

e $y = \frac{2}{x}$ after translation by $\begin{pmatrix} -5 \\ 0 \end{pmatrix}$

f $y = \frac{x}{x+1}$ after translation by $\begin{pmatrix} 3 \\ 0 \end{pmatrix}$

g $y = x^2 + x$ after translation by $\begin{pmatrix} -1 \\ 0 \end{pmatrix}$

h $y = 3x^2 - 2$ after translation by $\begin{pmatrix} 2 \\ 3 \end{pmatrix}$

2 Find the translation that transforms the graph.

a $y = x^2 + 5x - 2$ to the graph $y = x^2 + 5x + 2$

b $y = x^3 + 2x^2 + 1$ to the graph $y = x^3 + 2x^2 - 4$

c $y = x^2 - 3x$ to the graph $y = (x+1)^2 - 3(x+1)$

d $y = x + \frac{6}{x}$ to the graph $y = x - 2 + \frac{6}{x-2}$

e $y = \sqrt{2x+5}$ to the graph $y = \sqrt{2x+3}$

f $y = \frac{5}{x^2} - 3x$ to the graph $y = \frac{5}{(x-2)^2} - 3x + 10$

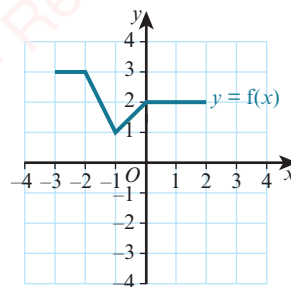
3 The diagram shows the graph of $y = f(x)$.

Sketch the graphs of each of the following functions.

a $y = f(x) - 4$

b $y = f(x - 2)$

c $y = f(x + 1) - 5$



4 a On the same diagram, sketch the graphs of $y = 2x$ and $y = 2x + 2$.

b $y = 2x$ can be transformed to $y = 2x + 2$ by a translation of $\begin{pmatrix} 0 \\ a \end{pmatrix}$.

Find the value of a .

c $y = 2x$ can be transformed to $y = 2x + 2$ by a translation of $\begin{pmatrix} b \\ 0 \end{pmatrix}$.

Find the value of b .

- 5 A cubic graph has equation $y = (x + 3)(x - 2)(x - 5)$.

Write, in a similar form, the equation of the graph after a translation of $\begin{pmatrix} 2 \\ 0 \end{pmatrix}$.

- 6 The graph of $y = x^2 - 4x + 1$ is translated by the vector $\begin{pmatrix} 1 \\ 2 \end{pmatrix}$.

Find, in the form $y = ax^2 + bx + c$, the equation of the resulting graph.

- PS** 7 The graph of $y = ax^2 + bx + c$ is translated by the vector $\begin{pmatrix} 2 \\ -5 \end{pmatrix}$.

The resulting graph is $y = 2x^2 - 11x + 10$. Find the value of a , the value of b and the value of c .



WEB LINK

Try the *Between the lines* resource on the Underground Mathematics website.

2.6 Reflections

The diagram shows the graphs of the two functions:

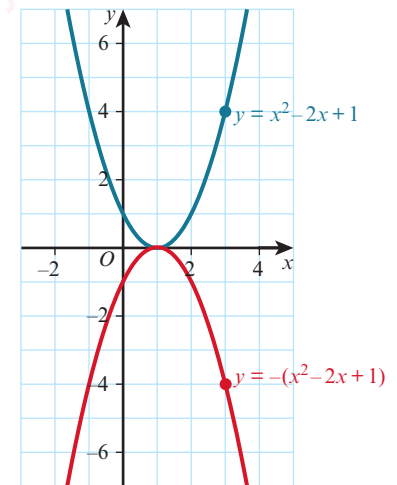
$$y = x^2 - 2x + 1$$

$$y = -(x^2 - 2x + 1)$$

When the x -coordinates on the two graphs are the same ($x = x$), the y -coordinates are negative of each other ($y = -y$).

This means that, when the x -coordinates are the same, the red curve is the same vertical distance from the x -axis as the blue curve but it is on the opposite side of the x -axis.

Hence, the graph of $y = -(x^2 - 2x + 1)$ is a reflection of the graph of $y = x^2 - 2x + 1$ in the x -axis.



55

KEY POINT 2.9

The graph of $y = -f(x)$ is a reflection of the graph $y = f(x)$ in the x -axis.

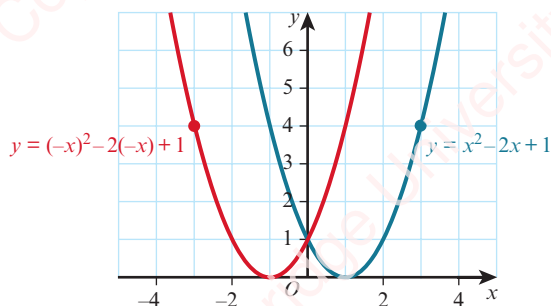
Now consider the two functions:

$$y = x^2 - 2x + 1$$

$$y = (-x)^2 - 2(-x) + 1$$

We obtain the second function by replacing x by $-x$ in the first function.

The graphs of these two functions are demonstrated in the diagram.



The curves are at the same height ($y = y$) when $x = -x$ or equivalently $x = -x$.

This means that the heights of the two graphs are the same when the red graph has the same horizontal displacement from the y -axis as the blue graph but is on the opposite side of the y -axis.

Hence, the graph of $y = (-x)^2 - 2(-x) + 1$ is a reflection of the graph of $y = x^2 - 2x + 1$ in the y -axis.

KEY POINT 2.10

The graph of $y = f(-x)$ is a reflection of the graph $y = f(x)$ in the y -axis.

WORKED EXAMPLE 2.13

The quadratic graph $y = f(x)$ has a minimum at the point $(5, -7)$. Find the coordinates of the vertex and state whether it is a maximum or minimum of the graph for each of the following graphs.

a $y = -f(x)$

b $y = f(-x)$

Answer

a $y = -f(x)$ is a reflection of $y = f(x)$ in the x -axis.

The turning point is $(5, 7)$. It is a maximum point.

b $y = f(-x)$ is a reflection of $y = f(x)$ in the y -axis.

The turning point is $(-5, -7)$. It is a minimum point.

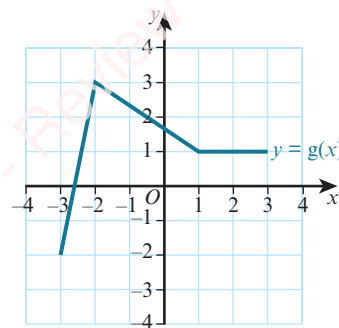
EXERCISE 2F

1 The diagram shows the graph of $y = g(x)$.

Sketch the graphs of each of the following functions.

a $y = -g(x)$

b $y = g(-x)$



2 Find the equation of each graph after the given transformation.

a $y = 5x^2$ after reflection in the x -axis.

b $y = 2x^4$ after reflection in the y -axis.

c $y = 2x^2 - 3x + 1$ after reflection in the y -axis.

d $y = 5 + 2x - 3x^2$ after reflection in the x -axis.

3 Describe the transformation that maps the graph:

- $y = x^2 + 7x - 3$ onto the graph $y = -x^2 - 7x + 3$
- $y = x^2 - 3x + 4$ onto the graph $y = x^2 + 3x + 4$
- $y = 2x - 5x^2$ onto the graph $y = 5x^2 - 2x$
- $y = x^3 + 2x^2 - 3x + 1$ onto the graph $y = -x^3 - 2x^2 + 3x - 1$.

2.7 Stretches

The diagram shows the graphs of the two functions:

$$y = x^2 - 2x - 3$$

$$y = 2(x^2 - 2x - 3)$$

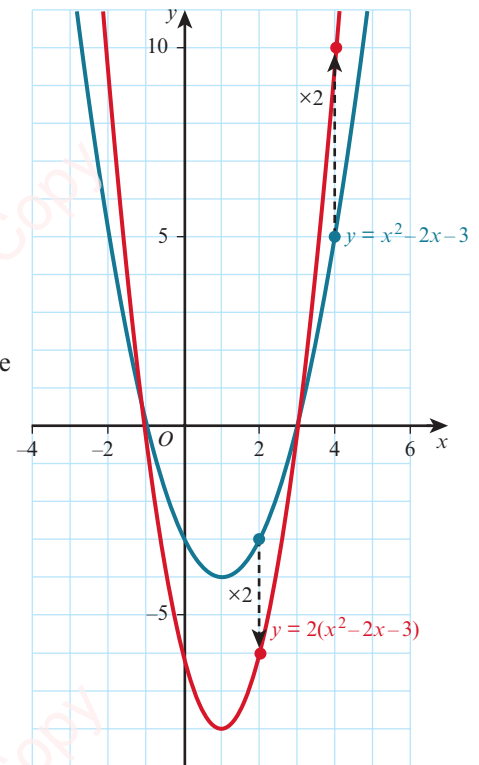
When the x -coordinates on the two graphs are the same ($x = x$), the y -coordinate on the red graph is double the y -coordinate on the blue graph ($y = 2y$).

This means that, when the x -coordinates are the same, the red curve is twice the distance of the blue graph from the x -axis.

Hence, the graph of $y = 2(x^2 - 2x - 3)$ is a stretch of the graph of $y = x^2 - 2x - 3$ from the x -axis. We say that it has been stretched with stretch factor 2 parallel to the y -axis.

Note: there are alternative ways of expressing this transformation:

- a stretch with scale factor 2 with the line $y = 0$ invariant
- a stretch with stretch factor 2 with the x -axis invariant
- a stretch with stretch factor 2 relative to the x -axis
- a vertical stretch with stretch factor 2.



KEY POINT 2.11

The graph of $y = af(x)$ is a stretch of the graph $y = f(x)$ with stretch factor a parallel to the y -axis.

Note: if $a < 0$, then $y = af(x)$ can be considered to be a stretch of $y = f(x)$ with a negative scale factor or as a stretch with positive scale factor followed by a reflection in the x -axis.

Now consider the two functions:

$$y = x^2 - 2x - 3$$

$$y = (2x)^2 - 2(2x) - 3$$

We obtain the second function by replacing x by $2x$ in the first function.

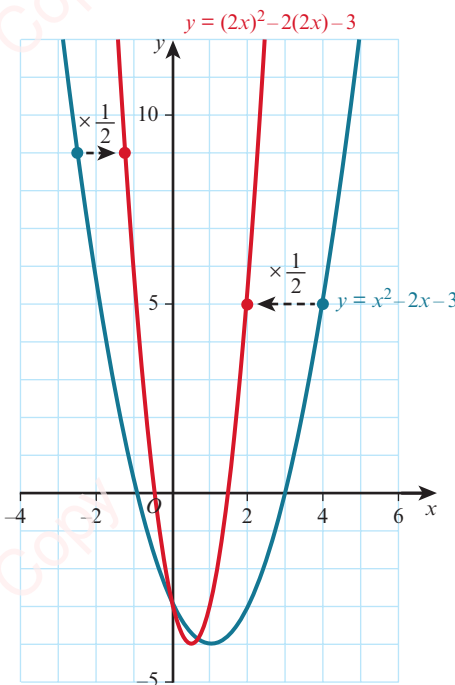
The two curves are at the same height ($y = y$) when $x = 2x$ or equivalently

$$x = \frac{1}{2}x.$$

This means that the heights of the two graphs are the same when the red graph has half the horizontal displacement from the y -axis as the blue graph.

Hence, the graph of $y = (2x)^2 - 2(2x) - 3$ is a stretch of the graph of

$y = x^2 - 2x - 3$ from the y -axis. We say that it has been stretched with stretch factor $\frac{1}{2}$ parallel to the x -axis.



KEY POINT 2.12

The graph of $y = f(ax)$ is a stretch of the graph $y = f(x)$ with stretch factor $\frac{1}{a}$ parallel to the x -axis.

WORKED EXAMPLE 2.14

The graph of $y = 5 - \frac{1}{2}x^2$ is stretched with stretch factor 4 parallel to the y -axis.

Find the equation of the resulting graph.

Answer

Let $f(x) = 5 - \frac{1}{2}x^2$

$$4f(x) = 20 - 2x^2$$

The equation of the resulting graph is $y = 20 - 2x^2$.

A stretch parallel to the y -axis, factor 4, gives the function $4f(x)$.

WORKED EXAMPLE 2.15

Describe the single transformation that maps the graph of $y = x^2 - 3x - 5$ to the graph of $y = 4x^2 - 6x - 5$.

Answer

Let $f(x) = x^2 - 3x - 5$

$$\begin{aligned} 4x^2 - 6x - 5 &= (2x)^2 - 3(2x) - 5 \\ &= f(2x) \end{aligned}$$

The transformation is a stretch parallel to the x -axis with stretch factor $\frac{1}{2}$.

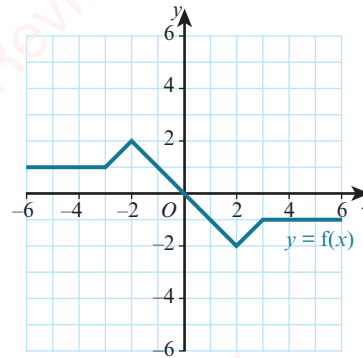
Express $4x^2 - 6x - 5$ in terms of $f(x)$.

EXERCISE 2G

- 1 The diagram shows the graph of $y = f(x)$.
Sketch the graphs of each of the following functions.

a $y = 3f(x)$

b $y = f(2x)$



- 2 Find the equation of each graph after the given transformation.
- $y = 3x^2$ after a stretch parallel to the y -axis with stretch factor 2.
 - $y = x^3 - 1$ after a stretch parallel to the y -axis with stretch factor 3.
 - $y = 2^x + 4$ after a stretch parallel to the y -axis with stretch factor $\frac{1}{2}$.
 - $y = 2x^2 - 8x + 10$ after a stretch parallel to the x -axis with stretch factor 2.
 - $y = 6x^3 - 36x$ after a stretch parallel to the x -axis with stretch factor $\frac{1}{3}$.
- 3 Describe the single transformation that maps the graph:
- $y = x^2 + 2x - 5$ onto the graph $y = 4x^2 + 4x - 5$
 - $y = x^2 - 3x + 2$ onto the graph $y = 3x^2 - 9x + 6$
 - $y = 2^x + 1$ onto the graph $y = 2^{x+1} + 2$
 - $y = \sqrt{x-6}$ onto the graph $y = \sqrt{3x-6}$

2.8 Combined transformations

In this section you will learn how to apply simple combinations of transformations.

The transformations of the graph of $y = f(x)$ that you have studied so far can each be categorised as either vertical or horizontal transformations.

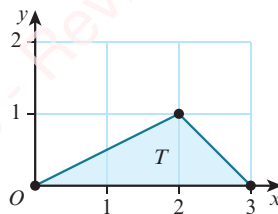
Vertical transformations	
$y = f(x) + a$	translation $\begin{pmatrix} 0 \\ a \end{pmatrix}$
$y = -f(x)$	reflection in the x -axis
$y = af(x)$	vertical stretch, factor a

Horizontal transformations	
$y = f(x + a)$	translation $\begin{pmatrix} -a \\ 0 \end{pmatrix}$
$y = f(-x)$	reflection in the y -axis
$y = f(ax)$	horizontal stretch, factor $\frac{1}{a}$

When combining transformations care must be taken with the order in which the transformations are applied.

EXPLORE 2.5

Apply the transformations in the given order to triangle T and for each question comment on whether the final images are the same or different.



1 Combining two vertical transformations

- a i Translate $\begin{pmatrix} 0 \\ 3 \end{pmatrix}$, then stretch vertically with factor $\frac{1}{2}$.
- ii Stretch vertically with factor $\frac{1}{2}$, then translate $\begin{pmatrix} 0 \\ 3 \end{pmatrix}$.
- b Investigate for other pairs of vertical transformations.

2 Combining one vertical and one horizontal transformation

- a i Reflect in the x -axis, then translate $\begin{pmatrix} -2 \\ 0 \end{pmatrix}$.
- ii Translate $\begin{pmatrix} -2 \\ 0 \end{pmatrix}$, then reflect in the x -axis.
- b Investigate for other pairs of transformations where one is vertical and the other is horizontal.

3 Combining two horizontal transformations

- a i Stretch horizontally with factor 2, then translate $\begin{pmatrix} 2 \\ 0 \end{pmatrix}$.
- ii Translate $\begin{pmatrix} 2 \\ 0 \end{pmatrix}$, then stretch horizontally with factor 2.
- b Investigate for other pairs of horizontal transformations.

60

From the Explore activity, you should have found that:

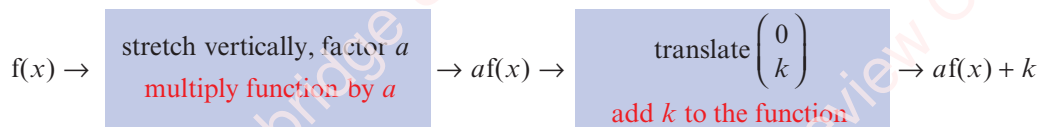
KEY POINT 2.13

- When two vertical transformations or two horizontal transformations are combined, the order in which they are applied may affect the outcome.
- When one horizontal and one vertical transformation are combined, the order in which they are applied does **not** affect the outcome.

Combining two vertical transformations

We will now consider how the graph of $y = f(x)$ is transformed to the graph $y = af(x) + k$.

This can be shown in a flow diagram as:



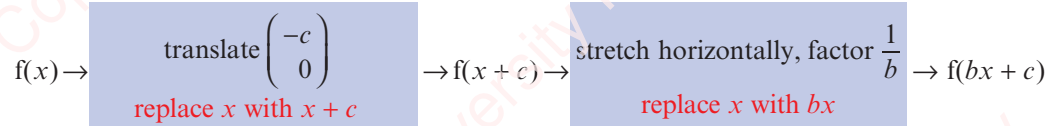
This leads to the important result:

KEY POINT 2.14

Vertical transformations follow the 'normal' order of operations, as used in arithmetic.

Combining two horizontal transformations

Now consider how the graph of $y = f(x)$ is transformed to the graph $y = f(bx + c)$.



This leads to the important result:

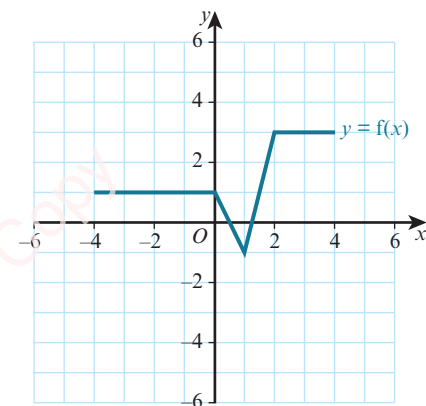
KEY POINT 2.15

Horizontal transformations follow the **opposite** order to the 'normal' order of operations, as used in arithmetic.

WORKED EXAMPLE 2.16

The diagram shows the graph of $y = f(x)$.

Sketch the graph of $y = 2f(x) - 3$.

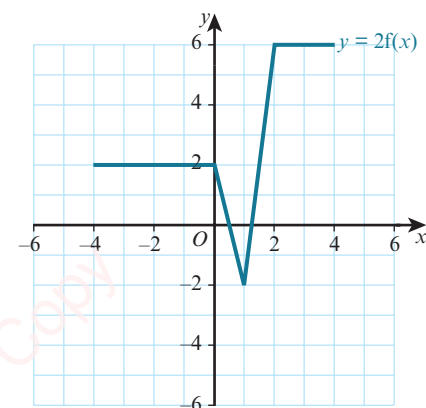


Answer

$y = 2f(x) - 3$ is a combination of two vertical transformations of $y = f(x)$, hence the transformations follow the 'normal' order of operations.

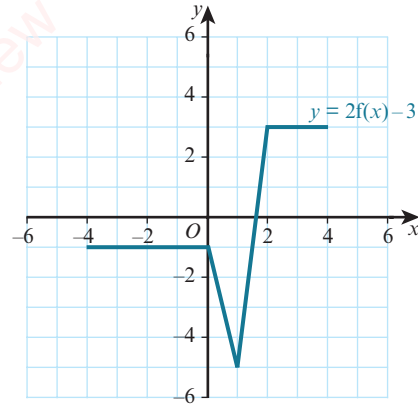
Step 1: Sketch the graph $y = 2f(x)$:

Stretch $y = f(x)$ vertically with stretch factor 2.



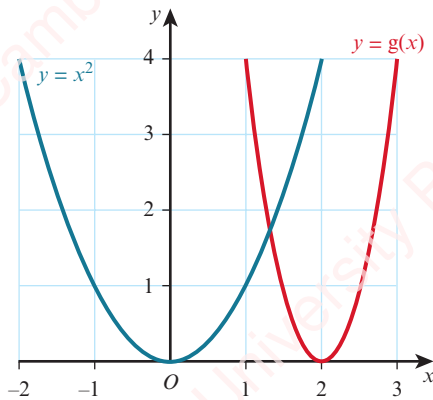
Step 2: Sketch the graph $y = 2f(x) - 3$:

Translate $y = 2f(x)$ by the vector $\begin{pmatrix} 0 \\ -3 \end{pmatrix}$.



WORKED EXAMPLE 2.17

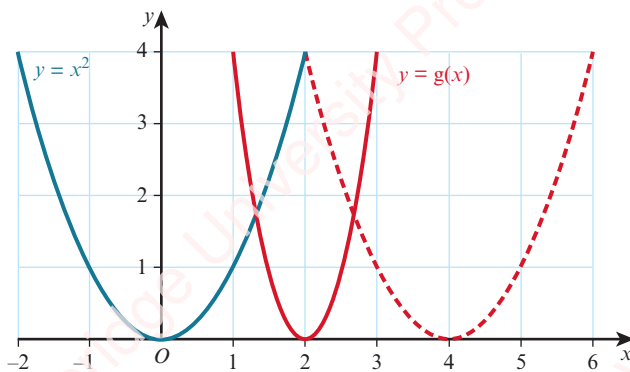
The diagram shows the graph of $y = x^2$ and its image, $y = g(x)$, after a combination of transformations.



- a Find two different ways of describing the combination of transformations.
- b Write down the equation of the graph $y = g(x)$.

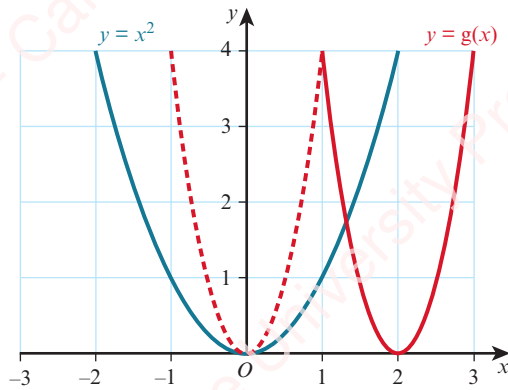
Answer

- a Translation of $\begin{pmatrix} 4 \\ 0 \end{pmatrix}$ followed by a horizontal stretch, stretch factor $\frac{1}{2}$.



OR

Horizontal stretch, factor $\frac{1}{2}$, followed by a translation of $\begin{pmatrix} 2 \\ 0 \end{pmatrix}$.



b Using the first combination of transformations:

Translation of $\begin{pmatrix} 4 \\ 0 \end{pmatrix}$ means 'replace x by $x - 4$ '.

$$y = x^2 \quad \text{becomes} \quad y = (x - 4)^2$$

Horizontal stretch, factor $\frac{1}{2}$ means 'replace x by $2x$ '.

$$y = (x - 4)^2 \quad \text{becomes} \quad y = (2x - 4)^2$$

Hence, $g(x) = (2x - 4)^2$.



TIP

The same answer will be obtained when using the second combination of transformations. You may wish to check this yourself.

63

EXERCISE 2H

1 The diagram shows the graph of $y = g(x)$.

Sketch the graph of each of the following.

a $y = g(x + 2) + 3$

b $y = 2g(x) + 1$

c $y = 2 - g(x)$

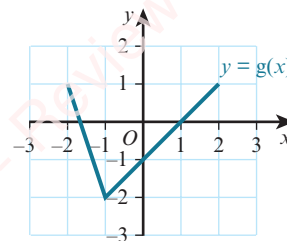
d $y = 2g(-x) + 1$

e $y = -2g(x) - 1$

f $y = g(2x) + 3$

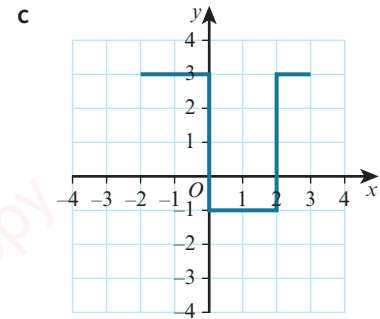
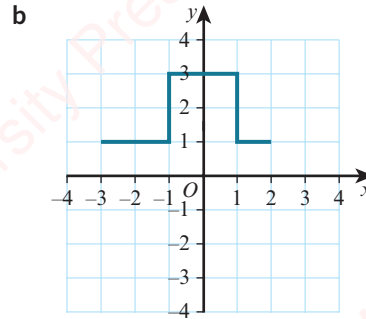
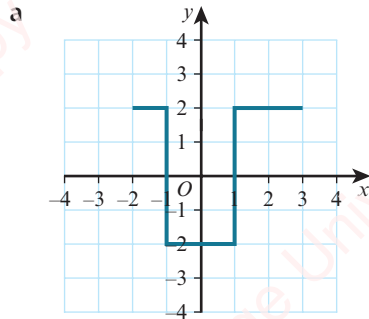
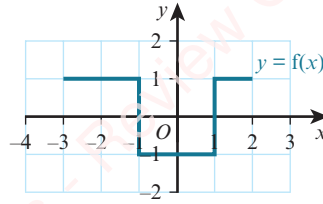
g $y = g(2x - 6)$

h $y = g(-x + 1)$



2 The diagram shows the graph of $y = f(x)$.

Write down, in terms of $f(x)$, the equation of the graph of each of the following diagrams.



3 Given that $y = x^2$, find the image of the curve $y = x^2$ after each of the following combinations of transformations.

a a stretch in the y -direction with factor 3 followed by a translation by the vector $\begin{pmatrix} 1 \\ 0 \end{pmatrix}$

b a translation by the vector $\begin{pmatrix} 1 \\ 0 \end{pmatrix}$ followed by a stretch in the y -direction with factor 3

4 Find the equation of the image of the curve $y = x^2$ after each of the following combinations of transformations and, in each case, sketch the graph of the resulting curve.

a a stretch in the x -direction with factor 2 followed by a translation by the vector $\begin{pmatrix} 5 \\ 0 \end{pmatrix}$

b a translation by the vector $\begin{pmatrix} 5 \\ 0 \end{pmatrix}$ followed by a stretch in the x -direction with factor 2

c On a graph show the curve $y = x^2$ and each of your answers to **parts a and b**.

5 Given that $f(x) = x^2 + 1$, find the image of $y = f(x)$ after each of the following combinations of transformations.

a translation $\begin{pmatrix} 0 \\ -5 \end{pmatrix}$ followed by a stretch parallel to the y -axis with stretch factor 2

b translation $\begin{pmatrix} 2 \\ 0 \end{pmatrix}$ followed by a reflection in the x -axis

- 6 a The graph of $y = g(x)$ is reflected in the y -axis and then stretched with stretch factor 2 parallel to the y -axis. Write down the equation of the resulting graph.
- b The graph of $y = f(x)$ is translated by the vector $\begin{pmatrix} 2 \\ -3 \end{pmatrix}$ and then reflected in the x -axis. Write down the equation of the resulting graph.
- 7 Determine the sequence of transformations that maps $y = f(x)$ to each of the following functions.
- a $y = \frac{1}{2}f(x) + 3$ b $y = -f(x) + 2$ c $y = f(2x - 6)$ d $y = 2f(x) - 8$
- 8 Determine the sequence of transformations that maps:
- a the curve $y = x^3$ onto the curve $y = \frac{1}{2}(x + 5)^3$
- b the curve $y = x^3$ onto the curve $y = -\frac{1}{2}(x + 1)^3 - 2$
- c the curve $y = \sqrt[3]{x}$ onto the curve $y = -2\sqrt[3]{x - 3} + 4$
- 9 Given that $f(x) = \sqrt{x}$, write down the equation of the image of $f(x)$ after:
- a reflection in the x -axis, followed by translation $\begin{pmatrix} 0 \\ 3 \end{pmatrix}$, followed by translation $\begin{pmatrix} 1 \\ 0 \end{pmatrix}$, followed by a stretch parallel to the x -axis with stretch factor 2
- b translation $\begin{pmatrix} 0 \\ 3 \end{pmatrix}$, followed by a stretch parallel to the x -axis with stretch factor 2, followed by a reflection in the x -axis, followed by translation $\begin{pmatrix} 1 \\ 0 \end{pmatrix}$.
- 10 Given that $g(x) = x^2$, write down the equation of the image of $g(x)$ after:
- a translation $\begin{pmatrix} -4 \\ 0 \end{pmatrix}$, followed by a reflection in the y -axis, followed by translation $\begin{pmatrix} 0 \\ 2 \end{pmatrix}$, followed by a stretch parallel to the y -axis with stretch factor 3
- b a stretch parallel to the y -axis with stretch factor 3, followed by translation $\begin{pmatrix} 0 \\ 2 \end{pmatrix}$, followed by reflection in the y -axis, followed by translation $\begin{pmatrix} -4 \\ 0 \end{pmatrix}$.
- PS** 11 Find two different ways of describing the combination of transformations that maps the graph of $f(x) = \sqrt{x}$ onto the graph $g(x) = \sqrt{-x - 2}$ and sketch the graphs of $y = f(x)$ and $y = g(x)$.
- PS** 12 Find two different ways of describing the sequence of transformations that maps the graph of $y = f(x)$ onto the graph of $y = f(2x + 10)$.

**WEB LINK**

Try the *Transformers* resource on the Underground Mathematics website.

Checklist of learning and understanding

Functions

- A function is a rule that maps each x value to just one y value for a defined set of input values.
- A function can be either one-one or many-one.
- The set of input values for a function is called the domain of the function.
- The set of output values for a function is called the range (or image set) of the function.

Composite functions

- $fg(x)$ means the function g acts on x first, then f acts on the result.
- fg only exists if the range of g is contained within the domain of f .
- In general, $fg(x) \neq gf(x)$.

Inverse functions

- The inverse of a function $f(x)$ is the function that undoes what $f(x)$ has done.
 $ff^{-1}(x) = f^{-1}f(x) = x$ or if $y = f(x)$ then $x = f^{-1}(y)$
- The inverse of the function $f(x)$ is written as $f^{-1}(x)$.
- The steps for finding the inverse function are:

Step 1: Write the function as $y =$

Step 2: Interchange the x and y variables.

Step 3: Rearrange to make y the subject.

- The domain of $f^{-1}(x)$ is the range of $f(x)$.
- The range of $f^{-1}(x)$ is the domain of $f(x)$.
- An inverse function $f^{-1}(x)$ can exist if, and only if, the function $f(x)$ is one-one.
- The graphs of f and f^{-1} are reflections of each other in the line $y = x$.
- If $f(x) = f^{-1}(x)$, then the function f is called a self-inverse function.
- If f is self-inverse then $ff(x) = x$.
- The graph of a self-inverse function has $y = x$ as a line of symmetry.

Transformations of functions

- The graph of $y = f(x) + a$ is a translation of $y = f(x)$ by the vector $\begin{pmatrix} 0 \\ a \end{pmatrix}$.
- The graph of $y = f(x + a)$ is a translation of $y = f(x)$ by the vector $\begin{pmatrix} -a \\ 0 \end{pmatrix}$.
- The graph of $y = -f(x)$ is a reflection of the graph $y = f(x)$ in the x -axis.
- The graph of $y = f(-x)$ is a reflection of the graph $y = f(x)$ in the y -axis.
- The graph of $y = af(x)$ is a stretch of $y = f(x)$, stretch factor a , parallel to the y -axis.
- The graph of $y = f(ax)$ is a stretch of $y = f(x)$, stretch factor $\frac{1}{a}$, parallel to the x -axis.

Combining transformations

- When two vertical transformations or two horizontal transformations are combined, the order in which they are applied may affect the outcome.
- When one horizontal and one vertical transformation are combined, the order in which they are applied does not affect the outcome.
- Vertical transformations follow the 'normal' order of operations, as used in arithmetic
- Horizontal transformations follow the **opposite** order to the 'normal' order of operations, as used in arithmetic.

END-OF-CHAPTER REVIEW EXERCISE 2

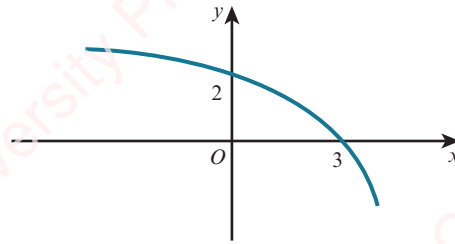
- 1 Functions f and g are defined for $x \in \mathbb{R}$ by:

$$f : x \mapsto 3x - 1$$

$$g : x \mapsto 5x - x^2$$

Express $gf(x)$ in the form $a - b(x - c)^2$, where a , b and c are constants. [5]

2



The diagram shows a sketch of the curve with equation $y = f(x)$.

- a Sketch the graph of $y = -f\left(\frac{1}{2}x\right)$. [3]

- b Describe fully a sequence of two transformations that maps the graph of $y = f(x)$ onto the graph of $y = f(3 - x)$. [2]

- 3 A curve has equation $y = x^2 + 6x + 8$.

- a Sketch the curve, showing the coordinates of any axes crossing points. [2]

- b The curve is translated by the vector $\begin{pmatrix} 2 \\ 0 \end{pmatrix}$, then stretched vertically with stretch factor 3.

Find the equation of the resulting curve, giving your answer in the form $y = ax^2 + bx$. [4]

- 4 The function $f : x \mapsto x^2 - 2$ is defined for the domain $x \geq 0$.

- a Find $f^{-1}(x)$ and state the domain of f^{-1} . [3]

- b On the same diagram, sketch the graphs of f and f^{-1} . [3]



- 5 i Express $-x^2 + 6x - 5$ in the form $a(x + b)^2 + c$, where a , b and c are constants. [3]

The function $f : x \mapsto -x^2 + 6x - 5$ is defined for $x \geq m$, where m is a constant.

- ii State the smallest possible value of m for which f is one-one. [1]

- iii For the case where $m = 5$, find an expression for $f^{-1}(x)$ and state the domain of f^{-1} . [4]

Cambridge International AS & A Level Mathematics 9709 Paper 11 Q9 November 2015



- 6 The function $f : x \mapsto x^2 - 4x + k$ is defined for the domain $x \geq p$, where k and p are constants.

- i Express $f(x)$ in the form $(x + a)^2 + b + k$, where a and b are constants. [2]

- ii State the range of f in terms of k . [1]

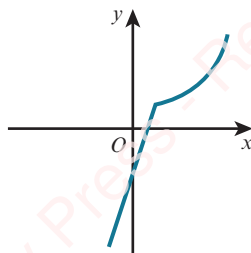
- iii State the smallest value of p for which f is one-one. [1]

- iv For the value of p found in part iii, find an expression for $f^{-1}(x)$ and state the domain of f^{-1} , giving your answer in terms of k . [4]

Cambridge International AS & A Level Mathematics 9709 Paper 11 Q8 June 2012



7



The diagram shows the function f defined for $-1 \leq x \leq 4$, where

$$f(x) = \begin{cases} 3x - 2 & \text{for } -1 \leq x \leq 1, \\ \frac{4}{5-x} & \text{for } 1 < x \leq 4. \end{cases}$$

- i State the range of f . [1]
- ii Copy the diagram and on your copy sketch the graph of $y = f^{-1}(x)$. [2]
- iii Obtain expressions to define the function f^{-1} , giving also the set of values for which each expression is valid. [6]

Cambridge International AS & A Level Mathematics 9709 Paper 11 Q10 June 2014



8 The function f is defined by $f(x) = 4x^2 - 24x + 11$, for $x \in \mathbb{R}$.

- i Express $f(x)$ in the form $a(x - b)^2 + c$ and hence state the coordinates of the vertex of the graph of $y = f(x)$. [4]

The function g is defined by $g(x) = 4x^2 - 24x + 11$, for $x \leq 1$.

- ii State the range of g . [2]
- iii Find an expression for $g^{-1}(x)$ and state the domain of g^{-1} . [4]

Cambridge International AS & A Level Mathematics 9709 Paper 11 Q10 November 2012



9 i Express $2x^2 - 12x + 13$ in the form $a(x + b)^2 + c$, where a , b and c are constants. [3]

- ii The function f is defined by $f(x) = 2x^2 - 12x + 13$, for $x \geq k$, where k is a constant. It is given that f is a one-one function. State the smallest possible value of k . [1]

The value of k is now given to be 7.

- iii Find the range of f . [1]
- iv Find the expression for $f^{-1}(x)$ and state the domain of f^{-1} . [5]

Cambridge International AS & A Level Mathematics 9709 Paper 11 Q8 June 2013



10 i Express $x^2 - 2x - 15$ in the form $(x + a)^2 + b$. [2]

The function f is defined for $p \leq x \leq q$, where p and q are positive constants, by

$$f : x \mapsto x^2 - 2x - 15.$$

The range of f is given by $c \leq f(x) \leq d$, where c and d are constants.

- ii State the smallest possible value of c . [1]

For the case where $c = 9$ and $d = 65$,

iii find p and q , [4]

iv find an expression for $f^{-1}(x)$. [3]

Cambridge International AS & A Level Mathematics 9709 Paper 11 Q10 November 2014



11 The function f is defined by $f : x \mapsto 2x^2 - 12x + 7$ for $x \in \mathbb{R}$.

i Express $f(x)$ in the form $a(x - b)^2 + c$. [3]

ii State the range of f . [1]

iii Find the set of values of x for which $f(x) < 21$. [3]

The function g is defined by $g : x \mapsto 2x + k$ for $x \in \mathbb{R}$.

iv Find the value of the constant k for which the equation $gf(x) = 0$ has two equal roots. [4]

Cambridge International AS & A Level Mathematics 9709 Paper 11 Q9 June 2010



12 Functions f and g are defined for $x \in \mathbb{R}$ by

$$f : x \mapsto 2x + 1,$$

$$g : x \mapsto x^2 - 2.$$

i Find and simplify expressions for $fg(x)$ and $gf(x)$. [2]

ii Hence find the value of a for which $fg(a) = gf(a)$. [3]

iii Find the value of b ($b \neq a$) for which $g(b) = b$. [2]

iv Find and simplify an expression for $f^{-1}g(x)$. [2]

The function h is defined by

$$h : x \mapsto x^2 - 2, \text{ for } x \leq 0.$$

v Find an expression for $h^{-1}(x)$. [2]

Cambridge International AS & A Level Mathematics 9709 Paper 11 Q11 June 2011



13 Functions f and g are defined by

$$f : x \mapsto 2x^2 - 8x + 10 \text{ for } 0 \leq x \leq 2,$$

$$g : x \mapsto x \text{ for } 0 \leq x \leq 10.$$

i Express $f(x)$ in the form $a(x + b)^2 + c$, where a , b and c are constants. [3]

ii State the range of f . [1]

iii State the domain of f^{-1} . [1]

iv Sketch on the same diagram the graphs of $y = f(x)$, $y = g(x)$ and $y = f^{-1}(x)$, making clear the relationship between the graphs. [4]

v Find an expression for $f^{-1}(x)$. [3]

Cambridge International AS & A Level Mathematics 9709 Paper 11 Q11 November 2011

Chapter 3

Coordinate geometry

In this chapter you will learn how to:

- find the equation of a straight line when given sufficient information
- interpret and use any of the forms $y = mx + c$, $y - y_1 = m(x - x_1)$, $ax + by + c = 0$ in solving problems
- understand that the equation $(x - a)^2 + (y - b)^2 = r^2$ represents the circle with centre (a, b) and radius r
- use algebraic methods to solve problems involving lines and circles
- understand the relationship between a graph and its associated algebraic equation, and use the relationship between points of intersection of graphs and solutions of equations.

PREREQUISITE KNOWLEDGE

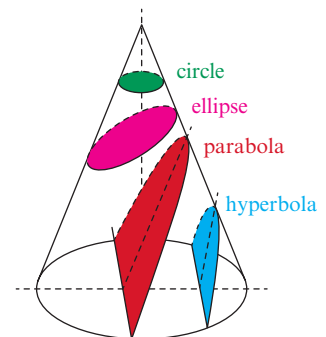
Where it comes from	What you should be able to do	Check your skills
IGCSE / O Level Mathematics	Find the midpoint and length of a line segment.	1 Find the midpoint and length of the line segment joining $(-7, 4)$ and $(-2, -8)$.
IGCSE / O Level Mathematics	Find the gradient of a line and state the gradient of a line that is perpendicular to the line.	2 a Find the gradient of the line joining $A(-1, 3)$ and $B(5, 2)$. b State the gradient of the line that is perpendicular to the line AB .
IGCSE / O Level Mathematics	Interpret and use equations of lines of the form $y = mx + c$.	3 The equation of a line is $y = \frac{2}{3}x - 5$. Write down: a the gradient of the line b the y -intercept c the x -intercept.
Chapter 1	Complete the square and solve quadratic equations.	4 a Complete the square for $x^2 - 8x - 5$. b Solve $x^2 - 8x - 5 = 0$.

Why do we study coordinate geometry?

This chapter builds on the coordinate geometry work that you learnt at IGCSE / O Level. You shall also learn about the Cartesian equation of a circle. Circles are one of a collection of mathematical shapes called conics or conic sections.

A conic section is a curve obtained from the intersection of a plane with a cone. The three types of conic section are the ellipse, the parabola and the hyperbola. The circle is a special case of the ellipse. Conic sections provide a rich source of fascinating and beautiful results that mathematicians have been studying for thousands of years.

Conic sections are very important in the study of astronomy. We also use their reflective properties in the design of satellite dishes, searchlights, and optical and radio telescopes.



WEB LINK

The *Geometry of equations* and *Circles* stations on the Underground Mathematics website have many useful resources for studying this topic.

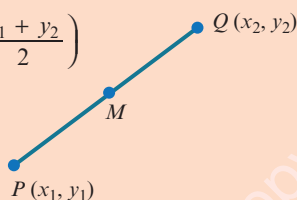
3.1 Length of a line segment and midpoint

At IGCSE / O Level you learnt how to find the midpoint, M , of a line segment joining the points $P(x_1, y_1)$ and $Q(x_2, y_2)$ and the length of the line segment, PQ , using the two formulae in Key point 3.1. You need to know how to apply these formulae to solve problems.

KEY POINT 3.1

To find the midpoint, M , of the line segment PQ : $M = \left(\frac{x_1 + x_2}{2}, \frac{y_1 + y_2}{2} \right)$

To find the length of PQ : $PQ = \sqrt{(x_2 - x_1)^2 + (y_2 - y_1)^2}$



TIP

It is important to remember to show appropriate calculations in coordinate geometry questions. Answers from scale drawings are not accepted.

WORKED EXAMPLE 3.1

The point $M\left(\frac{3}{2}, -11\right)$ is the midpoint of the line segment joining the points $P(-7, 4)$ and $Q(a, b)$.

Find the value of a and the value of b .

Answer

Method 1: Using algebra

$$\begin{array}{ccc} (-7, 4) & & (a, b) \\ \uparrow \uparrow & & \uparrow \uparrow \\ (x_1, y_1) & & (x_2, y_2) \end{array}$$

Decide which values to use for x_1, y_1, x_2, y_2 .

Using $\left(\frac{x_1 + x_2}{2}, \frac{y_1 + y_2}{2}\right)$ and midpoint $= \left(\frac{3}{2}, -11\right)$

$$\left(\frac{-7 + a}{2}, \frac{4 + b}{2}\right) = \left(\frac{3}{2}, -11\right)$$

$$\begin{aligned} \text{Equating the } x\text{-coordinates: } \frac{-7 + a}{2} &= \frac{3}{2} \\ -7 + a &= 3 \\ a &= 10 \end{aligned}$$

$$\begin{aligned} \text{Equating the } y\text{-coordinates: } \frac{4 + b}{2} &= -11 \\ 4 + b &= -22 \\ b &= -26 \end{aligned}$$

Hence, $a = 10$ and $b = -26$.

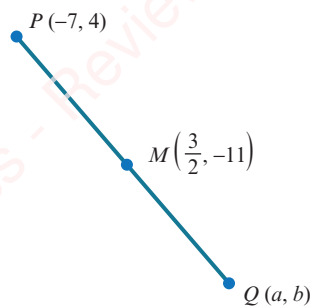
Method 2: Using vectors

$$\overrightarrow{PM} = \begin{pmatrix} 8\frac{1}{2} \\ -15 \end{pmatrix}$$

$$\therefore \overrightarrow{MQ} = \begin{pmatrix} 8\frac{1}{2} \\ -15 \end{pmatrix}$$

$$\therefore a = \frac{3}{2} + 8\frac{1}{2} \quad \text{and} \quad b = -11 + (-15)$$

$$\therefore a = 10 \quad \text{and} \quad b = -26.$$



WORKED EXAMPLE 3.2

Three of the vertices of a parallelogram, $ABCD$, are $A(-5, -1)$, $B(-1, -4)$ and $C(6, -2)$.

- Find the midpoint of AC .
- Find the coordinates of D .

Answer

$$\text{a Midpoint of } AC = \left(\frac{-5+6}{2}, \frac{-1+(-2)}{2} \right) = \left(\frac{1}{2}, -\frac{3}{2} \right)$$

- Let the coordinates of D be (m, n) .

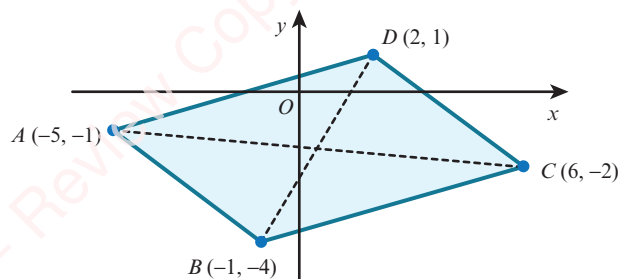
Since $ABCD$ is a parallelogram, the midpoint of BD is the same as the midpoint of AC .

$$\text{Midpoint of } BD = \left(\frac{-1+m}{2}, \frac{-4+n}{2} \right) = \left(\frac{1}{2}, -\frac{3}{2} \right)$$

$$\begin{aligned} \text{Equating the } x\text{-coordinates: } \frac{-1+m}{2} &= \frac{1}{2} \\ -1+m &= 1 \\ m &= 2 \end{aligned}$$

$$\begin{aligned} \text{Equating the } y\text{-coordinates: } \frac{-4+n}{2} &= -\frac{3}{2} \\ -4+n &= -3 \\ n &= 1 \end{aligned}$$

D is the point $(2, 1)$.



WORKED EXAMPLE 3.3

The distance between two points $P(-2, a)$ and $Q(a-2, -7)$ is 17.

Find the two possible values of a .

Answer

$$\begin{array}{cc} (-2, a) & (a-2, -7) \\ \uparrow \uparrow & \uparrow \uparrow \\ (x_1, y_1) & (x_2, y_2) \end{array}$$

Decide which values to use for x_1, y_1, x_2, y_2 .

$$\text{Using } PQ = \sqrt{(x_2 - x_1)^2 + (y_2 - y_1)^2} = 17$$

$$\sqrt{(a - 2 + 2)^2 + (-7 - a)^2} = 17$$

$$a^2 + (-7 - a)^2 = 289$$

$$a^2 + 49 + 14a + a^2 = 289$$

$$2a^2 + 14a - 240 = 0$$

$$a^2 + 7a - 120 = 0$$

$$(a - 8)(a + 15) = 0$$

$$a - 8 = 0 \quad \text{or} \quad a + 15 = 0$$

$$a = 8 \quad \text{or} \quad a = -15$$

Square both sides.

Expand brackets.

Collect terms on one side.

Divide both sides by 2.

Factorise.

Solve.

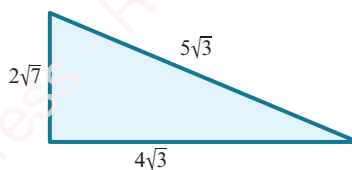
EXPLORE 3.1

The triangle has sides of length $2\sqrt{7}$ cm, $4\sqrt{3}$ cm and $5\sqrt{3}$ cm.

Tamar says that this triangle is right angled.

Discuss whether he is correct.

Explain your reasoning.



74

EXERCISE 3A

- 1 Calculate the lengths of the sides of the triangle PQR .

Use your answers to determine whether or not the triangle is right angled.

- a $P(-4, 6)$, $Q(6, 1)$, $R(2, 9)$
 b $P(-5, 2)$, $Q(9, 3)$, $R(-2, 8)$
- 2 $P(1, 6)$, $Q(-2, 1)$ and $R(3, -2)$.

Show that triangle PQR is a right-angled isosceles triangle and calculate the area of the triangle.

- 3 The distance between two points, $P(a, -1)$ and $Q(-5, a)$, is $4\sqrt{5}$.

Find the two possible values of a .

- 4 The distance between two points, $P(-3, -2)$ and $Q(b, 2b)$, is 10.

Find the two possible values of b .

- 5 The point $(-2, -3)$ is the midpoint of the line segment joining $P(-6, -5)$ and $Q(a, b)$.

Find the value of a and the value of b .

- 6 Three of the vertices of a parallelogram, $ABCD$, are $A(-7, 3)$, $B(-3, -11)$ and $C(3, -5)$.

- a Find the midpoint of AC .
 b Find the coordinates of D .
 c Find the length of the diagonals AC and BD .

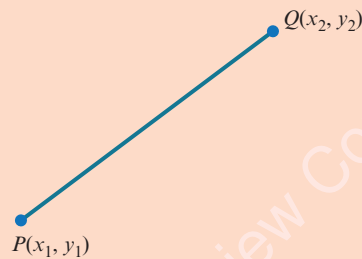
- 7 The point $P(k, 2k)$ is equidistant from $A(8, 11)$ and $B(1, 12)$.
Find the value of k .
- 8 Triangle ABC has vertices at $A(-6, 3)$, $B(3, 5)$ and $C(1, -4)$.
Show that triangle ABC is isosceles and find the area of this triangle.
- 9 Triangle ABC has vertices at $A(-7, 8)$, $B(3, k)$ and $C(8, 5)$.
Given that $AB = 2BC$, find the value of k .
- 10 The line $x + y = 4$ meets the curve $y = 8 - \frac{5}{x}$ at the points A and B .
Find the coordinates of the midpoint of AB .
- 11 The line $y = x - 3$ meets the curve $y^2 = 4x$ at the points A and B .
- Find the coordinates of the midpoint of AB .
 - Find the length of the line segment AB .
- PS** 12 In triangle ABC , the midpoints of the sides AB , BC and AC are $(1, 4)$, $(2, 0)$ and $(-4, 1)$, respectively.
Find the coordinates of points A , B and C .

3.2 Parallel and perpendicular lines

At IGCSE / O Level you learnt how to find the gradient of the line joining the points $P(x_1, y_1)$ and $Q(x_2, y_2)$ using the formula in Key point 3.2.

KEY POINT 3.2

$$\text{Gradient of } PQ = \frac{y_2 - y_1}{x_2 - x_1}$$



You also learnt the following rules about parallel and perpendicular lines.

Parallel lines	Perpendicular lines
If two lines are parallel, then their gradients are equal.	If a line has gradient m , then every line perpendicular to it has gradient $-\frac{1}{m}$.

We can also write the rule for perpendicular lines as:

KEY POINT 3.3

If the gradients of two perpendicular lines are m_1 and m_2 , then $m_1 \times m_2 = -1$.

You need to know how to apply the rules for gradients to solve problems involving parallel and perpendicular lines.

WORKED EXAMPLE 3.4

The coordinates of three points are $A(k - 5, -15)$, $B(10, k)$ and $C(6, -k)$.

Find the two possible values of k if A , B and C are collinear.

Answer

If A , B and C are collinear, then they lie on the same line.

gradient of AB = gradient of BC

$$\frac{k - (-15)}{10 - (k - 5)} = \frac{-k - k}{6 - 10}$$

Simplify.

$$\frac{k + 15}{15 - k} = \frac{k}{2}$$

Cross-multiply.

$$2(k + 15) = k(15 - k)$$

Expand brackets.

$$2k + 30 = 15k - k^2$$

Collect terms on one side.

$$k^2 - 13k + 30 = 0$$

Factorise.

$$(k - 3)(k - 10) = 0$$

Solve.

$$k - 3 = 0 \quad \text{or} \quad k - 10 = 0$$

$$\therefore k = 3 \quad \text{or} \quad k = 10$$

WORKED EXAMPLE 3.5

The vertices of triangle ABC are $A(11, 3)$, $B(2k, k)$ and $C(-1, -11)$.

- Find the two possible values of k if angle ABC is 90° .
- Draw diagrams to show the two possible triangles.

Answer

- Since angle ABC is 90° , gradient of $AB \times$ gradient of $BC = -1$.

$$\frac{k - 3}{2k - 11} \times \frac{-11 - k}{-1 - 2k} = -1$$

Simplify the second fraction.

$$\frac{k-3}{2k-11} \times \frac{k+11}{2k+1} = -1$$

Multiply both sides by $(2k-11)(2k+1)$.

$$(k-3)(k+11) = -(2k-11)(2k+1)$$

Expand brackets.

$$k^2 + 8k - 33 = -4k^2 + 20k + 11$$

Collect terms on one side.

$$5k^2 - 12k - 44 = 0$$

Factorise.

$$(5k-22)(k+2) = 0$$

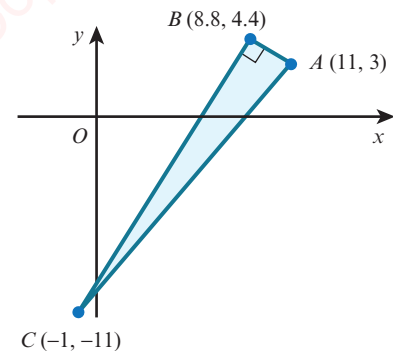
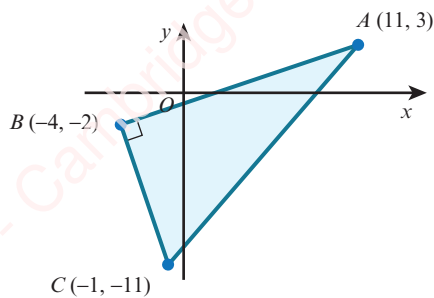
$$5k-22=0 \quad \text{or} \quad k+2=0$$

$$\therefore k=4.4 \quad \text{or} \quad k=-2$$

b If $k=4.4$, then B is the point $(8.8, 4.4)$.

If $k=-2$, then B is the point $(-4, 2)$.

The two possible triangles are:



EXERCISE 3B

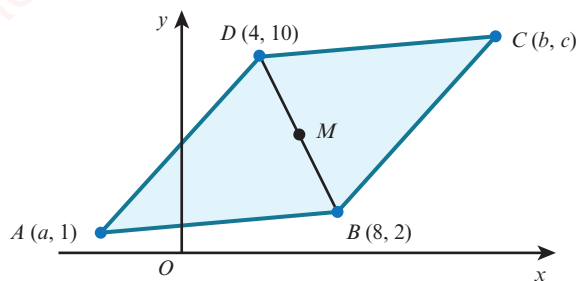
- The coordinates of three points are $A(-6, 4)$, $B(4, 6)$ and $C(10, 7)$.
 - Find the gradient of AB and the gradient of BC .
 - Use your answer to part **a** to decide whether or not the points A , B and C are collinear.
- The midpoint of the line segment joining $P(-4, 5)$ and $Q(6, 1)$ is M .
The point R has coordinates $(-3, -7)$.
Show that RM is perpendicular to PQ .
- Two vertices of a rectangle, $ABCD$, are $A(-6, -4)$ and $B(4, -8)$.
Find the gradient of CD and the gradient of BC .
- The coordinates of three of the vertices of a trapezium, $ABCD$, are $A(3, 5)$, $B(-5, 4)$ and $C(1, -5)$.
 AD is parallel to BC and angle ADC is 90° .
Find the coordinates of D .
- The coordinates of three points are $A(5, 8)$, $B(k, 5)$ and $C(-k, 4)$.
Find the value of k if A , B and C are collinear.
- The vertices of triangle ABC are $A(-9, 2k-8)$, $B(6, k)$ and $C(k, 12)$.
Find the two possible values of k if angle ABC is 90° .

- 7 A is the point $(0, 8)$ and B is the point $(8, 6)$.
Find the point C on the y -axis such that angle ABC is 90° .
- 8 Three points have coordinates $A(7, 4)$, $B(19, 8)$ and $C(k, 2k)$.
Find the value of the constant k for which:
- C lies on the line that passes through the points A and B
 - angle CAB is 90° .
- 9 The line $\frac{x}{a} - \frac{y}{b} = 1$, where a and b are positive constants, meets the x -axis at P and the y -axis at Q .
The gradient of the line PQ is $\frac{2}{5}$ and the length of the line PQ is $2\sqrt{29}$.
Find the value of a and the value of b .
- 10 P is the point $(a, a - 2)$ and Q is the point $(4 - 3a, -a)$.
- Find the gradient of the line PQ .
 - Find the gradient of a line perpendicular to PQ .
 - Given that the distance PQ is $10\sqrt{5}$, find the two possible values of a .

- 11 The diagram shows a rhombus $ABCD$.

M is the midpoint of BD .

- Find the coordinates of M .
- Find the value of a , the value of b and the value of c .
- Find the perimeter of the rhombus.
- Find the area of the rhombus.



3.3 Equations of straight lines

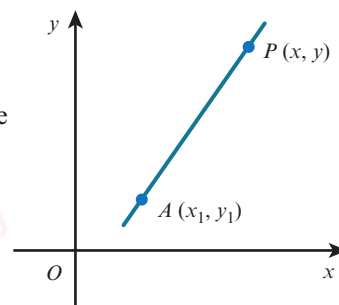
At IGCSE / O Level you learnt the equation of a straight line is:

KEY POINT 3.4

$y = mx + c$, where m is the gradient and c is the y -intercept, when the line is non-vertical.
 $x = b$ when the line is vertical, where b is the x -intercept.

There is an alternative formula that we can use when we know the gradient of a straight line and a point on the line.

Consider a line, with gradient m , that passes through the known point $A(x_1, y_1)$ and whose general point is $P(x, y)$.



Gradient of $AP = m$, hence $\frac{y - y_1}{x - x_1} = m$

Multiply both sides by $(x - x_1)$.

$$y - y_1 = m(x - x_1)$$

KEY POINT 3.5

The equation of a straight line, with gradient m , that passes through the point (x_1, y_1) is:

$$y - y_1 = m(x - x_1)$$

WORKED EXAMPLE 3.6

Find the equation of the straight line with gradient -2 that passes through the point $(4, 1)$.

Answer

Using $y - y_1 = m(x - x_1)$ with $m = -2$, $x_1 = 4$ and $y_1 = 1$:

$$y - 1 = -2(x - 4)$$

$$y - 1 = -2x + 8$$

$$2x + y = 9$$

WORKED EXAMPLE 3.7

Find the equation of the straight line passing through the points $(-4, 3)$ and $(6, -2)$.

Answer

$$\begin{array}{cc} (-4, 3) & (6, -2) \\ \uparrow \uparrow & \uparrow \uparrow \\ (x_1, y_1) & (x_2, y_2) \end{array}$$

Decide which values to use for x_1, y_1, x_2, y_2 .

$$\text{Gradient} = m = \frac{y_2 - y_1}{x_2 - x_1} = \frac{(-2) - 3}{6 - (-4)} = -\frac{1}{2}$$

Using $y - y_1 = m(x - x_1)$ with $m = -\frac{1}{2}$, $x_1 = -4$ and $y_1 = 3$:

$$y - 3 = -\frac{1}{2}(x + 4)$$

$$2y - 6 = -x - 4$$

$$x + 2y = 2$$

WORKED EXAMPLE 3.8

Find the equation of the perpendicular bisector of the line segment joining $A(-5, 1)$ and $B(7, -2)$.

Answer

$$\text{Gradient of } AB = \frac{-2 - 1}{7 - (-5)} = \frac{-3}{12} = -\frac{1}{4}$$

$$\text{Use gradient} = \frac{y_2 - y_1}{x_2 - x_1}$$

$$\text{Gradient of the perpendicular} = 4$$

$$\text{Use } m_1 \times m_2 = -1.$$

$$\text{Midpoint of } AB = \left(\frac{-5 + 7}{2}, \frac{1 + (-2)}{2} \right) = \left(1, -\frac{1}{2} \right)$$

$$\text{Use midpoint} = \left(\frac{x_1 + x_2}{2}, \frac{y_1 + y_2}{2} \right).$$

\therefore The perpendicular bisector is the line with gradient 4 passing through the point $\left(1, -\frac{1}{2} \right)$.

Using $y - y_1 = m(x - x_1)$ with $x_1 = 1$, $y_1 = -\frac{1}{2}$ and $m = 4$:

$$y + \frac{1}{2} = 4(x - 1)$$

Expand brackets and simplify.

$$y = 4x - 4\frac{1}{2}$$

Multiply both sides by 2.

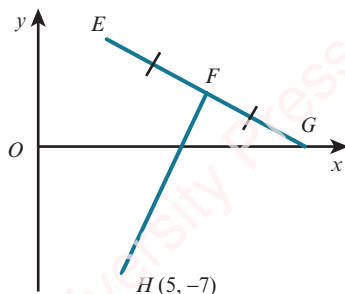
$$2y = 8x - 9$$

EXERCISE 3C

80

- Find the equation of the line with:
 - gradient 2 passing through the point $(4, 9)$
 - gradient -3 passing through the point $(1, -4)$
 - gradient $-\frac{2}{3}$ passing through the point $(-4, 3)$.
- Find the equation of the line passing through each pair of points.
 - $(1, 0)$ and $(5, 6)$
 - $(3, -5)$ and $(-2, 4)$
 - $(3, -1)$ and $(-3, -5)$
- Find the equation of the line:
 - parallel to the line $y = 3x - 5$, passing through the point $(1, 7)$
 - parallel to the line $x + 2y = 6$, passing through the point $(4, -6)$
 - perpendicular to the line $y = 2x - 3$, passing through the point $(6, 1)$
 - perpendicular to the line $2x - 3y = 12$, passing through the point $(8, -3)$.
- Find the equation of the perpendicular bisector of the line segment joining the points:
 - $(5, 2)$ and $(-3, 6)$
 - $(-2, -5)$ and $(8, 1)$
 - $(-2, -7)$ and $(5, -4)$.

- 5 The line l_1 passes through the points $P(-10, 1)$ and $Q(2, 10)$. The line l_2 is parallel to l_1 and passes through the point $(4, -1)$. The point R lies on l_2 , such that QR is perpendicular to l_2 . Find the coordinates of R .
- 6 P is the point $(-4, 2)$ and Q is the point $(5, -4)$.
A line, l , is drawn through P and perpendicular to PQ to meet the y -axis at the point R .
- Find the equation of the line l .
 - Find the coordinates of the point R .
 - Find the area of triangle PQR .
- 7 The line l_1 has equation $3x - 2y = 12$ and the line l_2 has equation $y = 15 - 2x$. The lines l_1 and l_2 intersect at the point A .
- Find the coordinates of A .
 - Find the equation of the line through A that is perpendicular to the line l_1 .
- 8 The perpendicular bisector of the line joining $A(-10, 5)$ and $B(-2, -1)$ intersects the x -axis at P and the y -axis at Q .
- Find the equation of the line PQ .
 - Find the coordinates of P and Q .
 - Find the length of PQ .
- 9 The line l_1 has equation $2x + 5y = 10$.
The line l_2 passes through the point $A(-9, -6)$ and is perpendicular to the line l_1 .
- Find the equation of the line l_2 .
 - Given that the lines l_1 and l_2 intersect at the point B , find the area of triangle ABO , where O is the origin.
- 10 The diagram shows the points E, F and G lying on the line $x + 2y = 16$. The point G lies on the x -axis and $EF = FG$. The line FH is perpendicular to EG . Find the coordinates of E and F .



- 11 The coordinates of three points are $A(-4, -1)$, $B(8, -9)$ and $C(k, 7)$.
 M is the midpoint of AB and MC is perpendicular to AB . Find the value of k .
- 12 The point P is the reflection of the point $(-2, 10)$ in the line $4x - 3y = 12$.
Find the coordinates of P .

- 13 The coordinates of triangle ABC are $A(-7, 3)$, $B(3, -7)$ and $C(8, 8)$. P is the foot of the perpendicular from B to AC .
- Find the equation of the line BP .
 - Find the coordinates of P .
 - Find the lengths of AC and BP .
 - Use your answers to part **c** to find the area of triangle ABC .
- 14 The coordinates of triangle PQR are $P(1, 1)$, $Q(1, 8)$ and $R(6, 6)$.
- Find the equation of the perpendicular bisectors of:
 - PQ
 - PR
 - Find the coordinates of the point that is equidistant from P , Q and R .
- PS** 15 The equations of two of the sides of triangle ABC are $x + 2y = 8$ and $2x + y = 1$. Given that A is the point $(2, -3)$ and that angle $ABC = 90^\circ$, find:
- the equation of the third side
 - the coordinates of the point B .

- PS** 16 Find two straight lines whose x -intercepts differ by 7, whose y -intercepts differ by 5 and whose gradients differ by 2.

Is your solution unique? Investigate further.

[This question is based upon *Straight line pairs* on the Underground Mathematics website.]



WEB LINK

Try the following resources on the Underground Mathematics website:

- *Lots of lines!*
- *Straight lines*
- *Simultaneous squares*
- *Straight line pairs.*

3.4 The equation of a circle

In this section you will learn about the equation of a circle. A circle is defined as the locus of all the points in a plane that are a fixed distance (the radius) from a given point (the centre).

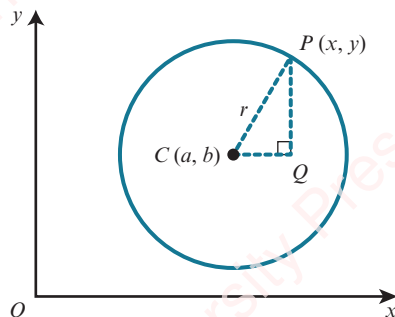
EXPLORE 3.2

- 1 Use graphing software to draw each of the following circles. From your graphs find the coordinates of the centre and the radius of each circle, and copy and complete the following table.

	Equation of circle	Centre	Radius
a	$x^2 + y^2 = 25$		
b	$(x - 2)^2 + (y - 1)^2 = 9$		
c	$(x + 3)^2 + (y + 5)^2 = 16$		
d	$(x - 8)^2 + (y + 6)^2 = 49$		
e	$x^2 + (y + 4)^2 = 4$		
f	$(x + 6)^2 + y^2 = 64$		

- 2 Discuss your results with your classmates and explain how you can find the coordinates of the centre of a circle and the radius of a circle just by looking at the equation of the circle.

To find the equation of a circle, we let $P(x, y)$ be any point on the circumference of a circle with centre $C(a, b)$ and radius r .



Using Pythagoras' theorem on triangle CQP gives $CQ^2 + PQ^2 = r^2$.

Substituting $CQ = x - a$ and $PQ = y - b$ into $CQ^2 + PQ^2 = r^2$ gives:

$$(x - a)^2 + (y - b)^2 = r^2$$

KEY POINT 3.6

The equation of a circle with centre (a, b) and radius r can be written in **completed square form** as:

$$(x - a)^2 + (y - b)^2 = r^2$$

EXPLORE 3.3

The completed square form for the equation of a circle with centre (a, b) and radius r is $(x - a)^2 + (y - b)^2 = r^2$. Use graphing software to investigate the effects of:

- | | |
|-------------------------------|---------------------------------|
| a increasing the value of a | b decreasing the value of a |
| c increasing the value of b | d decreasing the value of b . |

WORKED EXAMPLE 3.9

Write down the coordinates of the centre and the radius of each of these circles.

- $x^2 + y^2 = 4$
- $(x - 2)^2 + (y - 4)^2 = 100$
- $(x + 1)^2 + (y - 8)^2 = 12$

Answer

- Centre = $(0, 0)$, radius = $\sqrt{4} = 2$
- Centre = $(2, 4)$, radius = $\sqrt{100} = 10$
- Centre = $(-1, 8)$, radius = $\sqrt{12} = 2\sqrt{3}$

i DID YOU KNOW?

In the 17th century, the French philosopher and mathematician René Descartes developed the idea of using equations to represent geometrical shapes. The Cartesian coordinate system is named after this famous mathematician.

WORKED EXAMPLE 3.10

Find the equation of the circle with centre $(-4, 3)$ and radius 6.

Answer

Equation of circle is $(x - a)^2 + (y - b)^2 = r^2$, where $a = -4$, $b = 3$ and $r = 6$.

$$(x - (-4))^2 + (y - 3)^2 = 6^2$$

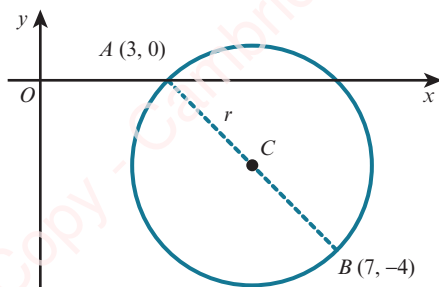
$$(x + 4)^2 + (y - 3)^2 = 36$$

WORKED EXAMPLE 3.11

A is the point $(3, 0)$ and B is the point $(7, -4)$.

Find the equation of the circle that has AB as a diameter.

Answer



The centre of the circle, C , is the midpoint of AB .

$$C = \left(\frac{3+7}{2}, \frac{0+(-4)}{2} \right) = (5, -2)$$

Radius of circle, r , is equal to AC .

$$r = \sqrt{(5-3)^2 + (-2-0)^2} = \sqrt{8}$$

Equation of circle is $(x - a)^2 + (y - b)^2 = r^2$, where $a = 5$, $b = -2$ and $r = \sqrt{8}$.

$$(x - 5)^2 + (y + 2)^2 = (\sqrt{8})^2$$

$$(x - 5)^2 + (y + 2)^2 = 8$$

Expanding the equation $(x - a)^2 + (y - b)^2 = r^2$ gives:

$$x^2 - 2ax + a^2 + y^2 - 2by + b^2 = r^2$$

Rearranging gives:

$$x^2 + y^2 - 2ax - 2by + (a^2 + b^2 - r^2) = 0$$

When we write the equation of a circle in this form, we can note some important characteristics of the equation of a circle. For example:

- the coefficients of x^2 and y^2 are equal
- there is no xy term.

We often write the expanded form of a circle as:

KEY POINT 3.7

$$x^2 + y^2 + 2gx + 2fy + c = 0$$

where $(-g, -f)$ is the centre and $\sqrt{g^2 + f^2 - c}$ is the radius.

This is the equation of a circle in expanded **general form**.

TIP

You should not try to memorise the formulae for the centre and radius of a circle in this form, but rather work them out if needed, as shown in Worked example 3.12.

WORKED EXAMPLE 3.12

Find the centre and the radius of the circle $x^2 + y^2 + 10x - 8y - 40 = 0$.

Answer

We answer this question by first completing the square.

$$x^2 + 10x + y^2 - 8y - 40 = 0$$

Complete the square.

$$(x + 5)^2 - 5^2 + (y - 4)^2 - 4^2 - 40 = 0$$

Collect constant terms together.

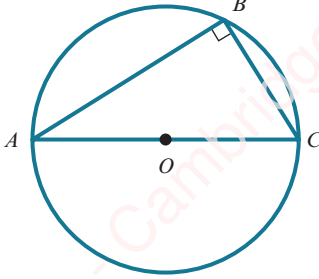
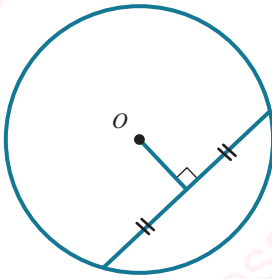
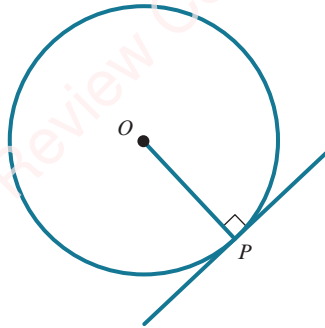
$$(x + 5)^2 + (y - 4)^2 = 81$$

Compare with $(x - a)^2 + (y - b)^2 = r^2$.

$$a = -5 \quad b = 4 \quad r^2 = 81$$

Centre = $(-5, 4)$ and radius = 9.

It is useful to remember the three following right angle facts for circles.

		
<p>The angle in a semicircle is a right angle.</p>	<p>The perpendicular from the centre of a circle to a chord bisects the chord.</p>	<p>The tangent to a circle at a point is perpendicular to the radius at that point.</p>

From these statements we can conclude that:

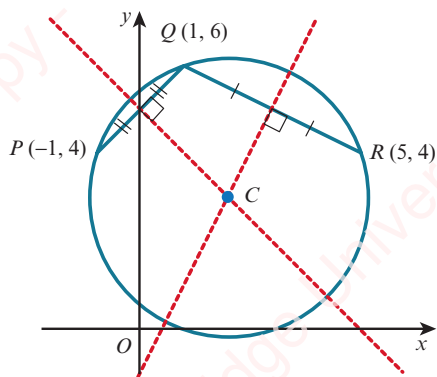
- If triangle ABC is right angled at B , then the points A , B and C lie on the circumference of a circle with AC as diameter.
- The perpendicular bisector of a chord passes through the centre of the circle.
- If a radius and a line at a point, P , on the circumference are at right angles, then the line must be a tangent to the curve.

WORKED EXAMPLE 3.13

A circle passes through the points $P(-1, 4)$, $Q(1, 6)$ and $R(5, 4)$.

Find the equation of the circle.

Answer



The centre of the circle lies on the perpendicular bisector of PQ and on the perpendicular bisector of QR .

$$\text{Midpoint of } PQ = \left(\frac{-1+1}{2}, \frac{4+6}{2} \right) = (0, 5)$$

$$\text{Gradient of } PQ = \frac{6-4}{1-(-1)} = 1$$

Gradient of perpendicular bisector of $PQ = -1$

Equation of perpendicular bisector of PQ is:

$$\begin{aligned} (y-5) &= -1(x-0) \\ y &= -x+5 \quad \text{----- (1)} \end{aligned}$$

$$\text{Midpoint of } QR = \left(\frac{1+5}{2}, \frac{6+4}{2} \right) = (3, 5)$$

$$\text{Gradient of } QR = \frac{4-6}{5-1} = -\frac{1}{2}$$

Gradient of perpendicular bisector of $QR = 2$

Equation of perpendicular bisector of QR is:

$$\begin{aligned} (y-5) &= 2(x-3) \\ y &= 2x-1 \quad \text{----- (2)} \end{aligned}$$

Solving equations (1) and (2) gives:

$$x = 2, y = 3$$

Centre of circle = $(2, 3)$

$$\text{Radius} = CR = \sqrt{(5-2)^2 + (4-3)^2} = \sqrt{10}$$

Hence, the equation of the circle is $(x-2)^2 + (y-3)^2 = 10$.

Alternative method:

The equation of the circle is $(x - a)^2 + (y - b)^2 = r^2$.

The points $(-1, 4)$, $(1, 6)$ and $(5, 4)$ lie on the circle, so substituting gives:

$$(-1 - a)^2 + (4 - b)^2 = r^2$$

$$a^2 + 2a + b^2 - 8b + 17 = r^2 \text{ ----- (1)}$$

and similar for the other two points, giving equations (2) and (3).

Then subtracting (1)–(3) and (2)–(3) gives two simultaneous equations for a and b , which can then be solved.

Finally, substituting into (1) gives r^2 .

EXERCISE 3D

- Find the centre and the radius of each of the following circles.

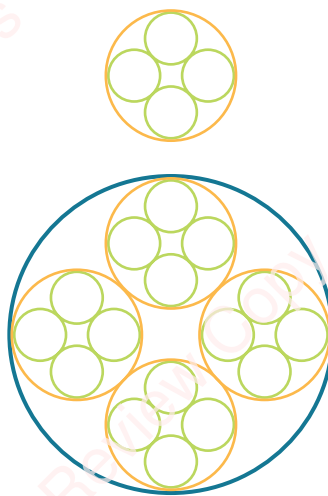
a $x^2 + y^2 = 16$	b $2x^2 + 2y^2 = 9$
c $x^2 + (y - 2)^2 = 25$	d $(x - 5)^2 + (y + 3)^2 = 4$
e $(x + 7)^2 + y^2 = 18$	f $2(x - 3)^2 + 2(y + 4)^2 = 45$
g $x^2 + y^2 - 8x + 20y + 110 = 0$	h $2x^2 + 2y^2 - 14x - 10y - 163 = 0$
- Find the equation of each of the following circles.

a centre $(0, 0)$, radius 8	b centre $(5, -2)$, radius 4
c centre $(-1, 3)$, radius $\sqrt{7}$	d centre $\left(\frac{1}{2}, -\frac{3}{2}\right)$, radius $\frac{5}{2}$
- Find the equation of the circle with centre $(2, 5)$ passing through the point $(6, 8)$.
- A diameter of a circle has its end points at $A(-6, 8)$ and $B(2, -4)$.
Find the equation of the circle.
- Sketch the circle $(x - 3)^2 + (y + 2)^2 = 9$.
- Find the equation of the circle that touches the x -axis and whose centre is $(6, -5)$.
- The points $P(1, -2)$ and $Q(7, 1)$ lie on the circumference of a circle.
Show that the centre of the circle lies on the line $4x + 2y = 15$.
- A circle passes through the points $(3, 2)$ and $(7, 2)$ and has radius $2\sqrt{2}$.
Find the two possible equations for this circle.
- A circle passes through the points $O(0, 0)$, $A(8, 4)$ and $B(6, 6)$.
Show that OA is a diameter of the circle and find the equation of this circle.
- Show that $x^2 + y^2 - 6x + 2y = 6$ can be written in the form $(x - a)^2 + (y - b)^2 = r^2$, where a , b and r are constants to be found. Hence, write down the coordinates of the centre of the circle and also the radius of the circle.

- 11 The equation of a circle is $(x - 3)^2 + (y + 2)^2 = 25$. Show that the point $A(6, -6)$ lies on the circle and find the equation of the tangent to the circle at the point A .
- 12 The line $2x + 5y = 20$ cuts the x -axis at A and the y -axis at B . The point C is the midpoint of the line AB . Find the equation of the circle that has centre C and that passes through the points A and B . Show that this circle also passes through the point $O(0, 0)$.
- 13 The points $P(-5, 6)$, $Q(-3, 8)$ and $R(3, 2)$ are joined to form a triangle.
- Show that angle PQR is a right angle.
 - Find the equation of the circle that passes through the points P , Q and R .
- 14 Find the equation of the circle that passes through the points $(7, 3)$ and $(11, -1)$ and has its centre lying on the line $2x + y = 7$.
- 15 A circle passes through the points $O(0, 0)$, $P(3, 9)$ and $Q(11, 11)$. Find the equation of the circle.
- 16 A circle has radius 10 units and passes through the point $(5, -16)$. The x -axis is a tangent to the circle. Find the possible equations of the circle.

PS

- 17 a The design shown is made from four green circles and one orange circle.
- The radius of each green circle is 1 unit. Find the radius of the orange circle.
 - Use graphing software to draw the design.
- b The design in part a is extended, as shown.
- The radius of each green circle is 1 unit. Find the radius of the blue circle.
 - Use graphing software to draw this extended design.



WEB LINK

Try the following resources on the Underground Mathematics website:

- *Olympic rings*
- *Teddy bear*.

3.5 Problems involving intersections of lines and circles

In Chapter 1 you learnt that the points of intersection of a line and a curve can be found by solving their equations simultaneously. You also learnt that if the resulting equation is of the form $ax^2 + bx + c = 0$, then $b^2 - 4ac$ gives information about the line and the curve.

$b^2 - 4ac$	Nature of roots	Line and parabola
> 0	two distinct real roots	two distinct points of intersection
$= 0$	two equal real roots	one point of intersection (line is a tangent)
< 0	no real roots	no points of intersection

In this section you will solve problems involving the intersection of lines and circles.



TIP

We can also describe an equation that has 'two equal real roots' as having 'one repeated (real) root'.

WORKED EXAMPLE 3.14

The line $x = 3y + 10$ intersects the circle $x^2 + y^2 = 20$ at the points A and B .

- Find the coordinates of the points A and B .
- Find the equation of the perpendicular bisector of AB and show that it passes through the centre of the circle.
- The perpendicular bisector of AB intersects the circle at the points P and Q .
Find the exact coordinates of P and Q .

Answer

a $x^2 + y^2 = 20$ Substitute $3y + 10$ for x .

$(3y + 10)^2 + y^2 = 20$ Expand and simplify.

$y^2 + 6y + 8 = 0$ Factorise.

$(y + 2)(y + 4) = 0$

$y = -2$ or $y = -4$

When $y = -2$, $x = 4$ and when $y = -4$, $x = -2$.

A and B are the points $(-2, -4)$ and $(4, -2)$.

b Gradient of $AB = \frac{-2 - (-4)}{4 - (-2)} = \frac{1}{3}$

So the gradient of the perpendicular bisector $= -3$.

Midpoint of $AB = \left(\frac{-2 + 4}{2}, \frac{-4 + (-2)}{2} \right) = (1, -3)$

$y - y_1 = m(x - x_1)$ Use $m = -3$, $x_1 = 1$ and $y_1 = -3$.

$y - (-3) = -3(x - 1)$

Perpendicular bisector is $y = -3x$.

When $x = 0$, $y = -3(0) = 0$.

Hence, the perpendicular bisector of AB passes through the point $(0, 0)$, the centre of the circle $x^2 + y^2 = 20$.

c $x^2 + y^2 = 20$ Substitute $-3x$ for y .

$10x^2 = 20$

$x = \pm\sqrt{2}$

When $x = -\sqrt{2}$, $y = 3\sqrt{2}$ and when $x = \sqrt{2}$, $y = -3\sqrt{2}$.

P and Q are the points $(-\sqrt{2}, 3\sqrt{2})$ and $(\sqrt{2}, -3\sqrt{2})$, respectively.

WORKED EXAMPLE 3.15

Show that the line $y = x - 13$ is a tangent to the circle $x^2 + y^2 - 8x + 6y + 7 = 0$.

Answer

$$x^2 + y^2 - 8x + 6y + 7 = 0$$

Substitute $x - 13$ for y .

$$x^2 + (x - 13)^2 - 8x + 6(x - 13) + 7 = 0$$

Expand and simplify.

$$x^2 - 14x + 49 = 0$$

Factorise.

$$(x - 7)(x - 7) = 0$$

$$x = 7 \text{ or } x = 7$$

The equation has one repeated root, hence $y = x - 13$ is a tangent.

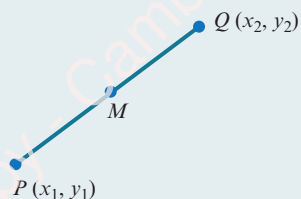
EXERCISE 3E

- Find the points of intersection of the line $y = x - 3$ and the circle $(x - 3)^2 + (y + 2)^2 = 20$.
- The line $2x - y + 3 = 0$ intersects the circle $x^2 + y^2 - 4x + 6y - 12 = 0$ at two points, D and E . Find the length of DE .
- Show that the line $3x + y = 6$ is a tangent to the circle $x^2 + y^2 + 4x + 16y + 28 = 0$.
- Find the set of values of m for which the line $y = mx + 1$ intersects the circle $(x - 7)^2 + (y - 5)^2 = 20$ at two distinct points.
- The line $2y - x = 12$ intersects the circle $x^2 + y^2 - 10x - 12y + 36 = 0$ at the points A and B .
 - Find the coordinates of the points A and B .
 - Find the equation of the perpendicular bisector of AB .
 - The perpendicular bisector of AB intersects the circle at the points P and Q . Find the exact coordinates of P and Q .
 - Find the exact area of quadrilateral $APBQ$.
- PS** Show that the circles $x^2 + y^2 = 25$ and $x^2 + y^2 - 24x - 18y + 125 = 0$ touch each other. Find the coordinates of the point where they touch.
[This question is taken from *Can we show that these two circles touch?* on the Underground Mathematics website.]
- PS** Two circles have the following properties:
 - the x -axis is a common tangent to the circles
 - the point $(8, 2)$ lies on both circles
 - the centre of each circle lies on the line $x + 2y = 22$.
 - Find the equation of each circle.
 - Prove that the line $4x + 3y = 88$ is a common tangent to these circles.

[Inspired by *Can we find the two circles that satisfy these three conditions?* on the Underground Mathematics website.]

Checklist of learning and understanding

Midpoint, gradient and length of line segment



- Midpoint, M , of PQ is $\left(\frac{x_1 + x_2}{2}, \frac{y_1 + y_2}{2}\right)$.
- Gradient of PQ is $\frac{y_2 - y_1}{x_2 - x_1}$.
- Length of segment PQ is $\sqrt{(x_2 - x_1)^2 + (y_2 - y_1)^2}$.

Parallel and perpendicular lines

- If the gradients of two parallel lines are m_1 and m_2 , then $m_1 = m_2$.
- If the gradients of two perpendicular lines are m_1 and m_2 , then $m_1 \times m_2 = -1$.

The equation of a straight line is:

- $y - y_1 = m(x - x_1)$, where m is the gradient and (x_1, y_1) is a point on the line.

The equation of a circle is:

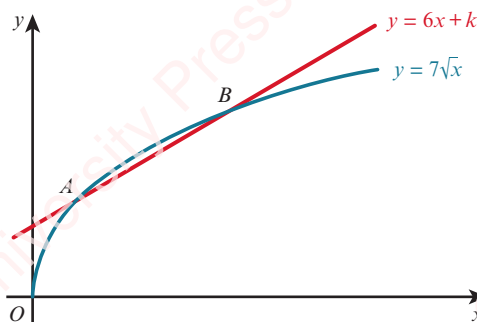
- $(x - a)^2 + (y - b)^2 = r^2$, where (a, b) is the centre and r is the radius.
- $x^2 + y^2 + 2gx + 2fy + c = 0$, where $(-g, -f)$ is the centre and $\sqrt{g^2 + f^2 - c}$ is the radius.

END-OF-CHAPTER REVIEW EXERCISE 3

- 1 A line has equation $2x + y = 20$ and a curve has equation $y = a + \frac{18}{x-3}$, where a is a constant. Find the set of values of a for which the line does not intersect the curve. [4]



2



The diagram shows the curve $y = 7\sqrt{x}$ and the line $y = 6x + k$, where k is a constant.

The curve and the line intersect at the points A and B .

- i For the case where $k = 2$, find the x -coordinates of A and B . [4]
 ii Find the value of k for which $y = 6x + k$ is a tangent to the curve $y = 7\sqrt{x}$. [2]

Cambridge International AS & A Level Mathematics 9709 Paper 11 Q5 June 2012

92

- 3 A is the point $(a, 3)$ and B is the point $(4, b)$.
 The length of the line segment AB is $4\sqrt{5}$ units and the gradient is $-\frac{1}{2}$.
 Find the possible values of a and b . [6]

- 4 The curve $y = 3\sqrt{x-2}$ and the line $3x - 4y + 3 = 0$ intersect at the points P and Q .
 Find the length of PQ . [6]

- 5 The line $ax - 2y = 30$ passes through the points $A(10, 10)$ and $B(b, 10b)$, where a and b are constants.
 a Find the values of a and b . [3]
 b Find the coordinates of the midpoint of AB . [1]
 c Find the equation of the perpendicular bisector of the line AB . [3]



- 6 The line with gradient -2 passing through the point $P(3t, 2t)$ intersects the x -axis at A and the y -axis at B .
 i Find the area of triangle AOB in terms of t . [3]
 The line through P perpendicular to AB intersects the x -axis at C .
 ii Show that the mid-point of PC lies on the line $y = x$. [4]

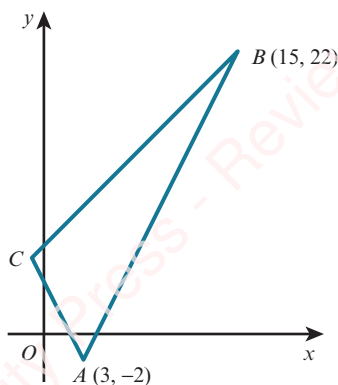
Cambridge International AS & A Level Mathematics 9709 Paper 11 Q6 June 2015

- 7 The point P is the reflection of the point $(-7, 5)$ in the line $5x - 3y = 18$.
 Find the coordinates of P . You must show all your working. [7]

- 8 The curve $y = x + 2 - \frac{4}{x}$ and the line $x - 2y + 6 = 0$ intersect at the points A and B .
- Find the coordinates of these two points. [4]
 - Find the perpendicular bisector of the line AB . [4]
- 9 The line $y = mx + 1$ intersects the circle $x^2 + y^2 - 19x - 51 = 0$ at the point $P(5, 11)$.
- Find the coordinates of the point Q where the line meets the curve again. [4]
 - Find the equation of the perpendicular bisector of the line PQ . [3]
 - Find the x -coordinates of the points where this perpendicular bisector intersects the circle. [4]
- Give your answers in exact form.



10



The diagram shows a triangle ABC in which A is $(3, -2)$ and B is $(15, 22)$. The gradients of AB , AC and BC are $2m$, $-2m$ and m respectively, where m is a positive constant.

- Find the gradient of AB and deduce the value of m . [2]
 - Find the coordinates of C . [4]
- The perpendicular bisector of AB meets BC at D .
- Find the coordinates of D . [4]

Cambridge International AS & A Level Mathematics 9709 Paper 11 Q8 June 2010



11 The point A has coordinates $(-1, 6)$ and the point B has coordinates $(7, 2)$.

- Find the equation of the perpendicular bisector of AB , giving your answer in the form $y = mx + c$. [4]
- A point C on the perpendicular bisector has coordinates (p, q) . The distance OC is 2 units, where O is the origin. Write down two equations involving p and q and hence find the coordinates of the possible positions of C . [5]

Cambridge International AS & A Level Mathematics 9709 Paper 11 Q7 November 2013



- 12 The coordinates of A are $(-3, 2)$ and the coordinates of C are $(5, 6)$.

The mid-point of AC is M and the perpendicular bisector of AC cuts the x -axis at B .

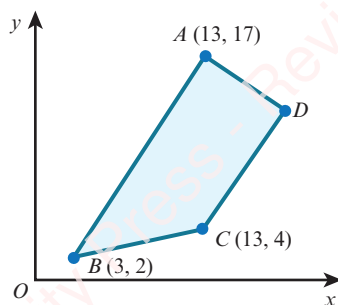
- Find the equation of MB and the coordinates of B . [5]
- Show that AB is perpendicular to BC . [2]
- Given that $ABCD$ is a square, find the coordinates of D and the length of AD . [2]

Cambridge International AS & A Level Mathematics 9709 Paper 11 Q9 June 2012

- 13 The points $A(1, -2)$ and $B(5, 4)$ lie on a circle with centre $C(6, p)$.

- Find the equation of the perpendicular bisector of the line segment AB . [4]
- Use your answer to part **a** to find the value of p . [1]
- Find the equation of the circle. [4]

14



$ABCD$ is a trapezium with AB parallel to DC and angle $BAD = 90^\circ$.

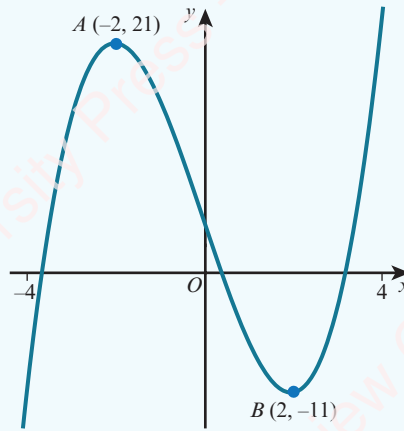
- Calculate the coordinates of D . [7]
 - Calculate the area of trapezium $ABCD$. [2]
- 15 The equation of a curve is $xy = 12$ and the equation of a line is $3x + y = k$, where k is a constant.
- In the case where $k = 20$, the line intersects the curve at the points A and B .
Find the midpoint of the line AB . [4]
 - Find the set of values of k for which the line $3x + y = k$ intersects the curve at two distinct points. [4]
- 16 A is the point $(-3, 6)$ and B is the point $(9, -10)$.
- Find the equation of the line through A and B . [3]
 - Show that the perpendicular bisector of the line AB is $3x - 4y = 17$. [3]
 - A circle passes through A and B and has its centre on the line $x = 15$. Find the equation of this circle. [4]
- 17 The equation of a circle is $x^2 + y^2 - 8x + 4y + 4 = 0$.
- Find the radius of the circle and the coordinates of its centre. [4]
 - Find the x -coordinates of the points where the circle crosses the x -axis, giving your answers in exact form. [4]
 - Show that the point $A(6, 2\sqrt{3} - 2)$ lies on the circle. [2]
 - Show that the equation of the tangent to the circle at A is $\sqrt{3}x + 3y = 12\sqrt{3} - 6$. [4]

CROSS-TOPIC REVIEW EXERCISE 1

1 Solve the equation $\frac{4}{x^4} + 18 = \frac{17}{x^2}$.

[4]

2



The diagram shows the graph of $y = f(x)$ for $-4 \leq x \leq 4$.

Sketch on separate diagrams, showing the coordinates of any turning points, the graphs of:

a $y = f(x) + 5$

[2]

b $y = -2f(x)$

[2]

3 The graph of $f(x) = ax + b$ is reflected in the y -axis and then translated by the vector $\begin{pmatrix} 0 \\ 3 \end{pmatrix}$.

The resulting function is $g(x) = 1 - 5x$. Find the value of a and the value of b .

[4]

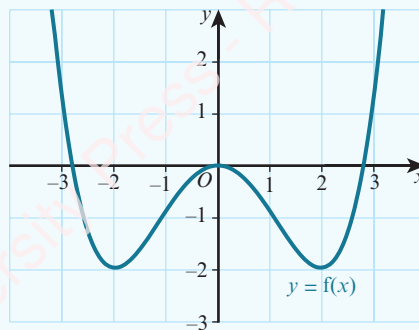
4 The graph of $y = (x + 1)^2$ is transformed by the composition of two transformations to the graph of $y = 2(x - 4)^2$. Find these two transformations.

[4]

5 The graph of $y = x^2 + 1$ is transformed by applying a reflection in the x -axis followed by a translation of $\begin{pmatrix} 3 \\ 2 \end{pmatrix}$. Find the equation of the resulting graph in the form $y = ax^2 + bx + c$.

[4]


6



The diagram shows the graph of $y = f(x)$ for $-3 \leq x \leq 3$.

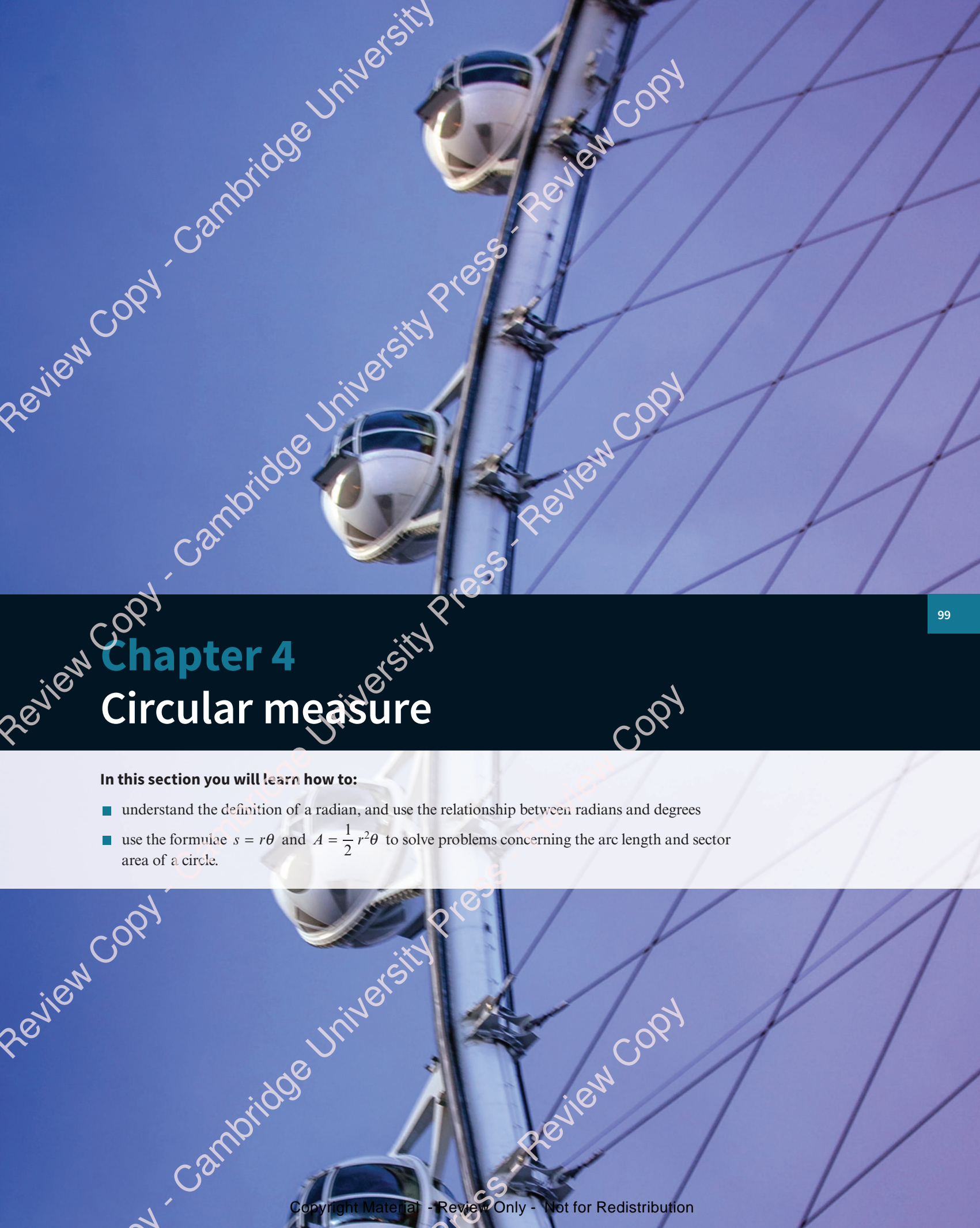
Sketch the graph of $y = 2 - f(x)$.

[4]

- 7 The function f is such that $f(x) = x^2 - 5x + 5$ for $x \in \mathbb{R}$.
- a Find the set of values of x for which $f(x) \leq x$. [3]
- b The line $y = mx - 11$ is a tangent to the curve $y = f(x)$.
Find the two possible values of m . [3]
- 8 The line $x + ky + k^2 = 0$, where k is a constant, is a tangent to the curve $y^2 = 4x$ at the point P .
Find, in terms of k , the coordinates of P . [6]
- 9 A is the point $(4, -6)$ and B is the point $(12, 10)$. The perpendicular bisector of AB intersects the x -axis at C and the y -axis at D . Find the length of CD . [6]
- 10 The points A , B and C have coordinates $A(2, 8)$, $B(9, 7)$ and $C(k, k - 2)$.
- a Given that $AB = BC$, show that a possible value of k is 4 and find the other possible value of k . [3]
- b For the case where $k = 4$, find the equation of the line that bisects angle ABC . [4]
- 11 A curve has equation $xy = 12 + x$ and a line has equation $y = kx - 9$, where k is a constant.
- a In the case where $k = 2$, find the coordinates of the points of intersection of the curve and the line. [3]
- b Find the set of values of k for which the line does not intersect the curve. [4]
- 12 The function f is such that $f(x) = 2x - 3$ for $x \geq k$, where k is a constant.
The function g is such that $g(x) = x^2 - 4$ for $x \geq -4$.
- a Find the smallest value of k for which the composite function gf can be formed. [3]
- b Solve the inequality $gf(x) > 45$. [4]
-  13 The functions f and g are defined by
- $$f(x) = \frac{4}{x} - 2 \quad \text{for } x > 0,$$
- $$g(x) = \frac{4}{5x + 2} \quad \text{for } x \geq 0.$$
- i Find and simplify an expression for $fg(x)$ and state the range of fg . [3]
- ii Find an expression for $g^{-1}(x)$ and find the domain of g^{-1} . [5]
- Cambridge International AS & A Level Mathematics 9709 Paper 11 Q8 November 2016*
- 14 The equation $x^2 + bx + c = 0$ has roots -2 and 7 .
- a Find the value of b and the value of c . [2]
- b Using these values of b and c , find:
- i the coordinates of the vertex of the curve $y = x^2 + bx + c$ [3]
- ii the set of values of x for which $x^2 + bx + c < 10$. [3]

- 15 The line L_1 passes through the points $A(-6, 10)$ and $B(6, 2)$. The line L_2 is perpendicular to L_1 and passes through the point $C(-7, 2)$.
- a Find the equation of the line L_2 . [4]
- b Find the coordinates of the point of intersection of lines L_1 and L_2 . [4]
- 16 A curve has equation $y = 12x - x^2$.
- a Express $12x - x^2$ in the form $a - (x + b)^2$, where a and b are constants to be determined. [3]
- b State the maximum value of $12x - x^2$. [1]
- The function g is defined as $g: x \mapsto 12x - x^2$, for $x \geq 6$.
- c State the domain and range of g^{-1} . [2]
- d Find $g^{-1}(x)$. [3]
- 17 a Express $3x^2 + 12x - 1$ in the form $a(x + b)^2 + c$, where a , b and c are constants. [3]
- b Write down the coordinates of the vertex of the curve $y = 3x^2 + 12x - 1$. [2]
- c Find the set of values of k for which $3x^2 + 12x - 1 = kx - 4$ has no real solutions. [4]
- 18 The function f is such that $f(x) = 2x + 1$ for $x \in \mathbb{R}$.
- The function g is such that $g(x) = 8 - ax - bx^2$ for $x \geq k$, where a , b and k are constants.
- The function fg is such that $fg(x) = 17 - 24x - 4x^2$ for $x \geq k$.
- a Find the value of a and the value of b . [3]
- b Find the least possible value of k for which g has an inverse. [4]
- c For the value of k found in part **b**, find $g^{-1}(x)$. [2]
- 19 A circle has centre $(8, 3)$ and passes through the point $P(13, 5)$.
- a Find the equation of the circle. [4]
- b Find the equation of the tangent to the circle at the point P .
- Give your answer in the form $ax + by = c$. [5]
- 20 The function f is such that $f(x) = 3x - 7$ for $x \in \mathbb{R}$.
- The function g is such that $g(x) = \frac{18}{5-x}$ for $x \in \mathbb{R}$, $x \neq 5$.
- a Find the value of x for which $fg(x) = 5$. [3]
- b Find $f^{-1}(x)$ and $g^{-1}(x)$. [3]
- c Show that the equation $f^{-1}(x) = g^{-1}(x)$ has no real roots. [3]
- 21 A curve has equation $y = 2 - 3x - x^2$.
- a Express $2 - 3x - x^2$ in the form $a - (x + b)^2$, where a and b are constants. [2]
- b Write down the coordinates of the maximum point on the curve. [1]
- c Find the two values of m for which the line $y = mx + 3$ is a tangent to the curve $y = 2 - 3x - x^2$. [3]
- d For each value of m in part **c**, find the coordinates of the point where the line touches the curve. [3]

- 22 A circle, C , has equation $x^2 + y^2 - 16x - 36 = 0$.
- a Find the coordinates of the centre of the circle. [2]
 - b Find the radius of the circle. [2]
 - c Find the coordinates of the points where the circle meets the x -axis. [2]
 - d The point P lies on the circle and the line L is a tangent to C at the point P . Given that the line L has gradient $\frac{4}{3}$, find the equation of the perpendicular to the line L at the point P . [3]
- 23 The function f is such that $f(x) = 3x - 2$ for $x \geq 0$.
The function g is such that $g(x) = 2x^2 - 8$ for $x \leq k$, where k is a constant.
- a Find the greatest value of k for which the composite function fg can be formed. [3]
 - b For the case where $k = -3$:
 - i find the range of fg [2]
 - ii find $(fg)^{-1}(x)$ and state the domain and range of $(fg)^{-1}$. [4]
- 24 A curve has equation $xy = 20$ and a line has equation $x + 2y = k$, where k is a constant.
- a In the case where $k = 14$, the line intersects the curve at the points A and B .
Find:
 - i the coordinates of the points A and B [3]
 - ii the equation of the perpendicular bisector of the line AB . [4]
 - b Find the values of k for which the line is a tangent to the curve. [4]



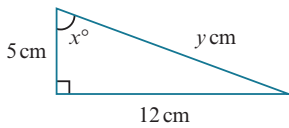
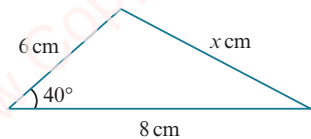
Chapter 4

Circular measure

In this section you will learn how to:

- understand the definition of a radian, and use the relationship between radians and degrees
- use the formulae $s = r\theta$ and $A = \frac{1}{2}r^2\theta$ to solve problems concerning the arc length and sector area of a circle.

PREREQUISITE KNOWLEDGE

Where it comes from	What you should be able to do	Check your skills
IGCSE / O Level Mathematics	Find the perimeter and area of sectors.	1 Find the perimeter and area of a sector of a circle with radius 6 cm and sector angle 30° .
IGCSE / O Level Mathematics	Use Pythagoras' theorem and trigonometry on right-angled triangles.	2  Find the value of x and the value of y .
IGCSE / O Level Mathematics	Solve problems involving the sine and cosine rules for any triangle and the formula: $\text{Area of triangle} = \frac{1}{2}ab \sin C$	3  Find the value of x and the area of the triangle.

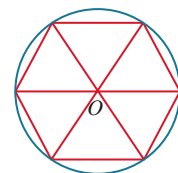
Another measure for angles

100

At IGCSE / O Level, you will have always worked with angles that were measured in degrees. Have you ever wondered why there are 360° in one complete revolution?

The original reason for choosing the degree as a unit of angular measure is unknown but there are a number of different theories.

- Ancient astronomers claimed that the Sun advanced in its path by one degree each day and that a solar year consisted of 360 days.
- The ancient Babylonians divided the circle into 6 equilateral triangles and then subdivided each angle at O into 60 further parts, resulting in 360 divisions in one complete revolution.
- 360 has many factors that make division of the circle so much easier.

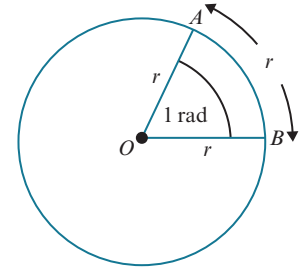


Degrees are not the only way in which we can measure angles. In this chapter you will learn how to use **radian** measure. This is sometimes referred to as the natural unit of angular measure and we use it extensively in mathematics because it can simplify many formulae and calculations.

4.1 Radians

In the diagram, the magnitude of angle AOB is 1 radian.

1 radian is sometimes written as 1 rad, but often no symbol at all is used for angles measured in radians.



KEY POINT 4.1

An arc equal in length to the radius of a circle subtends an angle of 1 radian at the centre.

It follows that the circumference (an arc of length $2\pi r$) subtends an angle of 2π radians at the centre, therefore:

KEY POINT 4.2

$$\begin{aligned} 2\pi \text{ radians} &= 360^\circ \\ \pi \text{ radians} &= 180^\circ \end{aligned}$$

When an angle is written in terms of π , we usually omit the word radian (or rad).

Hence, $\pi = 180^\circ$.

Converting from degrees to radians

Since $180^\circ = \pi$, then $90^\circ = \frac{\pi}{2}$, $45^\circ = \frac{\pi}{4}$ etc.

We can convert angles that are not simple fractions of 180° using the following rule.

KEY POINT 4.3

To change from degrees to radians, multiply by $\frac{\pi}{180}$.

Converting from radians to degrees

Since $\pi = 180^\circ$, $\frac{\pi}{6} = 30^\circ$, $\frac{\pi}{10} = 18^\circ$ etc.

We can convert angles that are not simple fractions of π using the following rule.

KEY POINT 4.4

To change from radians to degrees, multiply by $\frac{180}{\pi}$.

(It is useful to remember that $1 \text{ radian} = 1 \times \frac{180}{\pi} \approx 57^\circ$.)

WORKED EXAMPLE 4.1

a Change 30° to radians, giving your answer in terms of π .

b Change $\frac{5\pi}{9}$ radians to degrees.

Answer

a Method 1:

$$180^\circ = \pi \text{ radians}$$

$$\left(\frac{180}{6}\right)^\circ = \frac{\pi}{6} \text{ radians}$$

$$30^\circ = \frac{\pi}{6} \text{ radians}$$

b Method 1:

$$\pi \text{ radians} = 180^\circ$$

$$\frac{\pi}{9} \text{ radians} = 20^\circ$$

$$\frac{5\pi}{9} \text{ radians} = 100^\circ$$

Method 2:

$$30^\circ = \left(30 \times \frac{\pi}{180}\right) \text{ radians}$$

$$30^\circ = \frac{\pi}{6} \text{ radians}$$

Method 2:

$$\frac{5\pi}{9} \text{ radians} = \left(\frac{5\pi}{9} \times \frac{180}{\pi}\right)^\circ$$

$$\frac{5\pi}{9} \text{ radians} = 100^\circ$$

In Worked example 4.1, we found that $30^\circ = \frac{\pi}{6}$ radians.

There are other angles, which you should learn, that can be written as simple multiples of π .

There are:

Degrees	0°	30°	45°	60°	90°	180°	270°	360°
Radians	0	$\frac{\pi}{6}$	$\frac{\pi}{4}$	$\frac{\pi}{3}$	$\frac{\pi}{2}$	π	$\frac{3\pi}{2}$	2π

We can quickly find other angles, such as 120° , using these known angles.

EXERCISE 4A

1 Change these angles to radians, giving your answers in terms of π .

- | | | | | |
|---------------|---------------|---------------|---------------|---------------|
| a 20° | b 40° | c 25° | d 50° | e 5° |
| f 150° | g 135° | h 210° | i 225° | j 300° |
| k 65° | l 540° | m 9° | n 35° | o 600° |

2 Change these angles to degrees.

- | | | | | |
|--------------------|---------------------|---------------------|---------------------|--------------------|
| a $\frac{\pi}{2}$ | b $\frac{\pi}{3}$ | c $\frac{\pi}{6}$ | d $\frac{\pi}{12}$ | e $\frac{4\pi}{3}$ |
| f $\frac{4\pi}{9}$ | g $\frac{3\pi}{10}$ | h $\frac{7\pi}{12}$ | i $\frac{9\pi}{20}$ | j $\frac{9\pi}{2}$ |
| k $\frac{7\pi}{5}$ | l $\frac{4\pi}{15}$ | m $\frac{5\pi}{4}$ | n $\frac{7\pi}{3}$ | o $\frac{9\pi}{8}$ |

3 Write each of these angles in radians, correct to 3 significant figures.

- a 28° b 32° c 47° d 200° e 320°

4 Write each of these angles in degrees, correct to 1 decimal place.

- a 1.2 rad b 0.8 rad c 1.34 rad d 1.52 rad e 0.79 rad

5 Copy and complete the tables, giving your answers in terms of π .

a

Degrees	0	45	90	135	180	225	270	315	360
Radians	0				π				2π

b

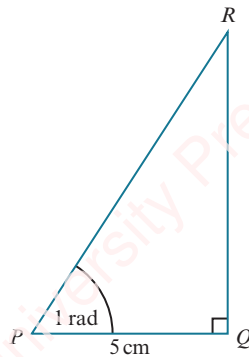
Degrees	0	30	60	90	120	150	180	210	240	270	300	330	360
Radians	0						π						2π



6 Use your calculator to find:

- a $\sin(0.7)$ b $\tan(1.5)$ c $\cos(0.9)$
 d $\cos \frac{\pi}{2}$ e $\sin \frac{\pi}{3}$ f $\tan \frac{\pi}{5}$

7 Calculate the length of QR .

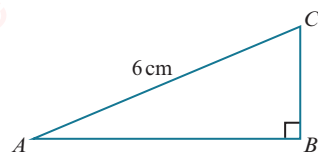


TIP

You do not need to change the angle to degrees. You should set the angle mode on your calculator to radians.



8



Robert is told the size of angle BAC in degrees and he is then asked to calculate the length of the line BC . He uses his calculator but forgets that his calculator is in radian mode. Luckily he still manages to obtain the correct answer. Given that angle BAC is between 10° and 15° , use graphing software to help you find the size of angle BAC , correct to 2 decimal places.

EXPLORE 4.1

Discuss and explain, with the aid of diagrams, the meaning of each of these words.

chord

arc

sector

segment

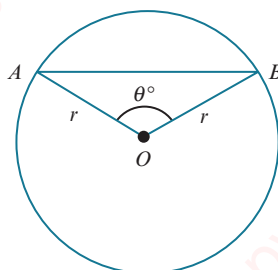
Explain what is meant by:

- minor arc and major arc
- minor sector and major sector
- minor segment and major segment.

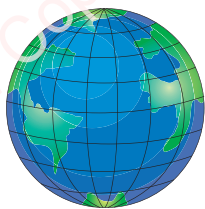
Given that the radius of a circle is r cm and that the angle subtended at the centre of the circle by the chord AB is θ° , discuss and write down an expression, in terms of r and θ , for finding each of the following:

- length of minor arc AB
- length of chord AB
- perimeter of minor sector AOB
- area of minor sector AOB
- perimeter of minor segment AOB
- area of minor segment AOB .

What would the answers be if the angle θ was measured in radians instead?



i DID YOU KNOW?



A geographical coordinate system is used to describe the location of any point on the Earth's surface. The coordinates used are longitude and latitude. 'Horizontal' circles and 'vertical' circles form the 'grid'. The horizontal circles are perpendicular to the axis of rotation of the Earth and are known as lines of latitude. The vertical circles pass through the North and South poles and are known as lines of longitude.

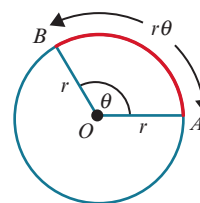
globe WEB LINK

Try the *Where are you?* resource on the Underground Mathematics website.

104

4.2 Length of an arc

From the definition of a radian, an arc that subtends an angle of 1 radian at the centre of the circle is of length r . Hence, if an arc subtends an angle of θ radians at the centre, the length of the arc is $r\theta$.



globe KEY POINT 4.5

Arc length = $r\theta$

WORKED EXAMPLE 4.2

An arc subtends an angle of $\frac{\pi}{3}$ radians at the centre of a circle with radius 15 cm.

Find the length of the arc in terms of π .

Answer

Arc length = $r\theta$

$$= 15 \times \frac{\pi}{3}$$

$$= 5\pi \text{ cm}$$

WORKED EXAMPLE 4.3

A sector has an angle of 1.5 radians and an arc length of 12 cm.

Find the radius of the sector.

Answer

$$\text{Arc length} = r\theta$$

$$12 = r \times 1.5$$

$$r = 8 \text{ cm}$$

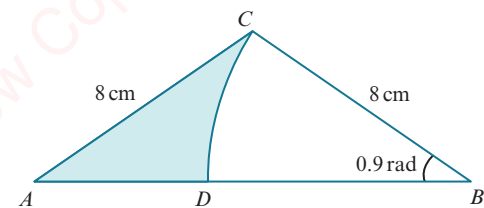
WORKED EXAMPLE 4.4

Triangle ABC is isosceles with $AC = CB = 8$ cm.

CD is an arc of a circle, centre B , and angle $ABC = 0.9$ radians.

Find:

- the length of arc CD
- the length of AD
- the perimeter of the shaded region.



Answer

$$\text{a Arc length} = r\theta$$

$$= 8 \times 0.9$$

$$= 7.2 \text{ cm}$$

$$\text{b } AB = 2 \times 8 \cos 0.9 = 9.9457\dots$$

$$AD = AB - DB$$

$$= 9.9457\dots - 8$$

$$= 1.95 \text{ cm (to 3 significant figures)}$$

$$\text{c Perimeter} = DC + CA + AD$$

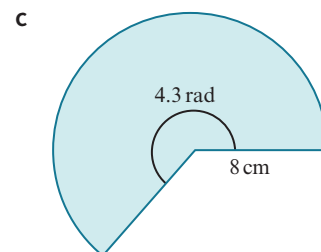
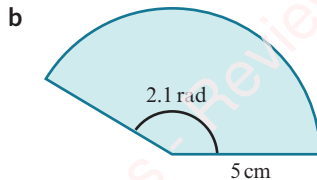
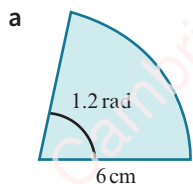
$$= 7.2 + 8 + 1.945\dots$$

$$= 17.1 \text{ cm (to 3 significant figures)}$$

EXERCISE 4B

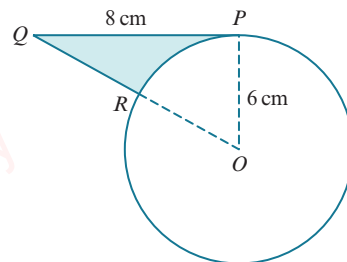
- Find, in terms of π , the arc length of a sector of:
 - radius 8 cm and angle $\frac{\pi}{4}$
 - radius 7 cm and angle $\frac{3\pi}{7}$
 - radius 16 cm and angle $\frac{3\pi}{8}$
 - radius 24 cm and angle $\frac{7\pi}{6}$.
- Find the arc length of a sector of:
 - radius 10 cm and angle 1.3 radians
 - radius 3.5 cm and angle 0.65 radians.
- Find, in radians, the angle of a sector of:
 - radius 10 cm and arc length 5 cm
 - radius 12 cm and arc length 9.6 cm.
- The High Roller Ferris wheel in the USA has a diameter of 158.5 metres. Calculate the distance travelled by a capsule as the wheel rotates through $\frac{\pi}{16}$ radians.

5 Find the perimeter of each of these sectors.



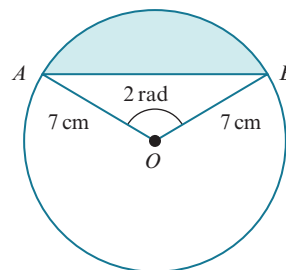
6 The circle has radius 6 cm and centre O . PQ is a tangent to the circle at the point P . QRO is a straight line. Find:

- a angle POQ , in radians
- b the length of QR
- c the perimeter of the shaded area.



7 The circle has radius 7 cm and centre O . AB is a chord and angle $AOB = 2$ radians. Find:

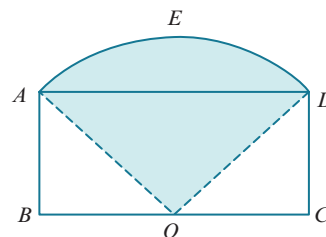
- a the length of arc AB
- b the length of chord AB
- c the perimeter of the shaded segment.



8 $ABCD$ is a rectangle with $AB = 5$ cm and $BC = 24$ cm. O is the midpoint of BC .

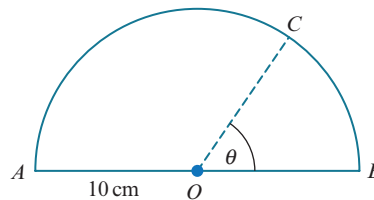
$OAED$ is a sector of a circle, centre O . Find:

- a the length of AO
- b angle AOD , in radians
- c the perimeter of the shaded region.



9 The diagram shows a semicircle with radius 10 cm and centre O . Angle $BOC = \theta$ radians. The perimeter of sector AOC is twice the perimeter of sector BOC .

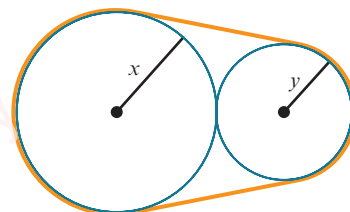
- a Show that $\theta = \frac{\pi - 2}{3}$.
- b Find the perimeter of triangle ABC .



PS

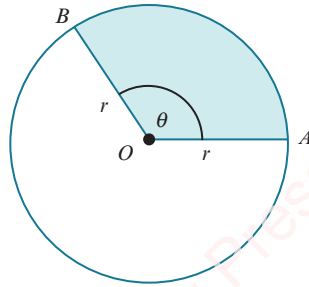
10 The diagram shows the cross-section of two cylindrical metal rods of radii x cm and y cm. A thin band, of length P cm, holds the two rods tightly together.

Show that $P = 4\sqrt{xy} + \pi(x + y) + 2(x - y) \sin^{-1} \left(\frac{x - y}{x + y} \right)$.



[This question is based upon *Belt on the Underground Mathematics website*.]

4.3 Area of a sector



To find the formula for the area of a sector, we use the ratio:

$$\frac{\text{area of sector}}{\text{area of circle}} = \frac{\text{angle in the sector}}{\text{complete angle at the centre}}$$

When θ is measured in radians, the ratio becomes:

$$\frac{\text{area of sector}}{\pi r^2} = \frac{\theta}{2\pi}$$

$$\text{area of sector} = \frac{\theta}{2\pi} \times \pi r^2$$

KEY POINT 4.6

$$\text{Area of sector} = \frac{1}{2} r^2 \theta$$

WORKED EXAMPLE 4.5

Find the area of a sector of a circle with radius 9 cm and angle $\frac{\pi}{6}$ radians.

Give your answer in terms of π .

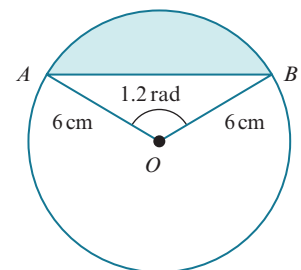
Answer

$$\begin{aligned} \text{Area of sector} &= \frac{1}{2} r^2 \theta \\ &= \frac{1}{2} \times 9^2 \times \frac{\pi}{6} \\ &= \frac{27\pi}{4} \text{ cm}^2 \end{aligned}$$

WORKED EXAMPLE 4.6

The circle has radius 6 cm and centre O . AB is a chord and angle $AOB = 1.2$ radians. Find:

- the area of sector AOB
- the area of triangle AOB
- the area of the shaded segment.



Answer

$$\begin{aligned} \text{a Area of sector } AOB &= \frac{1}{2} r^2 \theta \\ &= \frac{1}{2} \times 6^2 \times 1.2 \\ &= 21.6 \text{ cm}^2 \end{aligned}$$

$$\begin{aligned} \text{b Area of triangle } AOB &= \frac{1}{2} ab \sin C \\ &= \frac{1}{2} \times 6 \times 6 \times \sin 1.2 \\ &= 16.7767\dots \\ &= 16.8 \text{ cm}^2 \text{ (to 3 significant figures)} \end{aligned}$$

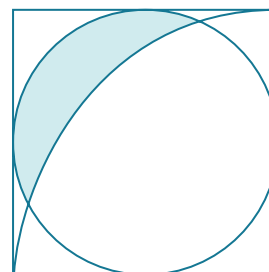
$$\begin{aligned} \text{c Area of shaded segment} &= \text{area of sector } AOB - \text{area of triangle } AOB \\ &= 21.6 - 16.7767\dots \\ &= 4.82 \text{ cm}^2 \text{ (to 3 significant figures)} \end{aligned}$$

WORKED EXAMPLE 4.7

The diagram shows a circle inscribed inside a square of side length 10 cm.

A quarter circle, of radius 10 cm, is drawn with the vertex of the square as centre.

Find the shaded area.

**Answer**

$$OQ = 10 \text{ cm}$$

$$\text{Radius of inscribed circle} = 5 \text{ cm}$$

$$\text{Pythagoras: } \frac{1}{2} (\text{diagonal of square}) = \frac{1}{2} (\sqrt{10^2 + 10^2}) = 5\sqrt{2} \text{ cm}$$

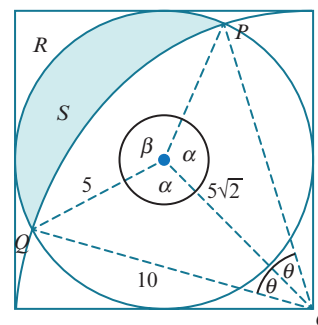
$$\begin{aligned} \text{Cosine rule: } \cos \alpha &= \frac{5^2 + (5\sqrt{2})^2 - 10^2}{2 \times 5 \times 5\sqrt{2}} \\ \alpha &= 1.932 \text{ rad} \end{aligned}$$

$$\text{Hence, } \beta = 2\pi - 2\alpha = 2.4189 \text{ rad}$$

$$\begin{aligned} \text{Sine rule: } \frac{\sin \theta}{5} &= \frac{\sin \alpha}{10} \\ \theta &= 0.4867 \text{ rad} \end{aligned}$$

Shaded area = area of segment PQR – area of segment PQS

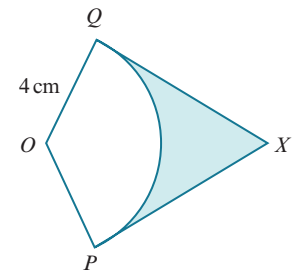
$$\begin{aligned} &= \left(\frac{1}{2} \times 5^2 \times \beta - \frac{1}{2} \times 5^2 \times \sin \beta \right) - \left(\frac{1}{2} \times 10^2 \times 2\theta - \frac{1}{2} \times 10^2 \times \sin 2\theta \right) \\ &= 21.968 - 7.3296 \\ &= 14.6 \text{ cm}^2 \text{ (to 3 significant figures)} \end{aligned}$$



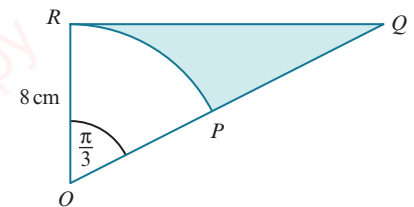
EXERCISE 4C

- Find, in terms of π , the area of a sector of:
 - radius 12 cm and angle $\frac{\pi}{6}$ radians
 - radius 10 cm and angle $\frac{2\pi}{5}$ radians
 - radius 4.5 cm and angle $\frac{2\pi}{9}$ radians
 - radius 9 cm and angle $\frac{4\pi}{3}$ radians.
- Find the area of a sector of:
 - radius 34 cm and angle 1.5 radian
 - radius 2.6 cm and angle 0.9 radians.
- Find, in radians, the angle of a sector of:
 - radius 4 cm and area 9 cm^2
 - radius 6 cm and area 27 cm^2 .
- AOB is a sector of a circle, centre O , with radius 8 cm. The length of arc AB is 10 cm. Find:
 - angle AOB , in radians
 - the area of the sector AOB .

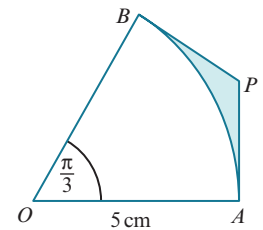
- The diagram shows a sector, POQ , of a circle, centre O , with radius 4 cm. The length of arc PQ is 7 cm. The lines PX and QX are tangents to the circle at P and Q , respectively.
 - Find angle POQ , in radians.
 - Find the length of PX .
 - Find the area of the shaded region.



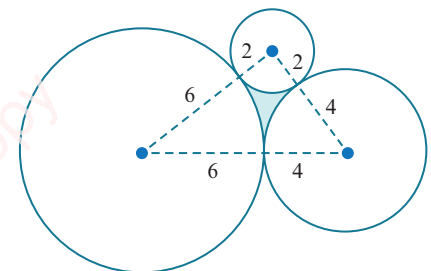
- The diagram shows a sector, POR , of a circle, centre O , with radius 8 cm and sector angle $\frac{\pi}{3}$ radians. The lines OR and QR are perpendicular and OPQ is a straight line. Find the exact area of the shaded region.



- The diagram shows a sector, AOB , of a circle, centre O , with radius 5 cm and sector angle $\frac{\pi}{3}$ radians. The lines AP and BP are tangents to the circle at A and B , respectively.
 - Find the exact length of AP .
 - Find the exact area of the shaded region.



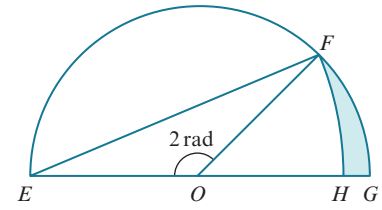
- PS** 8 The diagram shows three touching circles with radii 6 cm, 4 cm and 2 cm. Find the area of the shaded region.



9 The diagram shows a semicircle, centre O , with radius 8 cm.

FH is the arc of a circle, centre E . Find the area of:

- a triangle EOF
- b sector FOG
- c sector FEH
- d the shaded region.



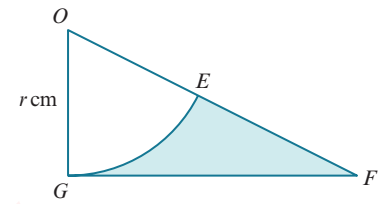
10 The diagram shows a sector, EOG , of a circle, centre O , with radius r cm. The line GF is a tangent to the circle at G , and E is the midpoint of OF .

a The perimeter of the shaded region is P cm.

Show that $P = \frac{r}{3}(3 + 3\sqrt{3} + \pi)$.

b The area of the shaded region is A cm².

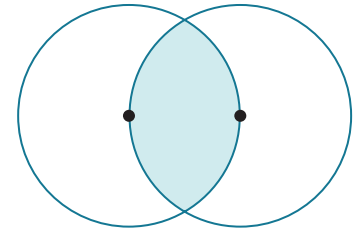
Show that $A = \frac{r^2}{6}(3\sqrt{3} - \pi)$.



11 The diagram shows two circles with radius r cm.

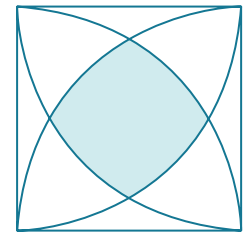
The centre of each circle lies on the circumference of the other circle.

Find, in terms of r , the exact area of the shaded region.



PS 12 The diagram shows a square of side length 10 cm.

A quarter circle, of radius 10 cm, is drawn from each vertex of the square. Find the exact area of the shaded region.

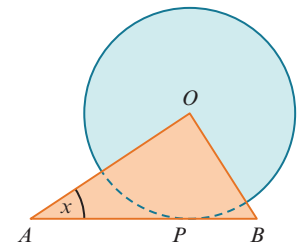


PS 13 The diagram shows a circle with radius 1 cm, centre O .

Triangle AOB is right angled and its hypotenuse AB is a tangent to the circle at P .

Angle $BAO = x$ radians.

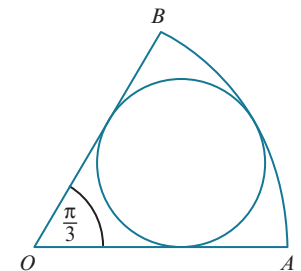
- a Find an expression for the length of AB in terms of $\tan x$.
- b Find the value of x for which the two shaded areas are equal.



P 14 The diagram shows a sector, AOB , of a circle, centre O , with radius R cm and sector angle $\frac{\pi}{3}$ radians.

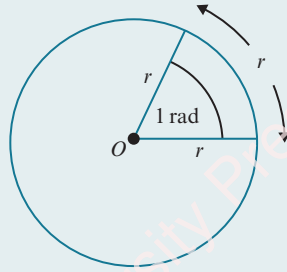
An inner circle of radius r cm touches the three sides of the sector.

- a Show that $R = 3r$.
- b Show that $\frac{\text{area of inner circle}}{\text{area of sector}} = \frac{2}{3}$.



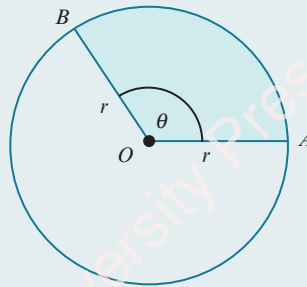
Checklist of learning and understanding

Radians and degrees



- One radian is the size of the angle subtended at the centre of a circle, radius r , by an arc of length r .
- π radians = 180°
- To change from degrees to radians, multiply by $\frac{\pi}{180}$.
- To change from radians to degrees, multiply by $\frac{180}{\pi}$.

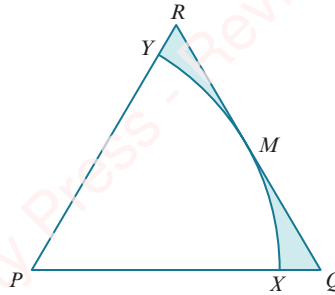
Arc length and area of a sector



- When θ is measured in radians, the length of arc AB is $r\theta$.
- When θ is measured in radians, the area of sector AOB is $\frac{1}{2}r^2\theta$.

END-OF-CHAPTER REVIEW EXERCISE 4

1

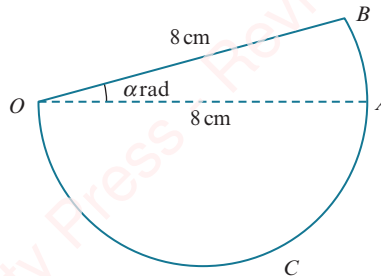


The diagram shows an equilateral triangle, PQR , with side length 5 cm. M is the midpoint of the line QR . An arc of a circle, centre P , touches QR at M and meets PQ at X and PR at Y . Find in terms of π and $\sqrt{3}$:

- a the total perimeter of the shaded region [5]
- b the total area of the shaded region. [3]



2



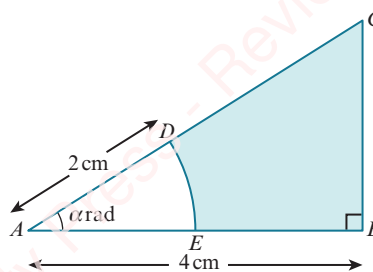
In the diagram, OAB is a sector of a circle with centre O and radius 8 cm. Angle BOA is α radians. OAC is a semicircle with diameter OA . The area of the semicircle OAC is twice the area of the sector OAB .

- i Find α in terms of π . [3]
- ii Find the perimeter of the complete figure in terms of π . [2]

Cambridge International AS & A Level Mathematics 9709 Paper 11 Q3 June 2013



3

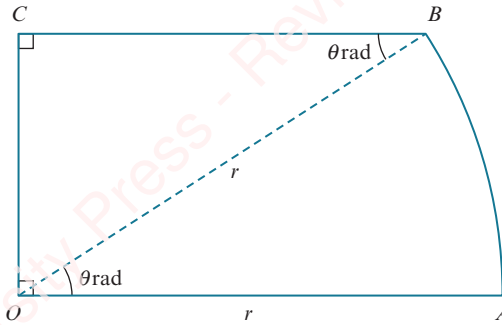


The diagram shows triangle ABC in which AB is perpendicular to BC . The length of AB is 4 cm and angle CAB is α radians. The arc DE with centre A and radius 2 cm meets AC at D and AB at E . Find, in terms of α ,

- i the area of the shaded region, [3]
- ii the perimeter of the shaded region. [3]

Cambridge International AS & A Level Mathematics 9709 Paper 11 Q6 June 2014

4

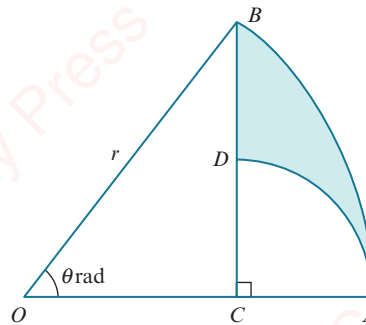


The diagram represents a metal plate $OABC$, consisting of a sector OAB of a circle with centre O and radius r , together with a triangle OCB which is right-angled at C . Angle $AOB = \theta$ radians and OC is perpendicular to OA .

- i Find an expression in terms of r and θ for the perimeter of the plate. [3]
- ii For the case where $r = 10$ and $\theta = \frac{1}{5}\pi$, find the area of the plate. [3]

Cambridge International AS & A Level Mathematics 9709 Paper 11 Q5 November 2011

5



The diagram shows a sector OAB of a circle with centre O and radius r . Angle AOB is θ radians. The point C on OA is such that BC is perpendicular to OA . The point D is on BC and the circular arc AD has centre C .

- i Find AC in terms of r and θ . [1]
- ii Find the perimeter of the shaded region ABD when $\theta = \frac{1}{3}\pi$ and $r = 4$, giving your answer as an exact value. [6]

Cambridge International AS & A Level Mathematics 9709 Paper 11 Q6 November 2012

6

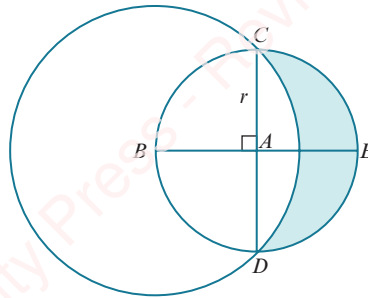
A piece of wire of length 24 cm is bent to form the perimeter of a sector of a circle of radius r cm.

- i Show that the area of the sector, A cm², is given by $A = 12r - r^2$. [3]
- ii Express A in the form $a - (r - b)^2$, where a and b are constants. [2]
- iii Given that r can vary, state the greatest value of A and find the corresponding angle of the sector. [2]

Cambridge International AS & A Level Mathematics 9709 Paper 11 Q5 June 2015



7



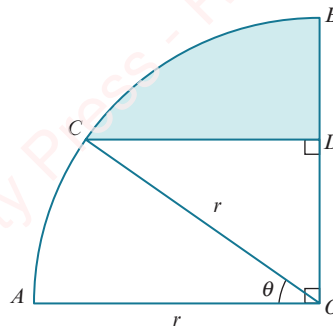
The diagram shows a circle with centre A and radius r . Diameters CAD and BAE are perpendicular to each other. A larger circle has centre B and passes through C and D .

- i Show that the radius of the larger circle is $r\sqrt{2}$. [1]
- ii Find the area of the shaded region in terms of r . [6]

Cambridge International AS & A Level Mathematics 9709 Paper 11 Q7 November 2015



8



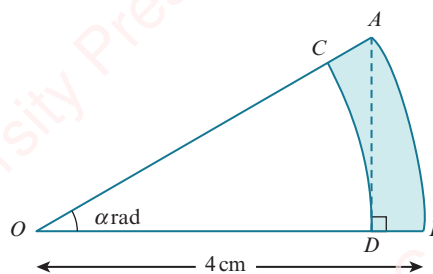
In the diagram, AOB is a quarter circle with centre O and radius r . The point C lies on the arc AB and the point D lies on OB . The line CD is parallel to AO and angle $AOC = \theta$ radians.

- i Express the perimeter of the shaded region in terms of r , θ and π . [4]
- ii For the case where $r = 5$ cm and $\theta = 0.6$, find the area of the shaded region. [3]

Cambridge International AS & A Level Mathematics 9709 Paper 11 Q7 June 2016



9



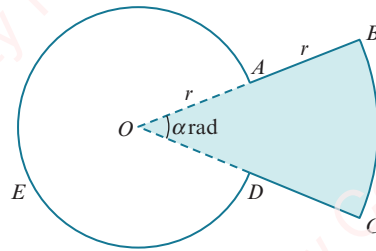
In the diagram, AB is an arc of a circle with centre O and radius 4 cm. Angle AOB is α radians. The point D on OB is such that AD is perpendicular to OB . The arc DC , with centre O , meets OA at C .

- i Find an expression in terms of α for the perimeter of the shaded region $ABDC$. [4]
- ii For the case where $\alpha = \frac{1}{6}\pi$, find the area of the shaded region $ABDC$, giving your answer in the form $k\pi$, where k is a constant to be determined. [4]

Cambridge International AS & A Level Mathematics 9709 Paper 11 Q8 November 2014



10



The diagram shows a metal plate made by fixing together two pieces, $OABCD$ (shaded) and $OAED$ (unshaded). The piece $OABCD$ is a minor sector of a circle with centre O and radius $2r$. The piece $OAED$ is a major sector of a circle with centre O and radius r . Angle AOD is α radians. Simplifying your answers where possible, find, in terms of α , π and r ,

- i the perimeter of the metal plate, [3]
- ii the area of the metal plate. [3]
- It is now given that the shaded and unshaded pieces are equal in area.
- iii Find α in terms of π . [2]

Cambridge International AS & A Level Mathematics 9709 Paper 11 Q6 November 2013

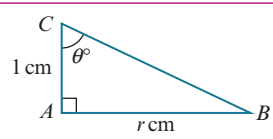
Chapter 5

Trigonometry

In this section you will learn how to:

- sketch and use graphs of the sine, cosine and tangent functions (for angles of any size, and using either degrees or radians)
- use the exact values of the sine, cosine and tangent of 30° , 45° , 60° , and related angles
- use the notations $\sin^{-1}x$, $\cos^{-1}x$, $\tan^{-1}x$ to denote the principal values of the inverse trigonometric relations
- use the identities $\frac{\sin \theta}{\cos \theta} = \tan \theta$ and $\sin^2 \theta + \cos^2 \theta = 1$
- find all the solutions of simple trigonometrical equations lying in a specified interval.

PREREQUISITE KNOWLEDGE

Where it comes from	What you should be able to do	Check your skills
IGCSE / O Level Mathematics	Use Pythagoras' theorem and trigonometry on right-angled triangles.	1  <p>Find each of the following in terms of r.</p> <p>a BC</p> <p>b $\sin \theta$</p> <p>c $\cos \theta$</p> <p>d $\tan \theta$</p>
Chapter 4	Convert between degrees and radians.	2 a Convert to radians. <p>i 45°</p> <p>ii 720°</p> <p>iii 150°</p> <p>b Convert to degrees.</p> <p>i $\frac{\pi}{6}$</p> <p>ii $\frac{7\pi}{2}$</p> <p>iii $\frac{13\pi}{12}$</p>
IGCSE / O Level Mathematics	Solve quadratic equations.	3 a Solve $x^2 - 5x = 0$.
		b Solve $2x^2 + 7x - 15 = 0$.

Why do we study trigonometry?

You should already know how to calculate lengths and angles using the sine, cosine and tangent ratios. In this chapter you shall learn about some of the special rules connecting these trigonometric functions together with the special properties of their graphs. The graphs of $y = \sin x$ and $y = \cos x$ are sometimes referred to as waves.

Oscillations and waves occur in many situations in real life. A few examples of these are musical sound waves, light waves, water waves, electricity, vibrations of an aircraft wing and microwaves. Scientists and engineers represent these oscillations/waves using trigonometric functions.

WEB LINK

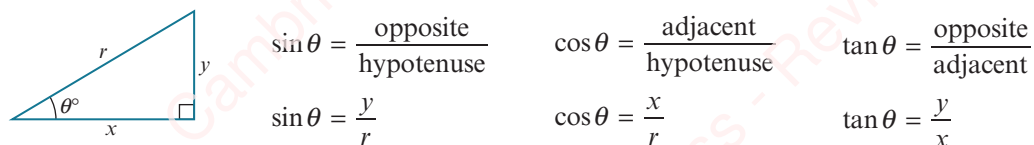
Try the *Trigonometry: Triangles to functions* resource on the Underground Mathematics website.

FAST FORWARD

In the Pure Mathematics 2 & 3 Coursebook, Chapter 3 you shall learn about the secant, cosecant and cotangent functions, which are closely connected to the sine, cosine and tangent functions. You shall also learn many more rules involving these six trigonometric functions.

5.1 Angles between 0° and 90°

You should already know the following trigonometric ratios.



WORKED EXAMPLE 5.1

$$\cos \theta = \frac{\sqrt{5}}{3}, \text{ where } 0^\circ \leq \theta \leq 90^\circ.$$

a Find the exact values of:

- i $\cos^2 \theta$ ii $\sin \theta$ iii $\tan \theta$

b Show that $\frac{1 - \tan^2 \theta}{\cos \theta + \sin \theta} = \frac{3\sqrt{5} - 6}{5}$.

Answer

a i $\cos^2 \theta = \cos \theta \times \cos \theta$

$$\begin{aligned} &= \left(\frac{\sqrt{5}}{3}\right)^2 \\ &= \frac{\sqrt{5}}{3} \times \frac{\sqrt{5}}{3} \\ &= \frac{5}{9} \end{aligned}$$

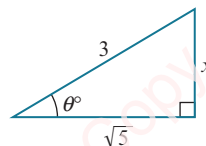
ii A right-angled triangle with angle θ is shown in this diagram.

Using Pythagoras' theorem:

$$x = \sqrt{3^2 - (\sqrt{5})^2} = 2$$

$$\therefore \sin \theta = \frac{2}{3}$$

iii From the triangle, $\tan \theta = \frac{2}{\sqrt{5}}$.



b
$$\frac{1 - \tan^2 \theta}{\cos \theta + \sin \theta} = \frac{1 - \left(\frac{2}{\sqrt{5}}\right)^2}{\frac{\sqrt{5}}{3} + \frac{2}{3}}$$

Simplify.

$$= \frac{\left(\frac{1}{5}\right)}{\left(\frac{\sqrt{5} + 2}{3}\right)}$$

Multiply the numerator and denominator by 15.

$$= \frac{3}{5(\sqrt{5} + 2)}$$

Multiply the numerator and denominator by $\sqrt{5} - 2$.

$$= \frac{3(\sqrt{5} - 2)}{5(\sqrt{5} + 2)(\sqrt{5} - 2)}$$

$$\begin{aligned} &= \frac{(\sqrt{5} + 2)(\sqrt{5} - 2)}{5 - 2\sqrt{5} + 2\sqrt{5} - 4} = 1 \\ &= \frac{3\sqrt{5} - 6}{5} \end{aligned}$$

TIP

$\cos^2 \theta$ means $(\cos \theta)^2$

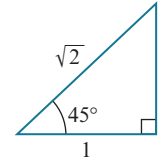
We can obtain exact values of the sine, cosine and tangent of 30° , 45° and 60° (or $\frac{\pi}{6}$, $\frac{\pi}{4}$ and $\frac{\pi}{3}$) from the following two triangles.

Triangle 1

Consider a right-angled isosceles triangle whose two equal sides are of length 1 unit.

We find the third side using Pythagoras' theorem:

$$\sqrt{1^2 + 1^2} = \sqrt{2}$$

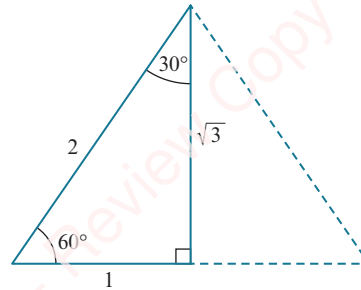
**Triangle 2**

Consider an equilateral triangle whose sides are of length 2 units.

The perpendicular bisector to the base splits the equilateral triangle into two congruent right-angled triangles.

We can find the height of the triangle using Pythagoras' theorem:

$$\sqrt{2^2 - 1^2} = \sqrt{3}$$



These two triangles give the important results:

	$\sin \theta$	$\cos \theta$	$\tan \theta$
$\theta = 30^\circ = \frac{\pi}{6}$	$\frac{1}{2}$	$\frac{\sqrt{3}}{2}$	$\frac{1}{\sqrt{3}}$
$\theta = 45^\circ = \frac{\pi}{4}$	$\frac{1}{\sqrt{2}}$	$\frac{1}{\sqrt{2}}$	1
$\theta = 60^\circ = \frac{\pi}{3}$	$\frac{\sqrt{3}}{2}$	$\frac{1}{2}$	$\sqrt{3}$

**TIP**

The value $\frac{1}{\sqrt{2}}$ can be written as $\frac{\sqrt{2}}{2}$.

The value $\frac{1}{\sqrt{3}}$ can be written as $\frac{\sqrt{3}}{3}$.

WORKED EXAMPLE 5.2

Find the exact value of:

a $\sin 30^\circ \cos 45^\circ$

b $\sin^2 \frac{\pi}{3}$

c $\frac{2 \cos \frac{\pi}{4} \sin \frac{\pi}{6}}{\cos^2 \frac{\pi}{3} + \sin^2 \frac{\pi}{3}}$

Answer

$$\begin{aligned} \text{a } \sin 30^\circ \cos 45^\circ &= \frac{1}{2} \times \frac{1}{\sqrt{2}} \\ &= \frac{1}{2\sqrt{2}} \\ &= \frac{1 \times \sqrt{2}}{2\sqrt{2} \times \sqrt{2}} \\ &= \frac{\sqrt{2}}{4} \end{aligned}$$

Rationalise the denominator.

$$\begin{aligned} \text{b } \sin^2 \frac{\pi}{3} &= \sin \frac{\pi}{3} \times \sin \frac{\pi}{3} \\ &= \frac{\sqrt{3}}{2} \times \frac{\sqrt{3}}{2} \\ &= \frac{3}{4} \end{aligned}$$

$\sin^2 \frac{\pi}{3}$ means $\left(\sin \frac{\pi}{3}\right)^2$.

$$\text{c } \frac{2 \cos \frac{\pi}{4} \sin \frac{\pi}{6}}{\cos^2 \frac{\pi}{3} + \sin^2 \frac{\pi}{3}} = \frac{2 \times \frac{1}{\sqrt{2}} \times \frac{1}{2}}{\left(\frac{1}{2}\right)^2 + \left(\frac{\sqrt{3}}{2}\right)^2}$$

The denominator simplifies to $\frac{1}{4} + \frac{3}{4} = 1$.

$$\begin{aligned} &= \frac{1}{\sqrt{2}} \\ &= \frac{\sqrt{2}}{\sqrt{2}\sqrt{2}} \\ &= \frac{\sqrt{2}}{2} \end{aligned}$$

Rationalise the denominator.

EXERCISE 5A

1 Given that $\cos \theta = \frac{4}{5}$ and that θ is acute, find the exact value of:

a $\sin \theta$

b $\tan \theta$

c $2 \sin \theta \cos \theta$

d $\frac{5}{\tan \theta}$

e $\frac{1 - \sin^2 \theta}{\cos \theta}$

f $\frac{3 - \sin \theta}{3 + \cos \theta}$

2 Given that $\tan \theta = \frac{2}{\sqrt{5}}$ and that θ is acute, find the exact value of:

a $\sin \theta$

b $\cos \theta$

c $\sin^2 \theta + \cos^2 \theta$

d $\frac{\cos \theta}{\sin \theta}$

e $\frac{2}{\sin \theta + 1}$

f $\frac{5}{1 + \cos \theta}$

3 Given that $\sin \theta = \frac{1}{4}$ and that θ is acute, find the exact value of:

a $\cos \theta$

b $\tan \theta$

c $1 - \sin^2 \theta$

d $\frac{\sin \theta \cos \theta}{\tan \theta}$

e $\frac{1}{\tan \theta} + \frac{1}{\sin \theta}$

f $5 - \frac{\tan \theta}{\sin \theta}$

4 Find the exact value of each of the following.

a $\sin 30^\circ \cos 60^\circ$

b $\sin^2 45^\circ$

c $\sin 45^\circ + \cos 30^\circ$

d $\frac{\sin 60^\circ}{\sin 30^\circ}$

e $\frac{\sin^2 45^\circ}{2 + \tan 60^\circ}$

f $\frac{\sin^2 30^\circ + \cos^2 30^\circ}{2 \sin 45^\circ \cos 45^\circ}$

5 Find the exact value of each of the following.

a $\sin \frac{\pi}{4} \cos \frac{\pi}{4}$

b $\cos^2 \frac{\pi}{3}$

c $1 - 2 \sin^2 \frac{\pi}{6}$

d $\frac{\sin \frac{\pi}{6} - \tan \frac{\pi}{3}}{\sin \frac{\pi}{4}}$

e $\frac{1}{\tan \frac{\pi}{4}} - \frac{1}{\cos \frac{\pi}{3}}$

f $\frac{\cos \frac{\pi}{3} + \tan \frac{\pi}{6}}{\sin \frac{\pi}{3}}$

- PS** 6 In the table, $0 \leq \theta \leq \frac{\pi}{2}$ and the missing function is from the list $\sin \theta$, $\tan \theta$, $\frac{1}{\cos \theta}$ and $\frac{1}{\tan \theta}$.

Without using a calculator, copy and complete the table.

	$\theta = \dots$	$\theta = \dots$	$\theta = \dots$
.....	1	$\sqrt{3}$	$\frac{1}{\sqrt{3}}$
$\cos \theta$	$\frac{1}{\sqrt{2}}$	$\frac{1}{2}$
$\frac{1}{\sin \theta}$	2

5.2 The general definition of an angle

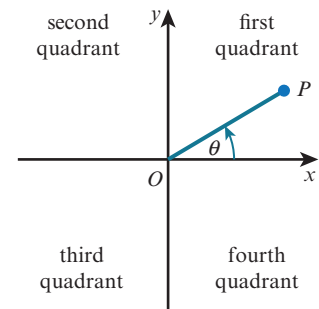
We need to be able to use the three basic trigonometric functions for any angle.

To do this we need a general definition for an angle:

An angle is a measure of the rotation of a line segment OP about a fixed point O .

The angle is measured from the positive x -direction. An anticlockwise rotation is taken as positive and a clockwise rotation is taken as negative.

The Cartesian plane is divided into four **quadrants**, and the angle θ is said to be in the quadrant where OP lies. In the previous diagram, θ is in the first quadrant.



WORKED EXAMPLE 5.3

Draw a diagram showing the quadrant in which the rotating line OP lies for each of the following angles. In each case, find the acute angle that the line OP makes with the x -axis.

a 120°

b 430°

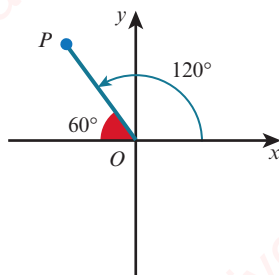
c $\frac{3\pi}{4}$

d $-\frac{2\pi}{3}$

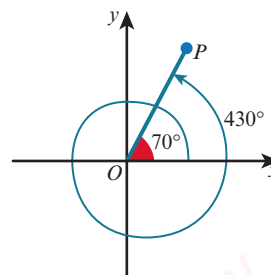
Answer

a 120° is an anticlockwise rotation.

b 430° is an anticlockwise rotation.

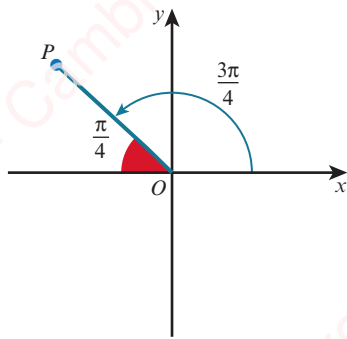


Acute angle made with x -axis = 60°



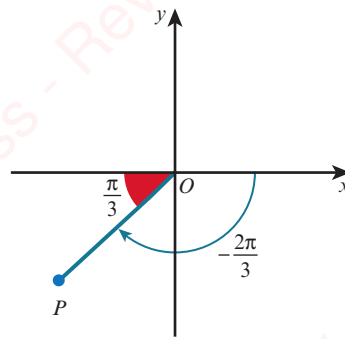
Acute angle made with x -axis = 70°

c $\frac{3\pi}{4}$ is an anticlockwise rotation.



Acute angle made with x -axis = $\frac{\pi}{4}$

d $-\frac{2\pi}{3}$ is a clockwise rotation.

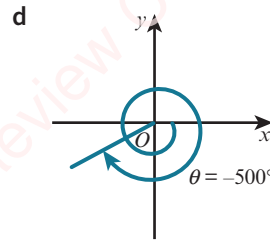
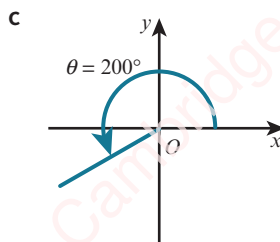
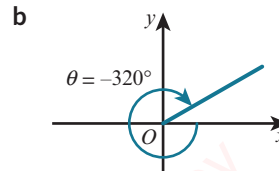
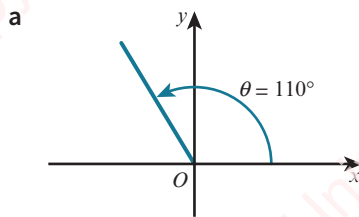


Acute angle made with x -axis = $\frac{\pi}{3}$

The acute angle made with the x -axis is sometimes called the **basic angle** or the **reference angle**.

EXERCISE 5B

1 For each of the following diagrams, find the basic angle of θ .



2 Draw a diagram showing the quadrant in which the rotating line OP lies for each of the following angles. On each diagram, indicate clearly the direction of rotation and state the acute angle that the line OP makes with the x -axis.

a 100°

b -100°

c 310°

d -150°

e 400°

f $\frac{2\pi}{3}$

g $\frac{7\pi}{6}$

h $-\frac{5\pi}{3}$

i $\frac{13\pi}{9}$

j $-\frac{17\pi}{8}$

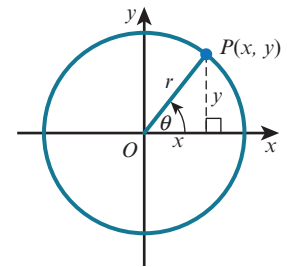
- 3 In each part of this question you are given the basic angle, b , the quadrant in which θ lies and the range in which θ lies. Find the value of θ .
- $b = 55^\circ$, second quadrant, $0^\circ < \theta < 360^\circ$
 - $b = 20^\circ$, third quadrant, $-180^\circ < \theta < 0^\circ$
 - $b = 32^\circ$, fourth quadrant, $360^\circ < \theta < 720^\circ$
 - $b = \frac{\pi}{4}$, third quadrant, $0 < \theta < 2\pi$
 - $b = \frac{\pi}{3}$, second quadrant, $2\pi < \theta < 4\pi$
 - $b = \frac{\pi}{6}$, fourth quadrant, $-4\pi < \theta < -2\pi$

5.3 Trigonometric ratios of general angles

In general, trigonometric ratios of any angle θ in any quadrant are defined as:

KEY POINT 5.1

$$\sin \theta = \frac{y}{r}, \cos \theta = \frac{x}{r}, \tan \theta = \frac{y}{x}, \text{ when } x \neq 0$$



Where x and y are the coordinates of the point P and r is the length of OP , where $r = \sqrt{x^2 + y^2}$.

You need to know the signs of the three trigonometric ratios in each of the four quadrants.

EXPLORE 5.1

$$\sin \theta = \frac{y}{r}$$

$$\cos \theta = \frac{x}{r}$$

$$\tan \theta = \frac{y}{x}$$

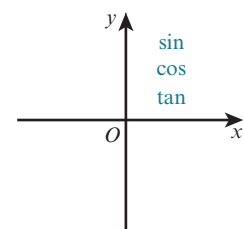
By considering whether x and y are positive or negative (+ or -) in each of the four quadrants, copy and complete the table. (r is positive in all four quadrants.)

	$\sin \theta$	$\cos \theta$	$\tan \theta$
1st quadrant	$\frac{y}{r} = \frac{+}{+} = +$	$\frac{x}{r} = \frac{+}{+} = +$	$\frac{y}{x} = \frac{+}{+} = +$
2nd quadrant	$\frac{y}{r} =$	$\frac{x}{r} = \frac{-}{+} = -$	$\frac{y}{x} =$
3rd quadrant	$\frac{y}{r} =$	$\frac{x}{r} =$	$\frac{y}{x} = \frac{-}{-} = +$
4th quadrant	$\frac{y}{r} = \frac{-}{+} = -$	$\frac{x}{r} =$	$\frac{y}{x} =$

On a copy of the diagram, record which ratios are positive in each quadrant.

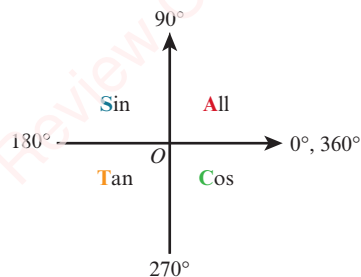
The first quadrant has been completed for you.

(All three ratios are positive in the first quadrant.)



The diagram shows which trigonometric functions are positive in each quadrant.

We can memorise this diagram using a mnemonic such as 'All Students Trust Cambridge'.



WORKED EXAMPLE 5.4

Express in terms of trigonometric ratios of acute angles:

a $\sin 140^\circ$

b $\cos(-130^\circ)$

Answer

a The acute angle made with the x -axis is 40° .

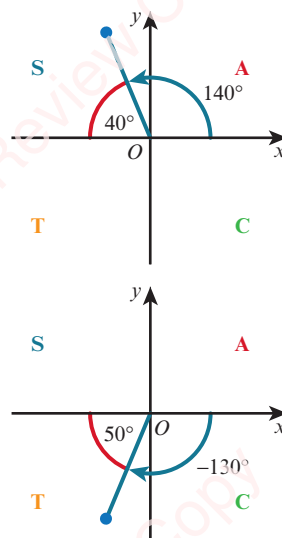
In the second quadrant, sin is positive.

$$\sin 140^\circ = \sin 40^\circ$$

b The acute angle made with the x -axis is 50° .

In the third quadrant only tan is positive, so cos is negative.

$$\cos(-130^\circ) = -\cos 50^\circ$$



WORKED EXAMPLE 5.5

Given that $\cos \theta = -\frac{3}{5}$ and that $180^\circ \leq \theta \leq 270^\circ$, find the value of $\sin \theta$ and the value of $\tan \theta$.

Answer

θ is in the third quadrant.

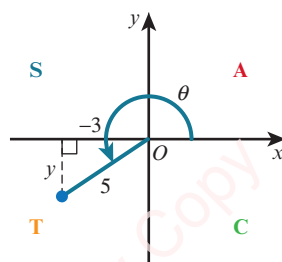
sin is negative and tan is positive in this quadrant.

$$y^2 + (-3)^2 = 5^2$$


$$y^2 = 25 - 9 = 16$$

Since $y < 0$, $y = -4$.

$$\therefore \sin \theta = \frac{-4}{5} = -\frac{4}{5} \text{ and } \tan \theta = \frac{-4}{-3} = \frac{4}{3}$$



WORKED EXAMPLE 5.6

 Without using a calculator, find the exact values of:

a $\sin 120^\circ$

b $\cos \frac{7\pi}{6}$

Answer

a 120° lies in the second quadrant.

$\therefore \sin 120^\circ$ is positive.

Basic acute angle = $180^\circ - 120^\circ = 60^\circ$

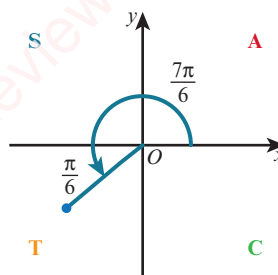
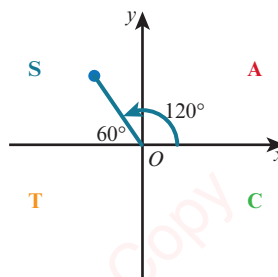
$\therefore \sin 120^\circ = \sin 60^\circ = \frac{\sqrt{3}}{2}$

b $\frac{7\pi}{6}$ lies in the third quadrant.

$\therefore \cos \frac{7\pi}{6}$ is negative.

Basic acute angle = $\frac{7\pi}{6} - \pi = \frac{\pi}{6}$

$\therefore \cos \frac{7\pi}{6} = -\cos \frac{\pi}{6} = -\frac{\sqrt{3}}{2}$



WORKED EXAMPLE 5.7

Given that $\sin 50^\circ = b$, express each of the following in terms of b .

a $\sin 230^\circ$

b $\cos 50^\circ$

c $\tan 40^\circ$

d $\tan 140^\circ$

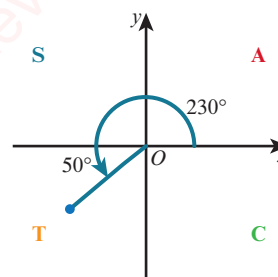
Answer

a 230° lies in the third quadrant.

$\therefore \sin 230^\circ$ is negative.

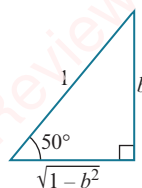
Basic acute angle = $230^\circ - 180^\circ = 50^\circ$

$\therefore \sin 230^\circ = -\sin 50^\circ = -b$



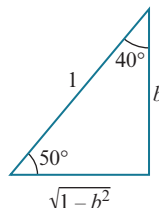
b Draw the right-angled triangle showing the angle 50° :

$$\therefore \cos 50^\circ = \frac{\sqrt{1-b^2}}{1} = \sqrt{1-b^2}$$



c Show 40° on the triangle:

$$\therefore \tan 40^\circ = \frac{\sqrt{1-b^2}}{b}$$

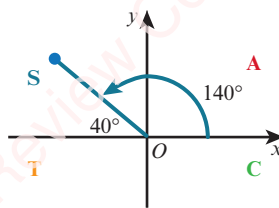


d 140° lies in the second quadrant.

$\therefore \tan 140^\circ$ is negative.

Basic acute angle = $180^\circ - 140^\circ = 40^\circ$

$$\therefore \tan 140^\circ = -\tan 40^\circ = -\frac{\sqrt{1-b^2}}{b}$$



EXERCISE 5C

1 Express the following as trigonometric ratios of acute angles.

a $\sin 190^\circ$

b $\cos 305^\circ$

c $\tan 125^\circ$

d $\cos(-245^\circ)$

e $\cos \frac{4\pi}{5}$

f $\sin \frac{9\pi}{8}$

g $\cos\left(-\frac{7\pi}{10}\right)$

h $\tan \frac{11\pi}{9}$



2 Without using a calculator, find the exact values of each of the following.

a $\cos 120^\circ$

b $\tan 330^\circ$

c $\sin 225^\circ$

d $\tan(-300^\circ)$

e $\sin \frac{4\pi}{3}$

f $\cos \frac{7\pi}{3}$

g $\tan\left(-\frac{\pi}{6}\right)$

h $\cos \frac{10\pi}{3}$

3 Given that $\sin \theta < 0$ and $\tan \theta < 0$, name the quadrant in which angle θ lies.

4 Given that $\sin \theta = \frac{2}{5}$ and that θ is obtuse, find the value of:

a $\cos \theta$

b $\tan \theta$

5 Given that $\cos \theta = -\frac{1}{\sqrt{3}}$ and that $180^\circ \leq \theta \leq 270^\circ$, find the value of:

a $\sin \theta$

b $\tan \theta$

6 Given that $\tan \theta = -\frac{5}{12}$ and that $180^\circ \leq \theta \leq 360^\circ$, find the value of:

a $\sin \theta$

b $\cos \theta$


7 Given that $\tan 25^\circ = a$, express each of the following in terms of a .

a $\tan 205^\circ$

b $\sin 25^\circ$

c $\cos 65^\circ$

d $\cos 245^\circ$

- 8 Given that $\cos 77^\circ = b$, express each of the following in terms of b .
- a $\sin 77^\circ$ b $\tan 13^\circ$ c $\sin 257^\circ$ d $\cos 347^\circ$
- 9 Given that $\sin A = \frac{5}{13}$ and $\cos B = -\frac{4}{5}$, where A and B are in the same quadrant, find the value of:
- a $\cos A$ b $\tan A$ c $\sin B$ d $\tan B$
- 10 Given that $\tan A = -\frac{2}{3}$ and $\cos B = \frac{3}{4}$, where A and B are in the same quadrant, find the value of:
- a $\sin A$ b $\cos A$ c $\sin B$ d $\tan B$
-  **PS** 11 In the table, $0^\circ \leq \theta \leq 360^\circ$ and the missing function is from the list $\cos \theta$, $\tan \theta$, $\frac{1}{\sin \theta}$ and $\frac{1}{\tan \theta}$.

Without using a calculator, copy and complete the table.


	$\theta = 120^\circ$	$\theta = \dots\dots$	$\theta = 210^\circ$
$\dots\dots$	$\dots\dots$	-1	$\frac{1}{\sqrt{3}}$
$\sin \theta$	$\dots\dots$	$\frac{1}{\sqrt{2}}$	$-\frac{1}{2}$
$\frac{1}{\cos \theta}$	-2	$-\sqrt{2}$	$\dots\dots$

5.4 Graphs of trigonometric functions

EXPLORE 5.2

Consider taking a ride on a Ferris wheel with radius 50 metres that rotates at a constant speed.

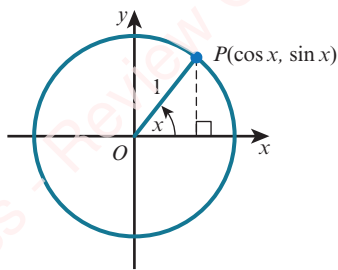
You enter the ride from a platform that is level with the centre of the wheel and the wheel turns in an anticlockwise direction through one complete turn.



- Sketch the following two graphs and discuss their properties.
 - The graph of your *vertical displacement from the centre of the wheel* plotted against the *angle turned through*.
 - The graph of your *horizontal displacement from the centre of the wheel* plotted against the *angle turned through*.
- Discuss with your classmates what the two graphs would be like if you turned through two complete turns.

The graphs of $y = \sin x$ and $y = \cos x$

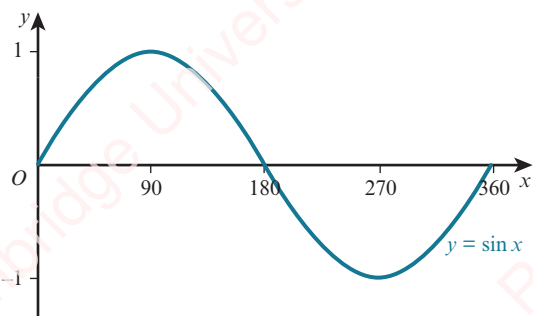
Suppose that OP makes an angle of x with the positive horizontal axis and that P moves around the unit circle, through one complete revolution.



The coordinates of P will be $(\cos x, \sin x)$.

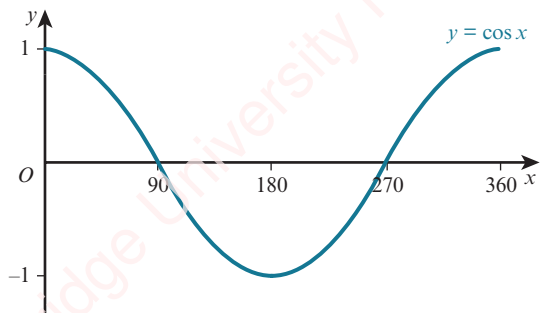
The height of P above the horizontal axis changes from $0 \rightarrow 1 \rightarrow 0 \rightarrow -1 \rightarrow 0$.

The graph of $\sin x$ against x for $0^\circ \leq x \leq 360^\circ$ is therefore:

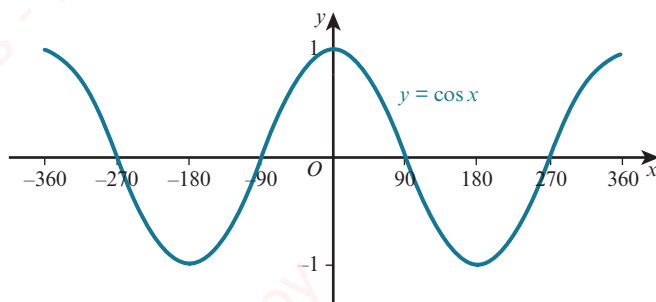
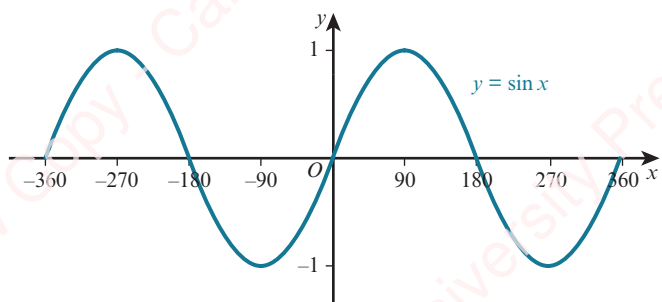


The displacement of P from the vertical axis changes from $1 \rightarrow 0 \rightarrow -1 \rightarrow 0 \rightarrow 1$.

The graph of $\cos x$ against x for $0^\circ \leq x \leq 360^\circ$ is therefore:



The graphs of $y = \sin x$ and $y = \cos x$ can be continued beyond $0^\circ \leq x \leq 360^\circ$:



The sine and cosine functions are called **periodic functions** because they repeat themselves over and over again.

The **period** of a periodic function is defined as the length of one repetition or cycle.

The sine and cosine functions repeat every 360° .

We say they have a period of 360° (or 2π radians).

The **amplitude** of a periodic function is defined as the distance between a maximum (or minimum) point and the principal axis.

The functions $y = \sin x$ and $y = \cos x$ both have amplitude 1.

The symmetry of the curve $y = \sin x$ shows these important relationships:

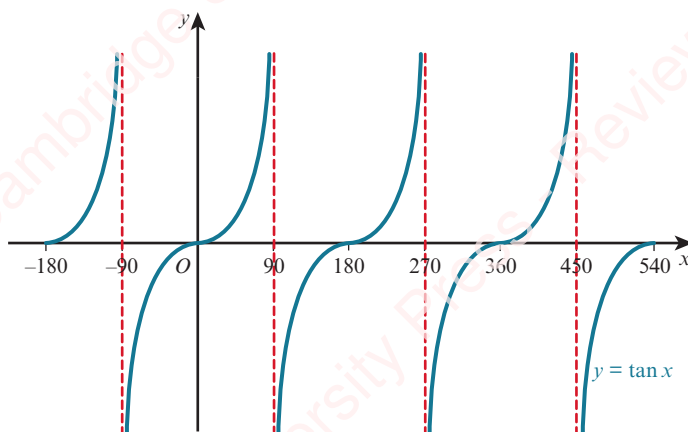
- $\sin(-x) = -\sin x$
- $\sin(180^\circ - x) = \sin x$
- $\sin(180^\circ + x) = -\sin x$
- $\sin(360^\circ - x) = -\sin x$
- $\sin(360^\circ + x) = \sin x$

EXPLORE 5.3

By considering the shape of the cosine curve, complete the following statements, giving your answers in terms of $\cos x$.

- 1 $\cos(-x) =$ 2 $\cos(180^\circ - x) =$ 3 $\cos(180^\circ + x) =$
 4 $\cos(360^\circ - x) =$ 5 $\cos(360^\circ + x) =$

The graph of $y = \tan x$



The tangent function behaves very differently to the sine and cosine functions.

The tangent function repeats its cycle every 180° so its period is 180° (or π radians).

The red dashed lines at $x = \pm 90^\circ$, $x = 270^\circ$ and $x = 450^\circ$ are called **asymptotes**. The branches of the graph get closer and closer to the asymptotes without ever reaching them.

The tangent function does not have an amplitude.

EXPLORE 5.4

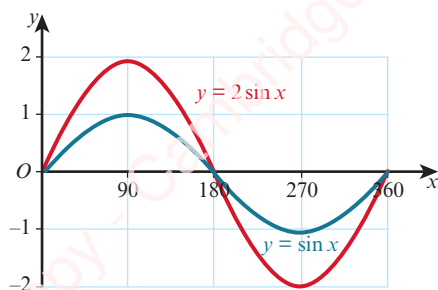
By considering the shape of the tangent curve, complete the following statements, giving your answers in terms of $\tan x$.

- 1 $\tan(-x) =$ 2 $\tan(180^\circ - x) =$ 3 $\tan(180^\circ + x) =$
 4 $\tan(360^\circ - x) =$ 5 $\tan(360^\circ + x) =$

Transformations of trigonometric functions

These rules for the transformations of the graph $y = f(x)$ can be used to transform graphs of trigonometric functions. These transformations include $y = af(x)$, $y = f(ax)$, $y = f(x) + a$ and $y = f(x + a)$ and simple combinations of these.

The graph of $y = a \sin x$

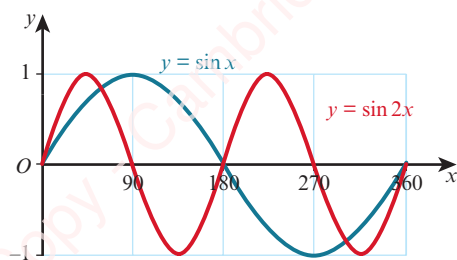


The graph of $y = 2 \sin x$ is a stretch of the graph of $y = \sin x$.

It is a stretch, stretch factor 2, parallel to the y -axis.

The amplitude of $y = 2 \sin x$ is 2 and the period is 360° .

The graph of $y = \sin ax$



The graph of $y = \sin 2x$ is a stretch of the graph of $y = \sin x$.

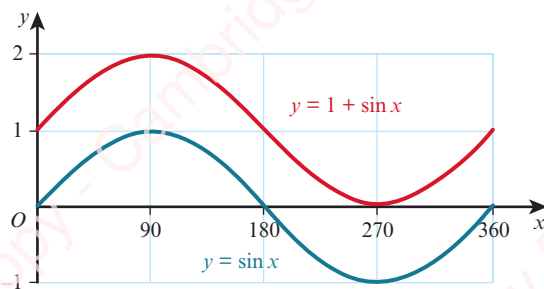
It is a stretch, stretch factor $\frac{1}{2}$, parallel to the x -axis.

The amplitude of $y = \sin 2x$ is 1 and the period is 180° .

REWIND

In Section 2.6, you learnt some rules for the transformation of the graph $y = f(x)$. Here we will look at how these rules can be used to transform graphs of trigonometric functions.

The graph of $y = a + \sin x$

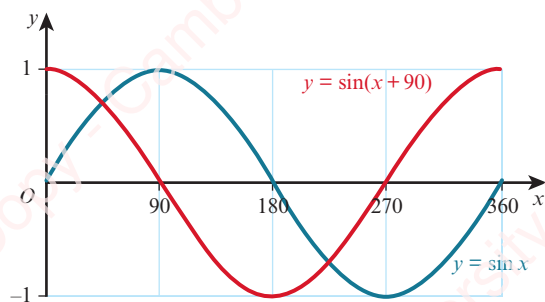


The graph of $y = 1 + \sin x$ is a translation of the graph of $y = \sin x$.

It is a translation of $\begin{pmatrix} 0 \\ 1 \end{pmatrix}$.

The amplitude of $y = 1 + \sin x$ is 1 and the period is 360° .

The graph of $y = \sin(x + a)$



The graph of $y = \sin(x + 90)$ is a translation of the graph of $y = \sin x$.

It is a translation of $\begin{pmatrix} -90 \\ 0 \end{pmatrix}$.

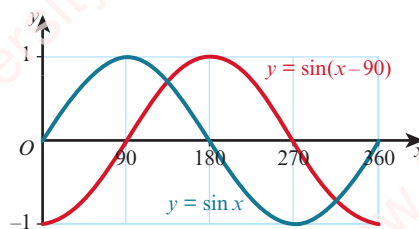
The amplitude of $y = \sin(x + 90)$ is 1 and the period is 360° .

WORKED EXAMPLE 5.8

On the same grid, sketch the graphs of $y = \sin x$ and $y = \sin(x - 90)$ for $0^\circ \leq x \leq 360^\circ$.

Answer

$y = \sin(x - 90)$ is a translation of the graph $y = \sin x$ by the vector $\begin{pmatrix} 90 \\ 0 \end{pmatrix}$.

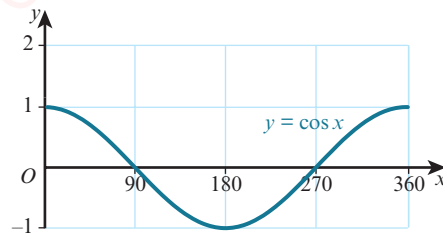


To sketch the graph of a trigonometric function, such as $y = 2 \cos(x + 90) + 1$ for $0^\circ \leq x \leq 360^\circ$, we can build up the transformation in steps.

Step 1: Start with a sketch of $y = \cos x$.

Period = 360°

Amplitude = 1

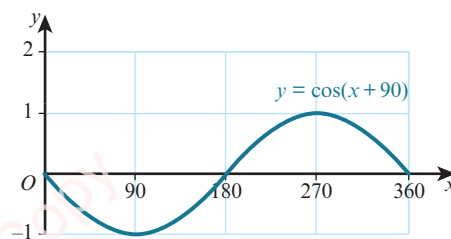


Step 2: Sketch the graph of $y = \cos(x + 90)$.

Translate $y = \cos x$ by the vector $\begin{pmatrix} -90 \\ 0 \end{pmatrix}$.

Period = 360°

Amplitude = 1

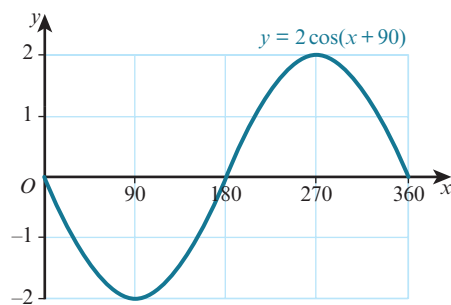


Step 3: Sketch the graph of $y = 2 \cos(x + 90)$.

Stretch $y = \cos(x + 90)$ with stretch factor 2, parallel to the y -axis.

Period = 360°

Amplitude = 2

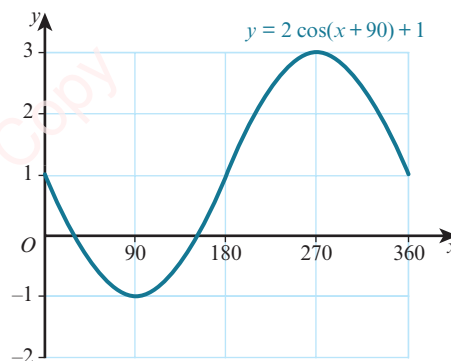


Step 4: Sketch the graph of $y = 2 \cos(x + 90) + 1$.

Translate $y = 2 \cos(x + 90)$ by the vector $\begin{pmatrix} 0 \\ 1 \end{pmatrix}$.

Period = 360°

Amplitude = 2



WORKED EXAMPLE 5.9

$f(x) = 3 \cos 2x$ for $0^\circ \leq x \leq 360^\circ$.

- Write down the period and amplitude of f .
- Write down the coordinates of the maximum and minimum points on the curve $y = f(x)$.
- Sketch the graph of $y = f(x)$.
- Use your answer to part c to sketch the graph of $y = 1 + 3 \cos 2x$.

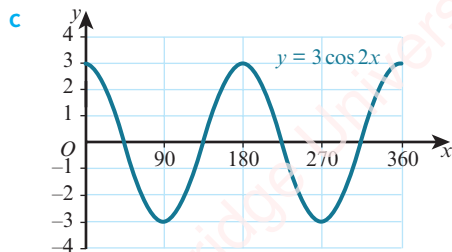
Answer

a $\text{Period} = \frac{360^\circ}{2} = 180^\circ$
 Amplitude = 3

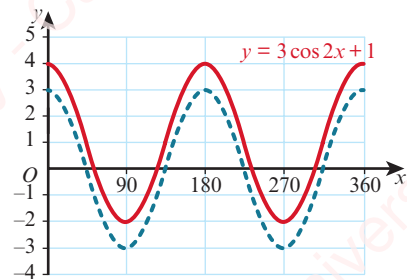
b $y = \cos x$ has its maximum and minimum points at:
 $(0^\circ, 1)$, $(180^\circ, -1)$, $(360^\circ, 1)$, $(540^\circ, -1)$ and $(720^\circ, 1)$

Hence, $f(x) = 3\cos 2x$ has its maximum and minimum points at:

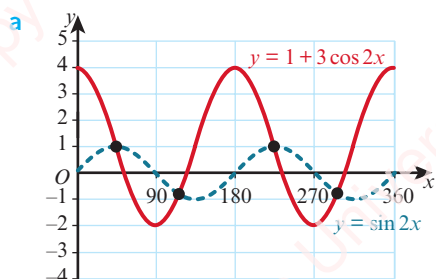
$(0^\circ, 3)$, $(90^\circ, -3)$, $(180^\circ, 3)$, $(270^\circ, -3)$ and $(360^\circ, 3)$



d $y = 1 + 3\cos 2x$ is a translation of the graph $y = 3\cos 2x$ by the vector $\begin{pmatrix} 0 \\ 1 \end{pmatrix}$.

**WORKED EXAMPLE 5.10**

- a On the same grid, sketch the graphs of $y = \sin 2x$ and $y = 1 + 3\cos 2x$ for $0^\circ \leq x \leq 360^\circ$.
 b State the number of solutions of the equation $\sin 2x = 1 + 3\cos 2x$ for $0^\circ \leq x \leq 360^\circ$.

Answer

- b The graphs of $y = \sin 2x$ and $y = 1 + 3\cos 2x$ intersect each other at four points in the interval.
 Hence, the number of solutions of the equation $\sin 2x = 1 + 3\cos 2x$ is four.

EXERCISE 5D

1 Write down the period of each of these functions.

a $y = \cos x^\circ$

b $y = \sin 2x^\circ$

c $y = 3 \tan \frac{1}{2} x^\circ$

d $y = 1 + 2 \sin 3x^\circ$

e $y = \tan(x - 30)^\circ$

f $y = 5 \cos(2x + 45)^\circ$

2 Write down the amplitude of each of these functions.

a $y = \sin x^\circ$

b $y = 5 \cos 2x^\circ$

c $y = 7 \sin \frac{1}{2} x^\circ$

d $y = 2 - 3 \cos 4x^\circ$

e $y = 4 \sin(2x + 60)^\circ$

f $y = 2 \sin(3x + 10)^\circ + 5$

3 Sketch the graph of each of these functions for $0^\circ \leq x \leq 360^\circ$.

a $y = 2 \cos x$

b $y = \sin \frac{1}{2} x$

c $y = \tan 3x$

d $y = 3 \cos 2x$

e $y = 1 + 3 \cos x$

f $y = 2 \sin 3x - 1$

g $y = \sin(x - 45)$

h $y = 2 \cos(x + 60)$

i $y = \tan(x - 90)$

4 a Sketch the graph of each of these functions for $0 \leq x \leq 2\pi$.

i $y = 2 \sin x$

ii $y = \cos\left(x - \frac{\pi}{2}\right)$

iii $y = \sin\left(2x + \frac{\pi}{4}\right)$

b Write down the coordinates of the turning points for your graph for part a iii.

5 a On the same diagram, sketch the graphs of $y = \sin 2x$ and $y = 1 + \cos 2x$ for $0^\circ \leq x \leq 360^\circ$.

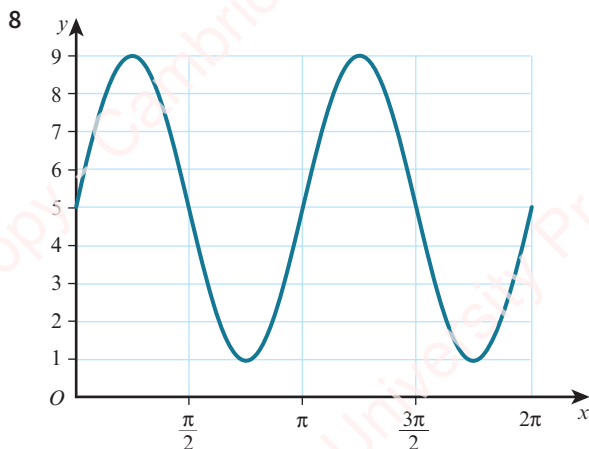
b State the number of solutions of the equation $\sin 2x = 1 + \cos 2x$ for $0^\circ \leq x \leq 360^\circ$.

6 a On the same diagram, sketch the graphs of $y = 2 \sin x$ and $y = 2 + \cos 3x$ for $0 \leq x \leq 2\pi$.

b Hence, state the number of solutions, in the interval $0 \leq x \leq 2\pi$, of the equation $2 \sin x = 2 + \cos 3x$.

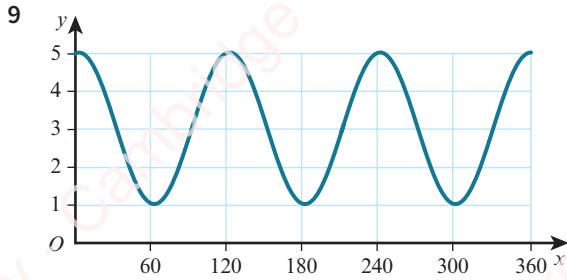
7 a On the same diagram, sketch and label the graphs of $y = 3 \sin x$ and $y = \cos 2x$ for the interval $0 \leq x \leq 2\pi$.

b State the number of solutions of the equation $3 \sin x = \cos 2x$ in the interval $0 \leq x \leq 2\pi$.



Part of the graph $y = a \sin bx + c$ is shown above.

Find the value of a , the value of b and the value of c .



Part of the graph of $y = a + b \cos cx$ is shown above.

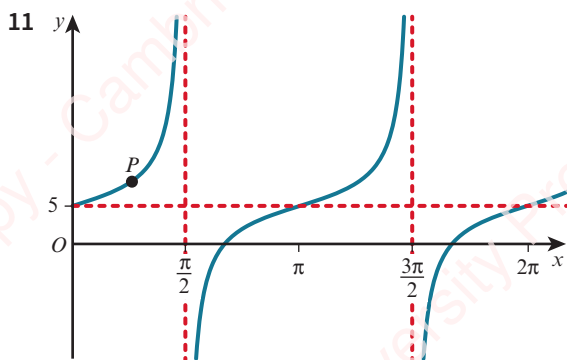
Write down the value of a , the value of b and the value of c .

- 10 a Sketch the graph of $y = 2 \sin x$ for $-\pi \leq x \leq \pi$.

The straight line $y = kx$ intersects this curve at the maximum point.

- b Find the value of k . Give your answer in terms of π .

- c State the coordinates of the other points where the line intersects the curve.



Part of the graph of $y = a \tan bx + c$ is shown above.

The graph passes through the point $P\left(\frac{\pi}{4}, 8\right)$.

Find the value of a , the value of b and the value of c .

- 12 $f(x) = a + b \sin x$ for $0 \leq x \leq 2\pi$

Given that $f(0) = 3$ and that $f\left(\frac{7\pi}{6}\right) = 2$, find:

- a the value of a and the value of b

- b the range of f .

- 13 $f(x) = a - b \cos x$ for $0^\circ \leq x \leq 360^\circ$, where a and b are positive constants.

The maximum value of $f(x)$ is 8 and the minimum value is -2 .

- a Find the value of a and the value of b .

- b Sketch the graph of $y = f(x)$.

- 14 $f(x) = a + b \sin cx$ for $0^\circ \leq x \leq 360^\circ$, where a and b are positive constants.

The maximum value of $f(x)$ is 9, the minimum value of $f(x)$ is 1 and the period is 120° .

Find the value of a , the value of b and the value of c .

15 $f(x) = A + 5 \cos Bx$ for $0^\circ \leq x \leq 120^\circ$

The maximum value of $f(x)$ is 7 and the period is 60° .

- Write down the value of A and the value of B .
- Write down the amplitude of $f(x)$.
- Sketch the graph of $f(x)$.

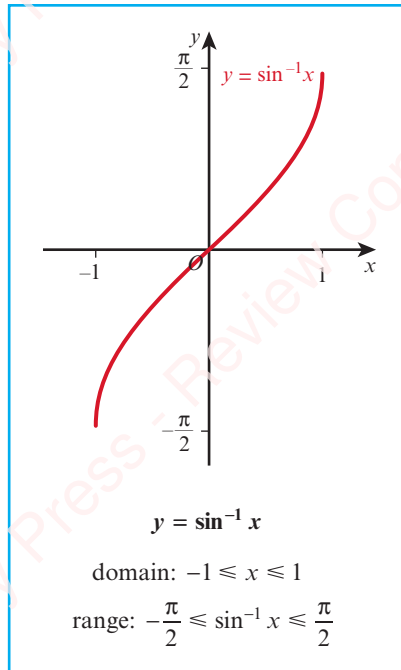
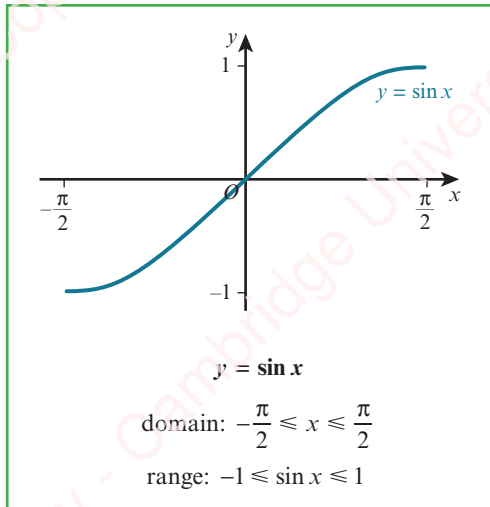
PS 16 The graph of $y = \sin x$ is reflected in the line $x = \pi$ and then in the line $y = 1$. Find the equation of the resulting function.

PS 17 The graph of $y = \cos x$ is reflected in the line $x = \frac{\pi}{2}$ and then in the line $y = 3$. Find the equation of the resulting function.

5.5 Inverse trigonometric functions

The functions $y = \sin x$, $y = \cos x$ and $y = \tan x$ for $x \in \mathbb{R}$ are many-one functions. If, however, we suitably restrict the domain of each of these functions, it is possible to make the function one-one and hence we can define each inverse function.

The graphs of the suitably restricted functions $y = \sin x$, $y = \cos x$ and $y = \tan x$ and their inverse functions $y = \sin^{-1} x$, $y = \cos^{-1} x$ and $y = \tan^{-1} x$, together with their domains and ranges are:

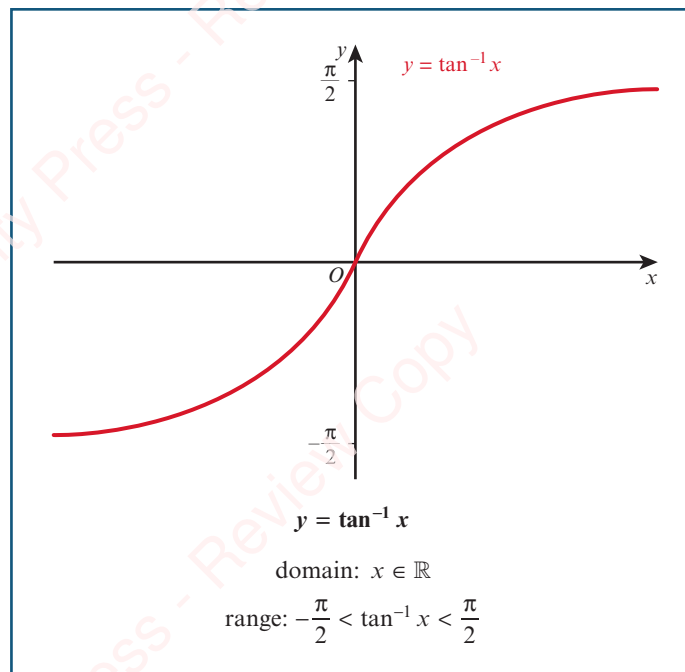
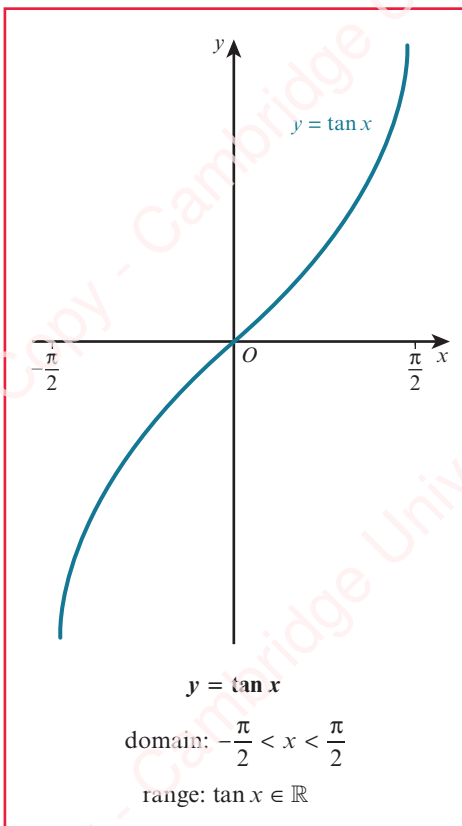
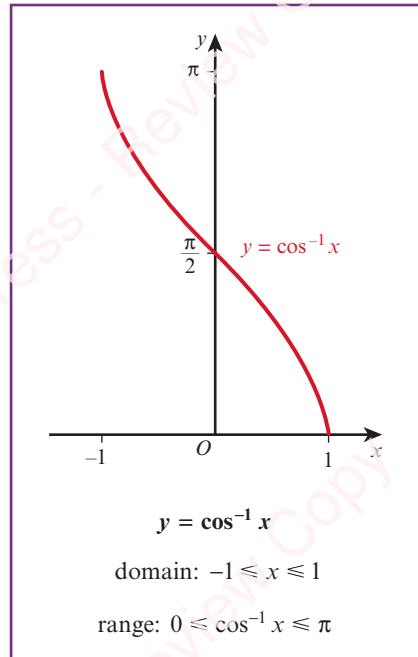
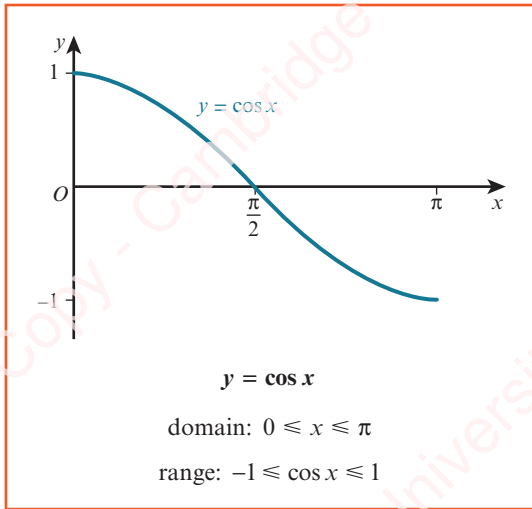


REWIND

In Section 2.5 you learnt about the inverse of a function. Here we will look at the particular case of the inverse of a trigonometric function.

REWIND

In Chapter 2 you learnt about functions and that only one-one functions can have an inverse function. You also learnt that if f and f^{-1} are inverse functions, then the graph of f^{-1} is a reflection of the graph of f in the line $y = x$.



When solving the equation $\sin x = 0.5$ for $0 \leq x \leq \pi$, we can find one solution using the inverse functions:

$$x = \sin^{-1} 0.5$$

Using a calculator gives $x = \frac{\pi}{6}$.

The angle that the calculator gives is the one that lies in the range of the function \sin^{-1} . (This is sometimes called the **principal angle**.)

The principal angle is the angle that lies in the range of the inverse trigonometric function.

There is a second angle, $x = \frac{5\pi}{6}$, that satisfies $\sin x = 0.5$ with $0 \leq x \leq \pi$. We can find this second angle either by using skills learnt earlier in this chapter or by using the symmetry of the curve $y = \sin x$.

WORKED EXAMPLE 5.11



The output of the \sin^{-1} , \cos^{-1} and \tan^{-1} functions can be given in degrees if that is needed. Without using a calculator, write down, in degrees, the value of:

a $\sin^{-1} 0$

b $\cos^{-1}\left(\frac{\sqrt{3}}{2}\right)$

c $\tan^{-1}(-1)$

Answer

a $\sin^{-1} 0$ means the angle whose sine is 0, where $-90^\circ \leq \text{angle} \leq 90^\circ$.

Hence, $\sin^{-1} 0 = 0^\circ$.

b $\cos^{-1}\left(\frac{\sqrt{3}}{2}\right)$ means the angle whose cosine is $\frac{\sqrt{3}}{2}$, where $0^\circ \leq \text{angle} \leq 180^\circ$.

Hence, $\cos^{-1}\left(\frac{\sqrt{3}}{2}\right) = 30^\circ$.

c $\tan^{-1}(-1)$ means the angle whose tangent is -1 , where $-90^\circ \leq \text{angle} \leq 90^\circ$.

Hence, $\tan^{-1}(-1) = -45^\circ$.

WORKED EXAMPLE 5.12

The function $f(x) = 3 \sin\left(\frac{x}{2}\right) - 1$ is defined for the domain $-\pi \leq x \leq \pi$.

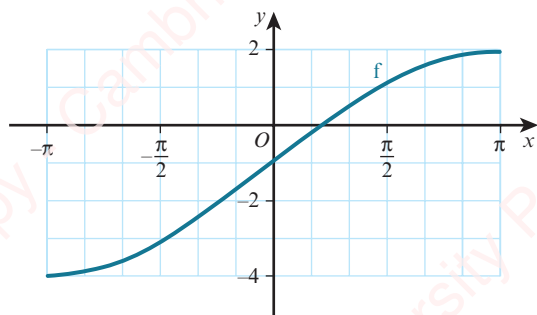
a Sketch the graph of $y = f(x)$ and explain why f has an inverse function.

b Find the range of f .

c Find $f^{-1}(x)$ and state its domain.

Answer

a



f has an inverse function because f is a one-one function with this domain.

b Range is $-4 \leq f(x) \leq 2$.

c $f(x) = 3 \sin\left(\frac{x}{2}\right) - 1$

Step 1: Write the function as $y =$ \longrightarrow $y = 3 \sin\left(\frac{x}{2}\right) - 1$

Step 2: Interchange the x and y variables. \longrightarrow $x = 3 \sin\left(\frac{y}{2}\right) - 1$

Step 3: Rearrange to make y the subject. \longrightarrow $\frac{x+1}{3} = \sin\left(\frac{y}{2}\right)$
 $\frac{y}{2} = \sin^{-1}\left(\frac{x+1}{3}\right)$
 $y = 2 \sin^{-1}\left(\frac{x+1}{3}\right)$

The inverse function is $f^{-1}(x) = 2 \sin^{-1}\left(\frac{x+1}{3}\right)$ for $-4 \leq x \leq 2$.

EXERCISE 5E



1 Without using a calculator, write down, in degrees, the value of:

a $\cos^{-1} 1$

b $\sin^{-1} \frac{1}{2}$

c $\tan^{-1} \sqrt{3}$

d $\sin^{-1}(-1)$

e $\tan^{-1}(-\sqrt{3})$

f $\cos^{-1}\left(-\frac{1}{\sqrt{2}}\right)$



2 Without using a calculator, write down, in terms of π , the value of:

a $\sin^{-1} 0$

b $\tan^{-1} 1$

c $\cos^{-1}\left(\frac{1}{\sqrt{2}}\right)$

d $\tan^{-1}\left(-\frac{1}{\sqrt{3}}\right)$

e $\cos^{-1}\left(-\frac{1}{2}\right)$

f $\sin^{-1}\left(-\frac{\sqrt{3}}{2}\right)$

3 Given that $\theta = \cos^{-1}\left(\frac{3}{5}\right)$, find the exact value of:

a $\sin^2 \theta$

b $\tan^2 \theta$

4 The function $f(x) = 3 \sin x - 4$ is defined for the domain $-\frac{\pi}{2} \leq x \leq \frac{\pi}{2}$.

a Find the range of f .

b Find $f^{-1}(x)$.

5 The function $f(x) = 4 - 2 \cos x$ is defined for the domain $0 \leq x \leq \pi$.

a Find the range of f and sketch the graph of $y = f(x)$.

b Explain why f has an inverse and find the equation of this inverse.

c Sketch the graph of $y = f^{-1}(x)$ on your graph for part a.

6 The function $f(x) = 5 - 2 \sin x$ is defined for the domain $\frac{\pi}{2} \leq x \leq p$.

a Find the largest value of p for which f has an inverse.

b For this value of p , find $f^{-1}(x)$ and state the domain of f^{-1} .

7 The function $f(x) = 4 \cos\left(\frac{x}{2}\right) - 5$ is defined for the domain $0 \leq x \leq 2\pi$.

a Find the range of f .

b Find $f^{-1}(x)$ and state its range.

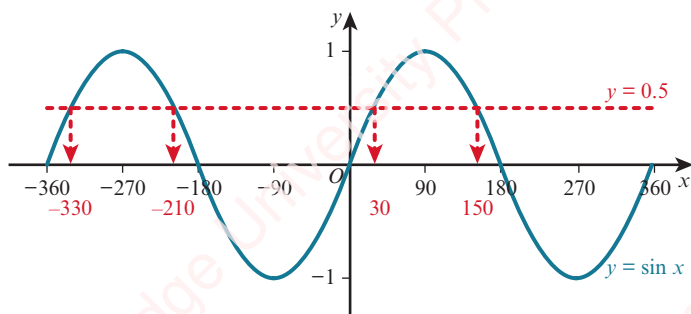
5.6 Trigonometric equations

Consider solving the equation $\sin x = 0.5$ for $-360^\circ \leq x \leq 360^\circ$.

One solution is given by $x = \sin^{-1}(0.5) = \frac{\pi}{6}$ (or 30°).

There are, however, many more values of x for which $\sin x = 0.5$.

The graph of $y = \sin x$ for $-360^\circ \leq x \leq 360^\circ$ is:




The graph shows there are four values of x , between -360° and 360° , for which $\sin x = 0.5$.

We can use the calculator value of $x = 30^\circ$, together with the symmetry of the curve to find the remaining answers.

Hence, the solution of $\sin x = 0.5$ for $-360^\circ \leq x \leq 360^\circ$ is:

$$x = -330^\circ, -210^\circ, 30^\circ \text{ or } 150^\circ$$

WORKED EXAMPLE 5.13

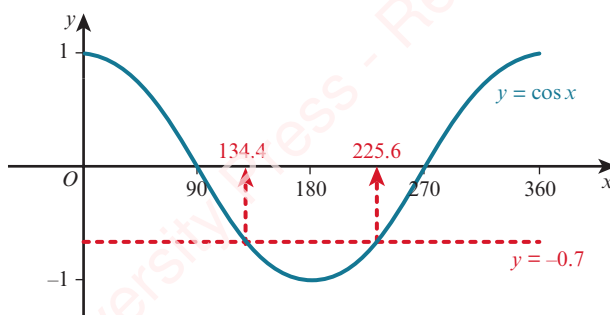
 Solve $\cos x = -0.7$ for $0^\circ \leq x \leq 360^\circ$.

Answer

$$\cos x = -0.7$$

One solution is $x = 134.4^\circ$

Use a calculator to find $\cos^{-1}(-0.7)$, correct to 1 decimal place.




The sketch graph shows there are two values of x , between -0° and 360° , for which $\cos x = -0.7$.

Using the symmetry of the curve, the second value is $(360^\circ - 134.4^\circ) = 225.6^\circ$.

Hence, the solution of $\cos x = -0.7$ for $0^\circ \leq x \leq 360^\circ$ is:

$$x = 134.4^\circ \text{ or } 225.6^\circ \quad (\text{correct to 1 decimal place})$$

WORKED EXAMPLE 5.14

 Solve $\tan 2A = -2.1$ for $0^\circ \leq A \leq 180^\circ$.

Answer

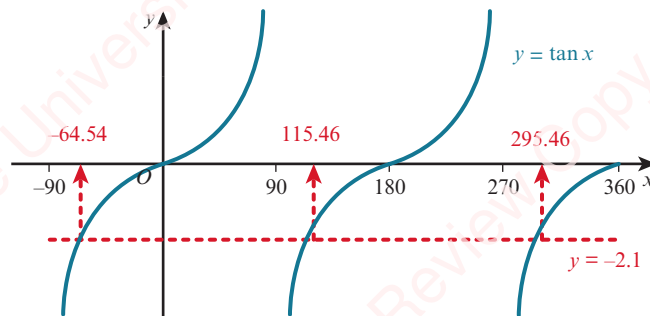
$$\tan 2A = -2.1$$

$$\tan x = -2.1$$

A solution is $x = -64.54^\circ$.

Let $2A = x$.

Use a calculator to find $\tan^{-1}(-2.1)$.



Using the symmetry of the curve:

$$x = -64.54^\circ$$

$$x = (-64.54^\circ + 180^\circ)$$

$$x = (115.46^\circ + 180^\circ)$$

$$= 115.46^\circ$$

$$= 295.46^\circ$$

Using $2A = x$:

$$2A = -64.54^\circ$$

$$2A = 115.46^\circ$$

$$2A = 295.46^\circ$$

$$A = -32.3^\circ$$


$$A = 57.7^\circ$$

$$A = 147.7^\circ$$

Hence, the solution of $\tan 2A = -2.1$ for $0^\circ \leq A \leq 180^\circ$ is:

$$A = 57.7^\circ \text{ or } 147.7^\circ \text{ (correct to 1 decimal place)}$$

WORKED EXAMPLE 5.15

 Solve $\sin\left(2A + \frac{\pi}{6}\right) = 0.6$ for $0 \leq A \leq \pi$.

Answer

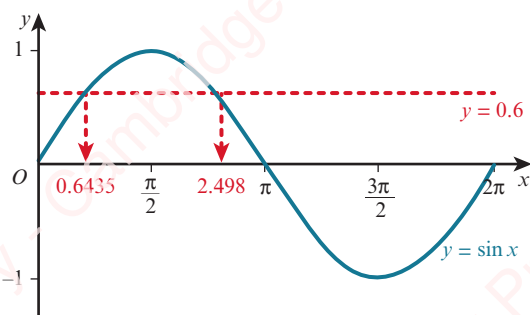
$$\sin\left(2A + \frac{\pi}{6}\right) = 0.6$$

$$\sin x = 0.6$$

$$x = 0.6435 \text{ radians}$$

Let $2A + \frac{\pi}{6} = x$.

Use a calculator to find $\sin^{-1}(0.6)$.



Using the symmetry of the curve:

$$x = 0.6435$$

$$x = \pi - 0.6435 \\ = 2.498$$

Using $2A + \frac{\pi}{6} = x$:

$$2A + \frac{\pi}{6} = 0.6435$$

$$2A + \frac{\pi}{6} = 2.498$$

$$A = \frac{1}{2} \left(0.6435 - \frac{\pi}{6} \right)$$

$$A = \frac{1}{2} \left(2.498 - \frac{\pi}{6} \right)$$

$$A = 0.0600$$

$$A = 0.987$$

Hence, the solution of $\sin \left(2A + \frac{\pi}{6} \right) = 0.6$ for $0 \leq A \leq \pi$ is:

$A = 0.0600$ or 0.987 radians (correct to 3 significant figures)

Consider a right-angled triangle.

Two very important rules can be found using this triangle.

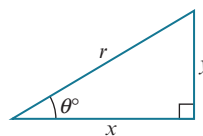
Rule 1

$$\tan \theta = \frac{y}{x}$$

Divide numerator and denominator by r .

$$= \frac{\left(\frac{y}{r} \right)}{\left(\frac{x}{r} \right)}$$

Use $\sin \theta = \frac{y}{r}$ and $\cos \theta = \frac{x}{r}$.



KEY POINT 5.2

$$\tan \theta = \frac{\sin \theta}{\cos \theta} \text{ for all } \theta \text{ with } \cos \theta \neq 0.$$

Rule 2

$$x^2 + y^2 = r^2$$

Divide both sides by r^2 .

$$\left(\frac{x}{r} \right)^2 + \left(\frac{y}{r} \right)^2 = 1$$

Use $\cos \theta = \frac{x}{r}$ and $\sin \theta = \frac{y}{r}$.

KEY POINT 5.3

$$\cos^2 \theta + \sin^2 \theta = 1 \text{ for all } \theta.$$

If we use the unit circle definition of the trigonometric functions, we discover that these two important rules are true for all valid values of θ . We can use them to help solve more complicated trigonometric equations.

WORKED EXAMPLE 5.16

Solve $3 \cos^2 x - \sin x \cos x = 0$ for $0^\circ \leq x \leq 360^\circ$.

Answer

$$3 \cos^2 x - \sin x \cos x = 0$$

$$\cos x(3 \cos x - \sin x) = 0$$

$$\cos x = 0 \text{ or } 3 \cos x - \sin x = 0$$

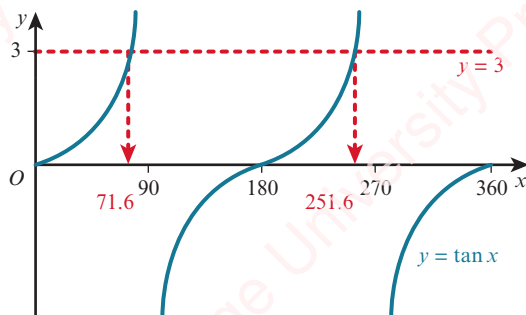
$$x = 90^\circ, 270^\circ$$

$$\sin x = 3 \cos x$$

$$\tan x = 3$$

$$x = 71.6 \text{ or } 180 + 71.6$$

$$x = 71.6^\circ \text{ or } 251.6^\circ$$



The solution of $3 \cos^2 x - \sin x \cos x = 0$ for $0^\circ \leq x \leq 360^\circ$ is:

$$x = 71.6^\circ, 90^\circ, 251.6^\circ \text{ or } 270^\circ$$

Factorise.

WORKED EXAMPLE 5.17

Solve $2 \sin^2 x + 3 \cos x - 3 = 0$ for $0 \leq x \leq 2\pi$.

Answer

$$2 \sin^2 x + 3 \cos x - 3 = 0$$

Replace $\sin^2 x$ with $1 - \cos^2 x$.

$$2(1 - \cos^2 x) + 3 \cos x - 3 = 0$$

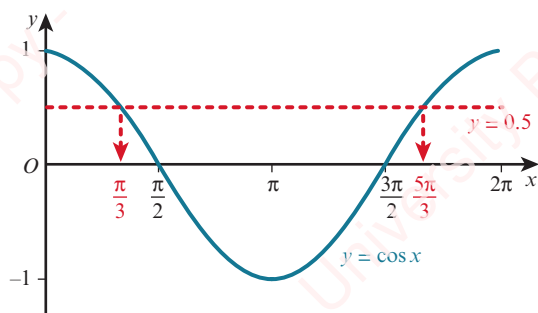
Expand brackets and collect terms.

$$2 \cos^2 x - 3 \cos x + 1 = 0$$

$$(2 \cos x - 1)(\cos x - 1) = 0$$

Factorise.

$$\begin{aligned} \cos x &= \frac{1}{2} \quad \text{or} \quad \cos x = 1 \\ x &= \frac{\pi}{3} \quad \text{or} \quad 2\pi - \frac{\pi}{3} \quad x = 0 \quad \text{or} \quad 2\pi \\ x &= \frac{\pi}{3} \quad \text{or} \quad \frac{5\pi}{3} \end{aligned}$$



The solution of $2\sin^2 x + 3\cos x - 1 = 0$ for $0 \leq x \leq 2\pi$ is:

$$x = 0, \frac{\pi}{3}, \frac{5\pi}{3} \quad \text{or} \quad 2\pi$$

EXERCISE 5F

144

1 Solve each of these equations for $0^\circ \leq x \leq 360^\circ$.

a $\tan x = 1.5$

b $\sin x = 0.4$

c $\cos x = 0.7$

d $\sin x = -0.3$

e $\cos x = -0.6$

f $\tan x = -2$

g $2\cos x - 1 = 0$

h $5\sin x + 3 = 0$

2 Solve each of these equations for $0 \leq x \leq 2\pi$.

a $\sin x = 0.3$

b $\cos x = 0.5$

c $\tan x = 3$

d $\sin x = -0.7$

e $\tan x = -3$

f $\cos x = -0.5$

g $4\sin x = 3$

h $5\tan x + 7 = 0$

3 Solve each of these equations for $0^\circ \leq x \leq 180^\circ$.

a $\cos 2x = 0.6$

b $\sin 3x = 0.8$

c $\tan 2x = 4$

d $\sin 2x = -0.5$

e $3\cos 2x = 2$

f $5\sin 2x = -4$

g $4 + 2\tan 2x = 0$

h $1 - 5\sin 2x = 0$

4 Solve each of these equations for the given domains.

a $\sin(x - 60^\circ) = 0.5$ for $0^\circ \leq x \leq 360^\circ$

b $\cos\left(x + \frac{\pi}{6}\right) = -0.5$ for $0 < x < 2\pi$

c $\cos(2x + 45^\circ) = 0.8$ for $0^\circ \leq x \leq 180^\circ$

d $3\sin(2x - 4) = 2$ for $0 < x < \pi$

e $2\tan\left(\frac{x}{2}\right) + \sqrt{3} = 0$ for $0^\circ \leq x \leq 540^\circ$

f $\sqrt{2}\sin\left(\frac{x}{3} + \frac{\pi}{4}\right) = 1$ for $0 < x < 4\pi$

WORKED EXAMPLE 5.18

Express $4\cos^2 x - 3\sin^2 x$ in terms of $\cos x$.

Answer

$$\begin{aligned} 4\cos^2 x - 3\sin^2 x &\equiv 4\cos^2 x - 3(1 - \cos^2 x) && \text{Replace } \sin^2 x \text{ with } 1 - \cos^2 x. \\ &\equiv 4\cos^2 x - 3 + 3\cos^2 x \\ &\equiv 7\cos^2 x - 3 \end{aligned}$$

WORKED EXAMPLE 5.19

Prove the identity $\frac{1 + \sin x}{\cos x} + \frac{\cos x}{1 + \sin x} \equiv \frac{2}{\cos x}$.

Answer

$$\begin{aligned} \text{LHS} &\equiv \frac{1 + \sin x}{\cos x} + \frac{\cos x}{1 + \sin x} && \text{Add the two fractions.} \\ &\equiv \frac{(1 + \sin x)^2 + \cos^2 x}{\cos x(1 + \sin x)} && \text{Expand the brackets in the numerator.} \\ &\equiv \frac{1 + 2\sin x + \sin^2 x + \cos^2 x}{\cos x(1 + \sin x)} && \text{Use } \sin^2 x + \cos^2 x \equiv 1. \\ &\equiv \frac{2 + 2\sin x}{\cos x(1 + \sin x)} && \text{Factorise the numerator.} \\ &\equiv \frac{2(1 + \sin x)}{\cos x(1 + \sin x)} && \text{Divide numerator and denominator by } 1 + \sin x. \\ &\equiv \frac{2}{\cos x} \\ &\equiv \text{RHS} \end{aligned}$$



TIP

LHS means left-hand side and RHS means right-hand side.

WORKED EXAMPLE 5.20

Prove the identity $\frac{1 + \sin x}{1 - \sin x} \equiv \left(\tan x + \frac{1}{\cos x} \right)^2$.

Answer

$$\begin{aligned} \text{RHS} &\equiv \left(\tan x + \frac{1}{\cos x} \right)^2 && \text{Use } \tan x = \frac{\sin x}{\cos x}. \\ &\equiv \left(\frac{\sin x}{\cos x} + \frac{1}{\cos x} \right)^2 && \text{Add the two fractions.} \\ &\equiv \left(\frac{\sin x + 1}{\cos x} \right)^2 \end{aligned}$$

$$\equiv \frac{(1 + \sin x)^2}{\cos^2 x}$$

Replace $\cos^2 x$ with $1 - \sin^2 x$ in the denominator.

$$\equiv \frac{(1 + \sin x)^2}{1 - \sin^2 x}$$

Use $1 - \sin^2 x = (1 + \sin x)(1 - \sin x)$.

$$\equiv \frac{(1 + \sin x)^2}{(1 + \sin x)(1 - \sin x)}$$

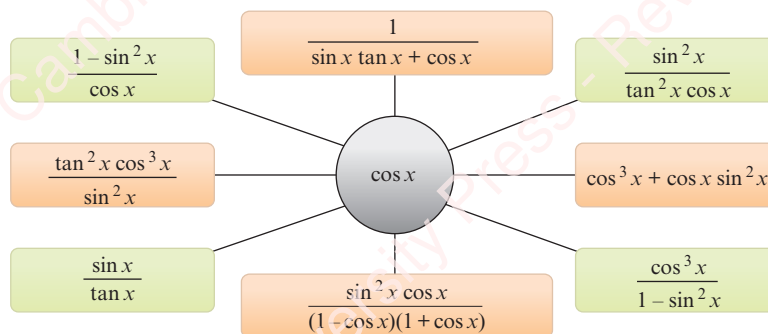
Divide numerator and denominator by $1 + \sin x$.

$$\equiv \frac{1 + \sin x}{1 - \sin x}$$

$$\equiv \text{LHS}$$

EXPLORE 5.5

Equivalent trigonometric expressions:



Discuss why each of the trigonometric expressions in the coloured boxes simplifies to $\cos x$.

Create trigonometric expressions of your own that simplify to $\sin x$.

(Your expressions must contain at least two different trigonometric ratios.)

Compare your answers with those of your classmates.

EXERCISE 5G

1 Express $2\sin^2 x - 7\cos^2 x + 4$ in terms of $\sin x$.

2 Prove each of these identities.

a $\cos x \tan x \equiv \sin x$

b $\frac{1 - \cos^2 x}{\sin x \cos x} \equiv \tan x$

c $\frac{\cos^2 x}{1 - \sin x} \equiv 1 + \sin x$

d $\frac{1 + \sin x - \sin^2 x}{\cos x} \equiv \cos x + \tan x$

e $\frac{\cos^2 x - \sin^2 x}{\cos x + \sin x} + \sin x \equiv \cos x$

f $\cos^4 x + \sin^2 x \cos^2 x \equiv \cos^2 x$

3 Prove each of these identities.

a $(\sin x + \cos x)^2 \equiv 1 + 2 \sin x \cos x$

c $2 - (\sin x + \cos x)^2 \equiv (\sin x - \cos x)^2$

b $2(1 + \cos x) - (1 + \cos x)^2 \equiv \sin^2 x$

d $(\cos^2 x - 2)^2 - 3 \sin^2 x \equiv \cos^4 x + \sin^2 x$

4 Prove each of these identities.

a $\cos^2 x - \sin^2 x \equiv 2 \cos^2 x - 1$

c $\tan^2 x - \sin^2 x \equiv \tan^2 x \sin^2 x$

b $\cos^2 x - \sin^2 x \equiv 1 - 2 \sin^2 x$

d $\cos^4 x + \sin^2 x \equiv \sin^4 x + \cos^2 x$

5 Prove each of these identities.

a $\frac{\cos^2 x - \sin^2 x}{\cos x - \sin x} \equiv \cos x + \sin x$

c $\frac{\cos^4 x - \sin^4 x}{\cos^2 x} \equiv 1 - \tan^2 x$

e $\frac{\sin x - \cos x}{\sin x + \cos x} \equiv \frac{\tan x - 1}{\tan x + 1}$

g $\frac{\tan x + 1}{\sin x \tan x + \cos x} \equiv \sin x + \cos x$

b $\sin^4 x - \cos^4 x \equiv 2 \sin^2 x - 1$

d $\frac{\cos x}{\tan x(1 - \sin x)} \equiv 1 + \frac{1}{\sin x}$

f $\left(\frac{1}{\sin x} - \frac{1}{\tan x} \right)^2 \equiv \frac{1 - \cos x}{1 + \cos x}$

h $\frac{\sin^2 x(1 - \cos^2 x)}{\cos^2 x(1 - \sin^2 x)} \equiv \tan^4 x$

6 Prove each of these identities.

a $\frac{1}{\cos x} - \frac{\cos x}{1 + \sin x} \equiv \tan x$

c $\frac{1}{\cos x} - \cos x \equiv \sin x \tan x$

e $\frac{\sin x}{1 - \sin x} + \frac{\sin x}{1 + \sin x} \equiv \frac{2 \tan x}{\cos x}$

b $\tan x + \frac{1}{\tan x} \equiv \frac{1}{\sin x \cos x}$

d $\frac{\sin x}{1 + \cos x} + \frac{1 + \cos x}{\sin x} \equiv \frac{2}{\sin x}$

f $\frac{1 + \cos x}{1 - \cos x} - \frac{1 - \cos x}{1 + \cos x} \equiv \frac{4}{\sin x \tan x}$

7 Show that $(1 + \cos x)^2 + (1 - \cos x)^2 + 2 \sin^2 x$ has a constant value for all x and state this value.

8 a Express $7 \sin^2 x + 4 \cos^2 x$ in the form $a + b \sin^2 x$.

b State the range of the function $f(x) = 7 \sin^2 x + 4 \cos^2 x$, for the domain $0 \leq x \leq 2\pi$.

9 a Express $4 \sin \theta - \cos^2 \theta$ in the form $(\sin \theta + a)^2 + b$.

b Hence, state the maximum and minimum values of $4 \sin \theta - \cos^2 \theta$, for the domain $0 \leq \theta \leq 2\pi$.

PS P 10 a Given that $a = \frac{1 - \sin \theta}{2 \cos \theta}$, show that $\frac{1}{a} = \frac{2(1 + \sin \theta)}{\cos \theta}$.

b Hence, find $\sin \theta$ and $\cos \theta$ in terms of a .

5.8 Further trigonometric equations

This section uses trigonometric identities to help solve some more complex trigonometric equations.

WORKED EXAMPLE 5.21

a Prove the identity $\frac{1 - \tan^2 \theta}{1 + \tan^2 \theta} \equiv 2 \cos^2 \theta - 1$.

b Hence, solve the equation $\frac{1 - \tan^2 \theta}{1 + \tan^2 \theta} = 5 \cos \theta - 3$ for $0^\circ \leq \theta \leq 360^\circ$.

Answer

a LHS $\equiv \frac{1 - \tan^2 \theta}{1 + \tan^2 \theta}$

Use $\tan \theta = \frac{\sin \theta}{\cos \theta}$.

$$\equiv \frac{1 - \left(\frac{\sin \theta}{\cos \theta}\right)^2}{1 + \left(\frac{\sin \theta}{\cos \theta}\right)^2}$$

Multiply numerator and denominator by $\cos^2 \theta$.

$$\equiv \frac{\cos^2 \theta - \sin^2 \theta}{\cos^2 \theta + \sin^2 \theta}$$

Use $\sin^2 \theta + \cos^2 \theta = 1$.

$$\equiv \cos^2 \theta - \sin^2 \theta$$

Replace $\sin^2 \theta$ with $1 - \cos^2 \theta$.

$$\equiv \cos^2 \theta - (1 - \cos^2 \theta)$$

Simplify.

$$\equiv 2 \cos^2 \theta - 1$$

$$\equiv \text{RHS}$$

b $\frac{1 - \tan^2 \theta}{1 + \tan^2 \theta} = 5 \cos \theta - 3$

Use the result from part a.

$$2 \cos^2 \theta - 1 = 5 \cos \theta - 3$$

Rearrange.

$$2 \cos^2 \theta - 5 \cos \theta + 2 = 0$$

Factorise.

$$(2 \cos \theta - 1)(\cos \theta - 2) = 0$$

$$\cos \theta = \frac{1}{2} \quad \text{or} \quad \cos \theta = 2$$

$\cos \theta = 2$ has no solutions.

$$\theta = \cos^{-1}\left(\frac{1}{2}\right)$$

$$\theta = 60^\circ \quad \text{or} \quad \theta = 360^\circ - 60^\circ$$

Solution is $\theta = 60^\circ$ or $\theta = 300^\circ$.

EXERCISE 5H

- 1 a Show that the equation $\cos \theta + \sin \theta = 5 \cos \theta$ can be written in the form $\tan \theta = k$.
 b Hence, solve the equation $\cos \theta + \sin \theta = 5 \cos \theta$ for $0^\circ \leq \theta \leq 360^\circ$.
- 2 a Show that the equation $3 \sin^2 \theta + 5 \sin \theta \cos \theta = 2 \cos^2 \theta$ can be written in the form $3 \tan^2 \theta + 5 \tan \theta - 2 = 0$.
 b Hence, solve the equation $3 \sin^2 \theta + 5 \sin \theta \cos \theta = 2 \cos^2 \theta$ for $0^\circ \leq \theta \leq 180^\circ$.
- 3 a Show that the equation $8 \sin^2 \theta + 2 \cos^2 \theta - \cos \theta = 6$ can be written in the form $6 \cos^2 \theta + \cos \theta - 2 = 0$.
 b Hence, solve the equation $8 \sin^2 \theta + 2 \cos^2 \theta - \cos \theta = 6$ for $0^\circ \leq \theta \leq 360^\circ$.
- 4 a Show that the equation $4 \sin^4 \theta + 14 = 19 \cos^2 \theta$ can be written in the form $4x^2 + 19x - 5 = 0$, where $x = \sin^2 \theta$.
 b Hence, solve the equation $4 \sin^4 \theta + 14 = 19 \cos^2 \theta$ for $0^\circ \leq \theta \leq 360^\circ$.
- 5 a Show that the equation $\sin \theta \tan \theta = 3$ can be written in the form $\cos^2 \theta + 3 \cos \theta - 1 = 0$.
 b Hence, solve the equation $\sin \theta \tan \theta = 3$ for $0^\circ \leq \theta \leq 360^\circ$.
- 6 a Show that the equation $5(2 \sin \theta - \cos \theta) = 4(\sin \theta + 2 \cos \theta)$ can be written in the form $\tan \theta = \frac{13}{6}$.
 b Hence, solve the equation $5(2 \sin \theta - \cos \theta) = 4(\sin \theta + 2 \cos \theta)$ for $0^\circ \leq \theta \leq 360^\circ$.
- 7 a Prove the identity $\frac{\sin \theta}{1 + \cos \theta} + \frac{1 + \cos \theta}{\sin \theta} \equiv \frac{2}{\sin \theta}$.
 b Hence, solve the equation $\frac{\sin \theta}{1 + \cos \theta} + \frac{1 + \cos \theta}{\sin \theta} = 1 + 3 \sin \theta$ for $0^\circ \leq \theta \leq 360^\circ$.
- 8 a Prove the identity $\frac{\cos \theta}{\tan \theta (1 + \sin \theta)} \equiv \frac{1}{\sin \theta} - 1$.
 b Hence, solve the equation $\frac{\cos \theta}{\tan \theta (1 + \sin \theta)} = 1$ for $0^\circ \leq \theta \leq 360^\circ$.
- 9 a Prove the identity $\frac{1}{1 + \sin \theta} + \frac{1}{1 - \sin \theta} \equiv \frac{2}{\cos^2 \theta}$.
 b Hence, solve the equation $\cos \theta \left(\frac{1}{1 + \sin \theta} + \frac{1}{1 - \sin \theta} \right) = 5$ for $0^\circ \leq \theta \leq 360^\circ$.
- 10 a Prove the identity $\left(\frac{1}{\sin \theta} + \frac{1}{\tan \theta} \right)^2 \equiv \frac{1 + \cos \theta}{1 - \cos \theta}$.
 b Hence, solve the equation $\left(\frac{1}{\sin \theta} + \frac{1}{\tan \theta} \right)^2 = 2$ for $0^\circ \leq \theta \leq 360^\circ$.
- 11 a Prove the identity $\cos^4 \theta - \sin^4 \theta \equiv 2 \cos^2 \theta - 1$.
 b Hence, solve the equation $\cos^4 \theta - \sin^4 \theta = \frac{1}{2}$ for $0^\circ \leq \theta \leq 360^\circ$.

Checklist of learning and understanding

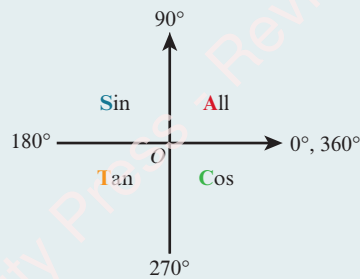
Exact values of trigonometric functions

	$\sin \theta$	$\cos \theta$	$\tan \theta$
$\theta = 30^\circ = \frac{\pi}{6}$	$\frac{1}{2}$	$\frac{\sqrt{3}}{2}$	$\frac{1}{\sqrt{3}}$
$\theta = 45^\circ = \frac{\pi}{4}$	$\frac{1}{\sqrt{2}}$	$\frac{1}{\sqrt{2}}$	1
$\theta = 60^\circ = \frac{\pi}{3}$	$\frac{\sqrt{3}}{2}$	$\frac{1}{2}$	$\sqrt{3}$

Positive and negative angles

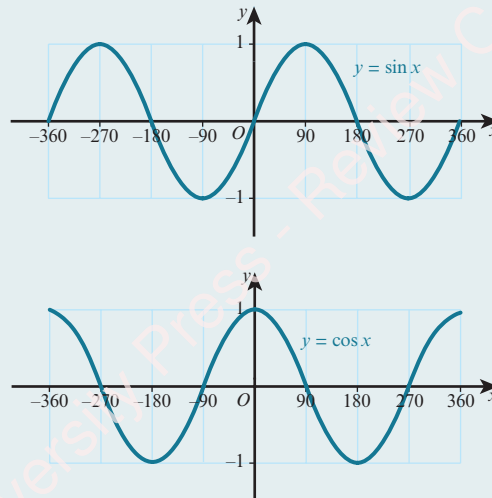
- Angles measured anticlockwise from the positive x -direction are positive.
- Angles measured clockwise from the positive x -direction are negative.

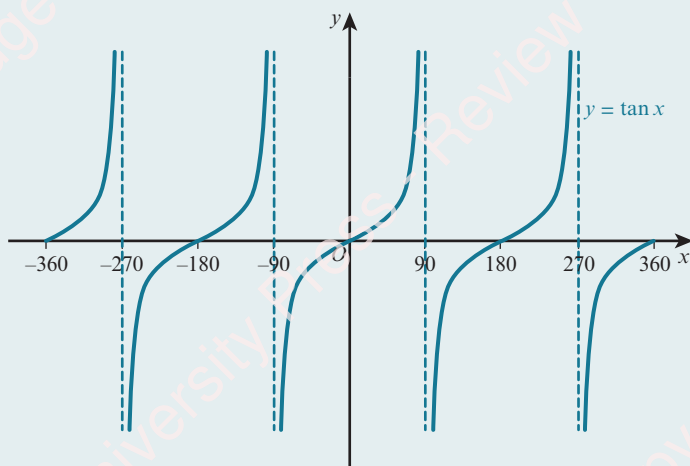
Diagram showing where \sin , \cos and \tan are positive



- Useful mnemonic: 'All Students Trust Cambridge'.

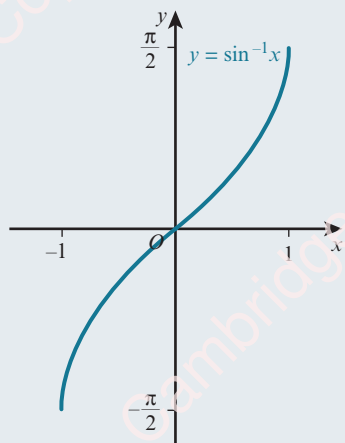
Graphs of trigonometric functions



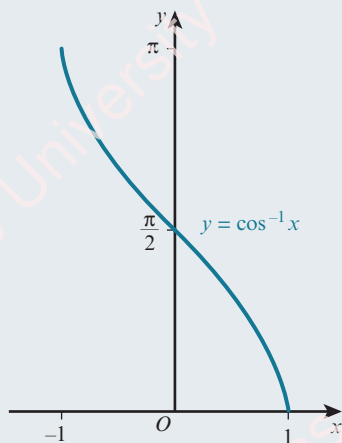


- The graph of $y = a \sin x$ is a stretch of $y = \sin x$, stretch factor a , parallel to the y -axis.
- The graph of $y = \sin(ax)$ is a stretch of $y = \sin x$, stretch factor $\frac{1}{a}$, parallel to the x -axis.
- The graph of $y = a + \sin x$ is a translation of $y = \sin x$ by the vector $\begin{pmatrix} 0 \\ a \end{pmatrix}$.
- The graph of $y = \sin(x + a)$ is a translation of $y = \sin x$ by the vector $\begin{pmatrix} -a \\ 0 \end{pmatrix}$.

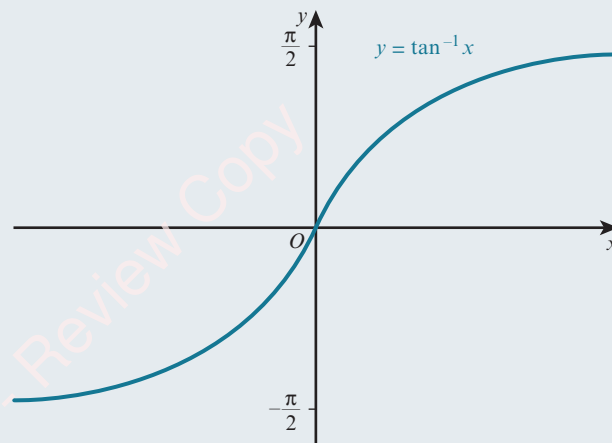
Inverse trigonometric functions



$y = \sin^{-1} x$
 domain: $-1 \leq x \leq 1$
 range: $-\frac{\pi}{2} \leq \sin^{-1} x \leq \frac{\pi}{2}$



$y = \cos^{-1} x$
 domain: $-1 \leq x \leq 1$
 range: $0 \leq \cos^{-1} x \leq \pi$



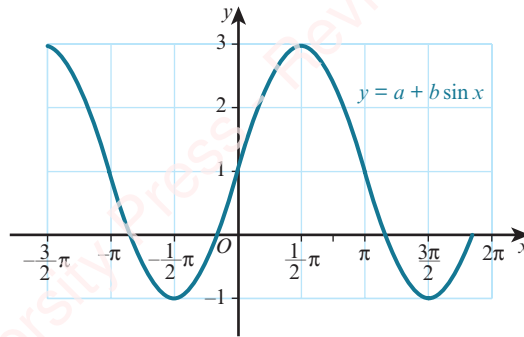
$y = \tan^{-1} x$
 domain: $x \in \mathbb{R}$
 range: $-\frac{\pi}{2} < \tan^{-1} x < \frac{\pi}{2}$

Trigonometric identities

- $\tan x \equiv \frac{\sin x}{\cos x}$
- $\sin^2 x + \cos^2 x \equiv 1$

END-OF-CHAPTER REVIEW EXERCISE 5

1



The diagram shows part of the graph of $y = a + b \sin x$.

State the values of the constants a and b .

[2]

Cambridge International AS & A Level Mathematics 9709 Paper 11 Q1 June 2014

2

Find the value of x satisfying the equation $\sin^{-1}(x - 1) = \tan^{-1}(3)$.

[3]

Cambridge International AS & A Level Mathematics 9709 Paper 11 Q2 November 2014

3 Given that θ is an acute angle measured in radians and that $\cos \theta = k$, find, in terms of k , an expression for:

a $\sin \theta$

[1]

b $\tan \theta$

[1]

c $\cos(\pi - \theta)$

[1]

4 Solve the equation $\cos^{-1}(8x^4 + 14x^2 - 16) = \pi$.

[4]

5 Solve the equation $\sin 2x = 5 \cos 2x$, for $0^\circ \leq x \leq 180^\circ$.

[4]

6

Solve the equation $\frac{13 \sin^2 \theta}{2 + \cos \theta} + \cos \theta = 2$ for $0^\circ \leq \theta \leq 180^\circ$.

[4]

Cambridge International AS & A Level Mathematics 9709 Paper 11 Q3 November 2014

7 Solve the equation $2 \cos^2 x = 5 \sin x - 1$ for $0^\circ \leq x \leq 360^\circ$.

[4]

8

i Sketch, on a single diagram, the graphs of $y = \cos 2\theta$ and $y = \frac{1}{2}$ for $0 \leq \theta \leq 2\pi$.

[3]

ii Write down the number of roots of the equation $2 \cos 2\theta - 1 = 0$ in the interval $0 \leq \theta \leq 2\pi$.

[1]

iii Deduce the number of roots of the equation $2 \cos 2\theta - 1 = 0$ in the interval $10\pi \leq \theta \leq 20\pi$.

[1]

Cambridge International AS & A Level Mathematics 9709 Paper 11 Q3 November 2011

9

i Show that the equation $2 \tan^2 \theta \sin^2 \theta = 1$ can be written in the form $2 \sin^4 \theta + \sin^2 \theta - 1 = 0$.

[2]

ii Hence solve the equation $2 \tan^2 \theta \sin^2 \theta = 1$ for $0^\circ \leq \theta \leq 360^\circ$.

[4]

Cambridge International AS & A Level Mathematics 9709 Paper 11 Q5 June 2011

10 i Solve the equation $4\sin^2 x + 8\cos x - 7 = 0$ for $0^\circ \leq x \leq 360^\circ$. [4]

ii Hence find the solution of the equation $4\sin^2\left(\frac{1}{2}\theta\right) + 8\cos\left(\frac{1}{2}\theta\right) - 7 = 0$ for $0^\circ \leq \theta \leq 360^\circ$. [2]

Cambridge International AS & A Level Mathematics 9709 Paper 11 Q4 November 2013

11 i Prove the identity $\frac{\sin x \tan x}{1 - \cos x} \equiv 1 + \frac{1}{\cos x}$. [3]

ii Hence solve the equation $\frac{\sin x \tan x}{1 - \cos x} + 2 = 0$, for $0^\circ \leq x \leq 360^\circ$. [3]

Cambridge International AS & A Level Mathematics 9709 Paper 11 Q4 November 2010

12 a Solve the equation $\frac{2 - \sin x}{1 + 2\sin x} = \frac{3}{4}$ for $0 \leq x \leq 2\pi$. [3]

b Solve the equation $\sin x - 2\cos x = 2(2\sin x - 3\cos x)$ for $-\pi \leq x \leq \pi$. [4]

13 A function f is defined by $f: x \rightarrow 3 - 2\tan\left(\frac{1}{2}x\right)$ for $0 \leq x \leq \pi$.

i State the range of f . [1]

ii State the exact value of $f\left(\frac{2}{3}\pi\right)$. [1]

iii Sketch the graph of $y = f(x)$. [2]

iv Obtain an expression, in terms of x , for $f^{-1}(x)$. [3]

Cambridge International AS & A Level Mathematics 9709 Paper 11 Q7 November 2010

14 i Solve the equation $2\cos^2\theta = 3\sin\theta$, for $0^\circ \leq \theta \leq 360^\circ$. [4]

ii The smallest positive solution of the equation $2\cos^2(n\theta) = 3\sin(n\theta)$, where n is a positive integer, is 10° . State the value of n and hence find the largest solution of this equation in the interval $0^\circ \leq \theta \leq 360^\circ$. [3]

Cambridge International AS & A Level Mathematics 9709 Paper 11 Q7 November 2012

15 i Show that $\frac{\sin\theta}{\sin\theta + \cos\theta} + \frac{\cos\theta}{\sin\theta - \cos\theta} \equiv \frac{1}{\sin^2\theta - \cos^2\theta}$. [3]

ii Hence solve the equation $\frac{\sin\theta}{\sin\theta + \cos\theta} + \frac{\cos\theta}{\sin\theta - \cos\theta} = 3$, for $0^\circ \leq \theta \leq 360^\circ$. [4]

Cambridge International AS & A Level Mathematics 9709 Paper 11 Q5 June 2013

16 i Show that the equation $\frac{4\cos\theta}{\tan\theta} + 15 = 0$ can be expressed as $4\sin^2\theta - 15\sin\theta - 4 = 0$. [3]

ii Hence solve the equation $\frac{4\cos\theta}{\tan\theta} + 15 = 0$ for $0^\circ \leq \theta \leq 360^\circ$. [3]

Cambridge International AS & A Level Mathematics 9709 Paper 11 Q4 November 2015

17 The function $f: x \rightarrow 5 + 3\cos\left(\frac{1}{2}x\right)$ is defined for $0 \leq x \leq 2\pi$.

i Solve the equation $f(x) = 7$, giving your answer correct to 2 decimal places. [3]

ii Sketch the graph of $y = f(x)$. [2]

iii Explain why f has an inverse. [1]

iv Obtain an expression for $f^{-1}(x)$. [3]

Cambridge International AS & A Level Mathematics 9709 Paper 11 Q8 June 2015



Chapter 6

Series

In this chapter you will learn how to:

- use the expansion of $(a + b)^n$, where n is a positive integer
- recognise arithmetic and geometric progressions
- use the formulae for the n th term and for the sum of the first n terms to solve problems involving arithmetic or geometric progressions
- use the condition for the convergence of a geometric progression, and the formula for the sum to infinity of a convergent geometric progression.

PREREQUISITE KNOWLEDGE

Where it comes from	What you should be able to do	Check your skills
IGCSE / O Level Mathematics	Expand brackets.	1 Expand: a $(2x + 3)^2$ b $(1 - 3x)(1 + 2x - 3x^2)$
IGCSE / O Level Mathematics	Simplify indices.	2 Simplify: a $(5x^2)^3$ b $(-2x^3)^5$
IGCSE / O Level Mathematics	Find the n th term of a linear sequence.	3 Find the n th term of these linear sequences. a 5, 7, 9, 11, 13, ... b 8, 5, 2, -1, -4, ...

Why study series?

At IGCSE / O Level you learnt how to expand expressions such as $(1 + x)^2$. In this chapter you will learn how to expand expressions of the form $(1 + x)^n$, where n can be any positive integer. Expansions of this type are called binomial expansions.

This chapter also covers arithmetic and geometric progressions. Both the mathematical and the real world are full of number sequences that have particular special properties. You will learn how to find the sum of the numbers in these progressions. Some fractal patterns can generate these types of sequences.

6.1 Binomial expansion of $(a + b)^n$

Binomial means 'two terms'.

The word is used in algebra for expressions such as $x + 3$ and $5x - 2y$.

You should already know that $(a + b)^2 = a^2 + 2ab + b^2$.

The expansion of $(a + b)^2$ can be used to expand $(a + b)^3$:

$$\begin{aligned}(a + b)^3 &= (a + b)(a^2 + 2ab + b^2) \\ &= a^3 + 2a^2b + ab^2 + a^2b + 2ab^2 + b^3 \\ &= a^3 + 3a^2b + 3ab^2 + b^3\end{aligned}$$

Similarly, it can be shown that $(a + b)^4 = a^4 + 4a^3b + 6a^2b^2 + 4ab^3 + b^4$.

Writing the expansions of $(a + b)^n$ in full in order:

$$\begin{aligned}(a + b)^0 &= 1 \\ (a + b)^1 &= 1a + 1b \\ (a + b)^2 &= 1a^2 + 2ab + 1b^2 \\ (a + b)^3 &= 1a^3 + 3a^2b + 3ab^2 + 1b^3 \\ (a + b)^4 &= 1a^4 + 4a^3b + 6a^2b^2 + 4ab^3 + 1b^4\end{aligned}$$

FAST FORWARD

In the Pure Mathematics 2 and 3 Coursebook, Chapter 7, you will learn how to expand these expressions for any real value of n .

FAST FORWARD

Properties of binomial expansions are also used in probability theory, which you will learn about if you go on to study the Probability and Statistics 1 Coursebook, Chapter 7.

WEB LINK

Try the *Sequences and Counting and binomials* resources on the Underground Mathematics website.

If you look at the expansion of $(a + b)^4$, you should notice that the powers of a and b form a pattern.

- The first term is a^4 and then the power of a decreases by 1 while the power of b increases by 1 in each successive term.
- All of the terms have a total index of 4 (a^4 , a^3b , a^2b^2 , ab^3 and b^4).

There is a similar pattern in the other expansions.

The coefficients also form a pattern that is known as **Pascal's triangle**.

$$\begin{array}{r}
 n = 0: \quad \quad \quad 1 \\
 n = 1: \quad \quad 1 \quad 1 \\
 n = 2: \quad \quad 1 \quad 2 \quad 1 \\
 n = 3: \quad 1 \quad 3 \quad 3 \quad 1 \\
 n = 4: \quad 1 \quad 4 \quad 6 \quad 4 \quad 1
 \end{array}$$

The next row is then:

$$n = 5: 1 \quad 5 \quad 10 \quad 10 \quad 5 \quad 1$$

This row can then be used to write down the expansion of $(a + b)^5$:

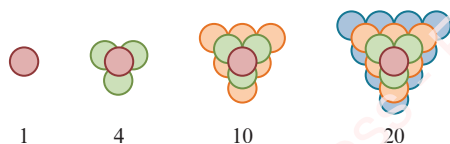
$$(a + b)^5 = 1a^5 + 5a^4b + 10a^3b^2 + 10a^2b^3 + 5ab^4 + 1b^5$$

EXPLORE 6.1



There are many number patterns to be found in Pascal's triangle.

For example, the numbers 1, 4, 10 and 20 have been highlighted.



These numbers are called tetrahedral numbers.

- 1 What do you notice if you find the total of each row in Pascal's triangle? Can you explain your findings?
- 2 Can you find the Fibonacci sequence (1, 1, 2, 3, 5, 8, 13, ...) in Pascal's triangle? You may want to add terms together.
- 3 Pascal's triangle has many other number patterns. Which number patterns can you find?



TIP

Each row always starts and finishes with a 1.

Each number is the sum of the two numbers in the row above it.



DID YOU KNOW?

Pascal's triangle is named after the French mathematician Blaise Pascal (1623–1662).

WORKED EXAMPLE 6.1

Use Pascal's triangle to find the expansion of:

a $(3x + 2)^3$ **b** $(5 - 2x)^4$

Answer

a $(3x + 2)^3$

The index is 3 so use the row for $n = 3$ in Pascal's triangle (1, 3, 3, 1).

$$(3x + 2)^3 = 1(3x)^3 + 3(3x)^2(2) + 3(3x)(2)^2 + 1(2)^3$$

$$= 27x^3 + 54x^2 + 36x + 8$$

b $(5 - 2x)^4$

The index is 4 so use the row for $n = 4$ in Pascal's triangle (1, 4, 6, 4, 1).

$$(5 - 2x)^4 = 1(5)^4 + 4(5)^3(-2x) + 6(5)^2(-2x)^2 + 4(5)(-2x)^3 + 1(-2x)^4$$

$$= 625 - 1000x + 600x^2 - 160x^3 + 16x^4$$

WORKED EXAMPLE 6.2

- a** Use Pascal's triangle to expand $(1 - 2x)^5$.
b Find the coefficient of x^3 in the expansion of $(3 + 5x)(1 - 2x)^5$.

Answer

a $(1 - 2x)^5$

The index is 5 so use the row for $n = 5$ in Pascal's triangle (1, 5, 10, 10, 5, 1).

$$(1 - 2x)^5 = 1(1)^5 + 5(1)^4(-2x) + 10(1)^3(-2x)^2 + 10(1)^2(-2x)^3 + 5(1)(-2x)^4 + 1(-2x)^5$$

$$= 1 - 10x + 40x^2 - 80x^3 + 80x^4 - 32x^5$$

b $(3 + 5x)(1 - 2x)^5 = (3 + 5x)(1 - 10x + 40x^2 - 80x^3 + 80x^4 - 32x^5)$

The term in x^3 comes from the products:

$$\begin{array}{ccccccc} \downarrow & \downarrow & \downarrow & \downarrow & & & \\ (3 + 5x)(1 - 10x + 40x^2 - 80x^3 + 80x^4 - 32x^5) \end{array}$$

$$3 \times (-80x^3) = -240x^3 \text{ and } 5x \times 40x^2 = 200x^3$$

$$\text{Coefficient of } x^3 = -240 + 200 = -40.$$

EXERCISE 6A

1 Use Pascal's triangle to find the expansions of:

a $(x + 2)^3$

b $(1 - x)^4$

c $(x + y)^3$

d $(2 - x)^3$

e $(x - y)^4$

f $(2x + 3y)^3$

g $(2x - 3)^4$

h $\left(x^2 + \frac{3}{2x^3}\right)^3$

2 Find the coefficient of x^3 in the expansions of:

a $(x+3)^4$

b $(1+x)^5$

c $(3-x)^5$

d $(4+x)^4$

e $(x-2)^5$

f $(2x-1)^4$

g $(4x+3)^4$

h $\left(5 - \frac{x}{2}\right)^4$

3 $(3+x)^5 + (3-x)^5 \equiv A + Bx^2 + Cx^4$

Find the value of A , the value of B and the value of C .

4 The coefficient of x^2 in the expansion of $(3+ax)^4$ is 216.

Find the possible values of the constant a .

5 a Expand $(2+x)^4$.

b Use your answer to part a to express $(2+\sqrt{3})^4$ in the form $a + b\sqrt{3}$.

6 a Expand $(1+x)^3$.

b Use your answer to part a to express:

i $(1+\sqrt{5})^3$ in the form $a + b\sqrt{5}$

ii $(1-\sqrt{5})^3$ in the form $c + d\sqrt{5}$.

c Use your answers to part b to simplify $(1+\sqrt{5})^3 + (1-\sqrt{5})^3$.

7 Expand $(1+x)(2+3x)^4$.

8 a Expand $(x^2-1)^4$.

b Find the coefficient of x^6 in the expansion of $(1-2x^2)(x^2-1)^4$.

9 Find the coefficient of x^2 in the expansion of $\left(3x - \frac{2}{x}\right)^4$.

10 Find the term independent of x in the expansion of $\left(x^2 - \frac{3}{x^2}\right)^4$.

11 a Find the first three terms, in ascending powers of y , in the expansion of $(1+y)^4$.

b By replacing y with $5x - 2x^2$, find the coefficient of x^2 in the expansion of $(1+5x-2x^2)^4$.

12 The coefficient of x^2 in the expansion of $(1+ax)^4$ is 30 times the coefficient of x in the expansion of $\left(1 + \frac{ax}{3}\right)^3$. Find the value of a .

13 Find the power of x that has the greatest coefficient in the expansion of $\left(3x^4 + \frac{1}{x}\right)^4$.



14 a Write down the expansion of $(x+y)^5$.

b Without using a calculator and using your result from part a, find the value of $\left(10\frac{1}{4}\right)^5$, correct to the nearest hundred.



15 a Given that $\left(x^2 + \frac{1}{x}\right)^4 - \left(x^2 - \frac{1}{x}\right)^4 = px^5 + \frac{q}{x}$, find the value of p and the value of q .

b Hence, without using a calculator, find the exact value of $\left(2 + \frac{1}{\sqrt{2}}\right)^4 - \left(2 - \frac{1}{\sqrt{2}}\right)^4$.

- PS** 16 $y = x + \frac{1}{x}$
- a Express $x^3 + \frac{1}{x^3}$ in terms of y .
- b Express $x^5 + \frac{1}{x^5}$ in terms of y .

6.2 Binomial coefficients


Pascal's triangle can be used to expand $(a + b)^n$ for any positive integer n , but if n is large it can take a long time to write out all the rows in the triangle. Hence, we need a more efficient method to find the coefficients in the expansions. The coefficients in the binomial expansion of $(1 + x)^n$ are known as **binomial coefficients**.

EXPLORE 6.2

Consider the expansion:

$$(1+x)^5 = 1 + 5x + 10x^2 + 10x^3 + 5x^4 + x^5$$

The coefficients are: 1 5 10 10 5 1

-  Find the nCr function on your calculator. On some calculators this may be nC_r , or $\binom{n}{r}$.

-  1 Use your calculator to find the values of:

$$\binom{5}{0}, \binom{5}{1}, \binom{5}{2}, \binom{5}{3}, \binom{5}{4} \text{ and } \binom{5}{5}.$$

- 2 What do you notice about your answers to question 1?
3 Complete the following four statements.

The coefficient of x^2 in the expansion of $(1+x)^5$ is $\binom{5}{\dots}$.

The coefficient of x^r in the expansion of $(1+x)^n$ is $\binom{\dots}{\dots}$.

The coefficient of the 4th term in the expansion of $(1+x)^5$ is $\binom{5}{\dots}$.

The coefficient of the $(r+1)$ th term in the expansion of $(1+x)^n$ is $\binom{\dots}{\dots}$.

We write the binomial expansion of $(1+x)^n$, where n is a positive integer as:

KEY POINT 6.1

If n is a positive integer, then $(1+x)^n = \binom{n}{0} + \binom{n}{1}x + \binom{n}{2}x^2 + \dots + \binom{n}{n}x^n$.

TIP

To find $\binom{5}{2}$, key in

$$\boxed{5} \boxed{nCr} \boxed{2}.$$

We can therefore write the expansion of $(1+x)^n$ using binomial coefficients; the result is known as the **Binomial theorem**.

We can use the Binomial theorem to expand $(a+b)^n$, too. We can write $(a+b)^n = a^n \left(1 + \frac{b}{a}\right)^n$ (assuming that $a \neq 0$).

KEY POINT 6.2

$$(a+b)^n = \binom{n}{0} a^n + \binom{n}{1} a^{n-1} b + \binom{n}{2} a^{n-2} b^2 + \dots + \binom{n}{n} b^n$$

WORKED EXAMPLE 6.3

Find, in ascending powers of x , the first four terms in the expansion of:

a $(1+x)^{15}$ **b** $(2-3x)^{10}$

Answer

$$\begin{aligned} \text{a } (1+x)^{15} &= \binom{15}{0} + \binom{15}{1}x + \binom{15}{2}x^2 + \binom{15}{3}x^3 + \dots \\ &= 1 + 15x + 105x^2 + 455x^3 + \dots \end{aligned}$$

$$\begin{aligned} \text{b } (2-3x)^{10} &= \binom{10}{0} 2^{10} + \binom{10}{1} 2^9 (-3x)^1 + \binom{10}{2} 2^8 (-3x)^2 + \binom{10}{3} 2^7 (-3x)^3 + \dots \\ &= 1024 - 15360x + 103680x^2 - 414720x^3 + \dots \end{aligned}$$

161

You should also know how to work out the binomial coefficients without using a calculator.

From Pascal's triangle, we know that $\binom{5}{0} = 1$ and $\binom{5}{5} = 1$.

In general, we can write this as:

KEY POINT 6.3

$$\binom{n}{0} = 1 \text{ and } \binom{n}{n} = 1$$

We write $\binom{5}{1}$, $\binom{5}{2}$, $\binom{5}{3}$ and $\binom{5}{4}$ as:

$$\binom{5}{1} = \frac{5}{1} = 5 \quad \binom{5}{2} = \frac{5 \times 4}{2 \times 1} = 10 \quad \binom{5}{3} = \frac{5 \times 4 \times 3}{3 \times 2 \times 1} = 10 \quad \binom{5}{4} = \frac{5 \times 4 \times 3 \times 2}{4 \times 3 \times 2 \times 1} = 5$$

In general, if r is a positive integer less than n , then:

KEY POINT 6.4

$$\binom{n}{r} = \frac{n \times (n-1) \times (n-2) \times \cdots \times (n-r+1)}{r \times (r-1) \times (r-2) \times \cdots \times 3 \times 2 \times 1}$$

WORKED EXAMPLE 6.4

a Without using a calculator, find the value of $\binom{8}{4}$.

b Find an expression, in terms of n , for $\binom{n}{4}$.

Answer

$$\text{a } \binom{8}{4} = \frac{8 \times 7 \times 6 \times 5}{4 \times 3 \times 2 \times 1} = 70$$

$$\text{b } \binom{n}{4} = \frac{n \times (n-1) \times (n-2) \times (n-3)}{4 \times 3 \times 2 \times 1} = \frac{n(n-1)(n-2)(n-3)}{24}$$

WORKED EXAMPLE 6.5

When $\left(1 - \frac{x}{3}\right)^n$ is expanded in ascending powers of x , the coefficient of x^2 is 4. Given that n is the positive integer, find the value of n .

Answer

$$\text{Term in } x^2 = \binom{n}{2} \left(-\frac{x}{3}\right)^2 = \frac{n \times (n-1)}{2 \times 1} \times \frac{x^2}{9} = \frac{n \times (n-1)}{18} x^2$$

$$\frac{n \times (n-1)}{18} = 4$$

$$n(n-1) = 72$$

$$n^2 - n - 72 = 0$$

$$(n-9)(n+8) = 0$$

$$n = 9 \text{ or } n = -8$$

As n is a positive integer, $n = 9$.

WORKED EXAMPLE 6.6

When $(2 + kx)^8$ is expanded, the coefficient of x^5 is two times the coefficient of x^4 . Given that $k > 0$, find the value of k .

Answer

$$\text{Term in } x^5 = \binom{8}{5} (2)^3 (kx)^5 = 448k^5x^5$$

$$\text{Term in } x^4 = \binom{8}{4} (2)^4 (kx)^4 = 1120k^4x^4$$

Coefficient of $x^5 = 2 \times$ coefficient of x^4

$$448k^5 = 2 \times 1120k^4$$

$$448k^5 - 2240k^4 = 0$$

$$448k^4(k - 5) = 0$$

$$k = 0 \text{ or } k = 5$$

As k is a positive integer, $k = 5$.

WORKED EXAMPLE 6.7

- a** Obtain the first three terms in the expansion of $(2 - x)(1 + 2x)^9$.
b Use your answer to part **a** to estimate the value of 1.99×1.02^9 .

Answer

$$\begin{aligned} \text{a } (2 - x)(1 + 2x)^9 &= (2 - x) \left[\binom{9}{0} + \binom{9}{1}(2x)^1 + \binom{9}{2}(2x)^2 + \dots \right] \\ &= (2 - x)(1 + 18x + 144x^2 + \dots) \\ &= 2(1 + 18x + 144x^2 + \dots) - x(1 + 18x + 144x^2 + \dots) \\ &= 2 + (2 \times 18 - 1)x + (2 \times 144 - 18)x^2 + \dots \\ &= 2 + 35x + 270x^2 + \dots \end{aligned}$$

$$\begin{aligned} \text{b } (2 - x)(1 + 2x)^9 &= 2 + 35x + 270x^2 + \dots \quad \dots \dots \dots \text{ Let } x = 0.01. \\ 1.99 \times 1.02^9 &\approx 2 + 35(0.01) + 270(0.01)^2 \\ 1.99 \times 1.02^9 &\approx 2.377 \end{aligned}$$

There is an alternative formula for calculating $\binom{n}{r}$. To be able to understand and apply the alternative formula, we need to first know about **factorial** notation.

We write $6!$ to mean $6 \times 5 \times 4 \times 3 \times 2 \times 1$, and call it '6 factorial'.

In general, if n is a positive integer, then:

KEY POINT 6.5

$$n! = n \times (n-1) \times (n-2) \times (n-3) \times \cdots \times 3 \times 2 \times 1$$

The formula for $\binom{n}{r}$ then becomes:

KEY POINT 6.6

$$\binom{n}{r} = \frac{n!}{r!(n-r)!}$$

WORKED EXAMPLE 6.8

Use the formula $\binom{n}{r} = \frac{n!}{r!(n-r)!}$ to find the value of:

a $\binom{8}{4}$

b $\binom{9}{3}$

Answer

a $\binom{8}{4} = \frac{8!}{4!(8-4)!} = \frac{8!}{4!4!} = 70$

b $\binom{9}{3} = \frac{9!}{3!(9-3)!} = \frac{9!}{3!6!} = 84$

164

WORKED EXAMPLE 6.9

Find the term independent of x in the expansion of $\left(x + \frac{5}{x^2}\right)^9$.

Answer

$$\left(x + \frac{5}{x^2}\right)^9 = \binom{9}{0}x^9 + \binom{9}{1}x^8\left(\frac{5}{x^2}\right)^1 + \binom{9}{2}x^7\left(\frac{5}{x^2}\right)^2 + \binom{9}{3}x^6\left(\frac{5}{x^2}\right)^3 + \cdots$$

The term that is independent of x is the term that when simplified does not involve x .

The x terms cancel each other out when the power of x is double the power of $\frac{5}{x^2}$.

Also, the sum of these powers must be 9.

Hence, we are looking for powers of 6 and 3, respectively, and the corresponding binomial coefficient is $\binom{9}{3}$.

The term independent of x is:

$$\binom{9}{3}x^6\left(\frac{5}{x^2}\right)^3 = 84 \times x^6 \times \frac{125}{x^6} = 10500$$

EXERCISE 6B



1 Without using a calculator, find the value of each of the following.

a $\binom{7}{3}$

b $\binom{9}{6}$

c $\binom{12}{4}$

d $\binom{15}{6}$

2 Express each of the following in terms of n .

a $\binom{n}{2}$

b $\binom{n}{1}$

c $\binom{n}{3}$

3 Use the formula $\binom{n}{r} = \frac{n!}{r!(n-r)!}$ to find the value of each of the following.

a $\binom{10}{2}$

b $\binom{8}{5}$

c $\binom{14}{3}$

d $\binom{12}{7}$

4 Find, in ascending powers of x , the first three terms in each of the following expansions.

a $(1+2x)^8$

b $(1-3x)^{10}$

c $\left(1+\frac{x}{2}\right)^7$

d $(1+x^2)^{12}$

e $\left(3+\frac{x}{2}\right)^7$

f $(2-x)^{13}$

g $(2+x^2)^8$

h $\left(2+\frac{x^2}{2}\right)^9$

5 Find the coefficient of x^3 in each of the following expansions.

a $(1-x)^9$

b $(1+3x)^{12}$

c $\left(2+\frac{x}{4}\right)^7$

d $\left(3-\frac{x}{3}\right)^{10}$

6 Find the coefficient of x^4 in the expansion of $(2x+1)^{12}$.

7 Find the term in x^5 in the expansion of $(5-2x)^8$.

8 Find the coefficient of x^8y^5 in the expansion of $(x-2y)^{13}$.

9 Find the term independent of x in the expansion of $\left(x-\frac{3}{x^2}\right)^{12}$.

10 Find, in ascending powers of x , the first three terms of each of the following expansions.

a $(1-x)(2+x)^7$

b $(1+2x)(1-3x)^{10}$

c $(1+x)\left(1-\frac{x}{2}\right)^8$

11 a Find, in ascending powers of x , the first three terms in the expansion of $(2+x)^{10}$.

b By replacing x with $2y-3y^2$, find the first three terms in the expansion of $(2+2y-3y^2)^{10}$.

12 a Find, in ascending powers of x , the first three terms in the expansion of $\left(1-\frac{x}{2}\right)^8$.

b Hence, obtain the coefficient of x^2 in the expansion of $(2+3x-x^2)\left(1-\frac{x}{2}\right)^8$.

13 Find the first three terms, in ascending powers of x , in the expansion of $(2-3x)^4(1+2x)^{10}$.

14 The first four terms, in ascending powers of x , in the expansion of $(1+ax+bx^2)^7$ are $1-14x+91x^2+px^3$. Find the values of a , b and p .



15 The first two terms, in ascending powers of x , in the expansion of $(1+x)\left(2-\frac{x}{4}\right)^n$ are $p+qx^2$. Find the values of n , p and q .

6.3 Arithmetic progressions

At IGCSE / O Level you learnt that a number sequence is a list of numbers and that the numbers in the sequence are called the **terms** of the sequence.

A linear sequence such as 5, 8, 11, 14, 17, ... is also called an **arithmetic progression**. Each term differs from the term before by a constant. This constant is called the **common difference**.

The notation used for arithmetic progressions is:

$$a = \text{first term} \quad d = \text{common difference} \quad l = \text{last term}$$

The common difference is also allowed to be zero or negative. For example, 10, 6, 2, -2, ... and 5, 5, 5, 5, ... are both arithmetic progressions.

The first five terms of an arithmetic progression whose first term is a and whose common difference is d are:

a	$a + d$	$a + 2d$	$a + 3d$	$a + 4d$
term 1	term 2	term 3	term 4	term 5

From this pattern, you can see that the formula for the n th term is given by:

KEY POINT 6.7

$$n\text{th term} = a + (n - 1)d$$

WORKED EXAMPLE 6.10

Find the number of terms in the arithmetic progression $-3, 1, 5, 9, 13, \dots, 237$.

Answer

$$n\text{th term} = a + (n - 1)d \quad \dots \dots \dots \text{Use } a = -3, d = 4 \text{ and } n\text{th term} = 237.$$

$$237 = -3 + 4(n - 1) \quad \dots \dots \dots \text{Solve.}$$

$$n - 1 = 60$$

$$n = 61$$

WORKED EXAMPLE 6.11

The fourth term of an arithmetic progression is 7 and the tenth term is 16. Find the first term and the common difference.

Answer

$$4\text{th term} = 7 \quad \Rightarrow a + 3d = 7 \quad \dots \dots \dots (1)$$

$$10\text{th term} = 16 \quad \Rightarrow a + 9d = 16 \quad \dots \dots \dots (2)$$

$$(2) - (1) \text{ gives } 6d = 9$$

$$d = 1.5$$

$$\text{Substituting into (1) gives } a + 4.5 = 7$$

$$a = 2.5$$

$$\text{First term} = 2.5, \text{ common difference} = 1.5$$

WORKED EXAMPLE 6.12

The n th term of an arithmetic progression is $5 - 6n$. Find the first term and the common difference.

Answer

$$\text{1st term} = 5 - 6(1) = -1$$

Substitute $n = 1$ into n th term $= 5 - 6n$.

$$\text{2nd term} = 5 - 6(2) = -7$$

Substitute $n = 2$ into n th term $= 5 - 6n$.

$$\text{Common difference} = \text{2nd term} - \text{1st term} = -6$$

The sum of an arithmetic progression

When the terms in a sequence are added together we call the resulting sum a **series**.

EXPLORE 6.3

$$1 + 2 + 3 + 4 + \dots + 97 + 98 + 99 + 100 = ?$$

It is said that, at the age of seven or eight, the famous mathematician Carl Gauss was asked to find the sum of the numbers from 1 to 100. His teacher expected this task to keep him occupied for some time but Gauss surprised him by writing down the correct answer almost immediately. His method involved adding the numbers in pairs: $1 + 100 = 101$, $2 + 99 = 101$, $3 + 98 = 101$, ...

- Can you complete Gauss's method to find the answer?
- Use Gauss's method to find the sum of:
 - $2 + 4 + 6 + 8 + \dots + 494 + 496 + 498 + 500$
 - $5 + 10 + 15 + 20 + \dots + 185 + 190 + 195 + 200$
 - $6 + 9 + 12 + 15 + \dots + 93 + 96 + 99 + 102$
- Use Gauss's method to find an expression, in terms of n , for the sum: $1 + 2 + 3 + 4 + \dots + (n - 3) + (n - 2) + (n - 1) + n$

The sum of an arithmetic progression, S_n , can be written as:

KEY POINT 6.8

$$S_n = \frac{n}{2}(a + l) \quad \text{or} \quad S_n = \frac{n}{2}[2a + (n - 1)d]$$

We can prove this result as follows, by writing out the series in full.

$$\begin{array}{r} S_n = a + (a+d) + (a+2d) + \dots + (l-2d) + (l-d) + l \\ \text{Reversing: } S_n = l + (l-d) + (l-2d) + \dots + (a+2d) + (a+d) + a \end{array}$$

$$\begin{array}{r} \text{Adding: } 2S_n = (a+l) + (a+l) + (a+l) + \dots + (a+l) + (a+l) + (a+l) \\ 2S_n = n(a+l), \text{ as there are } n \text{ terms in the series} \end{array}$$

$$\text{So } S_n = \frac{n}{2}(a+l).$$

Using $l = a + (n-1)d$, this can be rewritten as $S_n = \frac{n}{2}[2a + (n-1)d]$.

It is useful to remember the following rule that applies for all sequences.

KEY POINT 6.9

$$n\text{th term} = S_n - S_{n-1}$$

WORKED EXAMPLE 6.13

In an arithmetic progression, the 1st term is -12 , the 17th term is 12 and the last term is 45 . Find the sum of all the terms in the progression.

Answer

We start by working out the common difference.

$$\begin{array}{l} n\text{th term} = a + (n-1)d \quad \dots \dots \dots \text{Use } n\text{th term} = 12 \text{ when } n = 17 \text{ and } a = -12. \\ 12 = -12 + 16d \quad \dots \dots \dots \text{Solve.} \\ d = \frac{3}{2} \end{array}$$

We now determine the number of terms in the whole sequence.

$$\begin{array}{l} n\text{th term} = a + (n-1)d \quad \dots \dots \dots \text{Use } n\text{th term} = 45 \text{ when } a = -12 \text{ and } d = \frac{3}{2}. \\ 45 = -12 + \frac{3}{2}(n-1) \quad \dots \dots \dots \text{Solve.} \\ n-1 = 38 \\ n = 39 \end{array}$$

Finally, we can work out the sum of all the terms.

$$\begin{array}{l} S_n = \frac{n}{2}(a+l) \quad \dots \dots \dots \text{Use } a = -12, l = 45 \text{ and } n = 39. \\ S_{39} = \frac{39}{2}(-12 + 45) \\ = 643\frac{1}{2} \end{array}$$

WORKED EXAMPLE 6.14

The 10th term in an arithmetic progression is 14 and the sum of the first 7 terms is 42.

Find the first term of the progression and the common difference.

Answer

$$n\text{th term} = a + (n - 1)d$$

$$14 = a + 9d \quad \text{----- (1)}$$

Use $n\text{th term} = 14$ when $n = 10$.

$$S_n = \frac{n}{2} [2a + (n - 1)d]$$

$$42 = \frac{7}{2} (2a + 6d)$$

Use $n = 7$ and $S_7 = 42$.

$$6 = a + 3d \quad \text{----- (2)}$$

$$(1) - (2) \text{ gives } 6d = 8$$

$$d = \frac{4}{3}$$

Substituting $d = \frac{4}{3}$ into equation (1) gives $a = 2$.

First term = 2, common difference = $\frac{4}{3}$

WORKED EXAMPLE 6.15

The sum of the first n terms, S_n , of a particular arithmetic progression is given by $S_n = 4n^2 + n$.

a Find the first term and the common difference.

b Find an expression for the $n\text{th}$ term.

Answer

$$\text{a } S_1 = 4(1)^2 + 1 = 5$$

First term = 5

$$S_2 = 4(2)^2 + 2 = 18$$

First term + second term = 18

$$\text{Second term} = 18 - 5 = 13$$

First term = 5, common difference = 8

b Method 1:

$$n\text{th term} = a + (n - 1)d$$

$$= 5 + 8(n - 1)$$

$$= 8n - 3$$

Use $a = 5, d = 8$.

Method 2:

$$n\text{th term} = S_n - S_{n-1} = 4n^2 + n - [4(n-1)^2 + (n-1)]$$

$$= 4n^2 + n - (4n^2 - 8n + 4 + n - 1)$$

$$= 8n - 3$$

EXERCISE 6C

- The first term in an arithmetic progression is a and the common difference is d .
Write down expressions, in terms of a and d , for the seventh term and the 19th term.
- Find the number of terms and the sum of each of these arithmetic series.
 - $13 + 17 + 21 + \dots + 97$
 - $152 + 149 + 146 + \dots + 50$
- Find the sum of each of these arithmetic series.
 - $5 + 12 + 19 + \dots$ (17 terms)
 - $4 + 1 + (-2) + \dots$ (38 terms)
 - $\frac{1}{3} + \frac{1}{2} + \frac{2}{3} + \dots$ (20 terms)
 - $-x - 5x - 9x - \dots$ (40 terms)
- The first term of an arithmetic progression is 15 and the sum of the first 20 terms is 1630.
Find the common difference.
- In an arithmetic progression, the first term is -27 , the 16th term is 78 and the last term is 169.
 - Find the common difference and the number of terms.
 - Find the sum of the terms in this progression.
- The first two terms in an arithmetic progression are 146 and 139. The last term is -43 .
Find the sum of all the terms in this progression.
- The first two terms in an arithmetic progression are 2 and 9. The last term in the progression is the only number that is greater than 150. Find the sum of all the terms in the progression.
- The first term of an arithmetic progression is 15 and the last term is 27. The sum of the first five terms is 79. Find the number of terms in this progression.
- Find the sum of all the integers between 100 and 300 that are multiples of 7.
- The first term of an arithmetic progression is 2 and the 11th term is 17. The sum of all the terms in the progression is 500. Find the number of terms in the progression.
- Robert buys a car for \$8000 in total (including interest). He pays for the car by making monthly payments that are in arithmetic progression. The first payment that he makes is \$200 and the debt is fully repaid after 16 payments. Find the fifth payment.
- The sixth term of an arithmetic progression is -3 and the sum of the first ten terms is -10 .
 - Find the first term and the common difference.
 - Given that the n th term of this progression is -59 , find the value of n .
- The sum of the first n terms, S_n , of a particular arithmetic progression is given by $S_n = 4n^2 + 3n$.
Find the first term and the common difference.
- The sum of the first n terms, S_n , of a particular arithmetic progression is given by $S_n = 12n - 2n^2$.
Find the first term and the common difference.

$$1 = a \left(\frac{1}{2}\right)^4$$

$$a = 16$$

$$\text{8th term} = 16 \left(\frac{1}{2}\right)^7 = \frac{1}{8}$$

$$n\text{th term} = ar^{n-1} = 16 \left(\frac{1}{2}\right)^{n-1}$$

WORKED EXAMPLE 6.17

The second and fifth terms in a geometric progression are 12 and 40.5, respectively. Find the first term and the common ratio. Hence, write down an expression for the n th term.

Answer

$$12 = ar \quad \text{-----(1)}$$

$$40.5 = ar^4 \quad \text{-----(2)}$$

$$(2) \div (1) \text{ gives } \frac{ar^4}{ar} = \frac{40.5}{12}$$

$$r^3 = \frac{27}{8}$$

$$r = \frac{3}{2}$$

Substituting $r = \frac{3}{2}$ into equation (1) gives $a = 8$.

First term = 8, common ratio = $\frac{3}{2}$, n th term = $8 \left(\frac{3}{2}\right)^{n-1}$.

WORKED EXAMPLE 6.18

The n th term of a geometric progression is $9 \left(-\frac{2}{3}\right)^n$. Find the first term and the common ratio.

Answer

$$\text{1st term} = 9 \left(-\frac{2}{3}\right)^1 = -6$$


$$\text{2nd term} = 9 \left(-\frac{2}{3}\right)^2 = 4$$

$$\text{Common ratio} = \frac{\text{2nd term}}{\text{1st term}} = \frac{4}{-6} = -\frac{2}{3}$$

This is also clear from the formula directly: each term is $\left(-\frac{2}{3}\right)$ times the previous one.

$$\text{First term} = -6, \text{ common ratio} = -\frac{2}{3}.$$

EXPLORE 6.4

 In this Explore activity you are *not* allowed to use a calculator.

- 1 Consider the sum of the first 10 terms, S_{10} , of a geometric progression with $a = 1$ and $r = 3$.

$$S_{10} = 1 + 3 + 3^2 + 3^3 + \dots + 3^7 + 3^8 + 3^9$$

- a Multiply both sides of the previous equation by the common ratio, 3, and complete the following statement.

$$3S_{10} = 3 + 3^2 + 3^3 + \dots + 3^7 + 3^8 + 3^9$$

- b How does this compare to the original expression? Can you use this to find a simpler way of expressing the sum S_{10} ?
- 2 Use the method from **question 1** to find an alternative way of expressing each of the following.

a $1 + r + r^2 + \dots$ (10 terms)

b $a + ar + ar^2 + \dots$ (10 terms)

c $a + ar + ar^2 + \dots$ (n terms)

You will have discovered in Explore 6.4 that the sum of a geometric progression, S_n , can be written as:

KEY POINT 6.11

$$S_n = \frac{a(1-r^n)}{1-r} \quad \text{or} \quad S_n = \frac{a(r^n-1)}{r-1}$$

TIP

These formulae are not defined when $r = 1$.

Either formula can be used but it is usually easier to:

- Use the first formula when $-1 < r < 1$.
- Use the second formula when $r > 1$ or when $r \leq -1$.

This is the proof of the formulae in Key point 6.11.

$$S_n = a + ar + ar^2 + \dots + ar^{n-3} + ar^{n-2} + ar^{n-1} \quad \text{--- (1)}$$

$$r \times \text{(1):} \quad rS_n = ar + ar^2 + \dots + ar^{n-2} + ar^{n-1} + ar^n \quad \text{--- (2)}$$

$$\text{(2)} - \text{(1):} \quad rS_n - S_n = ar^n - a$$

$$(r-1)S_n = a(r^n - 1)$$

$$S_n = \frac{a(r^n - 1)}{r - 1}$$

Multiplying the numerator and the denominator by -1 gives the alternative formula

$$S_n = \frac{a(1-r^n)}{1-r}$$

Can you see why this formula does not work when $r = 1$?

WORKED EXAMPLE 6.19

Find the sum of the first 12 terms of the geometric series $3 + 6 + 12 + 24 + \dots$.

Answer

$$S_n = \frac{a(r^n - 1)}{r - 1}$$

Use $a = 3$, $r = 2$ and $n = 12$.

$$\begin{aligned} S_{12} &= \frac{3(2^{12} - 1)}{2 - 1} \\ &= 12285 \end{aligned}$$

Simplify.

WORKED EXAMPLE 6.20

The third term of a geometric progression is nine times the first term. The sum of the first six terms is k times the sum of the first two terms. Find the value of k .

Answer

$$\text{3rd term} = 9 \times \text{first term}$$

$$ar^2 = 9a$$

$$r = \pm 3$$

Divide both sides by a (which we assume is non-zero) and solve.

$$\text{Use } S_6 = kS_2$$

$$\frac{a(r^6 - 1)}{r - 1} = \frac{ka(r^2 - 1)}{r - 1}$$

Rearrange to make k the subject.

$$k = \frac{r^6 - 1}{r^2 - 1}$$

When $r = 3$, $k = 91$ and when $r = -3$, $k = 91$.

Hence, $k = 91$.

EXERCISE 6D

- Identify whether the following sequences are geometric. If they are geometric, write down the common ratio and the eighth term.

a $2, 4, 8, 14, \dots$	b $7, 21, 63, 189, \dots$	c $81, -27, 9, -3, \dots$
d $\frac{1}{9}, \frac{2}{9}, \frac{4}{9}, \frac{7}{9}, \dots$	e $1, 0.4, 0.16, 0.64, \dots$	f $1, -1, 1, -1, \dots$
- The first term in a geometric progression is a and the common ratio is r . Write down expressions, in terms of a and r , for the sixth term and the 15th term.
- The first term of a geometric progression is 270 and the fourth term is 80. Find the common ratio.
- The first term of a geometric progression is 50 and the second term is -30 . Find the fourth term.
- The second term of a geometric progression is 12 and the fourth term is 27. Given that all the terms are positive, find the common ratio and the first term.
- The sum of the second and third terms in a geometric progression is 84. The second term is 16 less than the first term. Given that all the terms in the progression are positive, find the first term.

The diagram of the 2 by 2 square is a visual representation of this series. If the pattern of rectangles inside the square is continued, the total area of the rectangles approximates the area of the whole square (which is 4) increasingly well as more rectangles are included.

We therefore say that the sum of the infinite geometric series $2 + 1 + \frac{1}{2} + \frac{1}{4} + \frac{1}{8} + \dots$ is 4, because the sum of the first n terms gets as close to 4 as we like as n gets larger. We write $2 + 1 + \frac{1}{2} + \frac{1}{4} + \frac{1}{8} + \dots = 4$. We also say that the sum to infinity of this series is 4, and that the series converges to 4. A series that converges is also known as a **convergent series**.

You might be wondering why we can say this, as no matter how many terms we add up, the answer is always less than 4. The simplest answer is because it works. Mathematicians and philosophers have struggled with the idea of infinity for thousands of years, and

whether something like ' $2 + 1 + \frac{1}{2} + \frac{1}{4} + \frac{1}{8} + \dots$ ' even makes sense. But over the past few hundred years, we have worked out that writing ' $2 + 1 + \frac{1}{2} + \frac{1}{4} + \frac{1}{8} + \dots = 4$ ' turns out

to be very useful, and gives us answers that work consistently when we try to do more mathematics with them.

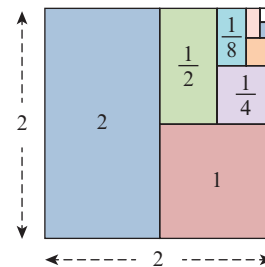
You are probably also familiar with a very important example of an infinite geometric series without realising it! What do we mean by the recurring decimal 0.3333...?

We can write this as a series: $0.3333\dots = \frac{3}{10} + \frac{3}{100} + \frac{3}{1000} + \dots$. If we work out the sum

of the first n terms of this geometric series, we find $S_1 = \frac{3}{10} = 0.3$, $S_2 = \frac{33}{100} = 0.33$,

$S_3 = \frac{333}{1000} = 0.333$ and so on. These sums are getting as close as we like to $\frac{1}{3}$, so we say that

the sum of the infinite series is equal to $\frac{1}{3}$, and we write $\frac{1}{3} = 0.3333\dots$. This justifies what you have been writing for many years. Using the formula we will be working out shortly, we can easily write any recurring decimal as an exact fraction.



i DID YOU KNOW?

The first person to introduce infinite decimal numbers was Simon Stevin in 1585. He was an influential mathematician who popularised the use of decimals more generally as well, through a publication called *De Thiende* ('The tenth').

EXPLORE 6.5

- Investigate whether these infinite geometric series converge or not. You could use a spreadsheet to help with the calculations. If they converge, state their sum to infinity.

a $a = \frac{3}{5}, r = -2$

b $a = 3, r = -\frac{1}{5}$

c $a = 6, r = \frac{2}{3}$

d $a = -\frac{1}{2}, r = -2$

- Find other convergent geometric series of your own. In each case, find the sum to infinity.
- Can you find a condition for r for which a geometric series is convergent?

Consider the geometric series $a + ar + ar^2 + ar^3 + \dots + ar^{n-1}$.

The sum, S_n , is given by the formula $S_n = \frac{a(1-r^n)}{1-r}$.

If $-1 < r < 1$, then as n gets larger and larger, r^n gets closer and closer to 0.

We say that as n tends to infinity, r^n tends to zero, and we write 'as $n \rightarrow \infty, r^n \rightarrow 0$ '.

Hence, as $n \rightarrow \infty, \frac{a(1-r^n)}{1-r} \rightarrow \frac{a(1-0)}{1-r} = \frac{a}{1-r}$.

This gives the result:

KEY POINT 6.12

$$S_\infty = \frac{a}{1-r} \text{ provided that } -1 < r < 1.$$

If $r \geq 1$ or $r \leq -1$, then r^n does not converge, and so the series itself does not converge. So an infinite geometric series converges when and only when $-1 < r < 1$.

WORKED EXAMPLE 6.21

The first four terms of a geometric progression are 5, 4, 3.2 and 2.56.

- Write down the common ratio.
- Find the sum to infinity.

Answer

a Common ratio = $\frac{\text{second term}}{\text{first term}} = \frac{4}{5}$

b
$$S_\infty = \frac{a}{1-r}$$

$$= \frac{5}{1 - \left(\frac{4}{5}\right)}$$

$$= 25$$

Use $a = 5$ and $r = \frac{4}{5}$.

WORKED EXAMPLE 6.22

A geometric progression has a common ratio of $-\frac{2}{3}$ and the sum of the first three terms is 63.

- Find the first term of the progression.
- Find the sum to infinity.

Answer

a
$$S_3 = \frac{a(1-r^3)}{1-r}$$

$$63 = \frac{a \left(1 - \left(-\frac{2}{3} \right)^3 \right)}{1 - \left(-\frac{2}{3} \right)}$$

Use $S_3 = 63$ and $r = -\frac{2}{3}$.

Simplify.

$$63 = \frac{a \times \frac{35}{27}}{\frac{5}{3}}$$

$$a = 81$$

$$\begin{aligned} \text{b } S_{\infty} &= \frac{a}{1-r} \\ &= \frac{81}{1 - \left(-\frac{2}{3}\right)} \\ &= 48\frac{3}{5} \end{aligned}$$

Solve.

Use $a = 81$ and $r = -\frac{2}{3}$.

EXERCISE 6E

1 Find the sum to infinity of each of the following geometric series.

a $2 + \frac{2}{3} + \frac{2}{9} + \frac{2}{27} + \dots$

b $1 + 0.1 + 0.01 + 0.001 + \dots$

c $40 - 20 + 10 - 5 + \dots$

d $-64 + 48 - 36 + 27 - \dots$

2 The first four terms of a geometric progression are 1, 0.5^2 , 0.5^4 and 0.5^6 . Find the sum to infinity.

3 The first term of a geometric progression is 8 and the second term is 6. Find the sum to infinity.

4 The first term of a geometric progression is 270 and the fourth term is 80. Find the common ratio and the sum to infinity.

5 a Write the recurring decimal $0.\dot{5}\dot{7}$ as the sum of a geometric progression.

b Use your answer to part a to show that $0.\dot{5}\dot{7}$ can be written as $\frac{19}{33}$.

6 The first term of a geometric progression is 150 and the sum to infinity is 200. Find the common ratio and the sum of the first four terms.

7 The second term of a geometric progression is 4.5 and the sum to infinity is 18. Find the common ratio and the first term.

8 Write the recurring decimal $0.315151515\dots$ as a fraction.

9 The second term of a geometric progression is 9 and the fourth term is 4. Given that the common ratio is positive, find:

a the common ratio and the first term

b the sum to infinity.

10 The third term of a geometric progression is 16 and the sixth term is $-\frac{1}{4}$.

a Find the common ratio and the first term.

b Find the sum to infinity.

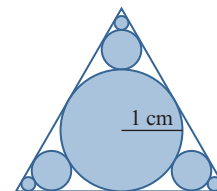
- 11 The first three terms of a geometric progression are 135, k and 60. Given that all the terms in the progression are positive, find:
- the value of k
 - the sum to infinity.
- 12 The first three terms of a geometric progression are $k + 12$, k and $k - 9$, respectively.
- Find the value of k .
 - Find the sum to infinity.
- 13 The fourth term of a geometric progression is 48 and the sum to infinity is five times the first term. Find the first term.
- 14 A geometric progression has first term a and common ratio r . The sum of the first three terms is 3.92 and the sum to infinity is 5. Find the value of a and the value of r .
- 15 The first term of a geometric progression is 1 and the second term is $2 \cos x$, where $0 < x < \frac{\pi}{2}$. Find the set of values of x for which this progression is convergent.

PS

- 16 A circle of radius 1 cm is drawn touching the three edges of an equilateral triangle.

Three smaller circles are then drawn at each corner to touch the original circle and two edges of the triangle.

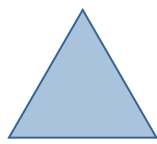
This process is then repeated an infinite number of times, as shown in the diagram.



- Find the sum of the circumferences of all the circles.
- Find the sum of the areas of all the circles.

P

17



pattern 1



pattern 2



pattern 3



pattern 4

We can construct a Koch snowflake as follows.

Starting with an equilateral triangle (pattern 1), we perform the following steps to produce pattern 2.

Step 1: Divide each line segment into three equal segments.

Step 2: Draw an equilateral triangle, pointing outwards, that has the middle segment from step 1 as its base.

Step 3: Remove the line segments that were used as the base of the equilateral triangles in step 2.

These three steps are then repeated to produce the next pattern.

- Let p_n be the perimeter of pattern n . Show that the sequence p_1, p_2, p_3, \dots tends to infinity.
- Let A_n be the area of pattern n . Show that the sequence A_1, A_2, A_3, \dots tends to $\frac{8}{5}$ times the area of the original triangle.
- The Koch snowflake is the limit of the patterns. It has infinite perimeter but an area of $\frac{8}{5}$ of the original triangle, as you have shown. This snowflake pattern is an example of a fractal. Use the internet to find out about the Sierpinski triangle fractal.

6.6 Further arithmetic and geometric series

EXPLORE 6.6

 a, b, c, \dots

- Given that a, b and c are in arithmetic progression, find an equation connecting a, b and c .
- Given that a, b and c are in geometric progression, find an equation connecting a, b and c .

WORKED EXAMPLE 6.23

The first, second and third terms of an arithmetic series are x, y and x^2 . The first, second and third terms of a geometric series are x, x^2 and y . Given that $x < 0$, find:

- the value of x and the value of y
- the sum to infinity of the geometric series
- the sum of the first 20 terms of the arithmetic series.

Answer

- a Arithmetic series is: $x + y + x^2 + \dots$ Use common differences.

$$y - x = x^2 - y$$

$$2y = x^2 + x \quad \text{----- (1)}$$

- Geometric series is: $x + x^2 + y + \dots$ Use common ratios.

$$\frac{y}{x^2} = \frac{x^2}{x}$$

$$y = x^3 \quad \text{----- (2)}$$

- (1) and (2) give $2x^3 = x^2 + x$ Divide by x (since $x \neq 0$) and rearrange.

$$2x^2 - x - 1 = 0$$

$$(2x + 1)(x - 1) = 0$$

$$x = -\frac{1}{2} \text{ or } x = 1$$

$x \neq 1$ since $x < 0$.

Hence, $x = -\frac{1}{2}$ and $y = -\frac{1}{8}$.

- b $S_\infty = \frac{a}{1-r}$ Use $a = -\frac{1}{2}$ and $r = -\frac{1}{2}$.

$$S_\infty = \frac{-\frac{1}{2}}{1 - \left(-\frac{1}{2}\right)} = -\frac{1}{3}$$

- c $S_n = \frac{n}{2} [2a + (n-1)d]$ Use $n = 20$, $a = -\frac{1}{2}$, $d = -\frac{1}{8} - \left(-\frac{1}{2}\right) = \frac{3}{8}$.

$$\begin{aligned} S_{20} &= \frac{20}{2} \left[-1 + 19 \left(\frac{3}{8} \right) \right] \\ &= 61.25 \end{aligned}$$

i DID YOU KNOW?

Georg Cantor (1845–1918) was a German mathematician who is famous for his work on set theory and for formalising many ideas about infinity. He developed the theory that there are infinite sets of different sizes. He showed that the set of natural numbers (1, 2, 3, ...) and the set of rational numbers (all fractions) are actually the same size, whereas the set of real numbers is actually larger than either of them.

EXERCISE 6F

- The first term of a progression is 16 and the second term is 24. Find the sum of the first eight terms given that the progression is:
 - arithmetic
 - geometric
- The first term of a progression is 20 and the second term is 16.
 - Given that the progression is geometric, find the sum to infinity.
 - Given that the progression is arithmetic, find the number of terms in the progression if the sum of all the terms is -160 .
- The first, second and third terms of a geometric progression are the first, fourth and tenth terms, respectively, of an arithmetic progression. Given that the first term in each progression is 12 and the common ratio of the geometric progression is r , where $r \neq 1$, find:
 - the value of r
 - the sixth term of each progression.
- A geometric progression has eight terms. The first term is 256 and the common ratio is $\frac{1}{2}$.
An arithmetic progression has 51 terms and common difference $\frac{1}{2}$.
The sum of all the terms in the geometric progression is equal to the sum of all the terms in the arithmetic progression. Find the first term and the last term in the arithmetic progression.
- The first, second and third terms of a geometric progression are the first, sixth and ninth terms, respectively, of an arithmetic progression. Given that the first term in each progression is 100 and the common ratio of the geometric progression is r , where $r \neq 1$, find:
 - the value of r
 - the fifth term of each progression.
- The first term of an arithmetic progression is 16 and the sum of the first 20 terms is 1080.
 - Find the common difference of this progression.
The first, third and n th terms of this arithmetic progression are the first, second and third terms, respectively, of a geometric progression.
 - Find the common ratio of the geometric progression and the value of n .
- The first term of a progression is $2x$ and the second term is x^2 .
 - For the case where the progression is arithmetic with a common difference of 15, find the two possible values of x and corresponding values of the third term.
 - For the case where the progression is geometric with a third term of $-\frac{1}{16}$, find the sum to infinity.

Checklist of learning and understanding

Binomial expansions

Binomial coefficients, denoted by nC_r or $\binom{n}{r}$, can be found using:

- Pascal's triangle
- the formulae $\binom{n}{r} = \frac{n!}{r!(n-r)!}$ or $\binom{n}{r} = \frac{n \times (n-1) \times (n-2) \times \dots \times (n-r+1)}{r \times (r-1) \times (r-2) \times \dots \times 3 \times 2 \times 1}$.

If n is a positive integer, the Binomial theorem states that:

$$(1+x)^n = \binom{n}{0} + \binom{n}{1}x + \binom{n}{2}x^2 + \dots + \binom{n}{r}x^r, \text{ where the } (r+1)\text{th term} = \binom{n}{r}x^r.$$

We can extend this rule to give:

$$(a+b)^n = \binom{n}{0}a^n + \binom{n}{1}a^{n-1}b + \binom{n}{2}a^{n-2}b^2 + \dots + \binom{n}{r}a^{n-r}b^r.$$

We can also write the expansion of $(1+x)^n$ as:

$$(1+x)^n = 1 + nx + \frac{n(n-1)}{2!}x^2 + \frac{n(n-1)(n-2)}{3!}x^3 + \dots + x^n$$

Arithmetic series

For an arithmetic progression with first term a , common difference d and n terms:

- the k th term is $a + (k-1)d$
- the last term is $l = a + (n-1)d$
- the sum of the terms is $S_n = \frac{n}{2}(a+l) = \frac{n}{2}[2a + (n-1)d]$.

Geometric series

For a geometric progression with first term a , common ratio r and n terms:

- the k th term is ar^{k-1}
- the last term is ar^{n-1}
- sum of the terms is $S_n = \frac{a(1-r^n)}{1-r} = \frac{a(r^n-1)}{r-1}$.

The condition for an infinite geometric series to converge is $-1 < r < 1$.

When an infinite geometric series converges, $S_\infty = \frac{a}{1-r}$.

END-OF-CHAPTER REVIEW EXERCISE 6

- 1 Find the coefficient of x^2 in the expansion of $\left(2x + \frac{3}{x^2}\right)^5$. [3]
- 2 In the expansion of $(a + 2x)^6$, the coefficient of x is equal to the coefficient of x^2 . Find the value of the constant a . [3]
- 3 In the expansion of $\left(1 - \frac{x}{a}\right)(5 + x)^6$, the coefficient of x^2 is zero. Find the value of a . [3]
- 4 Find the term independent of x in the expansion of $\left(3x - \frac{2}{5x}\right)^6$. [3]
- 5 In the expansion of $(2 + ax)^7$, where a is a constant, the coefficient of x is -2240 . Find the coefficient of x^2 . [4]
- 6 Find the coefficient of x^5 in the expansion of $\left(x^3 + \frac{2}{x^2}\right)^5$. [4]
- 7 Find the term independent of x in the expansion of $\left(3x^2 - \frac{1}{2x^3}\right)^5$. [4]
- 8 a Find the first three terms in the expansion of $(x - 3x^2)^8$, in descending powers of x . [3]
 b Find the coefficient of x^{15} in the expansion of $(1 - x)(x - 3x^2)^8$. [2]
- 9 a Find the first three terms in the expansion of $(1 + px)^8$, in ascending powers of x . [3]
 b Given that the coefficient of x^2 in the expansion of $(1 - 2x)(1 + px)^8$ is 204, find the possible values of p . [4]
- 10 a Find the first three terms, in ascending powers of x , in the expansion of:
 i $(1 + 2x)^5$ [2]
 ii $(3 - x)^5$ [2]
 b Find the coefficient of x^2 in the expansion of $[(1 + 2x)(3 - x)]^5$. [3]
- 11 The first term of an arithmetic progression is 1.75 and the second term is 1.5. The sum of the first n terms is $-n$. Find the value of n . [4]
- 12 The second term of a geometric progression is -1458 and the fifth term is 432. Find:
 a the common ratio [3]
 b the first term [1]
 c the sum to infinity. [2]
- 13 An arithmetic progression has first term a and common difference d . The sum of the first 100 terms is 25 times the sum of the first 20 terms.
 a Find d in terms of a . [3]
 b Write down an expression, in terms of a , for the 50th term. [2]
- 14 The tenth term of an arithmetic progression is 17 and the sum of the first five terms is 190.
 a Find the first term of the progression and the common difference. [4]
 b Given that the n th term of the progression is -19 , find the value of n . [2]

- 15 a The fifth term of an arithmetic progression is 18 and the sum of the first eight terms is 186. Find the first term and the common difference. [4]
- b The first term of a geometric progression is 32 and the fourth term is $\frac{1}{2}$. Find the sum to infinity of the progression. [3]
- 16 a The seventh term of an arithmetic progression is 19 and the sum of the first twelve terms is 224. Find the fourth term. [4]
- b A geometric progression has first term 3 and common ratio r . A second geometric progression has first term 2 and common ratio $\frac{1}{5}r$. The two progressions have the same sum to infinity, S . Find the value of r and the value of S . [3]
- 17 a A geometric progression has first term a , common ratio r and sum to infinity S . A second geometric progression has first term $5a$, common ratio $3r$ and sum to infinity $10S$. Find the value of r . [3]
- b An arithmetic progression has first term -4 . The n th term is 8 and the $(2n)$ th term is 20.8. Find the value of n . [4]



- 18 A television quiz show takes place every day. On day 1 the prize money is \$1000. If this is not won the prize money is increased for day 2. The prize money is increased in a similar way every day until it is won. The television company considered the following two different models for increasing the prize money.

Model 1: Increase the prize money by \$1000 each day.

Model 2: Increase the prize money by 10% each day.

On each day that the prize money is not won the television company makes a donation to charity. The amount donated is 5% of the value of the prize on that day. After 40 days the prize money has still not been won. Calculate the total amount donated to charity

- i if Model 1 is used, [4]
- ii if Model 2 is used. [3]

Cambridge International AS & A Level Mathematics 9709 Paper 11 Q8 June 2011




- 19 a The first two terms of an arithmetic progression are 1 and $\cos^2 x$ respectively. Show that the sum of the first ten terms can be expressed in the form $a - b \sin^2 x$, where a and b are constants to be found. [3]
- b The first two terms of a geometric progression are 1 and $\frac{1}{3} \tan^2 \theta$ respectively, where $0 < \theta < \frac{1}{2}\pi$.
- i Find the set of values of θ for which the progression is convergent. [2]
- ii Find the exact value of the sum to infinity when $\theta = \frac{1}{6}\pi$. [2]

Cambridge International AS & A Level Mathematics 9709 Paper 11 Q7 June 2012




- 20 The first term of a progression is $4x$ and the second term is x^2 .
- i For the case where the progression is arithmetic with a common difference of 12, find the possible values of x and the corresponding values of the third term. [4]
- ii For the case where the progression is geometric with a sum to infinity of 8, find the third term. [4]

Cambridge International AS & A Level Mathematics 9709 Paper 11 Q8 November 2015

-  21 a The third and fourth terms of a geometric progression are $\frac{1}{3}$ and $\frac{2}{9}$ respectively. Find the sum to infinity of the progression. [4]
- b A circle is divided into 5 sectors in such a way that the angles of the sectors are in arithmetic progression. Given that the angle of the largest sector is 4 times the angle of the smallest sector, find the angle of the largest sector. [4]

Cambridge International AS & A Level Mathematics 9709 Paper 11 Q7 June 2015


-  22 a In an arithmetic progression the sum of the first ten terms is 400 and the sum of the next ten terms is 1000. Find the common difference and the first term. [5]
- b A geometric progression has first term a , common ratio r and sum to infinity 6. A second geometric progression has first term $2a$, common ratio r^2 and sum to infinity 7. Find the values of a and r . [5]

Cambridge International AS & A Level Mathematics 9709 Paper 11 Q9 November 2013

CROSS-TOPIC REVIEW EXERCISE 2

- 1 Find the highest power of x in the expansion of $[(5x^4 + 3)^8 + (1 - 3x^3)^5(4x^2 - 5x^5)^6]^4$. [2]
- 2 Find the term independent of x in the expansion of $\left(4x - \frac{1}{x^2}\right)^6$. [3]
- 3 a Find the first three terms in the expansion of $\left(3x - \frac{2}{x^2}\right)^6$, in descending powers of x . [3]
 b Hence, find the coefficient of x^2 in the expansion of $\left(1 + \frac{2}{x}\right)\left(3x - \frac{2}{x}\right)^6$. [2]
- 4 a Find the first three terms when $(1 - 2x)^5$ is expanded, in ascending powers of x . [3]
 b In the expansion of $(3 + ax)(1 - 2x)^5$, the coefficient of x^2 is zero.
 Find the value of a . [2]
- 5 The first term of a geometric progression is 50 and the second term is -40 .
 a Find the fourth term. [3]
 b Find the sum to infinity. [2]
- 6 The first three terms of a geometric progression are $3k + 14$, $k + 14$ and k , respectively.
 All the terms in the progression are positive.
 a Find the value of k . [3]
 b Find the sum to infinity. [2]
- 7 The sum of the 1st and 2nd terms of a geometric progression is 50 and the sum of the 2nd and 3rd terms is 30. Find the sum to infinity. [6]
Cambridge International AS & A Level Mathematics 9709 Paper 11 Q5 November 2016
- 8 i Show that $\cos^4 x \equiv 1 - 2\sin^2 x + \sin^4 x$. [1]
 ii Hence, or otherwise, solve the equation $8\sin^4 x + \cos^4 x = 2\cos^2 x$ for $0^\circ \leq x \leq 360^\circ$. [5]
Cambridge International AS & A Level Mathematics 9709 Paper 11 Q6 November 2016
- 9 A sector of a circle, radius r cm, has a perimeter of 60 cm.
 a Show that the area, A cm², of the sector is given by $A = 30r - r^2$. [2]
 b Express $30r - r^2$ in the form $a - (r - b)^2$, where a and b are constants. [2]
 Given that r can vary:
 c find the value of r at which A is a maximum [1]
 d find this stationary value of A . [1]

10



The diagram shows a metal plate consisting of a rectangle with sides x cm and r cm and two identical sectors of a circle of radius r cm. The perimeter of the plate is 100 cm.

a Show that the area, A cm², of the plate is given by $A = 50r - r^2$. [2]

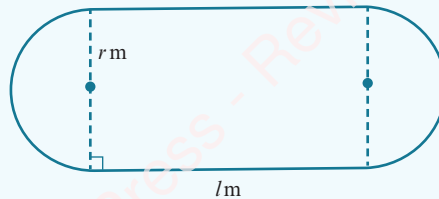
b Express $50r - r^2$ in the form $a - (r - b)^2$, where a and b are constants. [2]

Given that r can vary:

c find the value of r at which A is a maximum [1]

d find this stationary value of A . [1]

11



The diagram shows a running track. The track has a perimeter of 400 m and consists of two straight sections of length l m and two semicircular sections of radius r m.

a Show that the area, A m², of the region enclosed by the track is given by $A = 400r - \pi r^2$. [2]

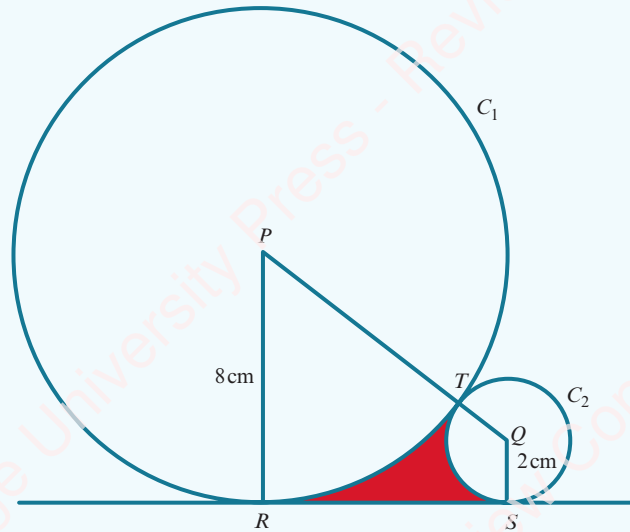
b Express $400r - \pi r^2$ in the form $\frac{a}{\pi} - \pi \left(r - \frac{b}{\pi} \right)^2$, where a and b are constants. [3]

Given that l and r can vary:

c show that A has a maximum value when $l = 0$ [2]

d find this stationary value of A . [1]

12



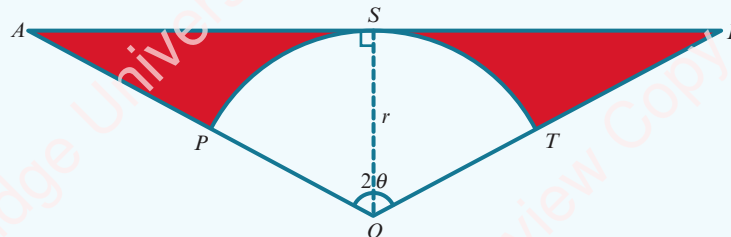
The diagram shows two circles, C_1 and C_2 , touching at the point T . Circle C_1 has centre P and radius 8 cm; circle C_2 has centre Q and radius 2 cm. Points R and S lie on C_1 and C_2 respectively, and RS is a tangent to both circles.

- i Show that $RS = 8$ cm. [2]
- ii Find angle RPQ in radians correct to 4 significant figures. [2]
- iii Find the area of the shaded region. [4]

188

Cambridge International AS & A Level Mathematics 9709 Paper 11 Q9 November 2010

13



In the diagram, OAB is an isosceles triangle with $OA = OB$ and angle $AOB = 2\theta$ radians. Arc PST has centre O and radius r , and the line ASB is a tangent to the arc PST at S .

- i Find the total area of the shaded regions in terms of r and θ . [4]
- ii In the case where $\theta = \frac{1}{3}\pi$ and $r = 6$, find the total perimeter of the shaded regions, leaving your answer in terms of $\sqrt{3}$ and π . [5]


Cambridge International AS & A Level Mathematics 9709 Paper 11 Q9 June 2011

14


The function f is such that $f(x) = 2\sin^2 x - 3\cos^2 x$ for $0 \leq x \leq \pi$.

- i Express $f(x)$ in the form $a + b\cos^2 x$, stating the values of a and b . [2]
- ii State the greatest and least values of $f(x)$. [2]
- iii Solve the equation $f(x) + 1 = 0$. [3]


Cambridge International AS & A Level Mathematics 9709 Paper 11 Q5 June 2010

-  **15** i Prove the identity $\frac{\sin \theta}{1 - \cos \theta} - \frac{1}{\sin \theta} \equiv \frac{1}{\tan \theta}$. [4]
- ii Hence solve the equation $\frac{\sin \theta}{1 - \cos \theta} - \frac{1}{\sin \theta} = 4 \tan \theta$ for $0^\circ < \theta < 180^\circ$. [3]

Cambridge International AS & A Level Mathematics 9709 Paper 11 Q9 June 2014

-  **16** The function f is defined by $f : x \mapsto 4 \sin x - 1$ for $-\frac{1}{2}\pi \leq x \leq \frac{1}{2}\pi$.
- i State the range of f . [2]
- ii Find the coordinates of the points at which the curve $y = f(x)$ intersects the coordinate axes. [3]
- iii Sketch the graph of $y = f(x)$. [2]
- iv Obtain an expression for $f^{-1}(x)$, stating both the domain and range of f^{-1} . [4]

Cambridge International AS & A Level Mathematics 9709 Paper 11 Q11 June 2016

-  **17** a The first term of a geometric progression in which all the terms are positive is 50. The third term is 32. Find the sum to infinity of the progression. [3]
- b The first three terms of an arithmetic progression are $2 \sin x$, $3 \cos x$ and $(\sin x + 2 \cos x)$ respectively, where x is an acute angle.
- i Show that $\tan x = \frac{4}{3}$. [3]
- ii Find the sum of the first twenty terms of the progression. [3]

Cambridge International AS & A Level Mathematics 9709 Paper 11 Q9 June 2016

Chapter 7

Differentiation

In this chapter you will learn how to:

- understand that the gradient of a curve at a point is the limit of the gradients of a suitable sequence of chords
- use the notations $f'(x)$, $f''(x)$, $\frac{dy}{dx}$ and $\frac{d^2y}{dx^2}$ for the first and second derivatives
- use the derivative of x^n (for any rational n), together with constant multiples, sums, differences of functions, and of composite functions using the chain rule
- apply differentiation to gradients, tangents and normals.

PREREQUISITE KNOWLEDGE

Where it comes from	What you should be able to do	Check your skills
IGCSE / O Level Mathematics	Use the rules of indices to simplify expressions to the form ax^n .	1 Write in the form ax^n : a $3x\sqrt{x}$ b $5\sqrt[3]{x^2}$ c $\frac{x}{2\sqrt{x}}$ d $\frac{1}{2x}$ e $\frac{3}{x^2}$ f $\frac{2x^2}{5\sqrt[3]{x}}$
IGCSE / O Level Mathematics	Write $\frac{k}{(ax+b)^n}$ in the form $k(ax+b)^{-n}$.	2 Write in the form $k(ax+b)^{-n}$: a $\frac{4}{(x-2)^3}$ b $\frac{2}{(3x+1)^5}$
Chapter 3	Find the gradient of a perpendicular line.	3 The gradient of a line is $\frac{2}{3}$. Write down the gradient of a line that is perpendicular to it.
Chapter 3	Find the equation of a line with a given gradient and a given point on the line.	4 Find the equation of the line with gradient 2 that passes through the point (2, 5).

Why do we study differentiation?

Calculus is the mathematical study of change. Calculus has two basic tools, differentiation and integration, and it has widespread uses in science, medicine, engineering and economics. A few examples where calculus is used are:

- designing effective aircraft wings
- the study of radioactive decay
- the study of population change
- modelling the financial world.

In this chapter you will be studying the first of the two basic tools of calculus. You will learn the rules of differentiation and how to apply these to problems involving gradients, tangents and normals. In Chapter 8 you will then learn how to apply these rules of differentiation to more practical problems.

7.1 Derivatives and gradient functions

At IGCSE / O Level you learnt how to estimate the gradient of a curve at a point by drawing a suitable tangent and then calculating the gradient of the tangent. This method only gives an approximate answer (because of the inaccuracy of drawing the tangent) and it is also very time consuming.

In this chapter you will learn a method for finding the exact gradient of the graph of a function (which does not involve drawing the graph). This exact method is called **differentiation**.



WEB LINK

Try the *Calculus* resources on the Underground Mathematics website.

EXPLORE 7.1

Consider the quadratic function $y = x^2$ and a point $P(x, x^2)$ on the curve.

- 1 Let P be the point $(2, 4)$.

The points $A(2.2, 4.84)$, $B(2.1, 4.41)$ and $C(2.01, 4.0401)$ also lie on the curve and are close to the point $P(2, 4)$.

- a Calculate the gradient of:

- the chord PA
- the chord PB
- the chord PC .

- b Discuss your results with those of your classmates and make suggestions as to what is happening.

- c Suggest a value for the gradient of the curve $y = x^2$ at the point $(2, 4)$.

- 2 Let P be the point $(3, 9)$.

The points $A(3.2, 10.24)$, $B(3.1, 9.61)$ and $C(3.01, 9.0601)$ also lie on the curve and are close to the point $P(3, 9)$.

- a Calculate the gradient of:

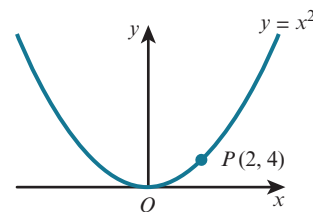
- the chord PA
- the chord PB
- the chord PC .

- b Discuss your results with those of your classmates and make suggestions as to what is happening.

- c Suggest a value for the gradient of the curve $y = x^2$ at the point $(3, 9)$.

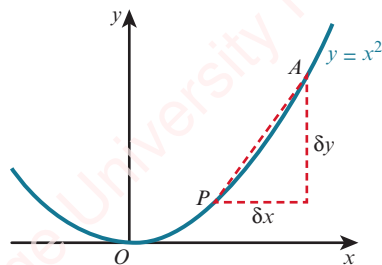
- 3 Use a spreadsheet to investigate the value of the gradient at other points on the curve $y = x^2$.

- 4 Can you suggest a general formula for the gradient of the curve $y = x^2$ at the point (a, a^2) ?
What would be the gradient at (x, x^2) ?



The general formula for the gradient of the curve $y = x^2$ at the point (x, x^2) can be proved algebraically.

Take a point $P(x, y)$ on the curve $y = x^2$ and a point A that is close to the point P .



The coordinates of A are $(x + \delta x, y + \delta y)$, where δx is a small increase in the value of x and δy is the corresponding small increase in the value of y .



WEB LINK

There are other ways of thinking about the gradient of a curve. Try the following resources on the Underground Mathematics website *Zooming in* and *Mapping a derivative*.

We can also write the coordinates of P and A as (x, x^2) and $(x + \delta x, (x + \delta x)^2)$.

$$\begin{aligned} \text{Gradient of chord } PA &= \frac{y_2 - y_1}{x_2 - x_1} \\ &= \frac{(x + \delta x)^2 - x^2}{(x + \delta x) - x} \\ &= \frac{x^2 + 2x\delta x + (\delta x)^2 - x^2}{\delta x} \\ &= \frac{2x\delta x + (\delta x)^2}{\delta x} \\ &= 2x + \delta x \end{aligned}$$

As δx tends towards 0, A tends to P and the gradient of the chord PA tends to a value. We call this value the gradient of the curve at P .

In this case, therefore, the gradient of the curve at P is $2x$.

This process of finding the gradient of a curve at any point is called differentiation.

Later in this chapter, you will learn some rules for differentiating functions without having to calculate the gradients of chords as we have done here. The process of calculating gradients using the limit of gradients of chords is sometimes called **differentiation from first principles**.

Notation

There are three different notations that are used to describe the previous rule.

1. If $y = x^2$, then $\frac{dy}{dx} = 2x$.
2. If $f(x) = x^2$, then $f'(x) = 2x$.
3. $\frac{d}{dx}(x^2) = 2x$

If y is a function of x , then $\frac{dy}{dx}$ is called the **derivative** of y with respect to x .

Likewise $f'(x)$ is called the derivative of $f(x)$.

If $y = f(x)$ is the graph of a function, then $\frac{dy}{dx}$ or $f'(x)$ is sometimes also called the **gradient function** of this curve.

$\frac{d}{dx}(x^2) = 2x$ means 'if we differentiate x^2 with respect to x , the result is $2x$ '.

You do not need to be able to differentiate from first principles but you are expected to understand that the gradient of a curve at a point is the limit of a suitable sequence of chords.

EXPLORE 7.2

- 1 Use a spreadsheet to investigate the gradient of the curve $y = x^3$.
- 2 Can you suggest a general formula for the gradient of the curve $y = x^3$ at the point (x, x^3) ?
- 3 Differentiate $y = x^3$ from first principles to confirm your answer to question 2.



TIP

We use the Greek symbol delta, δ , to denote a very small change in a quantity.



DID YOU KNOW?

Gottfried Wilhelm Leibniz and Isaac Newton are both credited with developing the modern calculus that we use today. Leibniz's notation for derivatives was $\frac{dy}{dx}$. Newton's notation for $\frac{dy}{dx}$ was \dot{y} . The notation $f'(x)$ is known as Lagrange's notation.

Differentiation of power functions

We now know that $\frac{d}{dx}(x^2) = 2x$ and that $\frac{d}{dx}(x^3) = 3x^2$.

Investigating the gradient of the curves $y = x^4$, $y = x^5$ and $y = x^6$ would give the results:

$$\frac{d}{dx}(x^4) = 4x^3 \quad \frac{d}{dx}(x^5) = 5x^4 \quad \frac{d}{dx}(x^6) = 6x^5$$

This leads to the general rule for differentiating power functions:

KEY POINT 7.1

$$\frac{d}{dx}(x^n) = nx^{n-1}$$

This is true for any real power n , not only for positive integer values of n .

You may find it easier to remember this rule as:

‘Multiply by the power n and then subtract one from the power.’

So for the earlier example where $y = x^2$:

$$\begin{aligned} \frac{dy}{dx} &= 2 \times x^{2-1} \\ &= 2x^1 \\ &= 2x \end{aligned}$$

WORKED EXAMPLE 7.1

Find the derivative of each of the following.

a x^7 b $\frac{1}{x^2}$ c $f(x) = \sqrt{x}$ d $y = 2$

Answer

a $\frac{d}{dx}(x^7) = 7x^{7-1}$ Multiply by the power 7 and then subtract one from the power.
 $= 7x^6$

b $\frac{d}{dx}\left(\frac{1}{x^2}\right) = \frac{d}{dx}(x^{-2})$ Write $\frac{1}{x^2}$ as x^{-2} .

$= -2x^{-2-1}$ Multiply by the power -2 and then subtract one from the power.
 $= -2x^{-3}$

$= -\frac{2}{x^3}$

c $f(x) = \sqrt{x}$ Write \sqrt{x} as $x^{\frac{1}{2}}$.

$f(x) = x^{\frac{1}{2}}$ Multiply by the power $\frac{1}{2}$ and then subtract one from the power.
 $f'(x) = \frac{1}{2}x^{\frac{1}{2}-1}$

$= \frac{1}{2}x^{-\frac{1}{2}}$

$= \frac{1}{2\sqrt{x}}$

d $y = 2$ Write 2 as $2x^0$.

$y = 2x^0$ Multiply by the power and then subtract one from the power.

$$\frac{dy}{dx} = 0x^{0-1}$$

$$= 0$$

**TIP**

It is worth remembering that when you differentiate a constant, the answer is always 0.

You need to know and be able to use the following two rules.

Scalar multiple rule

If k is a constant and $f(x)$ is a function then:

KEY POINT 7.2

$$\frac{d}{dx} [kf(x)] = k \frac{d}{dx} [f(x)]$$

Addition/subtraction rule

If $f(x)$ and $g(x)$ are functions then

KEY POINT 7.3

$$\frac{d}{dx} [f(x) \pm g(x)] = \frac{d}{dx} [f(x)] \pm \frac{d}{dx} [g(x)]$$

WORKED EXAMPLE 7.2

Differentiate $3x^4 - \frac{1}{2x^2} + \frac{4}{\sqrt{x}} + 5$ with respect to x .

Answer

$$\begin{aligned} \frac{d}{dx} \left(3x^4 - \frac{1}{2x^2} + \frac{4}{\sqrt{x}} + 5 \right) &= \frac{d}{dx} \left(3x^4 - \frac{1}{2}x^{-2} + 4x^{-\frac{1}{2}} + 5x^0 \right) \\ &= 3 \frac{d}{dx} (x^4) - \frac{1}{2} \frac{d}{dx} (x^{-2}) + 4 \frac{d}{dx} \left(x^{-\frac{1}{2}} \right) + 5 \frac{d}{dx} (x^0) \\ &= 3(4x^3) - \frac{1}{2}(-2x^{-3}) + 4 \left(-\frac{1}{2}x^{-\frac{3}{2}} \right) + 5(0x^{-1}) \\ &= 12x^3 + x^{-3} - 2x^{-\frac{3}{2}} \\ &= 12x^3 + \frac{1}{x^3} - \frac{2}{\sqrt{x^3}} \end{aligned}$$

WORKED EXAMPLE 7.3

Find the gradient of the tangent to the curve $y = x(2x - 1)(x + 3)$ at the point (1, 4).

Answer

$$y = x(2x - 1)(x + 3)$$

$$y = 2x^3 + 5x^2 - 3x$$

$$\frac{dy}{dx} = 6x^2 + 10x - 3$$

$$\begin{aligned} \text{When } x = 1, \frac{dy}{dx} &= 6(1)^2 + 10(1) - 3 \\ &= 13 \end{aligned}$$

Gradient of curve at (1, 4) is 13.

Expand brackets and simplify.

WORKED EXAMPLE 7.4

The curve $y = ax^4 + bx^2 + x$ has gradient 3 when $x = 1$ and gradient -51 when $x = -2$.

Find the value of a and the value of b .

Answer

$$y = ax^4 + bx^2 + x$$

$$\frac{dy}{dx} = 4ax^3 + 2bx + 1$$

Since $\frac{dy}{dx} = 3$ when $x = 1$:

$$\begin{aligned} 4a(1)^3 + 2b(1) + 1 &= 3 \\ 4a + 2b &= 2 \\ 2a + b &= 1 \text{ ----- (1)} \end{aligned}$$

Since $\frac{dy}{dx} = -51$ when $x = -2$:

$$\begin{aligned} 4a(-2)^3 + 2b(-2) + 1 &= -51 \\ -32a - 4b &= -52 \\ 8a + b &= 13 \text{ ----- (2)} \end{aligned}$$

(2) - (1) gives $6a = 12$

$$\therefore a = 2$$

Substitute $a = 2$ into (1): $4 + b = 1$

$$\therefore b = -3$$

EXERCISE 7A

- 1 The points $A(0, 0)$, $B(0.5, 0.75)$, $C(0.8, 1.44)$, $D(0.95, 1.8525)$, $E(0.99, 1.9701)$ and $F(1, 2)$ lie on the curve $y = f(x)$.

- a Copy and complete the table to show the gradients of the chords CF , DF and EF .

Chord	AF	BF	CF	DF	EF
Gradient	2	2.5			

- b Use the values in the table to predict the value of $\frac{dy}{dx}$ when $x = 1$.
- 2 By considering the gradient of a suitable sequence of chords, find a value for the gradient of the curve at the given point.

a $y = x^4$ at $(1, 1)$

b $y = x^2 - 2x + 3$ at $(0, 3)$

c $y = 2\sqrt{x}$ at $(4, 4)$

d $y = \frac{12}{x}$ at $(2, 6)$

- 3 Differentiate with respect to x :

a x^5

b x^9

c x^{-4}

d $\frac{1}{x}$

e 8

f $\sqrt[3]{x^2}$

g $x^3 \times x^2$

h $\frac{x^5}{x^2}$

- 4 Find $f'(x)$ for each of the following.

a $f(x) = 2x^4$

b $f(x) = 3x^5$

c $f(x) = \frac{x^6}{2}$

d $f(x) = \frac{3}{x}$

e $f(x) = \frac{5}{3x^2}$

f $f(x) = -2$

g $f(x) = \frac{4x}{\sqrt{x}}$

h $f(x) = \frac{2x\sqrt{x}}{3x^3}$

- 5 Find $\frac{dy}{dx}$ for each of the following.

a $y = 5x^2 - x + 1$

b $y = 2x^3 + 8x - 4$

c $y = 7 - 3x + 5x^2$

d $y = (x + 5)(x - 4)$

e $y = (2x^2 - 3)^2$

f $y = \frac{2x - 5}{x^2}$

g $y = 7x^2 - \frac{3}{x} + \frac{2}{x^2}$

h $y = 3x + \frac{5}{x} - \frac{1}{2\sqrt{x}}$

i $y = \frac{4x^2 + 3x - 2}{\sqrt{x}}$

- 6 Find the value of $\frac{dy}{dx}$ for each curve at the given point.

a $y = x^2 + x - 4$ at the point $(1, -2)$

b $y = 5 - \frac{2}{x}$ at the point $(2, 4)$

c $y = \frac{3x - 2}{x^2}$ at the point $(-2, -2)$

- 7 Find the gradient of the curve $y = (2x - 5)(x + 4)$ at the point $(3, 7)$.

- 8 Given that $xy = 12$, find the value of $\frac{dy}{dx}$ when $x = 2$.

- 9 Find the gradient of the curve $y = 5x^2 - 8x + 3$ at the point where the curve crosses the y -axis.

- 10 Find the coordinates of the points on the curve $y = x^3 - 3x - 8$ where the gradient is 9.
- 11 Find the gradient of the curve $y = \frac{5x - 10}{x^2}$ at the point where the curve crosses the x -axis.
- 12 The curve $y = x^2 - 4x - 5$ and the line $y = 1 - 3x$ meet at the points A and B .
- Find the coordinates of the points A and B .
 - Find the gradient of the curve at each of the points A and B .
- 13 The gradient of the curve $y = ax^2 + bx$ at the point $(3, -3)$ is 5. Find the value of a and the value of b .
- 14 The gradient of the curve $y = x^3 + ax^2 + bx + 7$ at the point $(1, 5)$ is -5 . Find the value of a and the value of b .
- 15 The curve $y = ax + \frac{b}{x^2}$ has gradient 16 when $x = 1$ and gradient -8 when $x = -1$. Find the value of a and the value of b .
- 16 Given that the gradient of the curve $y = x^3 + ax^2 + bx + 3$ is zero when $x = 1$ and when $x = 6$, find the value of a and the value of b .
- 17 Given that $y = 2x^3 - 3x^2 - 36x + 5$, find the range of values of x for which $\frac{dy}{dx} < 0$.
- 18 Given that $y = 4x^3 + 3x^2 - 6x - 9$, find the range of values of x for which $\frac{dy}{dx} \geq 0$.
- 19 A curve has equation $y = 3x^3 + 6x^2 + 4x - 5$. Show that the gradient of the curve is never negative.

**WEB LINK**

Try the following resources on the Underground Mathematics website:

- *Slippery slopes*
- *Gradient match.*

7.2 The chain rule

To differentiate $y = (3x - 2)^7$, we could expand the brackets and then differentiate each term separately. This would take a long time to do. There is a more efficient method available that allows us to find the derivative without expanding.

Let $u = 3x - 2$, then $y = (3x - 2)^7$ becomes $y = u^7$.

This means that y has changed from a function in terms of x to a function in terms of u .

We can find the derivative of the composite function $y = (3x - 2)^7$ using the **chain rule**:

**KEY POINT 7.4**

$$\frac{dy}{dx} = \frac{dy}{du} \times \frac{du}{dx}$$

**WEB LINK**

Try the *Chain mapping* resource on the Underground Mathematics website.

WORKED EXAMPLE 7.5

Find the derivative of $y = (3x - 2)^7$.

Answer

$$y = (3x - 2)^7$$

Let $u = 3x - 2$ so $y = u^7$

$$\frac{du}{dx} = 3 \quad \text{and} \quad \frac{dy}{du} = 7u^6$$

$$\frac{dy}{dx} = \frac{dy}{du} \times \frac{du}{dx}$$

$$= 7u^6 \times 3$$

$$= 7(3x - 2)^6 \times 3$$

$$= 21(3x - 2)^6$$

Use the chain rule.

With practice you will be able to do this mentally.

Consider the ‘inside’ of $(3x - 2)^7$ to be $3x - 2$.

To differentiate $(3x - 2)^7$:

Step 1: Differentiate the ‘outside’: $7(3x - 2)^6$

Step 2: Differentiate the ‘inside’: 3

Step 3: Multiply these two expressions: $21(3x - 2)^6$

WORKED EXAMPLE 7.6

Find the derivative of $y = \frac{2}{(3x^2 + 1)^5}$.

Answer

$$y = \frac{2}{(3x^2 + 1)^5}$$

Let $u = 3x^2 + 1$ so $y = 2u^{-5}$

$$\frac{du}{dx} = 6x \quad \text{and} \quad \frac{dy}{du} = -10u^{-6}$$

$$\frac{dy}{dx} = \frac{dy}{du} \times \frac{du}{dx}$$

$$= -10u^{-6} \times 6x$$

$$= -10(3x^2 + 1)^{-6} \times 6x$$

$$= -\frac{60x}{(3x^2 + 1)^6}$$

Use the chain rule.

Alternatively, to differentiate the expression mentally:

Write $\frac{2}{(3x^2 + 1)^5}$ as $2(3x^2 + 1)^{-5}$.

Step 1: Differentiate the 'outside': $-10(3x^2 + 1)^{-6}$

Step 2: Differentiate the 'inside': $6x$

Step 3: Multiply the two expressions: $-60x(3x^2 + 1)^{-6} = -\frac{60x}{(3x^2 + 1)^6}$

WORKED EXAMPLE 7.7

The curve $y = \sqrt{ax + b}$ passes through the point (12, 4) and has gradient $\frac{1}{4}$ at this point.

Find the value of a and the value of b .

Answer

$$y = \sqrt{ax + b}$$

Substitute $x = 12$ and $y = 4$.

$$4 = \sqrt{12a + b} \quad \text{--- (1)}$$

$$y = (ax + b)^{\frac{1}{2}}$$

Write $\sqrt{ax + b}$ in the form $(ax + b)^{\frac{1}{2}}$.

$$\text{Let } u = ax + b$$

so

$$y = u^{\frac{1}{2}}$$

$$\frac{du}{dx} = a$$

and

$$\frac{dy}{du} = \frac{1}{2} u^{-\frac{1}{2}}$$

$$\frac{dy}{dx} = \frac{dy}{du} \times \frac{du}{dx}$$

Use the chain rule.

$$= \frac{1}{2} u^{-\frac{1}{2}} \times a$$

$$\frac{dy}{dx} = \frac{a}{2\sqrt{ax + b}}$$

Substitute $x = 12$ and $\frac{dy}{dx} = \frac{1}{4}$.

$$\frac{1}{4} = \frac{a}{2\sqrt{12a + b}}$$

$$2a = \sqrt{12a + b} \quad \text{--- (2)}$$

(1) and (2) give $2a = 4$

$$a = 2$$

Substituting $a = 2$ into (1) gives:

$$4 = \sqrt{24 + b}$$

$$16 = 24 + b$$

$$b = -8$$

$$\therefore a = 2, \quad b = -8$$

EXERCISE 7B

1 Differentiate with respect to x :

a $(x + 4)^6$

b $(2x + 3)^8$

c $(3 - 4x)^5$

d $\left(\frac{1}{2}x + 1\right)^9$

e $\frac{(5x - 2)^8}{4}$

f $5(2x - 1)^5$

g $2(4 - 7x)^4$

h $\frac{1}{5}(3x - 1)^7$

i $(x^2 + 3)^5$

j $(2 - x^2)^8$

k $(x^2 + 4x)^3$

l $\left(x^2 - \frac{5}{x}\right)^5$

2 Differentiate with respect to x :

a $\frac{1}{x + 2}$

b $\frac{3}{x - 5}$

c $\frac{8}{3 - 2x}$

d $\frac{16}{x^2 + 2}$

e $\frac{4}{(3x + 1)^6}$

f $\frac{3}{2(3x + 1)^5}$

g $\frac{8}{x^2 + 2x}$

h $\frac{7}{(2x^2 - 5x)^7}$

3 Differentiate with respect to x :

a $\sqrt{x - 5}$

b $\sqrt{2x + 3}$

c $\sqrt{2x^2 - 1}$

d $\sqrt{x^3 - 5x}$

e $\sqrt[3]{5 - 2x}$

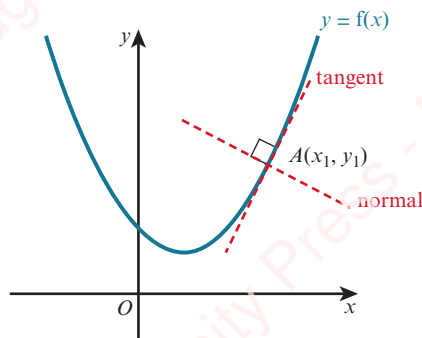
f $2\sqrt{3x + 1}$

g $\frac{1}{\sqrt{2x - 5}}$

h $\frac{6}{\sqrt[3]{2 - 3x}}$

4 Find the gradient of the curve $y = (2x - 3)^5$ at the point $(2, 1)$.5 Find the gradient of the curve $y = \frac{6}{(x - 1)^2}$ at the point where the curve crosses the y -axis.6 Find the gradient of the curve $y = x - \frac{3}{x + 2}$ at the points where the curve crosses the x -axis.7 Find the coordinates of the point on the curve $y = \sqrt{x^2 - 10x + 26}$ where the gradient is 0.8 The curve $y = \frac{a}{bx - 1}$ passes through the point $(2, 1)$ and has gradient $-\frac{3}{5}$ at this point.
Find the value of a and the value of b .

7.3 Tangents and normals



The line perpendicular to the tangent at the point A is called the **normal** at A .

If the value of $\frac{dy}{dx}$ at the point $A(x_1, y_1)$ is m , then the equation of the tangent at A is given by:

KEY POINT 7.5

$$y - y_1 = m(x - x_1)$$



TIP

We use the numerical form for m in this formula (not the derivative formula).

The normal at the point (x_1, y_1) is perpendicular to the tangent, so the gradient of the normal is $-\frac{1}{m}$ and the equation of the normal is given by:

KEY POINT 7.6

$$y - y_1 = -\frac{1}{m}(x - x_1)$$

This formula only makes sense when $m \neq 0$. If $m = 0$, it means that the tangent is horizontal and the normal is vertical, so it has equation $x = x_1$ instead.

WORKED EXAMPLE 7.8

Find the equation of the tangent and the normal to the curve $y = 2x^2 + \frac{8}{x^2} - 9$ at the point where $x = 2$.

Answer

$$y = 2x^2 + 8x^{-2} - 9$$

$$\frac{dy}{dx} = 4x - 16x^{-3}$$

When $x = 2$, $y = 2(2)^2 + 8(2)^{-2} - 9 = 1$

and $\frac{dy}{dx} = 4(2) - 16(2)^{-3} = 6$

Tangent: passes through the point $(2, 1)$ and gradient = 6

$$y - 1 = 6(x - 2)$$

$$y = 6x - 11$$

Normal: passes through the point $(2, 1)$ and gradient = $-\frac{1}{6}$

$$y - 1 = -\frac{1}{6}(x - 2)$$

$$x + 6y = 8$$

WORKED EXAMPLE 7.9

A curve has equation $y = (4 - \sqrt{x})^3$.

The normal at the point $P(4, 8)$ and the normal at the point $Q(9, 1)$ intersect at the point R .

- Find the coordinates of R .
- Find the area of triangle PQR .

Answer

a $y = (4 - \sqrt{x})^3$

$$\frac{dy}{dx} = 3(4 - \sqrt{x})^2 \left(-\frac{1}{2}x^{-\frac{1}{2}} \right) = -\frac{3(4 - \sqrt{x})^2}{2\sqrt{x}}$$

When $x = 4$, $\frac{dy}{dx} = -\frac{3(4 - \sqrt{4})^2}{2\sqrt{4}} = -3$

When $x = 9$, $\frac{dy}{dx} = -\frac{3(4 - \sqrt{9})^2}{2\sqrt{9}} = -\frac{1}{2}$

Normal at P : passes through the point $(4, 8)$ and gradient $= \frac{1}{3}$

$$y - 8 = \frac{1}{3}(x - 4)$$

$$3y = x + 20 \quad \text{----- (1)}$$

Normal at Q : passes through the point $(9, 1)$ and gradient $= 2$

$$y - 1 = 2(x - 9)$$

$$y = 2x - 17 \quad \text{----- (2)}$$

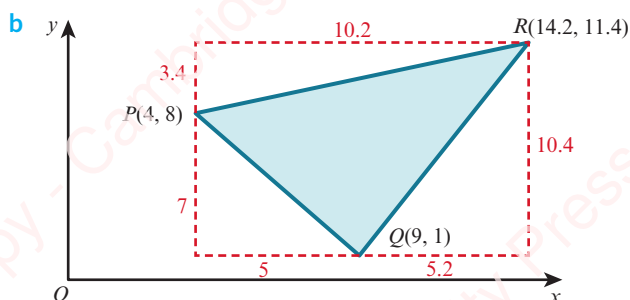
Solving equations (1) and (2) gives:

$$3(2x - 17) = x + 20$$

$$x = 14.2$$

When $x = 14.2$, $y = 2(14.2) - 17 = 11.4$

Hence, R is the point $(14.2, 11.4)$.



Area of triangle PQR = area of rectangle – sum of areas of outside triangles

$$\begin{aligned} &= 10.2 \times 10.4 - \left[\left(\frac{1}{2} \times 5 \times 7 \right) + \left(\frac{1}{2} \times 5.2 \times 10.4 \right) + \left(\frac{1}{2} \times 10.2 \times 3.4 \right) \right] \\ &= 106.08 - [17.5 + 27.04 + 17.34] \\ &= 44.2 \text{ units}^2 \end{aligned}$$

EXERCISE 7C

1 Find the equation of the tangent to each curve at the given point.

a $y = x^2 - 3x + 2$ at the point $(3, 2)$

b $y = (2x - 5)^4$ at the point $(2, 1)$

c $y = \frac{x^3 - 5}{x}$ at the point $(-1, 6)$

d $y = 2\sqrt{x - 5}$ at the point $(9, 4)$

2 Find the equation of the normal to each curve at the given point.

a $y = 3x^3 + x^2 - 4x + 1$ at the point $(0, 1)$

b $y = \frac{3}{\sqrt[3]{x+1}}$ at the point $(-2, -3)$

c $y = (5 - 2x)^3$ at the point $(3, -1)$

d $y = \frac{20}{x^2 + 1}$ at the point $(3, 2)$

- 3 A curve passes through the point $A\left(2, \frac{1}{2}\right)$ and has equation $y = \frac{8}{(x+2)^2}$.
- Find the equation of the tangent to the curve at the point A .
 - Find the equation of the normal to the curve at the point A .
- 4 The equation of a curve is $y = 5 - 3x - 2x^2$.
- Show that the equation of the normal to the curve at the point $(-2, 3)$ is $x + 5y = 13$.
 - Find the coordinates of the point at which the normal meets the curve again.
- 5 The normal to the curve $y = x^3 - 5x + 3$ at the point $(-1, 7)$ intersects the y -axis at the point P .
Find the coordinates of P .
- 6 The tangents to the curve $y = 5 - 3x - x^2$ at the points $(-1, 7)$ and $(-4, 1)$ meet at the point Q .
Find the coordinates of Q .
- 7 The normal to the curve $y = 4 - 2\sqrt{x}$ at the point $P(16, -4)$ meets the x -axis at the point Q .
- Find the equation of the normal PQ .
 - Find the coordinates of Q .
- 8 The equation of a curve is $y = 2x - \frac{10}{x^2} + 3$.
- Find $\frac{dy}{dx}$.
 - Show that the normal to the curve at the point $\left(-4, -\frac{5}{8}\right)$ meets the y -axis at the point $(0, -3)$.
- 9 The normal to the curve $y = \frac{6}{\sqrt{x-2}}$ at the point $(3, 6)$ meets the x -axis at P and the y -axis at Q .
Find the midpoint of PQ .
- 10 A curve has equation $y = x^5 - 8x^3 + 16x$. The normal at the point $P(1, 9)$ and the tangent at the point $Q(-1, -9)$ intersect at the point R .
Find the coordinates of R .
- 11 A curve has equation $y = 2(\sqrt{x} - 1)^3 + 2$. The normal at the point $P(4, 4)$ and the normal at the point $Q(9, 18)$ intersect at the point R .
- Find the coordinates of R .
 - Find the area of triangle PQR .
- 12 A curve has equation $y = 3x + \frac{12}{x}$ and passes through the points $A(2, 12)$ and $B(6, 20)$. At each of the points C and D on the curve, the tangent is parallel to AB .
- Find the coordinates of the points C and D . Give your answer in exact form.
 - Find the equation of the perpendicular bisector of CD .

- 13 The curve $y = x(x-1)(x+2)$ crosses the x -axis at the points $O(0, 0)$, $A(1, 0)$ and $B(-2, 0)$. The normals to the curve at the points A and B meet at the point C . Find the coordinates of the point C .
- 14 A curve has equation $y = \frac{5}{2-3x}$ and passes through the points $P(-1, 1)$. Find the equation of the tangent to the curve at P and find the angle that this tangent makes with the x -axis.
- 15 The curve $y = \frac{12}{2x-3} - 4$ intersects the x -axis at P . The tangent to the curve at P intersects the y -axis at Q . Find the distance PQ .
- 16 The normal to the curve $y = 2x^2 + kx - 3$ at the point $(3, -6)$ is parallel to the line $x + 5y = 10$.
- Find the value of k .
 - Find the coordinates of the point where the normal meets the curve again.



WEB LINK

Try the *Tangent or normal* resource on the Underground Mathematics website.

7.4 Second derivatives

If we differentiate y with respect to x we obtain $\frac{dy}{dx}$.

$\frac{dy}{dx}$ is called the **first derivative** of y with respect to x .

If we then differentiate $\frac{dy}{dx}$ with respect to x we obtain $\frac{d}{dx}\left(\frac{dy}{dx}\right)$, which is usually

written as $\frac{d^2y}{dx^2}$.

$\frac{d^2y}{dx^2}$ is called the **second derivative** of y with respect to x .

So for $y = x^3 + 5x^2 - 3x + 2$ or $f(x) = x^3 + 5x^2 - 3x + 2$

$$\frac{dy}{dx} = 3x^2 + 10x - 3 \quad \text{or} \quad f'(x) = 3x^2 + 10x - 3$$

$$\frac{d^2y}{dx^2} = 6x + 10 \quad \text{or} \quad f''(x) = 6x + 10$$

WORKED EXAMPLE 7.10

Given that $y = \frac{5}{(2x-3)^3}$, find $\frac{d^2y}{dx^2}$.

Answer

$$y = 5(2x-3)^{-3}$$

$$\begin{aligned} \frac{dy}{dx} &= -15(2x-3)^{-4} \times 2 && \text{Use the chain rule.} \\ &= -30(2x-3)^{-4} \end{aligned}$$

$$\begin{aligned} \frac{d^2y}{dx^2} &= 120(2x-3)^{-5} \times 2 && \text{Use the chain rule.} \\ &= \frac{240}{(2x-3)^5} \end{aligned}$$

WORKED EXAMPLE 7.11

A curve has equation $y = x^3 + 3x^2 - 9x + 2$.

- a Find the range of values of x for which $\frac{dy}{dx}$ and $\frac{d^2y}{dx^2}$ are negative.
- b Show that $\frac{d^2y}{dx^2} \neq \left(\frac{dy}{dx}\right)^2$.

Answer

a $y = x^3 + 3x^2 - 9x + 2$

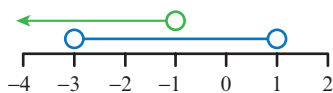
$$\frac{dy}{dx} = 3x^2 + 6x - 9$$

$$\begin{aligned} \frac{dy}{dx} < 0 \text{ when: } & 3x^2 + 6x - 9 < 0 \\ & x^2 + 2x - 3 < 0 \\ & (x+3)(x-1) < 0 \\ & -3 < x < 1 \text{ ----- (1)} \end{aligned}$$

$$\frac{d^2y}{dx^2} = 6x + 6$$

$$\begin{aligned} \frac{d^2y}{dx^2} < 0 \text{ when: } & 6x + 6 < 0 \\ & x < -1 \text{ ----- (2)} \end{aligned}$$

Combining (1) and (2) on a number line:



$$\therefore -3 < x < -1$$

b $\frac{d^2y}{dx^2} = 6x + 6$ and $\left(\frac{dy}{dx}\right)^2 = (3x^2 + 6x - 9)^2$.

Hence, $\frac{d^2y}{dx^2} \neq \left(\frac{dy}{dx}\right)^2$.



EXERCISE 7D

- 1 Find $\frac{d^2y}{dx^2}$ for each of the following functions.

a $y = x^2 + 8x - 4$

b $y = 5x^3 - 7x^2 + 5$

c $y = 2 - \frac{6}{x^2}$

d $y = (2x - 3)^4$

e $y = \sqrt{4x - 9}$

f $y = \frac{2}{\sqrt{3x+1}}$

g $y = \frac{2x-5}{x^2}$

h $y = 2x^2(5 - 3x + x^2)$

i $y = \frac{5x-4}{\sqrt{x}}$

- 2 Find $f''(x)$ for each of the following functions.

a $f(x) = \frac{5}{x^2} - \frac{3}{2x^5}$

b $f(x) = \frac{4x^2 - 3}{2x}$

c $f(x) = \frac{2x - 3\sqrt{x}}{x^2}$

d $f(x) = \sqrt{1-3x}$

e $f(x) = x^2(\sqrt{x} - 3)$

f $f(x) = \frac{15}{\sqrt[3]{2x+1}}$

Checklist of learning and understanding

Gradient of a curve

- $\frac{dy}{dx}$ represents the gradient of the curve $y = f(x)$.

The four rules of differentiation

- Power rule: $\frac{d}{dx}(x^n) = nx^{n-1}$
- Scalar multiple rule: $\frac{d}{dx}[kf(x)] = k \frac{d}{dx}[f(x)]$
- Addition/subtraction rule: $\frac{d}{dx}[f(x) \pm g(x)] = \frac{d}{dx}[f(x)] \pm \frac{d}{dx}[g(x)]$
- Chain rule: $\frac{dy}{dx} = \frac{dy}{du} \times \frac{du}{dx}$

Tangents and normals


If the value of $\frac{dy}{dx}$ at the point (x_1, y_1) is m , then:

- the equation of the tangent at that point is given by $y - y_1 = m(x - x_1)$
- the equation of the normal at that point is given by $y - y_1 = -\frac{1}{m}(x - x_1)$.

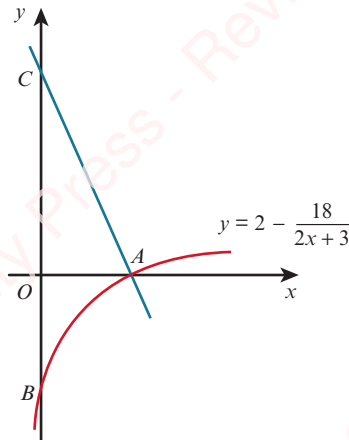
Second derivatives

- $\frac{d}{dx}\left(\frac{dy}{dx}\right) = \frac{d^2y}{dx^2}$

END-OF-CHAPTER REVIEW EXERCISE 7

- 1 Differentiate $\frac{3x^5 - 7}{4x}$ with respect to x . [3]
- 2 Find the gradient of the curve $y = \frac{8}{4x - 5}$ at the point where $x = 2$. [3]
- 3 A curve has equation $y = 3x^3 - 3x^2 + x - 7$. Show that the gradient of the curve is never negative. [3]
- 4 The equation of a curve is $y = (3 - 5x)^3 - 2x$. Find $\frac{dy}{dx}$ and $\frac{d^2y}{dx^2}$. [3]
- 5 Find the gradient of the curve $y = \frac{15}{x^2 - 2x}$ at the point where $x = 5$. [4]
- 6 The normal to the curve $y = 5\sqrt{x}$ at the point $P(4, 10)$ meets the x -axis at the point Q .
- a Find the equation of the normal PQ . [4]
- b Find the coordinates of Q . [1]
- 7 The equation of a curve is $y = 5x + \frac{12}{x^2}$.
- a Find $\frac{dy}{dx}$. [2]
- b Show that the normal to the curve at the point $(2, 13)$ meets the x -axis at the point $(28, 0)$. [3]
- 8 The normal to the curve $y = \frac{12}{\sqrt{x}}$ at the point $(9, 4)$ meets the x -axis at P and the y -axis at Q .
- Find the length of PQ , correct to 3 significant figures. [6]
- 9 The curve $y = x(x - 3)(x - 5)$ crosses the x -axis at the points $O(0, 0)$, $A(3, 0)$ and $B(5, 0)$.
The tangents to the curve at the points A and B meet at the point C .
Find the coordinates of the point C . [6]
- 10 A curve passes through the point $A(4, 2)$ and has equation $y = \frac{2}{(x - 3)^2}$.
- a Find the equation of the tangent to the curve at the point A . [5]
- b Find the equation of the normal to the curve at the point A . [2]
- 11 A curve passes through the point $P(5, 1)$ and has equation $y = 3 - \frac{10}{x}$.
- a Show that the equation of the normal to the curve at the point P is $5x + 2y = 27$. [4]
The normal meets the curve again at the point Q .
- b i Find the coordinates of Q . [3]
ii Find the midpoint of PQ . [1]
- 12  A curve has equation $y = 3x - \frac{4}{x}$ and passes through the points $A(1, -1)$ and $B(4, 11)$.
At each of the points C and D on the curve, the tangent is parallel to AB . Find the equation of the perpendicular bisector of CD . [7]

13



The diagram shows part of the curve $y = 2 - \frac{18}{2x+3}$, which crosses the x -axis at A and the y -axis at B .
The normal to the curve at A crosses the y -axis at C .

- i Show that the equation of the line AC is $9x + 4y = 27$. [6]
- ii Find the length of BC . [2]

Cambridge International AS & A Level Mathematics 9709 Paper 11 Q7 June 2010

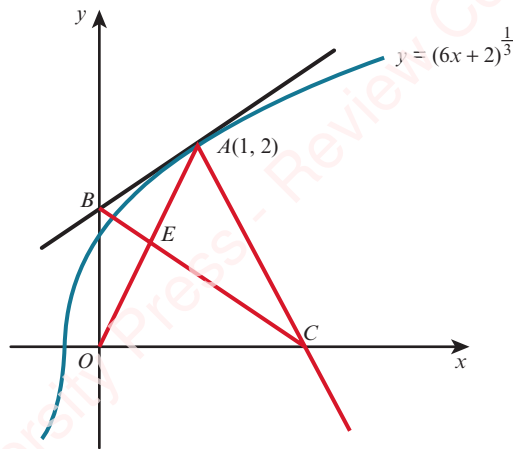
14

The equation of a curve is $y = 3 + 4x - x^2$.

- i Show that the equation of the normal to the curve at the point $(3, 6)$ is $2y = x + 9$. [4]
- ii Given that the normal meets the coordinate axes at points A and B , find the coordinates of the mid-point of AB . [2]
- iii Find the coordinates of the point at which the normal meets the curve again. [4]

Cambridge International AS & A Level Mathematics 9709 Paper 11 Q10 November 2010

15



The diagram shows the curve $y = (6x+2)^{\frac{1}{3}}$ and the point $A(1, 2)$ which lies on the curve. The tangent to the curve at A cuts the y -axis at B and the normal to the curve at A cuts the x -axis at C .

- i Find the equation of the tangent AB and the equation of the normal AC . [5]
- ii Find the distance BC . [3]
- iii Find the coordinates of the point of intersection, E , of OA and BC , and determine whether E is the mid-point of OA . [4]

Cambridge International AS & A Level Mathematics 9709 Paper 11 Q11 November 2012



Chapter 8

Further differentiation

In this chapter you will learn how to:

- apply differentiation to increasing and decreasing functions and rates of change
- locate stationary points and determine their nature, and use information about stationary points when sketching graphs.



PREREQUISITE KNOWLEDGE

Where it comes from	What you should be able to do	Check your skills
Chapter 1	Solve quadratic inequalities.	1 Solve: a $x^2 - 2x - 3 > 0$ b $6 + x - x^2 > 0$
Chapter 7	Find the first and second derivatives of x^n .	2 Find $\frac{dy}{dx}$ and $\frac{d^2y}{dx^2}$ for the following. a $y = 3x^2 - x + 2$ b $y = \frac{3}{2x^2}$ c $y = 3x\sqrt{x}$
Chapter 7	Differentiate composite functions.	3 Find $\frac{dy}{dx}$ for the following. a $y = (2x - 1)^5$ b $y = \frac{3}{(1 - 3x)^2}$

Why do we study differentiation?

In Chapter 7, you learnt how to differentiate functions and how to use differentiation to find gradients, tangents and normals.

In this chapter you will build on this knowledge and learn how to apply differentiation to problems that involve finding when a function is increasing (or decreasing) or when a function is at a maximum (or minimum) value. You will also learn how to solve practical problems involving rates of change.

There are many situations in real life where these skills are needed. Some examples are:

- manufacturers of canned food and drinks needing to minimise the cost of their manufacturing by minimising the amount of metal required to make a can for a given volume
- doctors calculating the time interval when the concentration of a drug in the bloodstream is increasing
- economists might use these tools to advise a company on its pricing strategy
- scientists calculating the rate at which the area of an oil slick is increasing.

FAST FORWARD

In the Mechanics Coursebook, Chapter 6 you will learn to apply these skills to problems concerning displacement, velocity and time.

WEB LINK

Explore the *Calculus meets functions* station on the Underground Mathematics website.

EXPLORE 8.1

Section A: Increasing functions

Consider the graph of $y = f(x)$.

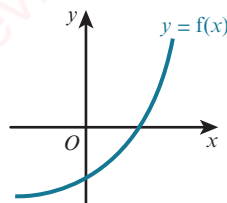
- 1 Complete the following two statements about $y = f(x)$.

‘As the value of x increases the value of $y \dots$ ’

‘The sign of the gradient at any point is always ...’

- 2 Sketch other graphs that satisfy these statements.

These types of functions are called **increasing functions**.

**Section B: Decreasing functions**

Consider the graph of $y = g(x)$.

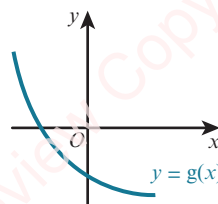
- 1 Complete the following two statements about $y = g(x)$.

‘As the value of x increases the value of $y \dots$ ’

‘The sign of the gradient at any point is always ...’

- 2 Sketch other graphs that satisfy these statements.

These types of functions are called **decreasing functions**.

**WEB LINK**

Try the *Choose your families* resource on the Underground Mathematics website.

8.1 Increasing and decreasing functions

As you probably worked out from Explore 8.1, an **increasing function** $f(x)$ is one where the $f(x)$ values increase whenever the x value increases. More precisely, this means that $f(a) < f(b)$ whenever $a < b$.

Likewise, a **decreasing function** $f(x)$ is one where the $f(x)$ values decrease whenever the x value increases, or $f(a) > f(b)$ whenever $a < b$.

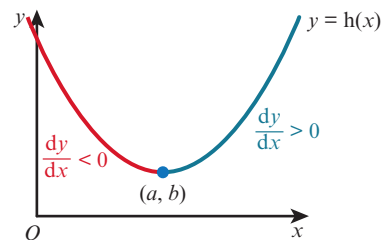
Sometimes we talk about a function **increasing** at a point, meaning that the function values are increasing around that point. If the gradient of the function is positive at a point, then the function is increasing there.

In the same way, we can talk about a function **decreasing** at a point. If the gradient of the function is negative at a point, then the function is decreasing there.

Now consider the function $y = h(x)$, shown on the graph.

We can divide the graph into two distinct sections:

- $h(x)$ is increasing when $x > a$, i.e. $\frac{dy}{dx} > 0$ for $x > a$.
- $h(x)$ is decreasing when $x < a$, i.e. $\frac{dy}{dx} < 0$ for $x < a$.



WORKED EXAMPLE 8.1

Find the set of values of x for which $y = 8 - 3x - x^2$ is decreasing.

Answer

$$y = 8 - 3x - x^2$$

$$\frac{dy}{dx} = -3 - 2x$$

When $\frac{dy}{dx} < 0$, y is decreasing.

$$-3 - 2x < 0$$

$$2x > -3$$

$$x > -\frac{3}{2}$$

WORKED EXAMPLE 8.2

For the function $f(x) = 4x^3 - 15x^2 - 72x - 8$:

a Find $f'(x)$.

b Find the range of values of x for which $f(x) = 4x^3 - 15x^2 - 72x - 8$ is increasing.

c Find the range of values of x for which $f(x) = 4x^3 - 15x^2 - 72x - 8$ is decreasing.

Answer

a $f(x) = 4x^3 - 15x^2 - 72x - 8$

$$f'(x) = 12x^2 - 30x - 72$$

b When $f'(x) > 0$, $f(x)$ is increasing.

$$12x^2 - 30x - 72 > 0$$

$$2x^2 - 5x - 12 > 0$$

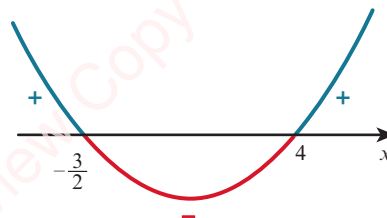
$$(2x + 3)(x - 4) > 0$$

Critical values are $-\frac{3}{2}$ and 4.

$$\therefore x < -\frac{3}{2} \text{ and } x > 4.$$

c When $f'(x) < 0$, $f(x)$ is decreasing.

$$\therefore -\frac{3}{2} < x < 4$$



WORKED EXAMPLE 8.3

A function f is defined as $f(x) = \frac{5}{2x-3}$ for $x > \frac{3}{2}$. Find an expression for $f'(x)$ and determine whether f is an increasing function, a decreasing function or neither.

Answer

$$f(x) = \frac{5}{2x-3}$$

$$= 5(2x-3)^{-1}$$

Write in a form ready for differentiating.

$$f'(x) = -5(2x-3)^{-2}(2)$$

$$= -\frac{10}{(2x-3)^2}$$

Differentiate using the chain rule.

If $x > \frac{3}{2}$, then $(2x-3)^2 > 0$ for all values of x .

Hence, $f'(x) < 0$ for all values of x in the domain of f .

$\therefore f$ is a decreasing function.

EXERCISE 8A

1 Find the set of values of x for which each of the following is increasing.

a $f(x) = x^2 - 8x + 2$

b $f(x) = 2x^2 - 4x + 7$

c $f(x) = 5 - 7x - 2x^2$

d $f(x) = x^3 - 12x^2 + 2$

e $f(x) = 2x^3 - 15x^2 + 24x + 6$

f $f(x) = 16 + 16x - x^2 - x^3$

2 Find the set of values of x for which each of the following is decreasing.

a $f(x) = 3x^2 - 8x + 2$

b $f(x) = 10 + 9x - x^2$

c $f(x) = 2x^3 - 21x^2 + 60x - 5$

d $f(x) = x^3 - 3x^2 - 9x + 5$

e $f(x) = -40x + 13x^2 - x^3$

f $f(x) = 11 + 24x - 3x^2 - x^3$

3 Find the set of values of x for which $f(x) = \frac{1}{6}(5-2x)^3 + 4x$ is increasing.

4 A function f is defined as $f(x) = \frac{4}{1-2x}$ for $x \geq 1$. Find an expression for $f'(x)$ and determine whether f is an increasing function, a decreasing function or neither.

5 A function f is defined as $f(x) = \frac{5}{(x+2)^2} - \frac{2}{x+2}$ for $x \geq 0$. Find an expression for $f'(x)$ and determine whether f is an increasing function, a decreasing function or neither.

6 Show that $f(x) = \frac{x^2-4}{x}$ is an increasing function.

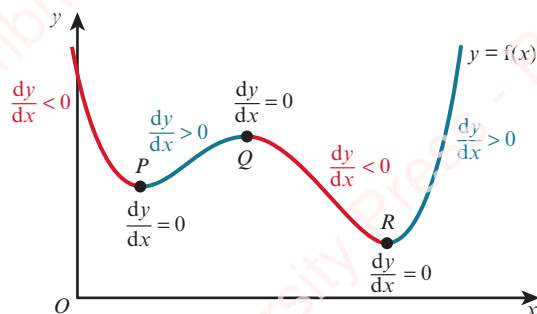
7 A function f is defined as $f(x) = (2x+5)^2 - 3$ for $x \geq 0$. Find an expression for $f'(x)$ and explain why f is an increasing function.

8 It is given that $f(x) = \frac{2}{x^4} - x^2$ for $x > 0$. Show that f is a decreasing function.

9 A manufacturing company produces x articles per day. The profit function, $P(x)$, can be modeled by the function $P(x) = 2x^3 - 81x^2 + 840x$. Find the range of values of x for which the profit is decreasing.

8.2 Stationary points

Consider the following graph of the function $y = f(x)$.



The red sections of the curve show where the gradient is negative (where $f(x)$ is a decreasing function) and the blue sections show where the gradient is positive (where $f(x)$ is an increasing function). The gradient of the curve is zero at the points P , Q and R .

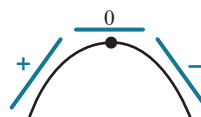
A point where the gradient is zero is called a stationary point or a turning point.

Maximum points

The stationary point Q is called a maximum point because the value of y at this point is greater than the value of y at other points close to Q .

At a maximum point:

- $\frac{dy}{dx} = 0$
- the gradient is positive to the left of the maximum and negative to the right.

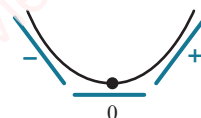


Minimum points

The stationary points P and R are called minimum points.

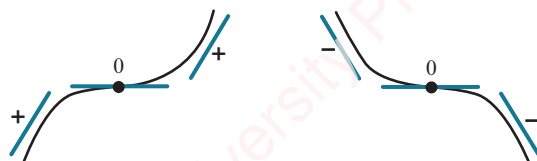
At a minimum point:

- $\frac{dy}{dx} = 0$
- the gradient is negative to the left of the minimum and positive to the right.



Stationary points of inflexion

There is a third type of stationary point (turning point) called a **point of inflexion**.



At a stationary point of inflexion:

- $\frac{dy}{dx} = 0$
- the gradient changes {
 - from positive to zero and then to positive again
 - or
 - from negative to zero and then to negative again.

WORKED EXAMPLE 8.4

Find the coordinates of the stationary points on the curve $y = x^3 - 12x + 5$ and determine the nature of these points. Sketch the graph of $y = x^3 - 12x + 5$.

Answer

$$y = x^3 - 12x + 5$$

$$\frac{dy}{dx} = 3x^2 - 12$$

For stationary points: $\frac{dy}{dx} = 0$

$$3x^2 - 12 = 0$$

$$x^2 - 4 = 0$$

$$(x + 2)(x - 2) = 0$$





$$x = -2 \text{ or } x = 2$$





When $x = -2$, $y = (-2)^3 - 12(-2) + 5 = 21$

When $x = 2$, $y = (2)^3 - 12(2) + 5 = -11$

The stationary points are $(-2, 21)$ and $(2, -11)$.

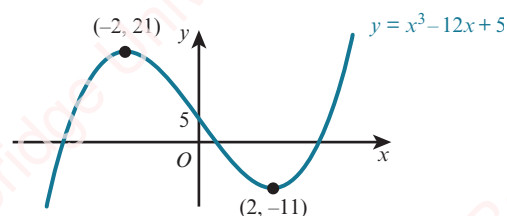
Now consider the gradient on either side of the points $(-2, 21)$ and $(2, -11)$:

x	-2.1	-2	-1.9
$\frac{dy}{dx}$	$3(-2.1)^2 - 12 = \text{positive}$	0	$3(-1.9)^2 - 12 = \text{negative}$
direction of tangent			
shape of curve			

x	1.9	2	2.1
$\frac{dy}{dx}$	$3(1.9)^2 - 12 = \text{negative}$	0	$3(2.1)^2 - 12 = \text{positive}$
direction of tangent			
shape of curve			

So $(-2, 21)$ is a maximum point and $(2, -11)$ is a minimum point.

The sketch graph of $y = x^3 - 12x + 5$ is:

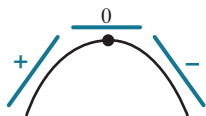


TIP

This is called the First Derivative Test.

Second derivatives and stationary points

Consider moving from left to right along a curve, passing through a maximum point.



The gradient, $\frac{dy}{dx}$, starts as a positive value, decreases to zero at the maximum point and then decreases to a negative value.

Since $\frac{dy}{dx}$ decreases as x increases, then the rate of change of $\frac{dy}{dx}$ is negative.

The rate of change of $\frac{dy}{dx}$ is written as $\frac{d}{dx}\left(\frac{dy}{dx}\right) = \frac{d^2y}{dx^2}$.
 $\frac{d^2y}{dx^2}$ is called the second derivative of y with respect to x .

This leads to the rule:

REWIND

In Chapter 7, Section 7.4 we learnt how to find a second derivative. Here we will look at how second derivatives can be used to determine the nature of a stationary point.

KEY POINT 8.1

If $\frac{dy}{dx} = 0$ and $\frac{d^2y}{dx^2} < 0$, then the point is a maximum point.

Now, consider moving from left to right along a curve, passing through a minimum point.



The gradient, $\frac{dy}{dx}$, starts as a negative value, increases to zero at the minimum point and then increases to a positive value.

Since $\frac{dy}{dx}$ increases as x increases, then the rate of change of $\frac{dy}{dx}$ is positive.

This leads to the rule:

KEY POINT 8.2

If $\frac{dy}{dx} = 0$ and $\frac{d^2y}{dx^2} > 0$, then the point is a minimum point.

If $\frac{dy}{dx} = 0$ and $\frac{d^2y}{dx^2} = 0$, then the nature of the stationary point can be found using the first derivative test.

WORKED EXAMPLE 8.5

Find the coordinates of the stationary points on the curve $y = \frac{x^2 + 9}{x}$ and use the second derivative to determine the nature of these points.

Answer

$$y = \frac{x^2 + 9}{x} = x + 9x^{-1}$$

$$\frac{dy}{dx} = 1 - 9x^{-2} = 1 - \frac{9}{x^2}$$

For stationary points:

$$\frac{dy}{dx} = 0$$

$$1 - \frac{9}{x^2} = 0$$

$$x^2 - 9 = 0$$

$$(x + 3)(x - 3) = 0$$

$$x = -3 \text{ or } x = 3$$

When $x = -3$, $y = \frac{(-3)^2 + 9}{-3} = -6$

When $x = 3$, $y = \frac{3^2 + 9}{3} = 6$

The stationary points are $(-3, -6)$ and $(3, 6)$.

$$\frac{d^2y}{dx^2} = 18x^{-3} = \frac{18}{x^3}$$

When $x = -3$, $\frac{d^2y}{dx^2} = \frac{18}{(-3)^3} < 0$

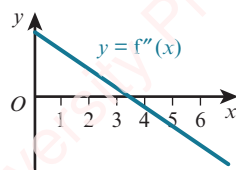
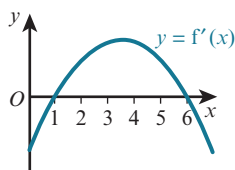
When $x = 3$, $\frac{d^2y}{dx^2} = \frac{18}{3^3} > 0$

$\therefore (-3, -6)$ is a maximum point and $(3, 6)$ is a minimum point.

EXPLORE 8.2

The graph of the function $y = f(x)$ passes through the point $(1, -35)$ and the point $(6, 90)$.

The following graphs show $y = f'(x)$ and $y = f''(x)$.



- Discuss the properties of these two graphs and the information that can be obtained from them.
- Without finding the equation of the function $y = f(x)$, determine, giving reasons:
 - the coordinates of the maximum point on the curve
 - the coordinates of the minimum point on the curve.
- Sketch the graph of the function $y = f(x)$.

- c Find the coordinates of the other stationary point on the curve and determine the nature of this stationary point.
- d Find the coordinates of the point on the curve where the gradient is minimum and state the value of the minimum gradient.
- 11 The curve $y = ax + \frac{b}{x^2}$ has a stationary point at (2, 12).
- a Find the value of a and the value of b .
- b Determine the nature of the stationary point (2, 12).
- c Find the range of values of x for which $ax + \frac{b}{x^2}$ is increasing.
- 12 The curve $y = x^2 + \frac{a}{x} + b$ has a stationary point at (3, 5).
- a Find the value of a and the value of b .
- b Determine the nature of the stationary point (3, 5).
- c Find the range of values of x for which $x^2 + \frac{a}{x} + b$ is decreasing.
- 13 The curve $y = 2x^3 + ax^2 + bx + 7$ has a stationary point at the point (2, -13).
- a Find the value of a and the value of b .
- b Find the coordinates of the second stationary point on the curve.
- c Determine the nature of the two stationary points.
- d Find the coordinates of the point on the curve where the gradient is minimum and state the value of the minimum gradient.



WEB LINK

Try the following resources on the Underground Mathematics website:

- *Floppy hair*
- *Two-way calculus*
- *Curvy cubics*
- *Can you find... curvy cubics edition.*

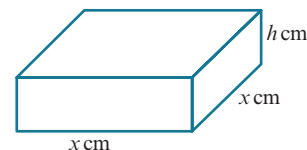
8.3 Practical maximum and minimum problems

There are many problems for which we need to find the maximum or minimum value of an expression. For example, the manufacturers of canned food and drinks often need to minimise the cost of their manufacturing. To do this they need to find the minimum amount of metal required to make a container for a given volume. Other situations might involve finding the maximum area that can be enclosed within a shape.

WORKED EXAMPLE 8.6

The surface area of the solid cuboid is 100 cm^2 and the volume is $V \text{ cm}^3$.

- a Express h in terms of x .
- b Show that $V = 25x - \frac{1}{2}x^3$.
- c Given that x can vary, find the stationary value of V and determine whether this stationary value is a maximum or a minimum.



Answer

- a Surface area = $2x^2 + 4xh$
 $2x^2 + 4xh = 100$
 $h = \frac{100 - 2x^2}{4x}$
 $\dot{h} = \frac{25}{x} - \frac{1}{2}x$

b $V = x^2h$ Substitute for h .

$$= x^2 \left(\frac{25}{x} - \frac{1}{2}x \right)$$

$$= 25x - \frac{1}{2}x^3$$

c $\frac{dV}{dx} = 25 - \frac{3}{2}x^2$

Stationary values occur when $\frac{dV}{dx} = 0$:

$$25 - \frac{3}{2}x^2 = 0$$

$$x = \frac{5\sqrt{6}}{3}$$

When $x = \frac{5\sqrt{6}}{3}$, $V = 25 \left(\frac{5\sqrt{6}}{3} \right) - \frac{1}{2} \left(\frac{5\sqrt{6}}{3} \right)^3 = 68.04$ (to 2 decimal places)

$$\frac{d^2V}{dx^2} = -3x$$

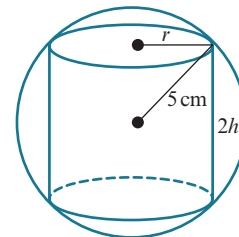
When $x = \frac{5\sqrt{6}}{3}$, $\frac{d^2V}{dx^2} = -5\sqrt{6}$, which is < 0 .

The stationary value of V is 68.04 and it is a maximum value.

WORKED EXAMPLE 8.7

The diagram shows a solid cylinder of radius r cm and height $2h$ cm cut from a solid sphere of radius 5 cm. The volume of the cylinder is C cm³.

- Express r in terms of h .
- Show that $V = 50\pi h - 2\pi h^3$.
- Find the value for h for which there is a stationary value of V .
- Determine the nature of this stationary value.

**Answer**

a $r^2 + h^2 = 5^2$ Use Pythagoras' theorem.

$$r = \sqrt{25 - h^2}$$

b $V = \pi r^2(2h)$ Substitute for r .

$$= \pi(25 - h^2)(2h)$$

$$= 50\pi h - 2\pi h^3$$

c $\frac{dV}{dh} = 50\pi - 6\pi h^2$

Stationary values occur when $\frac{dV}{dh} = 0$:

$$50\pi - 6\pi h^2 = 0$$

$$h^2 = \frac{50\pi}{6\pi}$$

$$h = \frac{5\sqrt{3}}{3}$$

$$d \quad \frac{d^2V}{dh^2} = -12\pi h$$

$$\text{When } h = \frac{5\sqrt{3}}{3}, \quad \frac{d^2V}{dx^2} = -12\pi \left(\frac{5\sqrt{3}}{3} \right), \text{ which is } < 0.$$

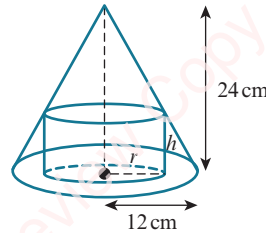
The stationary value is a maximum value.

WORKED EXAMPLE 8.8

The diagram shows a hollow cone with base radius 12 cm and height 24 cm.

A solid cylinder stands on the base of the cone and the upper edge touches the inside of the cone.

The cylinder has base radius r cm, height h cm and volume V cm³.



- Express h in terms of r .
- Show that $V = 24\pi r^2 - 2\pi r^3$.
- Find the volume of the largest cylinder that can stand inside the cone.

Answer

$$a \quad \frac{r}{12} = \frac{24-h}{24}$$

$$2r = 24 - h$$

$$h = 24 - 2r$$

Use similar triangles.

$$b \quad V = \pi r^2 h$$

$$= \pi r^2 (24 - 2r)$$

$$= 24\pi r^2 - 2\pi r^3$$

Substitute for h .

$$c \quad \frac{dV}{dr} = 48\pi r - 6\pi r^2$$

Stationary values occur when $\frac{dV}{dr} = 0$:

$$48\pi r - 6\pi r^2 = 0$$

$$6\pi r(8 - r) = 0$$

$$r = 8$$

$$\text{When } r = 8, V = 24\pi(8)^2 - 2\pi(8)^3 = 512\pi$$

$$\frac{d^2V}{dr^2} = 48\pi - 12\pi r$$

$$\text{When } r = 8, \frac{d^2V}{dx^2} = 48\pi - 12\pi(8), \text{ which is } < 0.$$

The stationary value is a maximum value.

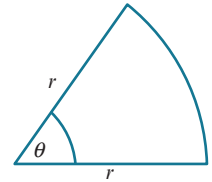
Volume of the largest cylinder is 512π cm³.

i DID YOU KNOW?

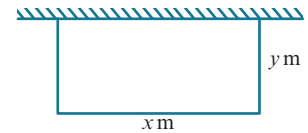
Differentiation can be used in business to find how to maximise company profits and to find how to minimise production costs.

EXERCISE 8C

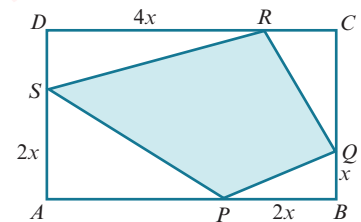
- The sum of two real numbers, x and y , is 9.
 - Express y in terms of x .
 - Given that $P = x^2y$, write down an expression for P , in terms of x .
 - Find the maximum value of P .
 - Given that $Q = 3x^2 + 2y^2$, write down an expression for Q , in terms of x .
 - Find the minimum value of Q .
- A piece of wire, of length 40 cm, is bent to form a sector of a circle with radius r cm and sector angle θ radians, as shown in the diagram. The total area enclosed by the shape is A cm².
 - Express θ in terms of r .
 - Show that $A = 20r - r^2$.
 - Find the value of r for which there is a stationary value of A .
 - Determine the magnitude and nature of this stationary value.



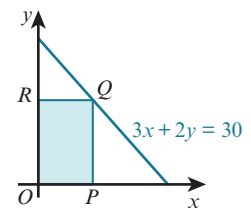
- The diagram shows a rectangular enclosure for keeping animals. There is a fence on three sides of the enclosure and a wall on its fourth side. The total length of the fence is 50 m and the area enclosed is A m².
 - Express y in terms of x .
 - Show that $A = \frac{1}{2}x(50 - x)$.
 - Find the maximum possible area enclosed and the value of x for which this occurs.



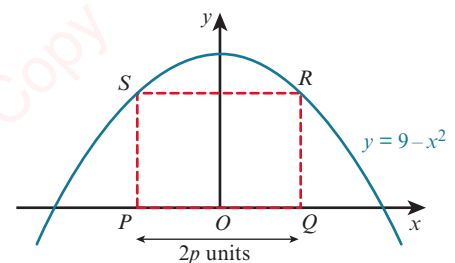
- The diagram shows a rectangle, $ABCD$, where $AB = 20$ cm and $BC = 16$ cm. $PQRS$ is a quadrilateral where $PB = AS = 2x$ cm, $BQ = x$ cm and $DR = 4x$ cm.
 - Express the area of $PQRS$ in terms of x .
 - Given that x can vary, find the value of x for which the area of $PQRS$ is a minimum and find the magnitude of this minimum area.



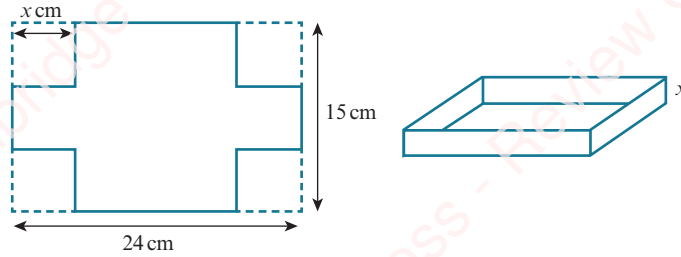
- The diagram shows the graph of $3x + 2y = 30$. $OPQR$ is a rectangle with area A cm². The point O is the origin, P lies on the x -axis, R lies on the y -axis and Q has coordinates (x, y) and lies on the line $3x + 2y = 30$.
 - Show that $A = 15x - \frac{3}{2}x^2$.
 - Given that x can vary, find the stationary value of A and determine its nature.



- $PQRS$ is a rectangle with base length $2p$ units and area A units². The points P and Q lie on the x -axis and the points R and S lie on the curve $y = 9 - x^2$.
 - Express QR in terms of p .
 - Show that $A = 2p(9 - p^2)$.
 - Find the value of p for which A has a stationary value.
 - Find this stationary value and determine its nature.



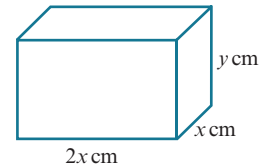
7



The diagram shows a 24 cm by 15 cm sheet of metal with a square of side x cm removed from each corner. The metal is then folded to make an open rectangular box of depth x cm and volume V cm³.

- Show that $V = 4x^3 - 78x^2 + 360x$.
- Find the stationary value of V and the value of x for which this occurs.
- Determine the nature of this stationary value.

- 8 The volume of the solid cuboid shown in the diagram is 576 cm³ and the surface area is A cm².



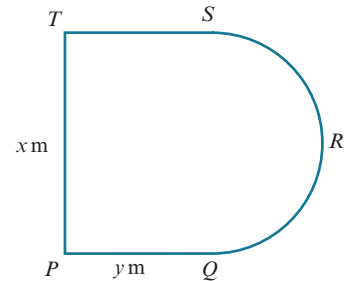
- Express y in terms of x .
- Show that $A = 4x^2 + \frac{1728}{x}$.
- Find the maximum value of A and state the dimensions of the cuboid for which this occurs.

- 9 The diagram shows a piece of wire, of length 2 m, is bent to form the shape $PQRST$.

$PQST$ is a rectangle and QRS is a semicircle with diameter SQ .

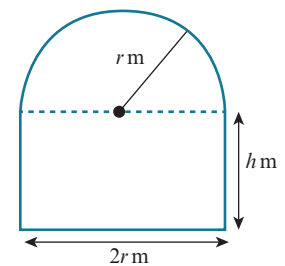
$PT = x$ m and $PQ = ST = y$ m.

The total area enclosed by the shape is A m².



- Express y in terms of x .
- Show that $A = x - \frac{1}{2}x^2 - \frac{1}{8}\pi x^2$.
- Find $\frac{dA}{dx}$ and $\frac{d^2A}{dx^2}$.
- Find the value for x for which there is a stationary value of A .
- Determine the magnitude and nature of this stationary value.

- 10 The diagram shows a window made from a rectangle with base $2r$ m and height h m and a semicircle of radius r m. The perimeter of the window is 5 m and the area is A m².



- Express h in terms of r .
- Show that $A = 5r - 2r^2 - \frac{1}{2}\pi r^2$.
- Find $\frac{dA}{dr}$ and $\frac{d^2A}{dr^2}$.
- Find the value for r for which there is a stationary value of A .
- Determine the magnitude and nature of this stationary value.

- 11 A piece of wire, of length 100 cm, is cut into two pieces.

One piece is bent to make a square of side x cm and the other is bent to make a circle of radius r cm. The total area enclosed by the two shapes is A cm².

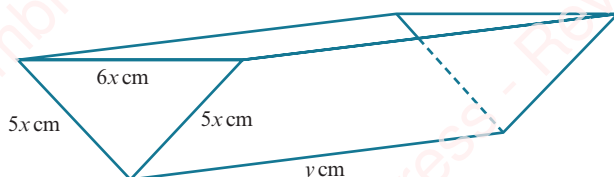
- Express r in terms of x .
- Show that $A = \frac{(\pi + 4)x^2 - 200x + 2500}{\pi}$.
- Find the value of x for which A has a stationary value and determine the nature and magnitude of this stationary value.

- 12 A solid cylinder has radius r cm and height h cm.

The volume of this cylinder is 432π cm³ and the surface area is A cm².

- Express h in terms of r .
- Show that $A = 2\pi r^2 + \frac{864\pi}{r}$.
- Find the value for r for which there is a stationary value of A .
- Determine the magnitude and nature of this stationary value.

- 13



The diagram shows an open water container in the shape of a triangular prism of length y cm.

The vertical cross-section is an isosceles triangle with sides $5x$ cm, $5x$ cm and $6x$ cm.

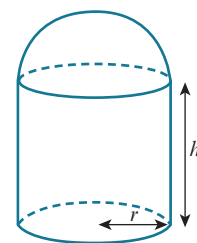
The water container is made from 500 cm² of sheet metal and has a volume of V cm³.

- Express y in terms of x .
- Show that $V = 600x - \frac{144}{5}x^3$.
- Find the value of x for which V has a stationary value.
- Show that the value in part c is a maximum value.

PS

- 14 The diagram shows a solid formed by joining a hemisphere of radius r cm to a cylinder of radius r cm and height h cm. The surface area of the solid is 320π cm² and the volume is V cm³.

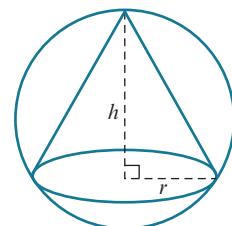
- Express h in terms of r .
- Show that $V = 160\pi r - \frac{5}{6}\pi r^3$.
- Find the exact value of r such that V is a maximum.



PS

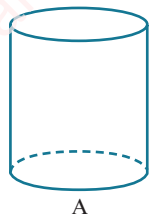
- 15 The diagram shows a right circular cone of base radius r cm and height h cm cut from a solid sphere of radius 10 cm. The volume of the cone is V cm³.

- Express r in terms of h .
- Show that $V = \frac{1}{3}\pi h^2(20 - h)$.
- Find the value for h for which there is a stationary value of V .
- Determine the magnitude and nature of this stationary value.



8.4 Rates of change

EXPLORE 8.3



A



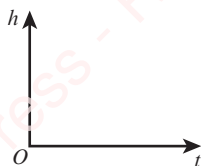
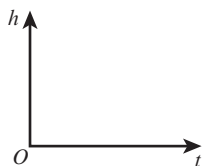
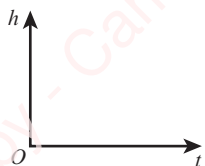
B



C

Consider pouring water at a constant rate of $10 \text{ cm}^3 \text{ s}^{-1}$ into each of these three large containers.

- 1 Discuss how the height of water in container A changes with time.
- 2 Discuss how the height of water in container B changes with time.
- 3 Discuss how the height of water in container C changes with time.
- 4 On copies of the following axes, sketch graphs to show how the height of water in a container (h cm) varies with time (t seconds) for each container.



- 5 What can you say about the gradients?

You should have come to the conclusion that:

- the height of water in container A increases at a constant rate
- the height of water in containers B and C does not increase at a constant rate.

The (constant) rate of change of the height of the water in container A can be found by finding the gradient of the straight-line graph.

The rate of change of the height of the water in containers B and C at a particular time, t seconds, can be estimated by drawing a tangent to the curve and then finding the gradient of the tangent. A more accurate method is to use differentiation if we know the equation of the graph.

WORKED EXAMPLE 8.9

Given that $h = \frac{1}{5}t^2$, find the rate of change of h with respect to t when $t = 2$.

Answer

$$h = \frac{1}{5}t^2$$

$$\frac{dh}{dt} = \frac{2}{5}t$$

$$\text{When } t = 2, \frac{dh}{dt} = \frac{2}{5}(2) = \frac{4}{5}$$

Differentiate to obtain $\frac{dh}{dt}$ (the rate of change of h with respect to t).

WORKED EXAMPLE 8.10

Variables V and t are connected by the equation $V = 2t^2 - 3t + 8$.

Find the rate of change of V with respect to t when $t = 4$.

Answer

$$V = 2t^2 - 3t + 8$$

$$\frac{dV}{dt} = 4t - 3$$

$$\text{When } t = 4, \frac{dV}{dt} = 4(4) - 3 = 13$$

Differentiate to obtain $\frac{dV}{dt}$ (the rate of change of V with respect to t).

Connected rates of change

When two variables, x and y , both vary with a third variable, t , we can connect the three variables using the chain rule.

KEY POINT 8.3

The chain rule states: $\frac{dy}{dt} = \frac{dy}{dx} \times \frac{dx}{dt}$

REWIND

In Chapter 7, Section 7.2 we learnt how to differentiate using the chain rule. Here we will look at how the chain rule can be used for problems involving connected rates of change.

228

We may also need to use the rule:

KEY POINT 8.4

$$\frac{dx}{dy} = \frac{1}{\frac{dy}{dx}}$$

We can deduce this as: if we set $t = y$ in the chain rule, we get

$$\frac{dy}{dy} = \frac{dy}{dx} \times \frac{dx}{dy}$$

Since $\frac{dy}{dy} = 1$, the rule follows.

WORKED EXAMPLE 8.11

A point with coordinates (x, y) moves along the curve $y = x + \sqrt{2x + 3}$ in such a way that the rate of increase of x has the constant value 0.06 units per second. Find the rate of increase of y at the instant when $x = 3$. State whether the y -coordinate is increasing or decreasing.

Answer

$$y = x + (2x + 3)^{\frac{1}{2}} \quad \text{and} \quad \frac{dx}{dt} = 0.06$$

$$\frac{dy}{dx} = 1 + \frac{1}{2}(2x + 3)^{-\frac{1}{2}}(2)$$

$$= 1 + \frac{1}{\sqrt{2x + 3}}$$

Differentiate to find $\frac{dy}{dx}$.

$$\text{When } x = 3, \frac{dy}{dx} = 1 + \frac{1}{\sqrt{2(3)+3}} = \frac{4}{3}$$

$$\begin{aligned} \text{Using the chain rule: } \frac{dy}{dt} &= \frac{dy}{dx} \times \frac{dx}{dt} \\ &= \frac{4}{3} \times 0.06 \\ &= 0.08 \end{aligned}$$

Rate of change of y is 0.08 units per second.

The y -coordinate is increasing (since $\frac{dy}{dt}$ is a positive quantity).

EXERCISE 8D

- A point is moving along the curve $y = 3x - 2x^3$ in such a way that the x -coordinate is increasing at 0.015 units per second. Find the rate at which the y -coordinate is changing when $x = 2$, stating whether the y -coordinate is increasing or decreasing.
- A point with coordinates (x, y) moves along the curve $y = \sqrt{1+2x}$ in such a way that the rate of increase of x has the constant value 0.01 units per second. Find the rate of increase of y at the instant when $x = 4$.
- A point is moving along the curve $y = \frac{8}{x^2-2}$ in such a way that the x -coordinate is increasing at a constant rate of 0.005 units per second. Find the rate of change of the y -coordinate as the point passes through the point $(2, 4)$.
- A point is moving along the curve $y = 3\sqrt{x} - \frac{5}{\sqrt{x}}$ in such a way that the x -coordinate is increasing at a constant rate of 0.02 units per second. Find the rate of change of the y -coordinate when $x = 1$.
- A point, P , travels along the curve $y = 3x + \frac{1}{\sqrt{x}}$ in such a way that the x -coordinate of P is increasing at a constant rate of 0.5 units per second. Find the rate at which the y -coordinate of P is changing when P is at the point $(1, 4)$.
- A point is moving along the curve $y = \frac{2}{x} + 5x$ in such a way that the x -coordinate is increasing at a constant rate of 0.02 units per second. Find the rate at which the y -coordinate is changing when $x = 2$, stating whether the y -coordinate is increasing or decreasing.
- A point moves along the curve $y = \frac{8}{7-2x}$. As it passes through the point P , the x -coordinate is increasing at a rate of 0.125 units per second and the y -coordinate is increasing at a rate of 0.08 units per second. Find the possible x -coordinates of P .
- A point, P , travels along the curve $y = \sqrt[3]{2x^2 - 3}$ in such a way that at time t minutes the x -coordinate of P is increasing at a constant rate of 0.012 units per minute. Find the rate at which the y -coordinate of P is changing when P is at the point $(1, -1)$.
- PS** A point, $P(x, y)$, travels along the curve $y = x^3 - 5x^2 + 5x$ in such a way that the rate of change of x is constant. Find the values of x at the points where the rate of change of y is double the rate of change of x .

8.5 Practical applications of connected rates of change

WORKED EXAMPLE 8.12

Oil is leaking from a pipeline under the sea and a circular patch is formed on the surface of the sea.

The radius of the patch increases at a rate of 2 metres per hour.

Find the rate at which the area is increasing when the radius of the patch is 25 metres.

Answer

We need to find $\frac{dA}{dt}$ when $r = 25$.

Radius increasing at a rate of 2 metres per hour, so $\frac{dr}{dt} = 2$.

Let A = area of circular oil patch, in m^2 .

$$A = \pi r^2$$

Differentiate with respect to r .

$$\frac{dA}{dr} = 2\pi r$$

When $r = 25$, $\frac{dA}{dr} = 50\pi$

Using the chain rule, $\frac{dA}{dt} = \frac{dA}{dr} \times \frac{dr}{dt}$

$$= 50\pi \times 2$$

$$= 100\pi$$

The area is increasing at a rate of $100\pi \text{ m}^2$ per hour.

WORKED EXAMPLE 8.13

A solid sphere has radius r cm, surface area $A \text{ cm}^2$ and volume $V \text{ cm}^3$.

The radius is increasing at a rate of $\frac{1}{5\pi} \text{ cm s}^{-1}$.

- Find the rate of increase of the surface area when $r = 3$.
- Find the rate of increase of the volume when $r = 5$.

Answer

a We need to find $\frac{dA}{dt}$ when $r = 3$.

Radius increasing at a rate of $\frac{1}{5\pi} \text{ cm s}^{-1}$, so $\frac{dr}{dt} = \frac{1}{5\pi}$.

$$A = 4\pi r^2$$

Differentiate with respect to r .

$$\frac{dA}{dr} = 8\pi r$$

When $r = 3$, $\frac{dA}{dr} = 24\pi$

Using the chain rule, $\frac{dA}{dt} = \frac{dA}{dr} \times \frac{dr}{dt}$

$$= 24\pi \times \frac{1}{5\pi}$$

$$= 4.8$$

The surface area is increasing at a rate of $4.8 \text{ cm}^2 \text{ s}^{-1}$.

- b We need to find $\frac{dV}{dt}$ when $r = 5$.

$$V = \frac{4}{3} \pi r^3$$

Differentiate with respect to r .

$$\frac{dV}{dr} = 4\pi r^2$$

$$\text{When } r = 5, \frac{dV}{dr} = 100\pi$$

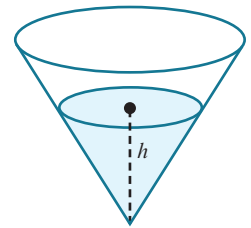
$$\begin{aligned} \text{Using the chain rule, } \frac{dV}{dt} &= \frac{dV}{dr} \times \frac{dr}{dt} \\ &= 100\pi \times \frac{1}{5\pi} \\ &= 20 \end{aligned}$$

The volume is increasing at a rate of $20 \text{ cm}^3 \text{ s}^{-2}$.

WORKED EXAMPLE 8.14

Water is poured into the conical container shown, at a rate of $2\pi \text{ cm}^3 \text{ s}^{-1}$.

After t seconds, the volume of water in the container, $V \text{ cm}^3$, is given by $V = \frac{1}{12} \pi h^3$, where $h \text{ cm}$ is the height of the water in the container.



- a Find the rate of change of h when $h = 5$.
 b Given that the container has radius 10 cm and height 20 cm , find the rate of change of h when the container is half full. Give your answer correct to 3 significant figures.

Answer

- a We need to find $\frac{dh}{dt}$ when $h = 5$.

Volume increasing at a rate of $2\pi \text{ cm}^3 \text{ s}^{-1}$, so $\frac{dV}{dt} = 2\pi$.

$$V = \frac{1}{12} \pi h^3$$

Differentiate with respect to h .

$$\frac{dV}{dh} = \frac{1}{4} \pi h^2$$

$$\text{When } h = 5, \frac{dV}{dh} = \frac{25\pi}{4}$$

$$\begin{aligned} \text{Using the chain rule, } \frac{dh}{dt} &= \frac{dh}{dV} \times \frac{dV}{dt} \\ &= \frac{4}{25\pi} \times 2\pi \\ &= 0.32 \end{aligned}$$

The height is increasing at a rate of 0.32 cm s^{-1} .

$$\text{b Volume when half full} = \frac{1}{2} \left[\frac{1}{12} \pi h^3 \right] = \frac{1}{2} \left[\frac{1}{12} \pi (20)^3 \right] = \frac{1000}{3} \pi$$

$$\text{Using } V = \frac{1}{12} \pi h^3, \quad \frac{1}{12} \pi h^3 = \frac{1000}{3} \pi$$

$$h^3 = 4000$$

$$h = 15.874$$

$$\text{When } h = 15.874, \quad \frac{dV}{dh} = \frac{1}{4} \pi (15.874)^2 = 197.9$$

$$\begin{aligned} \text{Using the chain rule, } \frac{dh}{dt} &= \frac{dh}{dV} \times \frac{dV}{dt} \\ &= \frac{1}{197.9} \times 2\pi \\ &= 0.0317 \text{ cm s}^{-1} \end{aligned}$$

EXERCISE 8E

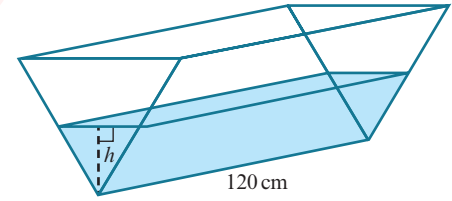
- A circle has radius r cm and area A cm².
The radius is increasing at a rate of 0.1 cm s⁻¹.
Find the rate of increase of A when $r = 4$.
- A sphere has radius r cm and volume V cm³.
The radius is increasing at a rate of $\frac{1}{2\pi}$ cm s⁻¹.
Find the rate of increase of the volume when $V = 36\pi$.
- A cone has base radius r cm and a fixed height of 30 cm.
The radius of the base is increasing at a rate of 0.01 cm s⁻¹.
Find the rate of change of the volume when $r = 5$.
- A square has side length x cm and area A cm².
The area is increasing at a constant rate of 0.03 cm² s⁻¹.
Find the rate of increase of x when $A = 25$.
- A cube has sides of length x cm and volume V cm³.
The volume is increasing at a rate of 1.5 cm³ s⁻¹.
Find the rate of increase of x when $V = 8$.
- A solid metal cuboid has dimensions x cm by x cm by $4x$ cm.
The cuboid is heated and the volume increases at a rate of 0.15 cm³ s⁻¹.
Find the rate of increase of x when $x = 2$.
- A closed circular cylinder has radius r cm and surface area A cm², where $A = 2\pi r^2 + \frac{400\pi}{r}$.
Given that the radius of the cylinder is increasing at a rate of 0.25 cm s⁻¹, find the rate of change of A when $r = 10$.

- 8 The diagram shows a water container in the shape of a triangular prism of length 120 cm.

The vertical cross-section is an equilateral triangle.

Water is poured into the container at a rate of $24 \text{ cm}^3 \text{ s}^{-1}$.

- a Show that the volume of water in the container, $V \text{ cm}^3$, is given by $V = 40\sqrt{3}h^2$, where $h \text{ cm}$ is the height of the water in the container.
- b Find the rate of change of h when $h = 12$.

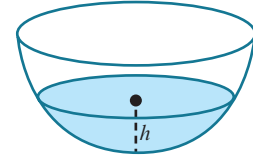


- 9 Water is poured into the hemispherical bowl of radius 5 cm at a rate of $3\pi \text{ cm}^3 \text{ s}^{-1}$.

After t seconds, the volume of water in the bowl, $V \text{ cm}^3$, is given by

$$V = 5\pi h^2 - \frac{1}{3}\pi h^3, \text{ where } h \text{ cm is the height of the water in the bowl.}$$

- a Find the rate of change of h when $h = 1$.
- b Find the rate of change of h when $h = 3$.

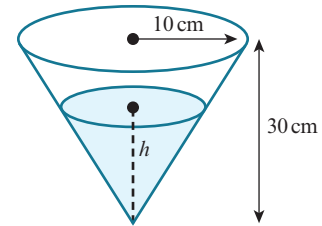


- 10 The diagram shows a right circular cone with radius 10 cm and height 30 cm.

The cone is initially completely filled with water.

Water leaks out of the cone through a small hole at the vertex at a rate of $4 \text{ cm}^3 \text{ s}^{-1}$.

- a Show that the volume of water in the cone, $V \text{ cm}^3$, when the height of the water is $h \text{ cm}$ is given by the formula $V = \frac{\pi h^3}{27}$.
- b Find the rate of change of h when $h = 20$.



- 11 Oil is poured onto a flat surface and a circular patch is formed.

The radius of the patch increases at a rate of $2\sqrt{r} \text{ cm s}^{-1}$.

Find the rate at which the area is increasing when the circumference is $8\pi \text{ cm}$.

- 12 Paint is poured onto a flat surface and a circular patch is formed.

The area of the patch increases at a rate of $5 \text{ cm}^2 \text{ s}^{-1}$.

- a Find, in terms of π , the radius of the patch after 8 seconds.
- b Find, in terms of π , the rate of increase of the radius after 8 seconds.

PS

- 13 A cylindrical container of radius 8 cm and height 25 cm is completely filled with water.

The water is then poured at a constant rate from the cylinder into an empty inverted cone.

The cone has radius 15 cm and height 24 cm and its axis is vertical.

It takes 40 seconds for all of the water to be transferred.

- a If V represents the volume of water, in cm^3 , in the cone at time t seconds, find $\frac{dV}{dt}$ in terms of π .
- b When the depth of the water in the cone is 10 cm, find:
- the rate of change of the height of the water in the cone
 - the rate of change of the horizontal surface area of the water in the cone.

Checklist of learning and understanding

Increasing and decreasing functions

- $y = f(x)$ is increasing for a given interval of x if $\frac{dy}{dx} > 0$ throughout the interval.
- $y = f(x)$ is decreasing for a given interval of x if $\frac{dy}{dx} < 0$ throughout the interval.

Stationary points

- Stationary points (turning points) of a function $y = f(x)$ occur when $\frac{dy}{dx} = 0$.

First derivative test for maximum and minimum points

At a maximum point:

- $\frac{dy}{dx} = 0$
- the gradient is positive to the left of the maximum and negative to the right.

At a minimum point:

- $\frac{dy}{dx} = 0$
- the gradient is negative to the left of the minimum and positive to the right.

Second derivative test for maximum and minimum points

- If $\frac{dy}{dx} = 0$ and $\frac{d^2y}{dx^2} < 0$, then the point is a maximum point.
- If $\frac{dy}{dx} = 0$ and $\frac{d^2y}{dx^2} > 0$, then the point is a minimum point.
- If $\frac{dy}{dx} = 0$ and $\frac{d^2y}{dx^2} = 0$, then the nature of the stationary point can be found using the first derivative test.

Connected rates of change

- When two variables, x and y , both vary with a third variable, t , the three variables can be connected using the chain rule: $\frac{dy}{dt} = \frac{dy}{dx} \times \frac{dx}{dt}$.
- You may also need to use the rule: $\frac{dx}{dy} = \frac{1}{\frac{dy}{dx}}$.

END-OF-CHAPTER REVIEW EXERCISE 8

- 1 The volume of a spherical balloon is increasing at a constant rate of 40 cm^3 per second. Find the rate of increase of the radius of the balloon when the radius is 15 cm.

[The volume, V , of a sphere with radius r is $V = \frac{4}{3} \pi r^3$.] [4]

- 2 An oil pipeline under the sea is leaking oil and a circular patch of oil has formed on the surface of the sea. At midday the radius of the patch of oil is 50 m and is increasing at a rate of 3 metres per hour. Find the rate at which the area of the oil is increasing at midday. [4]

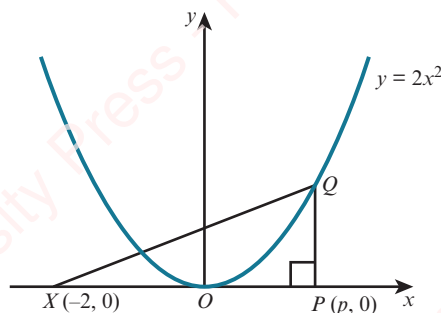
Cambridge International AS & A Level Mathematics 9709 Paper 11 Q3 November 2012

- 3 A curve has equation $y = 27x - \frac{4}{(x+2)^2}$. Show that the curve has a stationary point at $x = -\frac{8}{3}$ and determine its nature. [5]

- 4 A watermelon is assumed to be spherical in shape while it is growing. Its mass, M kg, and radius, r cm, are related by the formula $M = kr^3$, where k is a constant. It is also assumed that the radius is increasing at a constant rate of 0.1 centimetres per day. On a particular day the radius is 10 cm and the mass is 3.2 kg. Find the value of k and the rate at which the mass is increasing on this day. [5]

Cambridge International AS & A Level Mathematics 9709 Paper 11 Q4 June 2012

- 5



The diagram shows the curve $y = 2x^2$ and the points $X(-2, 0)$ and $P(p, 0)$. The point Q lies on the curve and PQ is parallel to the y -axis.

- i Express the area, A , of triangle XPQ in terms of p . [2]

The point P moves along the x -axis at a constant rate of 0.02 units per second and Q moves along the curve so that PQ remains parallel to the y -axis.

- ii Find the rate at which A is increasing when $p = 2$. [3]

Cambridge International AS & A Level Mathematics 9709 Paper 11 Q2 June 2015

- 6



A farmer divides a rectangular piece of land into 8 equal-sized rectangular sheep pens as shown in the diagram. Each sheep pen measures x m by y m and is fully enclosed by metal fencing. The farmer uses 480 m of fencing.

- i Show that the total area of land used for the sheep pens, $A \text{ m}^2$, is given by $A = 384x - 9.6x^2$. [3]

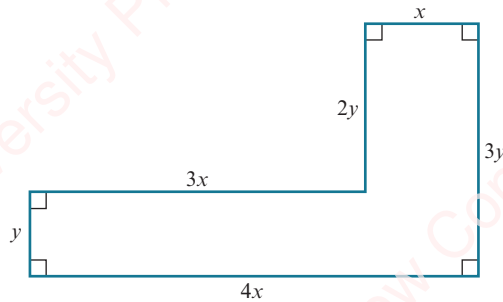
- ii Given that x and y can vary, find the dimensions of each sheep pen for which the value of A is a maximum. (There is no need to verify that the value of A is a maximum.) [3]

Cambridge International AS & A Level Mathematics 9709 Paper 11 Q5 June 2016

- 7 The variables x , y and z can take only positive values and are such that $z = 3x + 2y$ and $xy = 600$.
- Show that $z = 3x + \frac{1200}{x}$. [1]
 - Find the stationary value of z and determine its nature. [6]

Cambridge International AS & A Level Mathematics 9709 Paper 11 Q6 June 2011

8



The diagram shows the dimensions in metres of an L-shaped garden. The perimeter of the garden is 48 m.

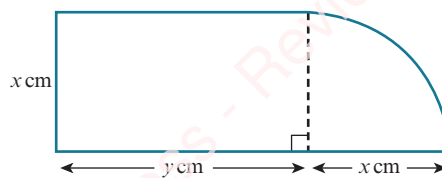
- Find an expression for y in terms of x . [1]
- Given that the area of the garden is $A \text{ m}^2$, show that $A = 48x - 8x^2$. [2]
- Given that x can vary, find the maximum area of the garden, showing that this is a maximum value rather than a minimum value. [4]

Cambridge International AS & A Level Mathematics 9709 Paper 11 Q7 November 2011

- 9 A curve has equation $y = \frac{8}{x} + 2x$.
- Find $\frac{dy}{dx}$ and $\frac{d^2y}{dx^2}$. [3]
 - Find the coordinates of the stationary points and state, with a reason, the nature of each stationary point. [5]

Cambridge International AS & A Level Mathematics 9709 Paper 11 Q5 November 2015

10



The diagram shows a metal plate consisting of a rectangle with sides $x \text{ cm}$ and $y \text{ cm}$ and a quarter-circle of radius $x \text{ cm}$. The perimeter of the plate is 60 cm.

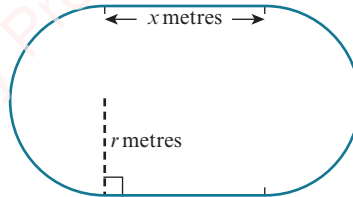
- Express y in terms of x . [2]
 - Show that the area of the plate, $A \text{ cm}^2$, is given by $A = 30x - x^2$. [2]
- Given that x can vary,
- find the value of x at which A is stationary, [2]
 - find this stationary value of A , and determine whether it is a maximum or a minimum value. [2]

Cambridge International AS & A Level Mathematics 9709 Paper 11 Q8 November 2010

- 11 A curve has equation $y = x^3 + x^2 - 5x + 7$.
- a Find the set of values of x for which the gradient of the curve is less than 3. [4]
- b Find the coordinates of the two stationary points on the curve and determine the nature of each stationary point. [5]



12



The inside lane of a school running track consists of two straight sections each of length x metres, and two semicircular sections each of radius r metres, as shown in the diagram. The straight sections are perpendicular to the diameters of the semicircular sections. The perimeter of the inside lane is 400 metres.

- i Show that the area, $A \text{ m}^2$, of the region enclosed by the inside lane is given by $A = 400r - \pi r^2$. [4]
- ii Given that x and r can vary, show that, when A has a stationary value, there are no straight sections in the track. Determine whether the stationary value is a maximum or a minimum. [5]

Cambridge International AS & A Level Mathematics 9709 Paper 11 Q8 November 2013



13 The equation of a curve is $y = x^3 + px^2$, where p is a positive constant.

- i Show that the origin is a stationary point on the curve and find the coordinates of the other stationary point in terms of p . [4]
- ii Find the nature of each of the stationary points. [3]
- Another curve has equation $y = x^3 + px^2 + px$.
- iii Find the set of values of p for which this curve has no stationary points. [3]

Cambridge International AS & A Level Mathematics 9709 Paper 11 Q9 June 2015

Chapter 9

Integration

In this chapter you will learn how to:

- understand integration as the reverse process of differentiation, and integrate $(ax + b)^n$ (for any rational n except -1), together with constant multiples, sums and differences
- solve problems involving the evaluation of a constant of integration
- evaluate definite integrals
- use definite integration to find the:
 - area of a region bounded by a curve and lines parallel to the axes, or between a curve and a line, or between two curves
 - volume of revolution about one of the axes.

PREREQUISITE KNOWLEDGE

Where it comes from	What you should be able to do	Check your skills
IGCSE / O Level Mathematics	Substitute values for x and y into equations of the form $y = f(x) + c$ and solve to find c .	1 a Given that the line $y = 5x + c$ passes through the point $(3, -4)$, find the value of c . b Given that the curve $y = x^2 - 2x + c$ passes through the point $(-1, 2)$, find the value of c .
IGCSE / O Level Mathematics	Find the x -coordinates of the points where a curve crosses the x -axis.	2 Find the x -coordinates of the points where the curve crosses the x -axis. a $y = 3x^2 - 13x - 10$ b $y = 3\sqrt{x} - x$
Chapter 7	Differentiate constant multiples, sums and differences of expressions containing terms of the form ax^n .	3 Find $\frac{dy}{dx}$. a $y = 3x^8 - 13x - 10$ b $y = 5x^2 - 4x + 10\sqrt{x}$

Why do we study integration?

In Chapters 7 and 8 you studied differentiation, which is the first basic tool of calculus. In this chapter you will learn about integration, which is the second basic tool of calculus. We often refer to integration as the reverse process of differentiation. It has many applications; for example, planning spacecraft flight paths, or modelling real-world behaviour for computer games.

Isaac Newton and Gottfried Wilhelm Leibniz formulated the principles of integration independently, in the 17th century, by thinking of an integral as an infinite sum of rectangles of infinitesimal width.



WEB LINK

Explore the *Calculus meets functions* station on the Underground Mathematics website.

239

9.1 Integration as the reverse of differentiation

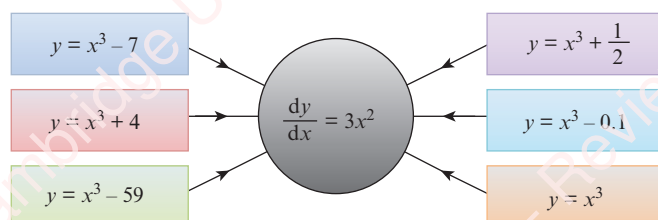
In Chapter 7, you learnt about the process of obtaining $\frac{dy}{dx}$ when y is known. We call this process differentiation.

You learnt the rule for differentiating power functions:

KEY POINT 9.1

$$\text{If } y = x^n, \text{ then } \frac{dy}{dx} = nx^{n-1}.$$

Applying this rule to functions of the form $y = x^3 + c$, we obtain:



This shows that there are an infinite number of functions that when differentiated give the answer $3x^2$. They are all of the form $y = x^3 + c$, where c is some constant.

In this chapter you will learn about the reverse process of obtaining y when $\frac{dy}{dx}$ is known.

We can call this reverse process **antidifferentiation**.

There is a seemingly unrelated problem that you will study in Section 9.6: what is the area under the graph of $y = 3x^2$? The process used to answer that question is known as **integration**. There is a remarkable theorem due to both Newton and Leibniz that says that *integration is essentially the same as antidifferentiation*. This is now known as the Fundamental theorem of Calculus.

Because of this theorem, we do not need to use the term antidifferentiation. So from now on, we will only talk about **integration**, whether we are reversing the process of differentiation or finding the area under a graph.

EXPLORE 9.1

1 Find $\frac{dy}{dx}$ for each of the following functions.

a $y = \frac{1}{3}x^3 - 2$

b $y = \frac{1}{6}x^6 + 8$

c $y = \frac{1}{15}x^{15} + 1$

d $y = -\frac{1}{2}x^{-2} + 3$

e $y = -\frac{1}{7}x^{-7} + 0.2$

f $y = \frac{2}{3}x^{\frac{3}{2}} - \frac{5}{8}$

2 Discuss your results with those of your classmates and try to find a rule for obtaining y if $\frac{dy}{dx} = x^n$.

3 Describe your rule, in words.

4 Discuss with your classmates whether your rule works for finding y when $\frac{dy}{dx} = \frac{1}{x}$.

240

From the class discussion we can conclude that:

KEY POINT 9.2

If $\frac{dy}{dx} = x^n$, then $y = \frac{1}{n+1}x^{n+1} + c$ (where c is an arbitrary constant and $n \neq -1$).

You may find it easier to remember this in words:

'Increase the power n by 1 to obtain the new power, then divide by the new power. Remember to add a constant c at the end.'

Using function notation we write this rule as:

KEY POINT 9.3

If $f'(x) = x^n$, then $f(x) = \frac{1}{n+1}x^{n+1} + c$ (where c is an arbitrary constant and $n \neq -1$).

The special symbol \int is used to denote integration.

When we need to integrate x^3 , for example, we write:

$$\int x^3 dx = \frac{1}{4} x^4 + c$$

$\int x^3 dx$ is called the **indefinite integral** of x^3 with respect to x .

We call it 'indefinite' because it has infinitely many solutions.

Using this notation, we can write the rule for integrating powers as:

KEY POINT 9.4

$$\int x^n dx = \frac{1}{n+1} x^{n+1} + c \quad (\text{where } c \text{ is a constant and } n \neq -1).$$

We write the rule for integrating constant multiples of a function as:

KEY POINT 9.5

$$\int kf(x) dx = k \int f(x) dx, \text{ where } k \text{ is a constant.}$$

We write the rule for integrating sums and differences of two functions as:

KEY POINT 9.6

$$\int [f(x) \pm g(x)] dx = \int f(x) dx \pm \int g(x) dx$$

WORKED EXAMPLE 9.1

Find y in terms of x for each of the following.

a $\frac{dy}{dx} = x^3$

b $\frac{dy}{dx} = \frac{1}{x^2}$

c $\frac{dy}{dx} = x\sqrt{x}$

Answer

a $\frac{dy}{dx} = x^3$

$$y = \frac{1}{3+1} x^{3+1} + c$$

$$= \frac{1}{4} x^4 + c$$

b $\frac{dy}{dx} = x^{-2}$

$$y = \frac{1}{-2+1} x^{-2+1} + c$$

$$= -x^{-1} + c$$

$$= -\frac{1}{x} + c$$

c $\frac{dy}{dx} = x^{\frac{3}{2}}$

$$y = \frac{1}{\frac{3}{2}+1} x^{\frac{3}{2}+1} + c$$

$$= \frac{1}{\left(\frac{5}{2}\right)} x^{\frac{5}{2}} + c$$

$$= \frac{2}{5} x^{\frac{5}{2}} + c$$

WORKED EXAMPLE 9.2

Find $f(x)$ in terms of x for each of the following.

a $f'(x) = 4x^3 - \frac{2}{x^2} + 4$

b $f'(x) = 8x^2 - \frac{1}{2x^4} + 2x$

c $f'(x) = \frac{(x+3)(x-1)}{\sqrt{x}}$

Answer

a $f'(x) = 4x^3 - 2x^{-2} + 4x^0$ Write in index form ready for integration.

$$\begin{aligned} f(x) &= \frac{4}{4}x^4 - \frac{2}{(-1)}x^{-1} + \frac{4}{1}x^1 + c \\ &= x^4 + 2x^{-1} + 4x + c \\ &= x^4 + \frac{2}{x} + 4x + c \end{aligned}$$

b $f'(x) = 8x^2 - \frac{1}{2}x^{-4} + 2x^1$ Write in index form ready for integration.

$$\begin{aligned} f(x) &= \frac{8}{3}x^3 - \frac{1}{2(-3)}x^{-3} + \frac{2}{2}x^2 + c \\ &= \frac{8}{3}x^3 + \frac{1}{6}x^{-3} + x^2 + c \\ &= \frac{8}{3}x^3 + \frac{1}{6x^3} + x^2 + c \end{aligned}$$

c $f'(x) = \frac{x^2 + 2x - 3}{\sqrt{x}}$ Write in index form ready for integration.

$$\begin{aligned} &= x^{\frac{3}{2}} + 2x^{\frac{1}{2}} - 3x^{-\frac{1}{2}} \\ f(x) &= \frac{1}{\left(\frac{5}{2}\right)}x^{\frac{5}{2}} + \frac{2}{\left(\frac{3}{2}\right)}x^{\frac{3}{2}} - \frac{3}{\left(\frac{1}{2}\right)}x^{\frac{1}{2}} + c \\ &= \frac{2}{5}x^{\frac{5}{2}} + \frac{4}{3}x^{\frac{3}{2}} - 6\sqrt{x} + c \end{aligned}$$

WORKED EXAMPLE 9.3

Find:

a $\int x(2x-1)(2x+3) dx$

b $\int \frac{4x^2 - 3\sqrt{x}}{x} dx$

Answer

a $\int x(2x-1)(2x+3) dx = \int (4x^3 + 4x^2 - 3x) dx$

$$\begin{aligned} &= \frac{4x^4}{4} + \frac{4x^3}{3} - \frac{3x^2}{2} + c \\ &= x^4 + \frac{4x^3}{3} - \frac{3x^2}{2} + c \end{aligned}$$

$$\begin{aligned}
 \text{b } \int \frac{4x^2 - 3\sqrt{x}}{x} dx &= \int \left(4x - 3x^{-\frac{1}{2}} \right) dx \\
 &= \frac{4}{2}x^2 - \frac{3}{\left(\frac{1}{2}\right)}x^{\frac{1}{2}} + c \\
 &= 2x^2 - 6x^{\frac{1}{2}} + c \\
 &= 2x^2 - 6\sqrt{x} + c
 \end{aligned}$$

EXERCISE 9A

1 Find y in terms of x for each of the following.

a $\frac{dy}{dx} = 15x^2$

b $\frac{dy}{dx} = 14x^6$

c $\frac{dy}{dx} = 12x^3$

d $\frac{dy}{dx} = \frac{3}{x^2}$

e $\frac{dy}{dx} = \frac{1}{2x^3}$

f $\frac{dy}{dx} = \frac{4}{\sqrt{x}}$

2 Find $f(x)$ in terms of x for each of the following.

a $f'(x) = 5x^4 - 2x^3 + 2$

b $f'(x) = 3x^5 + x^2 - 2x$

c $f'(x) = \frac{2}{x^3} + \frac{8}{x^2} + 6x$

d $f'(x) = \frac{9}{x^7} - \frac{3}{x^2} - 4$

3 Find y in terms of x for each of the following.

a $\frac{dy}{dx} = x(x+5)$

b $\frac{dy}{dx} = 2x^2(3x+1)$

c $\frac{dy}{dx} = x(x+2)(x-8)$

d $\frac{dy}{dx} = \frac{x^4 - 2x + 5}{2x^3}$

e $\frac{dy}{dx} = \sqrt{x}(x-3)^2$

f $\frac{dy}{dx} = \frac{5x^2 + 3x + 1}{\sqrt{x}}$

4 Find each of the following.

a $\int 12x^5 dx$

b $\int 20x^3 dx$

c $\int 3x^{-2} dx$

d $\int \frac{4}{x^3} dx$

e $\int \frac{2}{3\sqrt{x}} dx$

f $\int \frac{5}{x\sqrt{x}} dx$

5 Find each of the following.

a $\int (x+1)(x+4) dx$

b $\int (x-3)^2 dx$

c $\int (2\sqrt{x}-1)^2 dx$

d $\int \sqrt[3]{x}(x^2+1) dx$

e $\int \frac{x^2-1}{2x^2} dx$

f $\int \frac{x^3+6}{2x^3} dx$

g $\int \frac{x^2+2\sqrt{x}}{3x} dx$

h $\int \frac{x^4-10}{x\sqrt{x}} dx$

i $\int \left(2\sqrt{x} - \frac{3}{x^2\sqrt{x}} \right)^2 dx$

9.2 Finding the constant of integration

The next two examples show how we can find the equation of a curve if we know the gradient function and the coordinates of a point on the curve.

WORKED EXAMPLE 9.4

A curve is such that $\frac{dy}{dx} = \frac{6x^5 - 18}{x^3}$, and $(1, 6)$ is a point on the curve.

Find the equation of the curve.

Answer

$$\frac{dy}{dx} = \frac{6x^5 - 18}{x^3}$$

$$= 6x^2 - 18x^{-3}$$

$$y = 2x^3 + 9x^{-2} + c$$

$$= 2x^3 + \frac{9}{x^2} + c$$

When $x = 1$, $y = 6$.

$$6 = 2(1)^3 + \frac{9}{(1)^2} + c$$

$$6 = 2 + 9 + c$$

$$c = -5$$

The equation of the curve is $y = 2x^3 + \frac{9}{x^2} - 5$.

Write in index form ready for integration.

WORKED EXAMPLE 9.5

The function f is such that $f'(x) = 15x^4 - 6x$ and $f(-1) = 1$. Find $f(x)$.

Answer

$$f'(x) = 15x^4 - 6x$$

$$f(x) = 3x^5 - 3x^2 + c$$

Using $f(-1) = 1$ gives:

$$1 = 3(-1)^5 - 3(-1)^2 + c$$

$$1 = -3 - 3 + c$$

$$c = 7$$

$$\therefore f(x) = 3x^5 - 3x^2 + 7$$

WORKED EXAMPLE 9.6

A curve is such that $\frac{dy}{dx} = 6x + k$, where k is a constant. The gradient of the normal to the curve at the point $(1, -3)$ is $\frac{1}{2}$. Find the equation of the curve.

Answer

$$\frac{dy}{dx} = 6x + k$$

Integrate.

$$y = 3x^2 + kx + c$$

When $x = 1$, $y = -3$.

$$-3 = 3(1)^2 + k(1) + c$$

$$c + k = -6 \text{ ----- (1)}$$

When $x = 1$, $\frac{dy}{dx} = 6(1) + k = 6 + k$

Gradient of normal = $\frac{1}{2}$ so gradient of tangent = -2

$$6 + k = -2$$

$$k = -8$$

Substituting for k into (1) gives $c = 2$.

The equation of the curve is $y = 3x^2 - 8x + 2$.

EXERCISE 9B

- Find the equation of the curve, given $\frac{dy}{dx}$ and a point P on the curve.
 - $\frac{dy}{dx} = 3x^2 + 1$, $P = (1, 4)$
 - $\frac{dy}{dx} = 2x(3x - 1)$, $P = (-1, 2)$
 - $\frac{dy}{dx} = \frac{4}{x^2}$, $P = (4, 9)$
 - $\frac{dy}{dx} = \frac{2x^3 - 6}{x^2}$, $P = (3, 7)$
 - $\frac{dy}{dx} = \frac{2}{\sqrt{x}} - 1$, $P = (4, 6)$
 - $\frac{dy}{dx} = \frac{(1 - \sqrt{x})^2}{\sqrt{x}}$, $P = (9, 5)$
- A curve is such that $\frac{dy}{dx} = -\frac{k}{x^2}$, where k is a constant. Given that the curve passes through the points $(6, 2.5)$ and $(-3, 1)$, find the equation of the curve.
- A curve is such that $\frac{dy}{dx} = kx^2 - 12x + 5$, where k is a constant. Given that the curve passes through the points $(1, -3)$ and $(3, 11)$, find the equation of the curve.
- A curve is such that $\frac{dy}{dx} = kx^2 - \frac{6}{x^3}$, where k is a constant. Given that the curve passes through the point $P(1, 6)$ and that the gradient of the curve at P is 9, find the equation of the curve.

- 5 A curve is such that $\frac{dy}{dx} = 5x\sqrt{x} + 2$. Given that the curve passes through the point (1, 3), find:
- the equation of the curve
 - the equation of the tangent to the curve when $x = 4$.
- 6 A curve is such that $\frac{dy}{dx} = kx + 3$, where k is a constant. The gradient of the normal to the curve at the point (1, -2) is $-\frac{1}{7}$. Find the equation of the curve.
- 7 A function $y = f(x)$ has gradient function $f'(x) = 8 - 2x$. The maximum value of the function is 20. Find $f(x)$ and sketch the graph of $y = f(x)$.
- 8 A curve is such that $\frac{dy}{dx} = 3x^2 + x - 10$. Given that the curve passes through the point (2, -7) find:
- the equation of the curve
 - the set of values of x for which the gradient of the curve is positive.
- PS** 9 A curve is such that $\frac{d^2y}{dx^2} = 12x + 12$. The gradient of the curve at the point (0, 4) is 10.
- Express y in terms of x .
 - Show that the gradient of the curve is never less than 4.
- 10 A curve is such that $\frac{d^2y}{dx^2} = -6x - 4$. Given that the curve has a minimum point at (-2, -6), find the equation of the curve.
- 11 A curve $y = f(x)$ has a stationary point at $P(2, -13)$ and is such that $f'(x) = 2x^2 + 3x - k$, where k is a constant.
- Find the x -coordinate of the other stationary point, Q , on the curve $y = f(x)$.
 - Determine the nature of each of the stationary points P and Q .
- PS** 12 A curve is such that $\frac{dy}{dx} = k + x$, where k is a constant.
- Given that the tangents to the curve at the points where $x = 5$ and $x = 7$ are perpendicular, find the value of k .
 - Given also that the curve passes through the point (10, -8), find the equation of the curve.
- 13 A curve $y = f(x)$ has a stationary point at (1, -1) and is such that $f''(x) = 2 + \frac{4}{x^3}$. Find $f'(x)$ and $f(x)$.
- 14 A curve is such that $\frac{d^2y}{dx^2} = 2x + 8$. Given that the curve has a minimum point at (3, -49), find the coordinates of the maximum point.
- 15 A curve is such that $\frac{dy}{dx} = 3 - 2x$ and (1, 11) is a point on the curve.
- Find the equation of the curve.
 - A line with gradient $\frac{1}{5}$ is a normal to the curve at the point (4, 5). Find the equation of this normal.
- 16 A curve is such that $\frac{dy}{dx} = 3\sqrt{x} - 6$ and the point $P(1, 6)$ is a point on the curve.
- Find the equation of the curve.
 - Find the coordinates of the stationary point on the curve and determine its nature.

- 17 A curve is such that $\frac{d^2y}{dx^2} = 2 - \frac{12}{x^3}$. The curve has a stationary point at P where $x = 1$. Given that the curve passes through the point $(2, 5)$, find the coordinates of the stationary point P and determine its nature.
- 18 A curve is such that $\frac{dy}{dx} = 2x - 5$ and the point $P(3, -4)$ is a point on the curve. The normal to the curve at P meets the curve again at Q .
- Find the equation of the curve.
 - Find the equation of the normal to the curve at P .
 - Find the coordinates of Q .

9.3 Integration of expressions of the form $(ax + b)^n$

In Chapter 7 you learnt that:

$$\frac{d}{dx} \left[\frac{1}{3 \times 7} (3x - 1)^7 \right] = (3x - 1)^6$$

$$\text{Hence, } \int (3x - 1)^6 dx = \frac{1}{3 \times 7} (3x - 1)^7 + c$$

This leads to the general rule:

KEY POINT 9.7

$$\text{If } n \neq -1 \text{ and } a \neq 0, \text{ then } \int (ax + b)^n dx = \frac{1}{a(n+1)} (ax + b)^{n+1} + c$$

It is very important to note that this rule *only* works for powers of linear functions.

For example, $\int (ax^2 + b)^6 dx$ is not equal to $\frac{1}{3a} (ax^2 + b)^3 + c$. (Try differentiating the latter expression to see why.)

WORKED EXAMPLE 9.7

Find:

a $\int (2x - 3)^4 dx$

b $\int \frac{20}{(1 - 4x)^6} dx$

c $\int \frac{5}{\sqrt{2x + 7}} dx$

Answer

a
$$\begin{aligned} \int (2x - 3)^4 dx &= \frac{1}{2(4+1)} (2x - 3)^{4+1} + c \\ &= \frac{1}{10} (2x - 3)^5 + c \end{aligned}$$

b
$$\begin{aligned} \int \frac{20}{(1 - 4x)^6} dx &= 20 \int (1 - 4x)^{-6} dx \\ &= \frac{20}{(-4)(-6+1)} (1 - 4x)^{-6+1} + c \\ &= (1 - 4x)^{-5} + c \\ &= \frac{1}{(1 - 4x)^5} + c \end{aligned}$$

$$\begin{aligned}
 \text{c } \int \frac{5}{\sqrt{2x+7}} dx &= 5 \int (2x+7)^{-\frac{1}{2}} dx \\
 &= \frac{5}{2\left(-\frac{1}{2}+1\right)} (2x+7)^{-\frac{1}{2}+1} + c \\
 &= 5\sqrt{2x+7} + c
 \end{aligned}$$

EXERCISE 9C

1 Find:

a $\int (2x-7)^8 dx$

b $\int (3x+1)^5 dx$

c $\int 2(5x-2)^8 dx$

d $\int 3(1-2x)^5 dx$

e $\int \sqrt[3]{5-4x} dx$

f $\int \sqrt{(2x+1)^3} dx$

g $\int \frac{2}{\sqrt{3x-2}} dx$

h $\int \left(\frac{2}{2x+1}\right)^3 dx$

i $\int \frac{5}{4(7-2x)^5} dx$

2 Find the equation of the curve, given $\frac{dy}{dx}$ and a point P on the curve.

a $\frac{dy}{dx} = (2x-1)^3$, $P = \left(\frac{3}{2}, 4\right)$

b $\frac{dy}{dx} = \sqrt{2x+5}$, $P = (2, 2)$

c $\frac{dy}{dx} = \frac{1}{\sqrt{x-2}}$, $P = (3, 7)$

d $\frac{dy}{dx} = \frac{4}{(3-2x)^2}$, $P = (2, 4)$

3 A curve is such that $\frac{dy}{dx} = k(x-5)^3$, where k is a constant. The gradient of the normal to the curve at the point $(4, 2)$ is $\frac{1}{12}$. Find the equation of the curve.4 A curve is such that $\frac{dy}{dx} = \frac{5}{\sqrt{2x-3}}$.Given that the curve passes through the point $P(2, 1)$, find:a the equation of the normal to the curve at P

b the equation of the curve.

5 A curve is such that $\frac{dy}{dx} = \frac{12}{\sqrt{3x+1}} - 4x - 2$.a Show that the curve has a stationary point when $x = 1$ and determine its nature.b Given that the curve passes through the point $(0, 13)$, find the equation of the curve.

PS 6 A curve is such that $\frac{dy}{dx} = \frac{4}{\sqrt{2x+k}}$, where k is a constant. The point $P(3, 2)$ lies on the curve and the normal to the curve at P is $x + 4y = 11$. Find the equation of the curve.

9.4 Further indefinite integration

In this section we use the concept that integration is the reverse process of differentiation to help us integrate some more complicated expressions.

KEY POINT 9.8

If $\frac{d}{dx} [F(x)] = f(x)$, then $\int f(x) dx = F(x) + c$

WORKED EXAMPLE 9.8

- a Show that $\frac{d}{dx} [(3x^2 - 4)^8] = 48x(3x^2 - 4)^7$. b Hence, find $\int 6x(3x^2 - 4)^7 dx$.

Answer

- a Let $y = (3x^2 - 4)^8$ Use the chain rule.

$$\begin{aligned}\frac{dy}{dx} &= (6x)(8)(3x^2 - 4)^{8-1} \\ &= 48x(3x^2 - 4)^7\end{aligned}$$

- b $\int 6x(3x^2 - 4)^7 dx = \frac{1}{8} \int 48x(3x^2 - 4)^7 dx$
 $= \frac{1}{8} (3x^2 - 4)^8 + c$

EXERCISE 9D

- a Differentiate $(x^2 + 2)^4$ with respect to x .

b Hence, find $\int x(x^2 + 2)^3 dx$.
- a Differentiate $(2x^2 - 1)^5$ with respect to x .

b Hence, find $\int x(2x^2 - 1)^4 dx$.
- a Given that $y = \frac{1}{x^2 - 5}$, show that $\frac{dy}{dx} = \frac{kx}{(x^2 - 5)^2}$, and state the value of k .

b Hence, find $\int \frac{4x}{(x^2 - 5)^2} dx$.
- a Differentiate $\frac{1}{4 - 3x^2}$ with respect to x .

b Hence, find $\int \frac{3x}{(4 - 3x^2)^2} dx$.
- a Differentiate $(x^2 - 3x + 5)^6$ with respect to x .

b Hence, find $\int 2(2x - 3)(x^2 - 3x + 5)^5 dx$.
- a Differentiate $(\sqrt{x} + 3)^8$ with respect to x .

b Hence, find $\int \frac{(\sqrt{x} + 3)^7}{\sqrt{x}} dx$.

7 a Differentiate $(2x\sqrt{x} - 1)^5$ with respect to x .

b Hence, find $\int 3\sqrt{x}(2x\sqrt{x} - 1)^4 dx$.

9.5 Definite integration

In the remaining sections of this chapter, you will be learning how to find areas and volumes of various shapes. To do this, you will be using a technique known as definite integration, which is an extension of the indefinite integrals you have been using up to now. In this section, you will learn this technique, before going on to apply it in the next section.

Recall that

$$\int x^3 dx = \frac{1}{4}x^4 + c,$$

where c is an arbitrary constant, is called the indefinite integral of x^3 with respect to x .

We can integrate a function between two specified limits.

We write the integral of the function x^3 with respect to x between the limits $x = 2$ and $x = 4$ as:

$$\int_2^4 x^3 dx$$

The method for evaluating this integral is:

$$\begin{aligned} \int_2^4 x^3 dx &= \left[\frac{1}{4}x^4 + c \right]_2^4 \\ &= \left(\frac{1}{4} \times 4^4 + c \right) - \left(\frac{1}{4} \times 2^4 + c \right) \\ &= 60 \end{aligned}$$

Note that the ' c 's cancel out, so the process can be simplified to:

$$\begin{aligned} \int_2^4 x^3 dx &= \left[\frac{1}{4}x^4 \right]_2^4 \\ &= \left(\frac{1}{4} \times 4^4 \right) - \left(\frac{1}{4} \times 2^4 \right) \\ &= 60 \end{aligned}$$

$\int_2^4 x^3 dx$ is called the **definite integral** of x^3 with respect to x between the limits 2 and 4.

Hence, we can write the evaluation of a definite integral as:

KEY POINT 9.9

$$\int_a^b f(x) dx = [F(x)]_a^b = F(b) - F(a)$$

The following rules for definite integrals may also be used.



TIP

The limits of integration are always written either to the right of the integral sign, as printed, or directly below and above it. They should never be written to the left of the integral sign.

KEY POINT 9.10

$$\int_a^b kf(x) dx = k \int_a^b f(x) dx, \text{ where } k \text{ is a constant}$$

$$\int_a^b [f(x) \pm g(x)] dx = \int_a^b f(x) dx \pm \int_a^b g(x) dx$$

$$\int_a^b f(x) dx = - \int_b^a f(x) dx$$

KEY POINT 9.11

$$\int_a^b f(x) dx + \int_b^c f(x) dx = \int_a^c f(x) dx$$

WORKED EXAMPLE 9.9

Evaluate:

a $\int_1^2 \frac{6x^4 - 1}{x^2} dx$

b $\int_0^3 \sqrt{5x+1} dx$

c $\int_{-2}^1 \frac{8}{(5-2x)^2} dx$

Answer

a
$$\int_1^2 \frac{6x^4 - 1}{x^2} dx = \int_1^2 (6x^2 - x^{-2}) dx$$

$$= \left[\frac{6}{3} x^3 + x^{-1} \right]_1^2$$

$$= (2(2)^3 + (2)^{-1}) - (2(1)^3 + (1)^{-1})$$

$$= \left(16 + \frac{1}{2} \right) - (2 + 1)$$

$$= 13\frac{1}{2}$$

b
$$\int_0^3 \sqrt{5x+1} dx = \int_0^3 (5x+1)^{\frac{1}{2}} dx$$

$$= \left[\frac{1}{(5)\left(\frac{3}{2}\right)} (5x+1)^{\frac{3}{2}} \right]_0^3$$

$$= \left[\frac{2}{15} (5x+1)^{\frac{3}{2}} \right]_0^3$$

$$= \left(\frac{2}{15} \times 16^{\frac{3}{2}} \right) - \left(\frac{2}{15} \times 1^{\frac{3}{2}} \right)$$

$$= \left(\frac{128}{15} \right) - \left(\frac{2}{15} \right)$$

$$= 8\frac{2}{5}$$

$$\begin{aligned}
 \text{c } \int_{-2}^1 \frac{8}{(5-2x)^2} dx &= \int_{-2}^1 8(5-2x)^{-2} dx \\
 &= \left[\frac{8}{(-2)(-1)} (5-2x)^{-1} \right]_{-2}^1 \\
 &= \left[\frac{4}{5-2x} \right]_{-2}^1 \\
 &= \left(\frac{4}{3} \right) - \left(\frac{4}{9} \right) \\
 &= \frac{8}{9}
 \end{aligned}$$

EXERCISE 9E

1 Evaluate:

a $\int_1^2 3x^2 dx$

b $\int_1^3 \frac{4}{x^3} dx$

c $\int_{-1}^1 (2x-3) dx$

d $\int_0^3 (10-x^2) dx$

e $\int_{-1}^2 (4x^2-2x) dx$

f $\int_2^4 \left(2 - \frac{6}{x^2} \right) dx$

2 Evaluate:

a $\int_1^2 \left(3x^2 - 2 + \frac{1}{x^2} \right) dx$

b $\int_{-2}^{-1} \left(\frac{8-x^2}{x^2} \right) dx$

c $\int_1^2 (x+3)(7-2x) dx$

d $\int_0^1 \sqrt{x}(1-x) dx$

e $\int_1^2 \frac{(3-x)(8+x)}{x^4} dx$

f $\int_1^4 \left(3\sqrt{x} + \frac{2}{\sqrt{x}} \right) dx$

3 Evaluate:

a $\int_{-1}^0 (2x+3)^3 dx$

b $\int_0^4 \sqrt{2x+1} dx$

c $\int_1^2 \sqrt{(x-1)^3} dx$

d $\int_{-1}^1 \frac{6}{(x-2)^2} dx$

e $\int_2^3 \frac{9}{(2x-3)^3} dx$

f $\int_{-2}^2 \frac{4}{\sqrt{5-2x}} dx$

4 a Given that $y = \frac{2}{x^2+5}$, find $\frac{dy}{dx}$.

b Hence, evaluate $\int_0^2 \frac{2x}{(x^2+5)^2} dx$.

5 a Given that $y = (x^3-2)^5$, find $\frac{dy}{dx}$.

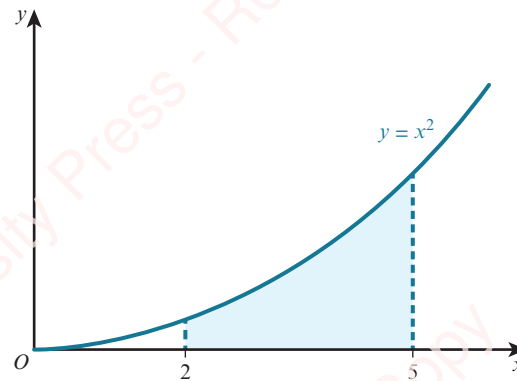
b Hence, evaluate $\int_0^1 x^2(x^3-2)^4 dx$.

6 a Given that $y = \frac{(\sqrt{x}+1)^5}{10}$, find $\frac{dy}{dx}$.

b Hence, evaluate $\int_1^4 \frac{(\sqrt{x}+1)^4}{\sqrt{x}} dx$.

9.6 Area under a curve

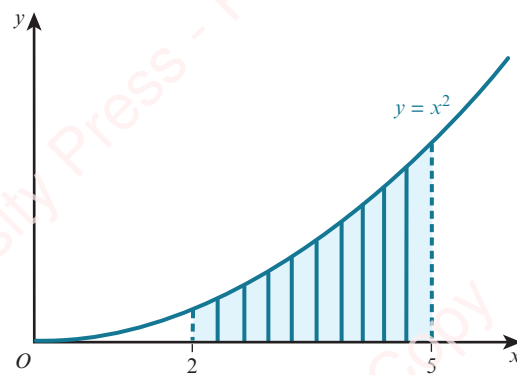
Consider the area bounded by the curve $y = x^2$, the x -axis and the lines $x = 2$ and $x = 5$.



The area, A , of the region can be approximated by a series of rectangular strips of thickness δx (corresponding to a small increase in x) and height y (corresponding to the height of the function).

The approximation for A is then $\sum y\delta x$.

As $\delta x \rightarrow 0$, then $A \rightarrow \int_2^5 y dx$.



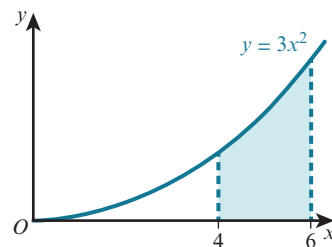
This leads to the general rule:

KEY POINT 9.11

If $y = f(x)$ is a function with $y \geq 0$, then the area, A , bounded by the curve $y = f(x)$, the x -axis and the lines $x = a$ and $x = b$ is given by the formula $A = \int_a^b y dx$.

WORKED EXAMPLE 9.10

Find the area of the shaded region.



Answer

$$\begin{aligned} \text{Area} &= \int_4^6 3x^2 \, dx \\ &= \left[\frac{3}{3} x^3 \right]_4^6 \\ &= (216) - (64) \\ &= 152 \text{ units}^2 \end{aligned}$$

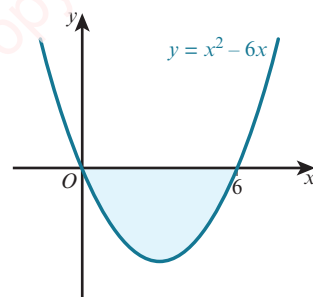
In Worked example 9.10, the required area is above the x -axis.

If the required area lies below the x -axis, then $\int_a^b f(x) \, dx$ will have a negative value. This is because the integral is summing the y values, and these are all negative.

254

WORKED EXAMPLE 9.11

Find the area of the shaded region.



Answer

$$\begin{aligned} \int_0^6 (x^2 - 6x) \, dx &= \left[\frac{1}{3} x^3 - \frac{6}{2} x^2 \right]_0^6 \\ &= (72 - 108) - (0 - 0) \\ &= -36 \end{aligned}$$

Area is 36 units².

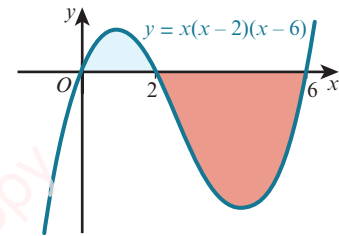
The required region could consist of a section above the x -axis and a section below the x -axis.

If this happens we must evaluate each area separately.

This is illustrated in Worked example 9.12.

WORKED EXAMPLE 9.12

Find the total area of the shaded regions.



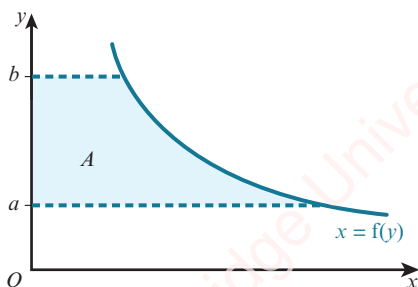
Answer

$$\begin{aligned} \int_0^2 x(x-2)(x-6) dx &= \int_0^2 (x^3 - 8x^2 + 12x) dx \\ &= \left[\frac{1}{4}x^4 - \frac{8}{3}x^3 + 6x^2 \right]_0^2 \\ &= \left(\frac{1}{4}(2)^4 - \frac{8}{3}(2)^3 + 6(2)^2 \right) - \left(\frac{1}{4}(0)^4 - \frac{8}{3}(0)^3 + 6(0)^2 \right) \\ &= \left(6\frac{2}{3} \right) - (0) \\ &= 6\frac{2}{3} \end{aligned}$$

$$\begin{aligned} \int_2^6 x(x-2)(x-6) dx &= \int_2^6 (x^3 - 8x^2 + 12x) dx \\ &= \left[\frac{1}{4}x^4 - \frac{8}{3}x^3 + 6x^2 \right]_2^6 \\ &= \left(\frac{1}{4}(6)^4 - \frac{8}{3}(6)^3 + 6(6)^2 \right) - \left(\frac{1}{4}(2)^4 - \frac{8}{3}(2)^3 + 6(2)^2 \right) \\ &= (-36) - \left(6\frac{2}{3} \right) \\ &= -42\frac{2}{3} \end{aligned}$$

Hence, the total area of the shaded regions = $6\frac{2}{3} + 42\frac{2}{3} = 49\frac{1}{3}$ units².

Area enclosed by a curve and the y -axis



KEY POINT 9.13

If $x = f(y)$ is a function with $x \geq 0$, then the area, A , bounded by the curve $x = f(y)$, the y -axis and the lines $y = a$ and $y = b$ is given by the formula $A = \int_a^b x \, dy$ when $x \geq 0$.

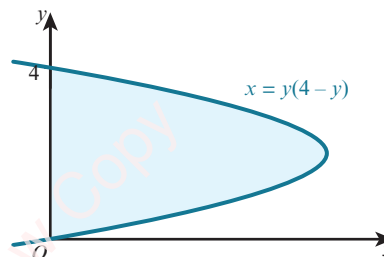
WORKED EXAMPLE 9.13

Find the area of the shaded region.

Answer

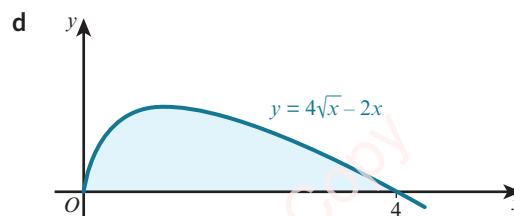
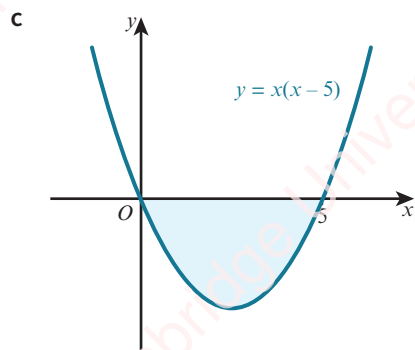
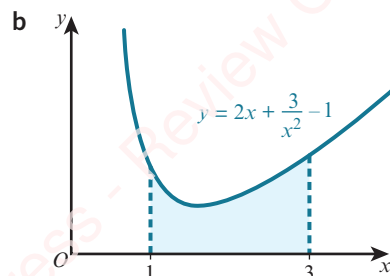
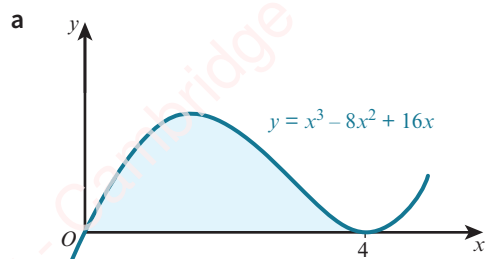
$$\begin{aligned} \text{Area} &= \int_0^4 x \, dy \\ &= \int_0^4 (4y - y^2) \, dy \\ &= \left[\frac{4}{2} y^2 - \frac{1}{3} y^3 \right]_0^4 \\ &= \left(2(4)^2 - \frac{1}{3} (4)^3 \right) - \left(2(0)^2 - \frac{1}{3} (0)^3 \right) \\ &= 10\frac{2}{3} \end{aligned}$$

Area is $10\frac{2}{3}$ units².

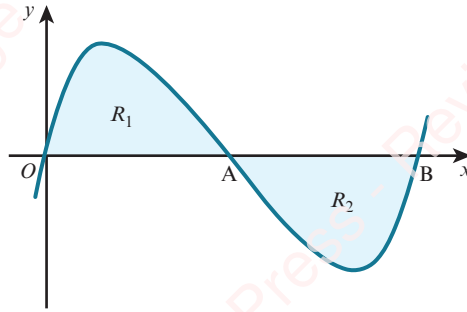


EXERCISE 9F

1 Find the area of each shaded region.



2



The diagram shows the curve $y = x(x-2)(x-4)$ that crosses the x -axis at the points $O(0, 0)$, $A(2, 0)$ and $B(4, 0)$.

Show by integration that the area of the shaded region R_1 is the same as the area of the shaded region R_2 .

3 Sketch the curve and find the total area bounded by the curve and the x -axis for each of these functions.

a $y = x(x-3)(x+1)$

b $y = x(x^2 - 9)$

c $y = x(2x-1)(x+2)$

d $y = (x-1)(x+1)(x-4)$

4 Sketch the curve and find the enclosed area for each of the following.

a $y = x^4 - 6x^2 + 9$, the x -axis and the lines $x = 0$ and $x = 1$

b $y = 2x + \frac{5}{x^2}$, the x -axis and the lines $x = 1$ and $x = 2$

c $y = 5 + \frac{8}{x^3}$, the x -axis and the lines $x = 2$ and $x = 5$

d $y = 3\sqrt{x}$, the x -axis and the lines $x = 1$ and $x = 4$

e $y = \frac{4}{\sqrt{x}}$, the x -axis and the lines $x = 1$ and $x = 9$

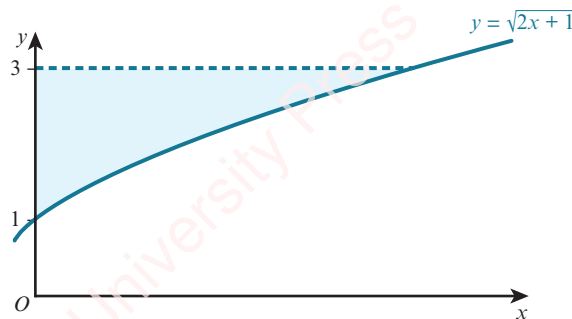
f $y = \sqrt{2x+3}$, the x -axis and the line $x = 3$

5 Sketch the curve and find the enclosed area for each of the following.

a $y = x^3$, the y -axis and the lines $y = 8$ and $y = 27$

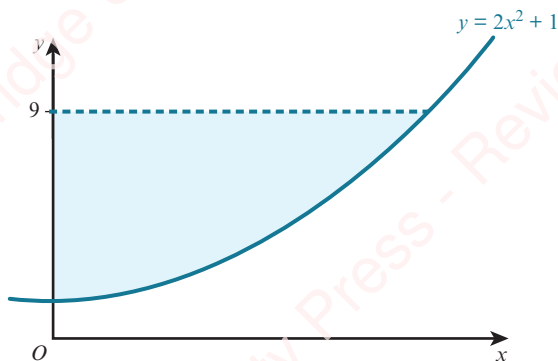
b $x = y^2 + 1$, the y -axis and the lines $y = -1$ and $y = 2$

6



The diagram shows the curve $y = \sqrt{2x+1}$. The shaded region is bounded by the curve, the y -axis and the line $y = 3$. Find the area of the shaded region.

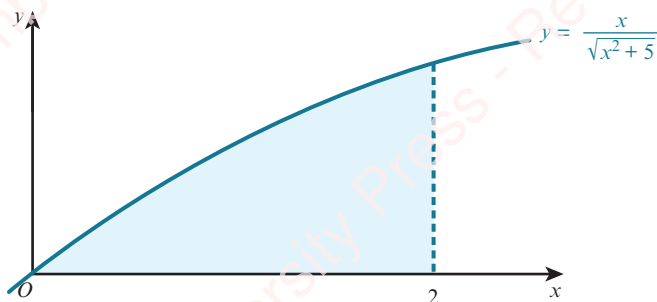
7



Find the area of the region bounded by the curve $y = 2x^2 + 1$, the line $y = 9$ and the y -axis.

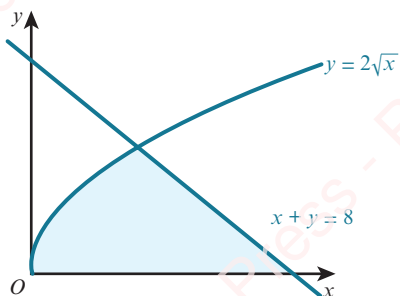
- 8 a Find the area of the region enclosed by the curve $y = \frac{12}{x^2}$, the x -axis and the lines $x = 1$ and $x = 4$.
- b The line $x = p$ divides the region in part a into two parts of equal area. Find the value of p .

9



- a Show that $\frac{d}{dx}(\sqrt{x^2 + 5}) = \frac{x}{\sqrt{x^2 + 5}}$.
- b Use your result from part a to evaluate the area of the shaded region.

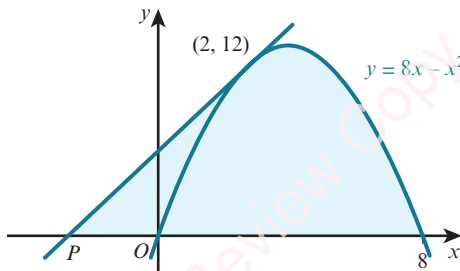
10



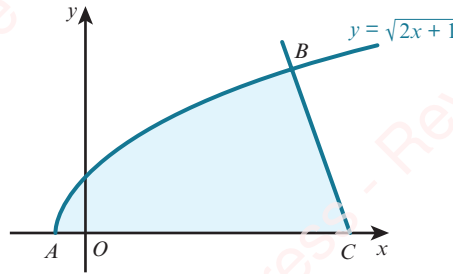
Find the shaded area enclosed by the curve $y = 2\sqrt{x}$, the line $x + y = 8$ and the x -axis.

- 11 The tangent to the curve $y = 8x - x^2$ at the point $(2, 12)$ cuts the x -axis at the point P .

- a Find the coordinates of P .
- b Find the area of the shaded region.

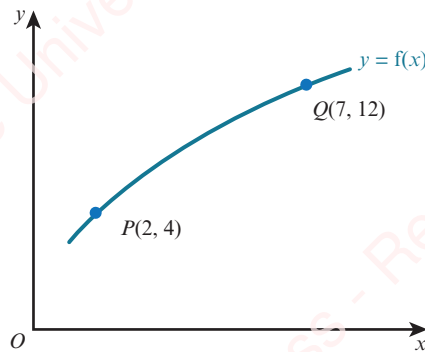


12



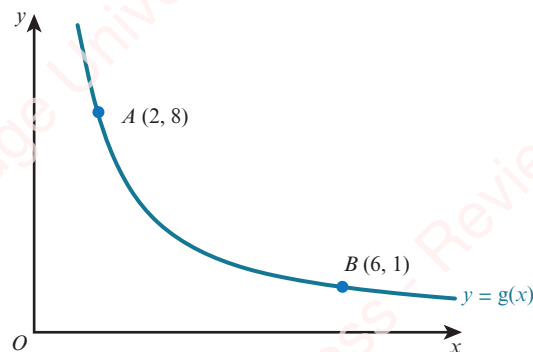
The diagram shows the curve $y = \sqrt{2x+1}$ that intersects the x -axis at A . The normal to the curve at $B(4, 3)$ meets the x -axis at C . Find the area of the shaded region.

PS 13



The figure shows part of the curve $y = f(x)$. The points $P(2, 4)$ and $Q(7, 12)$ lie on the curve. Given that $\int_2^7 y \, dx = 42$, find the value of $\int_4^{12} x \, dy$.

PS 14



The figure shows part of the curve $y = g(x)$. The points $A(2, 8)$ and $B(6, 1)$ lie on the curve. Given that $\int_2^6 y \, dx = 16$, find the value of $\int_1^8 x \, dy$.



WEB

Try the following resources on the Underground Mathematics website:

- *What else do you know?*
- *Slippery areas.*

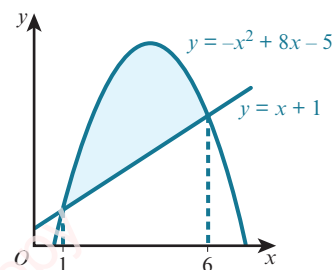
9.7 Area bounded by a curve and a line or by two curves

The following example shows a possible method for finding the area enclosed by a curve and a straight line.

WORKED EXAMPLE 9.14

The diagram shows the curve $y = -x^2 + 8x - 5$ and the line $y = x + 1$ that intersect at the points $(1, 2)$ and $(6, 7)$.

Find the area of the shaded region.



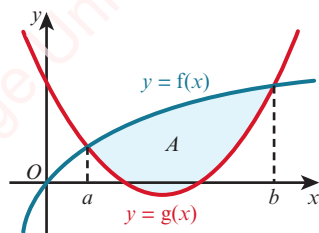
Answer

Area = area under curve – area of trapezium

$$\begin{aligned} &= \int_1^6 (-x^2 + 8x - 5) dx - \frac{1}{2} \times (2 + 7) \times 5 \\ &= \left[-\frac{1}{3}x^3 + 4x^2 - 5x \right]_1^6 - 22\frac{1}{2} \\ &= \left(-\frac{1}{3}(6)^3 + 4(6)^2 - 5(6) \right) - \left(-\frac{1}{3}(1)^3 + 4(1)^2 - 5(1) \right) - 22\frac{1}{2} \\ &= 20\frac{5}{6} \text{ units}^2 \end{aligned}$$

260

There is an alternative method for finding the shaded area in Worked example 9.14.

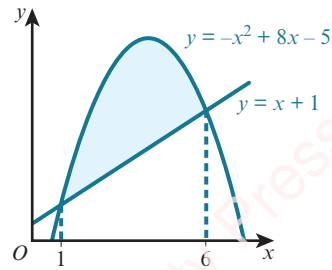


If two functions, $f(x)$ and $g(x)$, intersect at $x = a$ and $x = b$, then the area, A , enclosed between the two curves is given by:

KEY POINT 9.14

$$A = \int_a^b f(x) dx - \int_a^b g(x) dx \quad \text{or} \quad A = \int_a^b [f(x) - g(x)] dx$$

So for the area enclosed by $y = -x^2 + 8x - 5$ and $y = x + 1$:



Using $f(x) = -x^2 + 8x - 5$ and $g(x) = x + 1$ gives:

$$\begin{aligned}
 \text{Area} &= \int_1^6 f(x) \, dx - \int_1^6 g(x) \, dx \\
 &= \int_1^6 (-x^2 + 8x - 5) \, dx - \int_1^6 (x + 1) \, dx \\
 &= \int_1^6 (-x^2 + 7x - 6) \, dx \\
 &= \left[-\frac{1}{3}x^3 + \frac{7}{2}x^2 - 6x \right]_1^6 \\
 &= \left(-\frac{1}{3}(6)^3 + \frac{7}{2}(6)^2 - 6(6) \right) - \left(-\frac{1}{3}(1)^3 + \frac{7}{2}(1)^2 - 6(1) \right) \\
 &= 20\frac{5}{6} \text{ units}^2
 \end{aligned}$$

This alternative method is the easiest method to use in the next example.

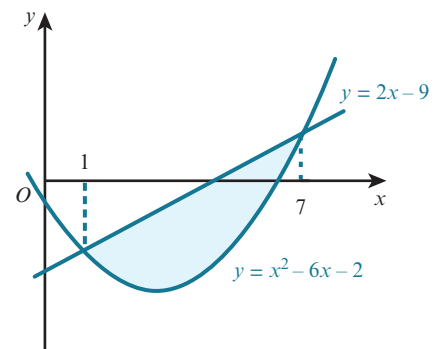
WORKED EXAMPLE 9.15

The diagram shows the curve $y = x^2 - 6x - 2$ and the line $y = 2x - 9$, which intersect when $x = 1$ and $x = 7$.

Find the area of the shaded region.

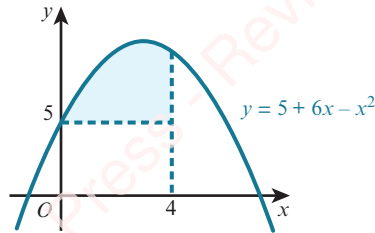
Answer

$$\begin{aligned}
 \text{Area} &= \int_1^7 (2x - 9) \, dx - \int_1^7 (x^2 - 6x - 2) \, dx \\
 &= \int_1^7 (-x^2 + 8x - 7) \, dx \\
 &= \left[-\frac{1}{3}x^3 + 4x^2 - 7x \right]_1^7 \\
 &= \left(-\frac{1}{3}(7)^3 + 4(7)^2 - 7(7) \right) - \left(-\frac{1}{3}(1)^3 + 4(1)^2 - 7(1) \right) \\
 &= 36 \text{ units}^2
 \end{aligned}$$



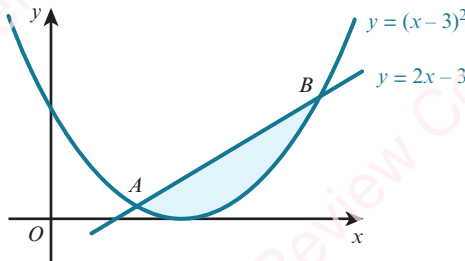
EXERCISE 9G

1



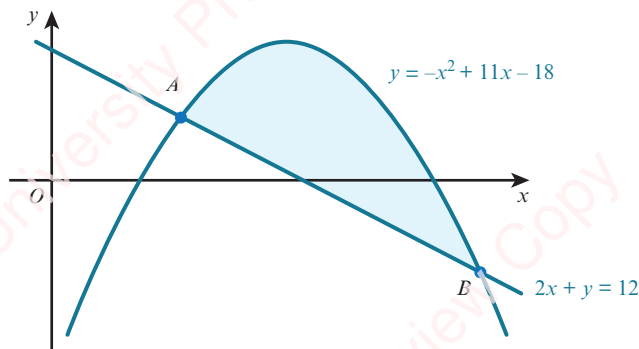
Find the area of the region bounded by the curve $y = 5 + 6x - x^2$, the line $x = 4$ and the line $y = 5$.

2



The diagram shows the curve $y = (x - 3)^2$ and the line $y = 2x - 3$ that intersect at points A and B . Find the area of the shaded region.

3



The diagram shows the curve $y = -x^2 + 11x - 18$ and the line $2x + y = 12$. Find the area of the shaded region.

4 Sketch the following curves and lines and find the area enclosed between their graphs.

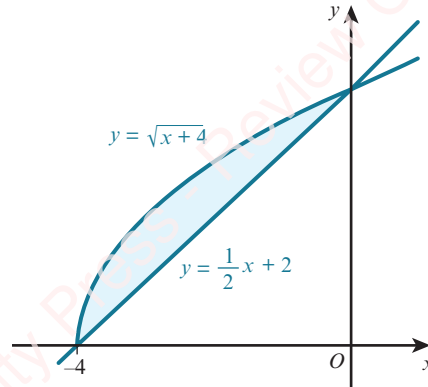
a $y = x^2 - 3$ and $y = 6$

b $y = -x^2 + 12x - 20$ and $y = 2x + 1$

c $y = x^2 - 4x + 4$ and $2x + y = 12$

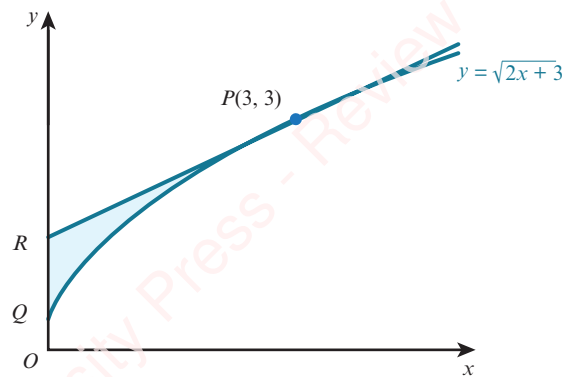
5 Sketch the curves $y = x^2$ and $y = x(2 - x)$ and find the area enclosed between the two curves.

6



The diagram shows the curve $y = \sqrt{x+4}$ and the line $y = \frac{1}{2}x + 2$ meeting at the points $(-4, 0)$ and $(0, 2)$. Find the area of the shaded region.

7

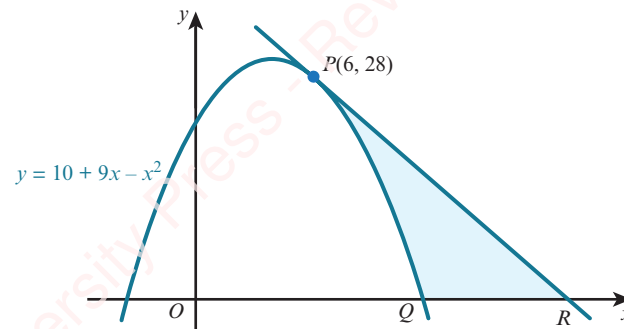


The curve $y = \sqrt{2x+3}$ meets the y-axis at the point Q.

The tangent at the point $P(3, 3)$ to this curve meets the y-axis at the point R.

- Find the equation of the tangent to the curve at P.
- Find the exact value of the area of the shaded region PQR.

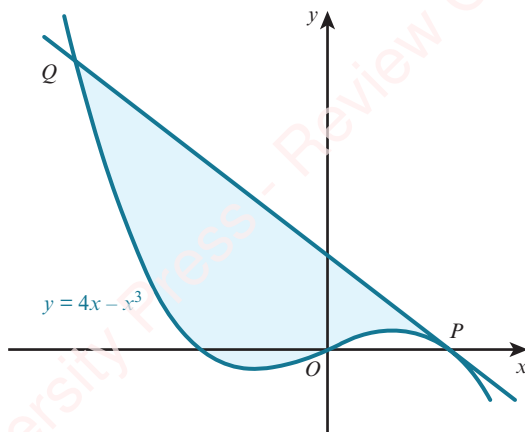
8



The diagram shows the curve $y = 10 + 9x - x^2$. Points $P(6, 28)$ and $Q(10, 0)$ lie on the curve. The tangent at P intersects the x-axis at R.

- Find the equation of the tangent to the curve at P.
- Find the area of the shaded region.

9

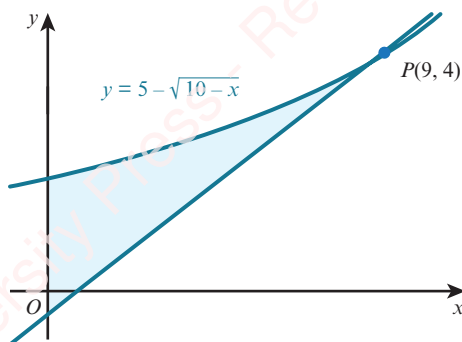


The diagram shows the curve $y = 4x - x^3$.

The point P has coordinates $(2, 0)$ and the point Q has coordinates $(-4, 43)$.

- Find the equation of the tangent to the curve at P .
- Find the area of the shaded region.

10



The diagram shows part of the curve $y = 5 - \sqrt{10 - x}$ and the tangent to the curve at $P(9, 4)$.

- Find the equation of the tangent to the curve at P .
- Find the area of the shaded region. Give your answer correct to 3 significant figures.

9.8 Improper integrals

In this section, we will consider what happens if some part of a definite integral becomes infinite. These are known as **improper integrals**, and we will look at two different types.

Type 1

These are definite integrals that have either one limit infinite or both limits infinite.

Examples of these are $\int_1^{\infty} \frac{1}{x^2} dx$ and $\int_{-\infty}^{-2} \frac{1}{x^3} dx$.



KEY POINT 9.15

We can evaluate integrals of the form $\int_a^{\infty} f(x) dx$ by replacing the infinite limit with a finite value, X , and then taking the limit as $X \rightarrow \infty$, provided the limit exists.

KEY POINT 9.16

We can evaluate integrals of the form $\int_{-\infty}^b f(x) dx$ by replacing the infinite limit with a finite value, X , and then taking the limit as $X \rightarrow -\infty$, provided the limit exists.

WORKED EXAMPLE 9.16

Show that the improper integral $\int_1^{\infty} \frac{1}{x^2} dx$ has a finite value and find this value.

Answer

$$\begin{aligned} \int_1^X \frac{1}{x^2} dx &= \int_1^X x^{-2} dx \\ &= [-x^{-1}]_1^X \\ &= \left(-\frac{1}{X}\right) - \left(-\frac{1}{1}\right) \\ &= 1 - \frac{1}{X} \end{aligned}$$

Write the integral with an upper limit X .

$$\text{As } X \rightarrow \infty, \frac{1}{X} \rightarrow 0$$

$$\therefore \int_1^{\infty} \frac{1}{x^2} dx = 1 - 0 = 1$$

Hence, the improper integral $\int_1^{\infty} \frac{1}{x^2} dx$ has a finite value of 1.

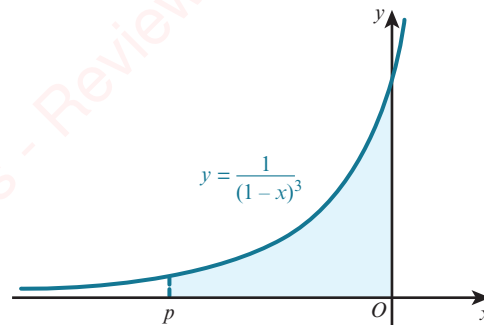
WORKED EXAMPLE 9.17

The diagram shows part of the curve $y = \frac{1}{(1-x)^3}$.

Show that as $p \rightarrow -\infty$, the shaded area tends to a finite value and find this value.

Answer

$$\begin{aligned} \text{Area} &= \int_p^0 \frac{1}{(1-x)^3} dx \\ &= \int_p^0 (1-x)^{-3} dx \\ &= \left[\frac{1}{(-2)(-1)} (1-x)^{-2} \right]_p^0 \\ &= \left[\frac{1}{2(1-x)^2} \right]_p^0 \\ &= \frac{1}{2} - \frac{1}{2(1-p)^2} \end{aligned}$$



As $p \rightarrow -\infty$, $\frac{1}{2(1-p)^2} \rightarrow 0$.

Hence, as $p \rightarrow -\infty$, the shaded area tends to a finite value of $\frac{1}{2}$.

Type 2

These are integrals where the function to be integrated approaches an infinite value (or approaches \pm infinity) at either or both end points in the interval (of integration).

For example, $\int_{-1}^1 \frac{1}{x^2} dx$ is an invalid integral because $\frac{1}{x^2}$ is not defined when $x = 0$.

However, $\int_0^1 \frac{1}{x^2} dx$ is an improper integral because $\frac{1}{x^2}$ tends to infinity as $x \rightarrow 0$ and it is well-defined everywhere else in the interval of integration.

For this section we will consider only those improper integrals where the function is not defined at one end of the interval.

KEY POINT 9.17

We can evaluate integrals of the form $\int_a^b f(x) dx$ where $f(x)$ is not defined when $x = a$ can be evaluated by replacing the limit a with an X and then taking the limit as $X \rightarrow a$, provided the limit exists.

266

KEY POINT 9.18

We can evaluate integrals of the form $\int_a^b f(x) dx$ where $f(x)$ is not defined when $x = b$ by replacing the limit b with an X and then taking the limit as $X \rightarrow b$, provided the limit exists.

WORKED EXAMPLE 9.18

Find the value, if it exists, of $\int_0^2 \frac{5}{x^2} dx$.

Answer

The function $f(x) = \frac{5}{x^2}$ is not defined when $x = 0$.

$$\begin{aligned} \int_0^2 \frac{5}{x^2} dx &= \int_X^2 5x^{-2} dx \\ &= [-5x^{-1}]_X^2 \\ &= \left(-\frac{5}{2}\right) - \left(-\frac{5}{X}\right) \\ &= \frac{5}{X} - \frac{5}{2} \end{aligned}$$

Write the integral with a lower limit X .

As $X \rightarrow 0$, $\frac{5}{X}$ tends to infinity.

Hence, $\int_0^2 \frac{5}{x^2} dx$ is undefined.

WORKED EXAMPLE 9.19

The diagram shows part of the curve $y = \frac{3}{\sqrt{2-x}}$.

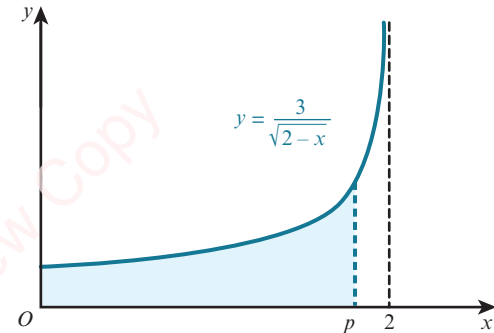
Show that as $p \rightarrow 2$ the shaded area tends to a finite value and find this value.

Answer

$$\begin{aligned} \text{Area} &= \int_0^p \frac{3}{\sqrt{2-x}} dx \\ &= \int_0^p 3(2-x)^{-\frac{1}{2}} dx \\ &= \left[\frac{3}{\left(\frac{1}{2}\right)(-1)} (2-x)^{\frac{1}{2}} \right]_0^p \\ &= [-6\sqrt{2-x}]_0^p \\ &= (-6\sqrt{2-p}) - (-6\sqrt{2}) \\ &= 6\sqrt{2} - 6\sqrt{2-p} \end{aligned}$$

$$\text{As } p \rightarrow 2, \int_0^p \frac{3}{\sqrt{2-x}} dx \rightarrow 6\sqrt{2}.$$

Hence, as $p \rightarrow 2$ the shaded area tends to a finite value of $6\sqrt{2}$.



EXERCISE 9H

1 Show that each of the following improper integrals has a finite value and, in each case, find this value.

a $\int_1^{\infty} \frac{2}{x^2} dx$

b $\int_4^{\infty} \frac{4}{x^5} dx$

c $\int_{-\infty}^{-2} \frac{10}{x^3} dx$

d $\int_4^{\infty} \frac{4}{x\sqrt{x}} dx$

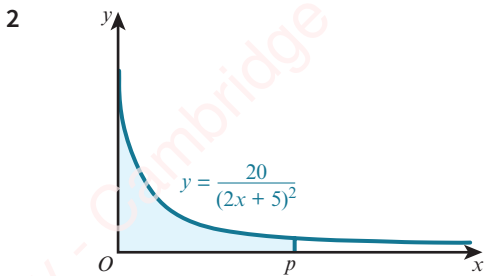
e $\int_0^{25} \frac{5}{\sqrt{x}} dx$

f $\int_4^8 \frac{4}{\sqrt{x-4}} dx$

g $\int_0^3 \frac{3}{\sqrt{3-x}} dx$

h $\int_2^{\infty} \frac{1}{(1-x)^2} dx$

i $\int_1^{\infty} \left(\frac{2}{x^2} + \frac{4}{(x+2)^3} \right) dx$



The diagram shows part of the curve $y = \frac{20}{(2x + 5)^2}$.

Show that as $p \rightarrow \infty$, the shaded area tends to the value 2.

3 Show that none of the following improper integrals exists.

a $\int_4^{\infty} \frac{6}{\sqrt{x}} dx$

b $\int_0^{\infty} \frac{4}{x\sqrt{x}} dx$

c $\int_0^9 \frac{12}{x^2\sqrt{x}} dx$

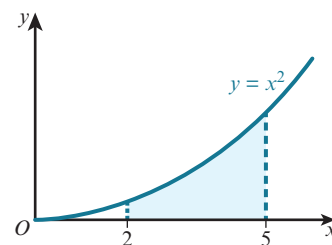
d $\int_5^{\infty} \frac{2}{\sqrt{x+4}} dx$

e $\int_{\frac{1}{2}}^2 \frac{5}{(2x-1)^2} dx$

f $\int_0^{25} \left(\sqrt{x} + \frac{1}{x^2} \right) dx$

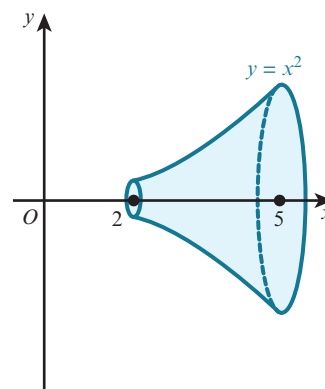
9.9 Volumes of revolution

Consider the area bounded by the curve $y = x^2$, the x -axis, and the lines $x = 2$ and $x = 5$.



When this area is rotated about the x -axis through 360° a **solid of revolution** is formed.

The volume of this solid is called a **volume of revolution**.

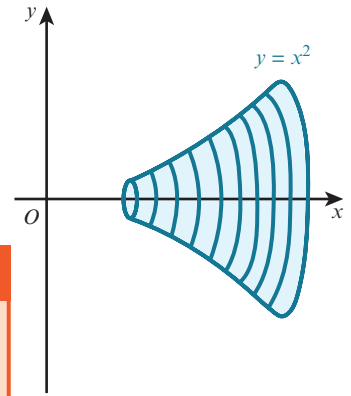


We can approximate the volume, V , of the solid by a series of cylindrical discs of thickness δx (corresponding to a small increase in x) and radius y (corresponding to the height of the function).

The volume of each cylindrical disc is $\pi y^2 \delta x$. An approximation for V is then $\sum \pi y^2 \delta x$.

As $\delta x \rightarrow 0$, then $V \rightarrow \int_2^5 \pi y^2 dx$.

This leads to a general formula:



KEY POINT 9.19

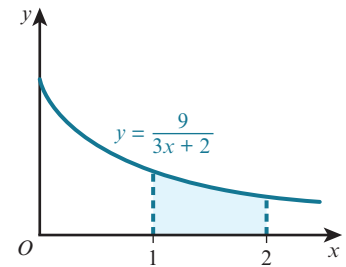
The volume, V , obtained when the function $y = f(x)$ is rotated through 360° about the x -axis between the boundary values $x = a$ and $x = b$ is given by the formula $V = \int_a^b \pi y^2 dx$.

WORKED EXAMPLE 9.20

Find the volume obtained when the shaded region is rotated through 360° about the x -axis.

Answer

$$\begin{aligned} \text{Volume} &= \pi \int_1^2 y^2 dx = \pi \int_1^2 \left(\frac{9}{3x+2} \right)^2 dx \\ &= \pi \int_1^2 81(3x+2)^{-2} dx \\ &= \pi \left[\frac{81}{3(-1)} (3x+2)^{-1} \right]_1^2 \\ &= \pi \left[\frac{-27}{(3x+2)} \right]_1^2 \\ &= \pi \left[\left(\frac{-27}{8} \right) - \left(\frac{-27}{5} \right) \right] \\ &= \frac{81\pi}{40} \text{ units}^3 \end{aligned}$$



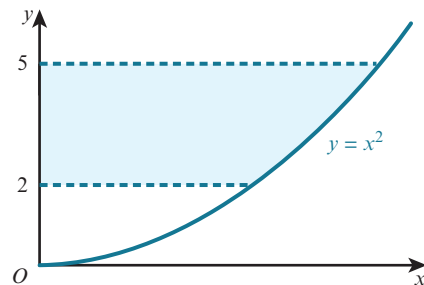
Sometimes a curve is rotated about the y -axis. In this case the general rule is:

KEY POINT 9.20

The volume, V , obtained when the function $x = f(y)$ is rotated through 360° about the y -axis between the boundary values $y = a$ and $y = b$ is given by the formula $V = \int_a^b \pi x^2 dy$.

WORKED EXAMPLE 9.21

Find the volume obtained when the shaded region is rotated through 360° about the y -axis.

**Answer**

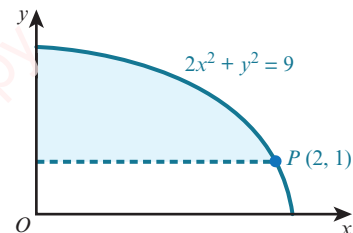
$$\begin{aligned} \text{Volume} &= \pi \int_2^5 x^2 \, dy = \pi \int_2^5 y \, dy \\ &= \pi \left[\frac{y^2}{2} \right]_2^5 \\ &= \pi \left[\left(\frac{25}{2} \right) - \left(\frac{4}{2} \right) \right] \\ &= \frac{21\pi}{2} \text{ units}^3 \end{aligned}$$

Using the given $y = x^2$.

270


WORKED EXAMPLE 9.22

Find the volume of the solid obtained when the shaded region is rotated through 360° about the x -axis.

**Answer**

When the shaded region is rotated about the x -axis, a solid with a cylindrical hole is formed.

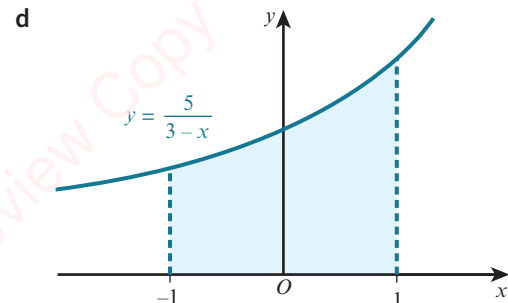
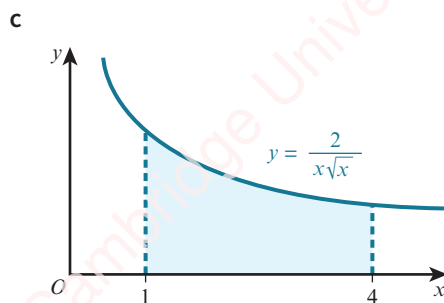
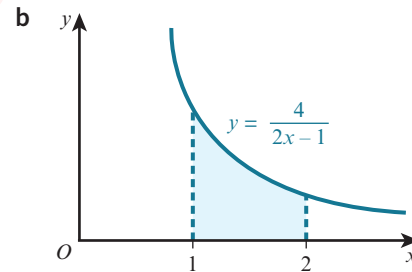
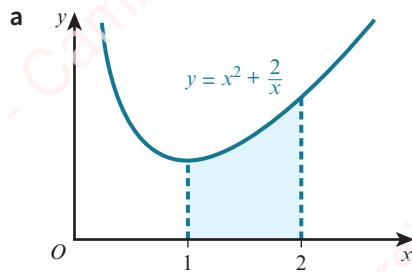
The radius of the cylindrical hole is 1 unit and the length of the hole is 2 units.



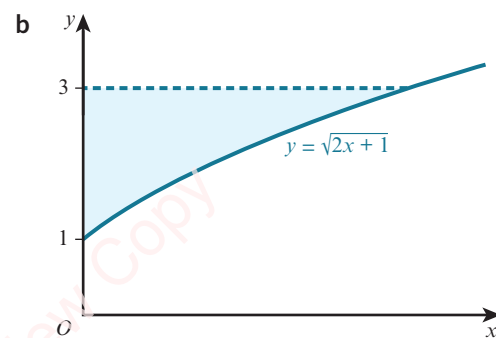
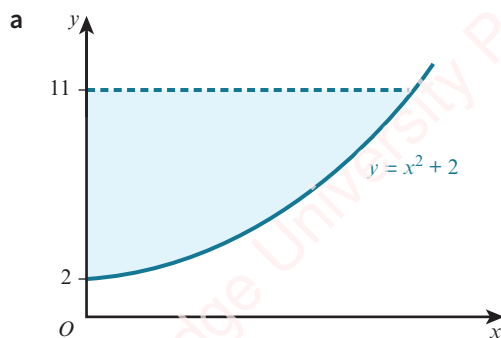
$$\begin{aligned} \text{Volume of solid} &= \pi \int_0^2 y^2 \, dx - \text{volume of cylinder} \\ &= \pi \int_0^2 (9 - 2x^2) \, dx - \pi \times r^2 \times h \\ &= \pi \left[9x - \frac{2}{3} x^3 \right]_0^2 - \pi \times 1^2 \times 2 \\ &= \pi \left[\left(18 - \frac{16}{3} \right) - (0 - 0) \right] - 2\pi \\ &= \frac{32\pi}{3} \text{ units}^3 \end{aligned}$$

EXERCISE 9I

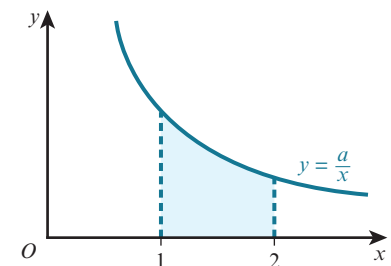
- 1 Find the volume obtained when the shaded region is rotated through 360° about the x -axis.



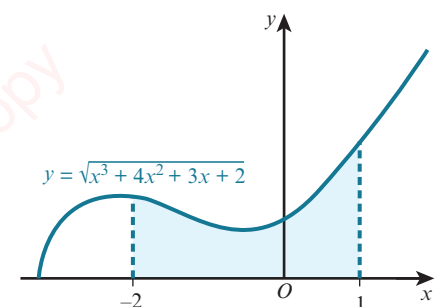
- 2 Find the volume obtained when the shaded region is rotated through 360° about the y -axis.



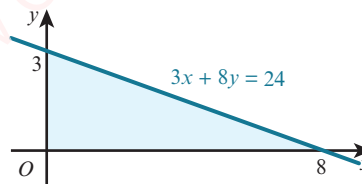
- 3 The diagram shows part of the curve $y = \frac{a}{x}$, where $a > 0$. The volume obtained when the shaded region is rotated through 360° about the x -axis is 18π . Find the value of a .



- 4 The diagram shows part of the curve $y = \sqrt{x^3 + 4x^2 + 3x + 2}$. Find the volume obtained when the shaded region is rotated through 360° about the x -axis.



- 5 The diagram shows part of the line $3x + 8y = 24$. Rotating the shaded region through 360° about the x -axis would give a cone of base radius 3 and perpendicular height 8.

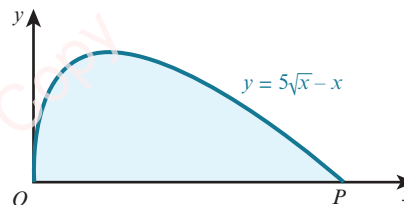


Find the volume of the cone using:

- integration
 - the formula for the volume of a cone.
- 6 a Sketch the graph of $y = (x - 2)^2$.
 b Find the volume of the solid formed when the enclosed region bounded by the curve, the x -axis and the y -axis is rotated through 360° about the x -axis.

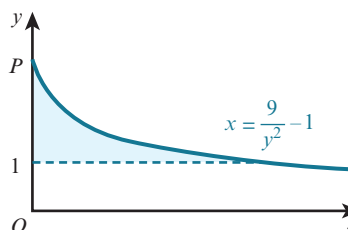
- 7 The diagram shows part of the curve $y = 5\sqrt{x} - x$.

The curve meets the x -axis at O and P .



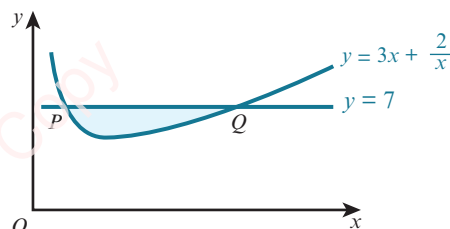
- Find the coordinates of P .
- Find the volume obtained when the shaded region is rotated through 360° about the x -axis.

- 8 The diagram shows part of the curve $x = \frac{9}{y^2} - 1$ that intercepts the y -axis at the point P . The shaded region is bounded by the curve, the y -axis and the line $y = 1$.



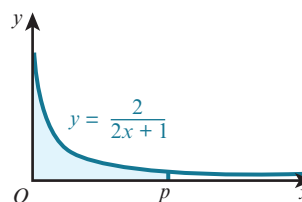
- Find the coordinates of P .
- Find the volume obtained when the shaded region is rotated through 360° about the y -axis.

- 9 The diagram shows part of the curve $y = 3x + \frac{2}{x}$. The line $y = 7$ intersects the curve at the points P and Q .



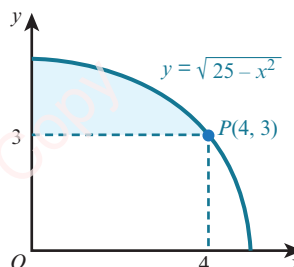
- Find the coordinates of P and Q .
- Find the volume obtained when the shaded region is rotated through 360° about the x -axis.

- 10 The diagram shows part of the curve $y = \frac{2}{2x+1}$. The shaded area is rotated through 360° about the x -axis between $x = 0$ and $x = p$.



Show that as $p \rightarrow \infty$, the volume approaches the value 2π .

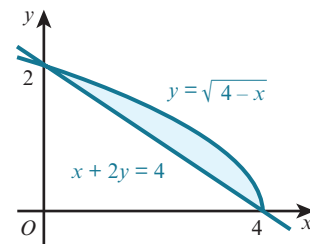
- 11 The diagram shows part of the curve $y = \sqrt{25 - x^2}$. The point $P(4, 3)$ lies on the curve.



- Find the volume obtained when the shaded region is rotated through 360° about the y -axis.
- Find the volume obtained when the shaded region is rotated through 360° about the x -axis.

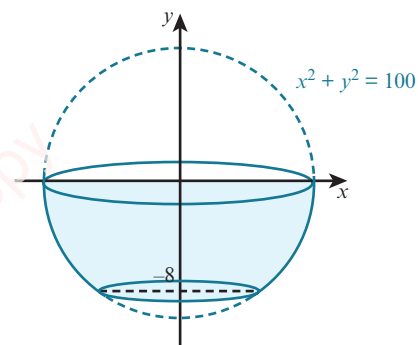
12 The diagram shows the curve $y = \sqrt{4-x}$ and the line $x + 2y = 4$ that intersect at the points $(4, 0)$ and $(0, 2)$.

- Find the volume obtained when the shaded region is rotated through 360° about the x -axis.
- Find the volume obtained when the shaded region is rotated through 360° about the y -axis.



13 A mathematical model for the inside of a bowl is obtained by rotating the curve $x^2 + y^2 = 100$ through 360° about the y -axis between $y = -8$ and $y = 0$. Each unit of x and y represents 1 cm.

- Find the volume of the bowl.
- The bowl is filled with water to a depth of 3 cm.
- Find the volume of water in the bowl.



- P** 14 Use integration to prove that the volume, $V \text{ cm}^3$, of a sphere with radius $r \text{ cm}$ is given by the formula $V = \frac{4}{3} \pi r^3$.

Checklist of learning and understanding

Integration as the reverse of differentiation

- If $\frac{d}{dx} [F(x)] = f(x)$, then $\int f(x) dx = F(x) + c$.

Integration formulae

- $\int x^n dx = \frac{1}{n+1} x^{n+1} + c$ (where c is a constant and $n \neq -1$)
- $\int (ax + b)^n dx = \frac{1}{a(n+1)} (ax + b)^{n+1} + c$ ($n \neq -1$ and $a \neq 0$)

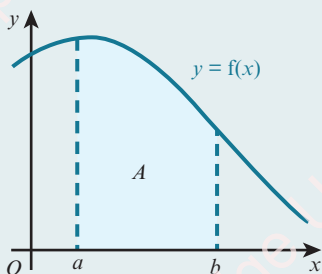
Rules for indefinite integration

- $\int k f(x) dx = k \int f(x) dx$, where k is a constant
- $\int [f(x) \pm g(x)] dx = \int f(x) dx \pm \int g(x) dx$

Rules for definite integration

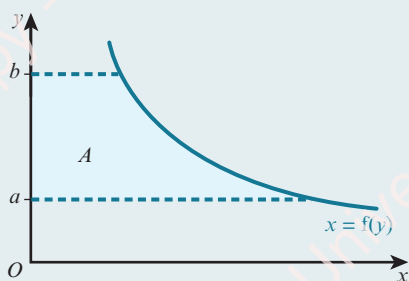
- If $\int f(x) dx = F(x) + c$, then $\int_a^b f(x) dx = [F(x)]_a^b = F(b) - F(a)$.
- $\int_a^b k f(x) dx = k \int_a^b f(x) dx$, where k is a constant.

- $\int_a^b [f(x) \pm g(x)] dx = \int_a^b f(x) dx \pm \int_a^b g(x) dx$
- $\int_a^b f(x) dx = -\int_b^a f(x) dx$

Area under a curve

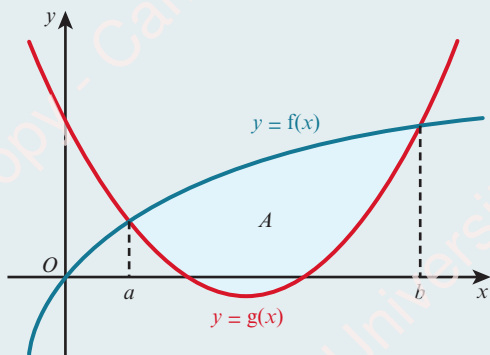
- The area, A , bounded by the curve $y = f(x)$, the x -axis and the lines $x = a$ and $x = b$ is given by the formula:

$$A = \int_a^b y dx \text{ when } y \geq 0 \quad (\text{or } A = \int_a^b f(x) dx \text{ when } f(x) \geq 0).$$



- The area, A , bounded by the curve $x = f(y)$, the y -axis and the lines $y = a$ and $y = b$ is given by the formula:

$$A = \int_a^b x dy \text{ when } x \geq 0 \quad (\text{or } A = \int_a^b f(y) dy \text{ when } f(y) \geq 0).$$



- The area, A , enclosed between $y = f(x)$ and $y = g(x)$ is given by the formula:

$$A = \int_a^b [f(x) - g(x)] dx$$

where a and b are the x -coordinates of the points of intersection of the functions f and g .

Improper integrals

- Integrals of the form $\int_a^{\infty} f(x) dx$ can be evaluated by replacing the infinite limit with a finite value, X , and then taking the limit as $X \rightarrow \infty$, provided the limit exists.
- Integrals of the form $\int_{-\infty}^b f(x) dx$ can be evaluated by replacing the infinite limit with a finite value, X , and then taking the limit as $X \rightarrow -\infty$, provided the limit exists.
- Integrals of the form $\int_a^b f(x) dx$ where $f(x)$ is not defined when $x = a$ can be evaluated by replacing the limit a with an X and then taking the limit as $X \rightarrow a$, provided the limit exists.
- Integrals of the form $\int_a^b f(x) dx$ where $f(x)$ is not defined when $x = b$ can be evaluated by replacing the limit b with an X and then taking the limit as $X \rightarrow b$, provided the limit exists.

Volume of revolution

- The volume, V , obtained when the function $y = f(x)$ is rotated through 360° about the x -axis between the boundary values $x = a$ and $x = b$ is given by the formula $V = \int_a^b \pi y^2 dx$.
- The volume, V , obtained when the function $x = f(y)$ is rotated through 360° about the y -axis between the boundary values $y = a$ and $y = b$ is given by the formula $V = \int_a^b \pi x^2 dy$.

END-OF-CHAPTER REVIEW EXERCISE 9

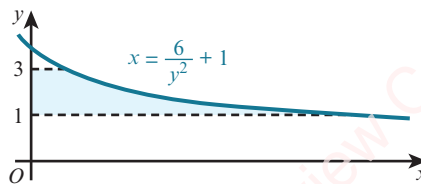
- 1 The function f is such that $f'(x) = 12x^3 + 10x$ and $f(-1) = 1$.
Find $f(x)$. [3]

- 2 Find $\int \left(5x - \frac{2}{x}\right)^2 dx$. [3]

- 3 A curve is such that $\frac{dy}{dx} = \frac{6}{x^2} - 5x$ and the point $(3, 5.5)$ lies on the curve. Find the equation of the curve. [4]

- 4 A curve has equation $y = f(x)$. It is given that $f'(x) = \frac{3}{\sqrt{x+2}} - \frac{8}{x^3}$ and that $f(2) = 3$. Find $f(x)$. [5]

5



The diagram shows part of the curve $x = \frac{6}{y^2} + 1$. The shaded region is bounded by the curve, the y -axis, and the lines $y = 1$ and $y = 3$. Find the volume, in terms of π , when this shaded region is rotated through 360° about the y -axis. [5]

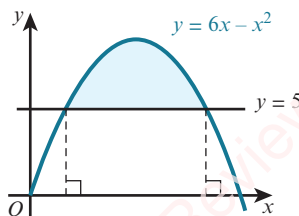
- 6 A function is defined for $x \in \mathbb{R}$ and is such that $f'(x) = 6x - 6$. The range of the function is given by $f(x) \geq 5$.

a State the value of x for which $f(x)$ has a stationary value. [1]

b Find an expression for $f(x)$ in terms of x . [4]



7



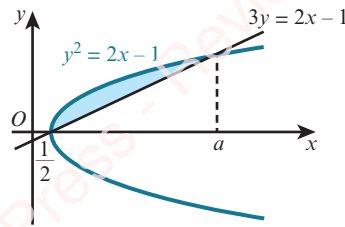
The diagram shows the curve $y = 6x - x^2$ and the line $y = 5$. Find the area of the shaded region. [6]

Cambridge International AS & A Level Mathematics 9709 Paper 11 Q4 June 2010

- 8 a Sketch the curve $y = (x - 3)^2 + 2$. [1]

b The region enclosed by the curve, the x -axis, the y -axis, the line $x = 3$ is rotated through 360° about the x -axis. Find the volume obtained, giving your answer in terms of π . [6]

9

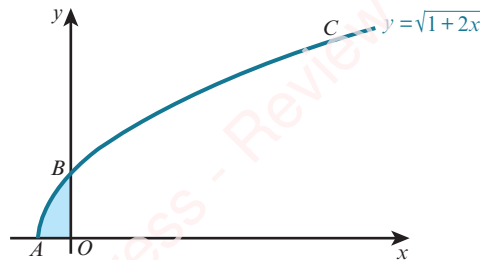


The diagram shows the curve $y^2 = 2x - 1$ and the straight line $3y = 2x - 1$.
The curve and straight line intersect at $x = \frac{1}{2}$ and $x = a$, where a is a constant.

- Show that $a = 5$. [2]
- Find, showing all necessary working, the area of the shaded region. [6]

Cambridge International AS & A Level Mathematics 9709 Paper 11 Q8 November 2012

10

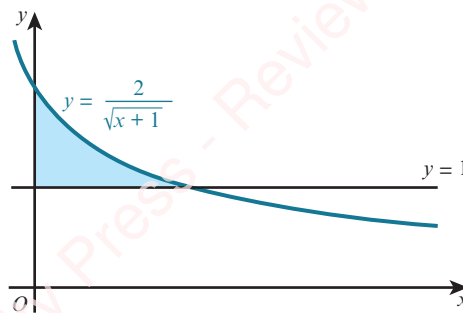


The diagram shows the curve $y = \sqrt{1 + 2x}$ meeting the x -axis at A and the y -axis at B .
The y -coordinate of the point C on the curve is 3.

- Find the coordinates of B and C . [2]
- Find the equation of the normal to the curve at C . [4]
- Find the volume obtained when the shaded region is rotated through 360° about the y -axis. [5]

Cambridge International AS & A Level Mathematics 9709 Paper 11 Q10 November 2011

11



The diagram shows the line $y = 1$ and part of the curve $y = \frac{2}{\sqrt{x+1}}$.

- Show that the equation $y = \frac{2}{\sqrt{x+1}}$ can be written in the form $x = \frac{4}{y^2} - 1$. [1]
- Find $\int_1^2 \left(\frac{4}{y^2} - 1 \right) dy$. Hence find the area of the shaded region. [5]
- The shaded region is rotated through 360° about the y -axis. Find the exact value of the volume of revolution obtained. [5]

Cambridge International AS & A Level Mathematics 9709 Paper 11 Q11 June 2012



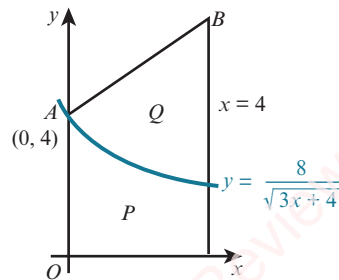
12 A curve has equation $y = f(x)$ and is such that $f'(x) = 3x^{\frac{1}{2}} + 3x^{-\frac{1}{2}} - 10$.

- By using the substitution $u = x^{\frac{1}{2}}$, or otherwise, find the values of x for which the curve $y = f(x)$ has stationary points. [4]
- Find $f''(x)$ and hence, or otherwise, determine the nature of each stationary point. [3]
- It is given that the curve $y = f(x)$ passes through the point $(4, -7)$. Find $f(x)$. [4]

Cambridge International AS & A Level Mathematics 9709 Paper 11 Q9 June 2013



13



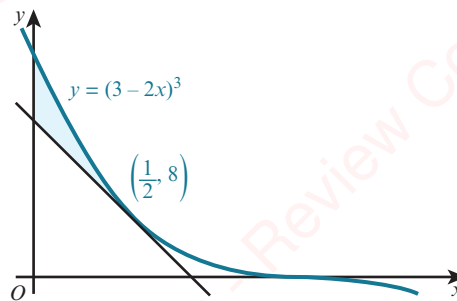
The diagram shows part of the curve $y = \frac{8}{\sqrt{3x+4}}$. The curve intersects the y -axis at $A(0, 4)$. The normal to the curve at A intersects the line $x = 4$ at the point B .

- Find the coordinates of B . [5]
- Show, with all necessary working, that the areas of the regions P and Q are equal. [6]

Cambridge International AS & A Level Mathematics 9709 Paper 11 Q10 June 2015



14

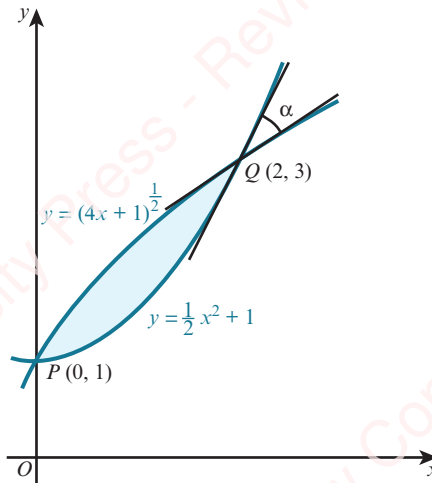


The diagram shows the curve $y = (3 - 2x)^3$ and the tangent to the curve at the point $\left(\frac{1}{2}, 8\right)$.

- Find the equation of this tangent, giving your answer in the form $y = mx + c$. [5]
- Find the area of the shaded region. [6]

Cambridge International AS & A Level Mathematics 9709 Paper 11 Q10 November 2013

15



The diagram shows parts of the curves $y = (4x + 1)^{\frac{1}{2}}$ and $y = \frac{1}{2}x^2 + 1$ intersecting at points $P(0, 1)$ and $Q(2, 3)$. The angle between the tangents to the curves at Q is α .

- i Find α , giving your answer in degrees correct to 3 significant figures. [6]
- ii Find by integration the area of the shaded region. [6]

Cambridge International AS & A Level Mathematics 9709 Paper 11 Q11 November 2014

CROSS-TOPIC REVIEW EXERCISE 3

1 A curve is such that $\frac{dy}{dx} = 2x^2 - 3$. Given that the curve passes through the point $(-3, -2)$, find the equation of the curve. [4]

2 A curve is such that $\frac{dy}{dx} = 2 - 8(3x + 4)^{-\frac{1}{2}}$.

i A point P moves along the curve in such a way that the x -coordinate is increasing at a constant rate of 0.3 units per second. Find the rate of change of the y -coordinate as P crosses the y -axis. [2]

The curve intersects the y -axis where $y = \frac{4}{3}$.

ii Find the equation of the curve. [4]

Cambridge International AS & A Level Mathematics 9709 Paper 11 Q4 June 2016

3 A curve is such that $\frac{dy}{dx} = 3x^{\frac{1}{2}} - 6$ and the point $(9, 2)$ lies on the curve.

i Find the equation of the curve. [4]

ii Find the x -coordinate of the stationary point on the curve and determine the nature of the stationary point. [3]

Cambridge International AS & A Level Mathematics 9709 Paper 11 Q6 June 2010

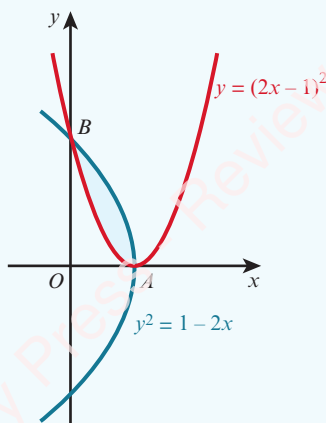
4 A curve is such that $\frac{dy}{dx} = \frac{3}{(1+2x)^2}$ and the point $(1, \frac{1}{2})$ lies on the curve.

i Find the equation of the curve. [4]

ii Find the set of values of x for which the gradient of the curve is less than $\frac{1}{3}$. [3]

Cambridge International AS & A Level Mathematics 9709 Paper 11 Q7 June 2011

5



The diagram shows parts of the curves $y = (2x - 1)^2$ and $y^2 = 1 - 2x$, intersecting at points A and B .

i State the coordinates of A . [1]

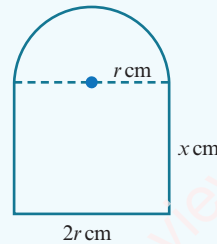
ii Find, showing all necessary working, the area of the shaded region. [6]

Cambridge International AS & A Level Mathematics 9709 Paper 11 Q7 November 2016

- 6 A curve has equation $y = f(x)$ and it is given that $f'(x) = 3x^{\frac{1}{2}} - 2x^{-\frac{1}{2}}$.
The point A is the only point on the curve at which the gradient is -1 .
- Find the x -coordinate of A . [3]
 - Given that the curve also passes through the point $(4, 10)$, find the y -coordinate of A , giving your answer as a fraction. [6]

Cambridge International AS & A Level Mathematics 9709 Paper 11 Q10 November 2016

7



The diagram shows a metal plate. The plate has a perimeter of 50 cm and consists of a rectangle of width $2r$ cm and height x cm, and a semicircle of radius r cm.

- Show that the area, A cm², of the plate is given by $A = 50r - 2r^2 - \frac{1}{2}\pi r^2$. [4]
- Given that x and r can vary:
- show that A has a stationary value when $r = \frac{50}{4 + \pi}$. [4]
 - find this stationary value of A and determine the nature of this stationary value. [2]

281

- 8 A line has equation $y = 2x + c$ and a curve has equation $y = 8 - 2x - x^2$.
- For the case where the line is a tangent to the curve, find the value of the constant c . [3]
 - For the case where $c = 11$, find the x -coordinates of the points of intersection of the line and the curve. Find also, by integration, the area of the region between the line and the curve. [7]

Cambridge International AS & A Level Mathematics 9709 Paper 11 Q11 June 2014

- 9 The equation of a curve is $y = \frac{9}{2 - x}$.
- Find an expression for $\frac{dy}{dx}$ and determine, with a reason, whether the curve has any stationary points. [3]
 - Find the volume obtained when the region bounded by the curve, the coordinate axes and the line $x = 1$ is rotated through 360° about the x -axis. [4]
 - Find the set of values of k for which the line $y = x + k$ intersects the curve at two distinct points. [4]

Cambridge International AS & A Level Mathematics 9709 Paper 11 Q11 November 2010

- 10 A function f is defined as $f(x) = \frac{4}{2x+1}$ for $x \geq 0$.
- Find an expression, in terms of x , for $f'(x)$ and explain how your answer shows that f is a decreasing function. [3]
 - Find an expression, in terms of x , for $f^{-1}(x)$ and find the domain of f^{-1} . [4]
 - On a diagram, sketch the graph of $y = f(x)$ and the graph of $y = f^{-1}(x)$, making clear the relationship between the two graphs. [4]

- 11 A curve is such that $\frac{dy}{dx} = x^{\frac{1}{2}} - x^{-\frac{1}{2}}$. The curve passes through the point $(4, \frac{2}{3})$.
- Find the equation of the curve. [4]
 - Find $\frac{d^2y}{dx^2}$. [2]
 - Find the coordinates of the stationary point and determine its nature. [5]

Cambridge International AS & A Level Mathematics 9709 Paper 11 Q12 June 2014

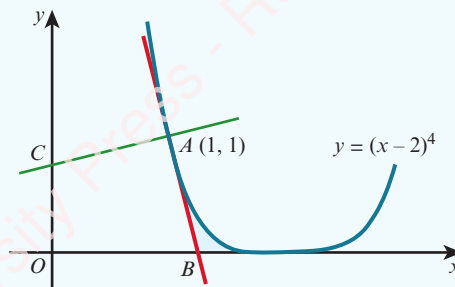
- 12 The function f is defined for $x > 0$ and is such that $f'(x) = 2x - \frac{2}{x^2}$. The curve $y = f(x)$ passes through the point $P(2, 6)$.
- Find the equation of the normal to the curve at P . [3]
 - Find the equation of the curve. [4]
 - Find the x -coordinate of the stationary point and state with a reason whether this point is a maximum or a minimum. [4]

Cambridge International AS & A Level Mathematics 9709 Paper 11 Q9 November 2014

- 13 The point $P(3, 5)$ lies on the curve $y = \frac{1}{x-1} - \frac{9}{x-5}$.
- Find the x -coordinate of the point where the normal to the curve at P intersects the x -axis. [5]
 - Find the x -coordinate of each of the stationary points on the curve and determine the nature of each stationary point, justifying your answers. [6]

Cambridge International AS & A Level Mathematics 9709 Paper 11 Q11 November 2016

- 14

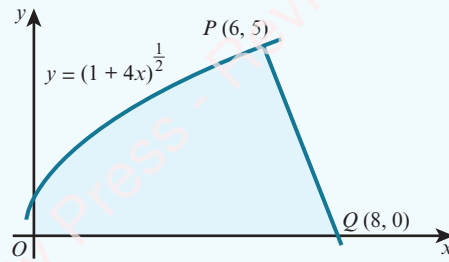


The diagram shows part of the curve $y = (x-2)^4$ and the point $A(1, 1)$ on the curve. The tangent at A cuts the x -axis at B and the normal at A cuts the y -axis at C .

- Find the coordinates of B and C . [6]
- Find the distance AC , giving your answer in the form $\frac{\sqrt{a}}{b}$, where a and b are integers. [2]
- Find the area of the shaded region. [4]

Cambridge International AS & A Level Mathematics 9709 Paper 11 Q10 June 2013

15



The diagram shows part of the curve $y = (1 + 4x)^{\frac{1}{2}}$ and a point $P(6, 5)$ lying on the curve. The line PQ intersects the x -axis at $Q(8, 0)$.

- i Show that PQ is a normal to the curve. [5]
- ii Find, showing all necessary working, the exact volume of revolution obtained when the shaded region is rotated through 360° about the x -axis. [7]

[In part ii you may find it useful to apply the fact that the volume, V , of a cone of base radius r and vertical height h , is given by $V = \frac{1}{3} \pi r^2 h$.]

Cambridge International AS & A Level Mathematics 9709 Paper 11 Q11 November 2015

PRACTICE EXAM-STYLE PAPER

Time allowed is 1 hour 50 minutes (75 marks).

1 It is given that $f(x) = 2x - \frac{5}{x^3}$, for $x > 0$. Show that f is an increasing function. [2]

2 The graph of $y = x^3 - 3$ is transformed by applying a translation of $\begin{pmatrix} 2 \\ 0 \end{pmatrix}$ followed by a reflection in the x -axis.

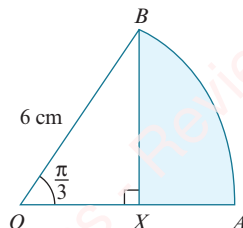
Find the equation of the resulting graph in the form $y = ax^3 + bx^2 + cx + d$. [3]

3 Prove the identity $\frac{1 - \tan^2 x}{1 + \tan^2 x} \equiv 2 \cos^2 x - 1$. [4]

4 a Find the first three terms in the expansion of $(3 - 2x)^7$, in ascending powers of x . [3]

b Find the coefficient of x^2 in the expansion of $(1 + 5x)(3 - 2x)^7$. [3]

5



The diagram shows sector OAB of a circle with centre O , radius 6 cm and sector angle $\frac{\pi}{3}$ radians. The point X lies on the line OA and BX is perpendicular to OA .

a Find the exact area of the shaded region. [4]

b Find the exact perimeter of the shaded region. [3]

6 A circle has centre $(3, -2)$ and passes through the point $P(5, -6)$.

a Find the equation of the circle. [3]

b Find the equation of the tangent to the circle at the point P , giving your answer in the form $ax + by = c$. [4]

7 a The sum, S_n , of the first n terms of an arithmetic progression is given by $S_n = 11n - 4n^2$. Find the first term and the common difference. [3]

b The first term of a geometric progression is $2\frac{1}{4}$ and the fourth term is $\frac{1}{12}$. Find:
i the common ratio [3]

ii the sum to infinity. [2]

8 The equation of a curve is $y = 3 + 12x - 2x^2$.

a Express $3 + 12x - 2x^2$ in the form $a - 2(x + b)^2$, where a and b are constants to be found. [3]

b Find the coordinates of the stationary point on the curve. [2]

c Find the set of values of x for which $y \leq -5$. [3]

- 9 The function $f : x \mapsto 6 - 5 \cos x$ is defined for the domain $0 \leq x \leq 2\pi$.
- a Find the range of f . [1]
 - b Sketch the graph of $y = f(x)$. [2]
 - c Solve the equation $f(x) = 3$. [3]
- The function $g : x \mapsto 6 - 5 \cos x$ is defined for the domain $0 \leq x \leq \pi$.
- d Find $g^{-1}(x)$. [2]
- 10 A curve has equation $y = \frac{6}{9-2x}$ and $A(3, 2)$ is a point on the curve.
- a Find the equation of the normal to the curve at the point A . [5]
 - b A point $P(x, y)$ moves along the curve in such a way that the y -coordinate is increasing at a constant rate of 0.05 units per second. Find the rate of increase of the x -coordinate when $x = 4$. [5]
- 11 A curve has equation $y = \frac{16}{x} - x^2$.
- a Find $\frac{dy}{dx}$ and $\frac{d^2y}{dx^2}$ in terms of x . [3]
 - b Find the coordinates of the stationary point on the curve and determine its nature. [4]
 - c Find the volume of the solid formed when the region enclosed by the curve, the x -axis, and the lines $x = 1$ and $x = 2$ is rotated about the x -axis. [5]

Answers

1 Quadratics

Prerequisite knowledge

- 1 a $-4, 3$ b 3 c $-\frac{1}{3}, 6$
 2 a $x > 2$ b $x \geq -2$
 3 a $x = 2, y = 3$ b $x = -2, y = -5$
 4 a $2\sqrt{5}$ b 5 c $4\sqrt{2}$

Exercise 1A

- 1 a $-5, 2$ b $3, 4$
 c $-2, 8$ d $-3, -\frac{4}{5}$
 e $-\frac{5}{2}, 1\frac{1}{3}$ f $-\frac{1}{5}, \frac{3}{2}$
 2 a $-1, 6$ b $-1, 4$
 c $-\frac{3}{4}, 1$ d ± 2
 e $-\frac{1}{2}, 1$ f $-\frac{1}{2}, 0$
 3 a $-2, \frac{5}{3}$ b $-3, 2$
 c ± 3 d 4
 e $\frac{2}{3}, \frac{1}{2}$ f $-5, \frac{1}{2}$
 4 a $-5, 3$ b $\frac{5}{2}, 3$
 c $1, 3$ d $-4, -\frac{1}{2}$
 e $-5, 3$ f $2, 3, 4, 5$
 5 a Proof b $20 \text{ cm}, 21 \text{ cm}, 29 \text{ cm}$
 6 $5\frac{1}{2}$
 7 $-\frac{2}{3}, \frac{1}{2}, 4, 6, 7$

Exercise 1B

- 1 a $(x-3)^2 - 9$ b $(x+4)^2 - 16$
 c $\left(x - \frac{3}{2}\right)^2 - \frac{9}{4}$ d $\left(x + \frac{15}{2}\right)^2 - \frac{225}{4}$
 e $(x+2)^2 + 4$ f $(x-2)^2 - 12$
 g $\left(x + \frac{7}{2}\right)^2 - \frac{45}{4}$ h $\left(x - \frac{3}{2}\right)^2 + \frac{7}{4}$
 2 a $2(x-3)^2 + 1$ b $3(x-2)^2 - 13$
 c $2\left(x + \frac{5}{4}\right)^2 - \frac{33}{8}$ d $2\left(x + \frac{7}{4}\right)^2 - \frac{9}{8}$

- 3 a $4 - (x-2)^2$ b $16 - (x-4)^2$
 c $\frac{25}{4} - \left(x + \frac{3}{2}\right)^2$ d $\frac{61}{4} - \left(x - \frac{5}{2}\right)^2$
 4 a $15 - 2(x+2)^2$ b $21 - 2(x+3)^2$
 c $15 - 2(x-1)^2$ d $\frac{49}{12} - 3\left(x - \frac{5}{6}\right)^2$
 5 a $(3x-1)^2 - 4$ b $(2x+5)^2 + 5$
 c $(5x+4)^2 - 20$ d $(3x-7)^2 + 12$
 6 a $-9, 1$ b $-6, 2$ c $-5, 7$
 d $2, 7$ e $-6, 3$ f $-10, 1$
 7 a $-2 \pm \sqrt{11}$ b $5 \pm \sqrt{23}$ c $-4 \pm \sqrt{17}$
 d $1 \pm \sqrt{\frac{7}{2}}$ e $\frac{-3 \pm \sqrt{3}}{2}$ f $2 \pm \sqrt{\frac{11}{2}}$
 8 $3 \pm \sqrt{10}$
 9 $\sqrt{19} - 2$
 10 $-\frac{8}{3}, 1, \frac{1}{6}(-5 - \sqrt{97}), \frac{1}{6}(\sqrt{97} - 5)$
 11 a $\frac{9000\sqrt{3}}{49} \approx 318 \text{ m}$ b $\frac{9000\sqrt{3}}{98} \approx 159 \text{ m}$

Exercise 1C

- 1 a $-0.29, 10.29$ b $-5.24, -0.76$
 c $-4.19, 1.19$ d $-3.39, 0.89$
 e $-1.39, -0.36$ f $-1.64, 0.24$
 2 4.93
 3 3.19
 4 $-0.217, 9.22$
 5 $x = \frac{b \pm \sqrt{b^2 - 4ac}}{2a}$; the solutions each increase by $\frac{b}{a}$.

Exercise 1D

- 1 a $(-3, 9), (2, 4)$ b $\left(-8, \frac{7}{2}\right), (2, 1)$
 c $(-10, 0), (8, 6)$ d $(-2, -7), (1, 2)$
 e $(2, -2), (10, 2)$ f $(-1, -3), (2, 1)$
 g $(2, 4)$ h $(-3, 1), (9, 7)$
 i $(2, 2), (10, -2)$ j $(-5, -24), (5, 1)$
 k $(-6, -2), \left(8, 1\frac{1}{2}\right)$ l $(4, -6), (12, 10)$
 m $(-3, -4\frac{1}{3}), (4, -9)$ n $(-1, 3), (3, 1)$
 o $(6, -2), (18, -1)$
 2 a 9 and 17 b $13 - \sqrt{19}$ and $13 + \sqrt{19}$
 3 $2\frac{1}{2} \text{ cm}$ and $5\frac{2}{3} \text{ cm}$
 4 $3\frac{1}{2} \text{ cm}$ and 9 cm

- 5 7 cm and 11 cm
 6 $x = 4\frac{1}{2}$ and $y = 16$ or $x = 16$ and $y = 4\frac{1}{2}$
 7 $r = 5, h = 13$
 8 a $(-3, 5)$ and $(2, 0)$ b $5\sqrt{2}$
 9 a $(-2, 1)$ and $(3, -1)$ b $(\frac{1}{2}, 0)$
 10 $2\sqrt{53}$
 11 $7x + y = 0$
 12 $(2, 3)$
 13 $y = -2x - 3$
 14 a 2, 8 b $\frac{N}{2} + \frac{D}{2N}, \frac{N}{2} - \frac{D}{2N}$

Exercise 1E

- 1 a $\pm 2, \pm 3$ b $-1, 2$
 c $\pm\sqrt{5}, \pm 1$ d $\pm\frac{\sqrt{2}}{2}, \pm\sqrt{5}$
 e ± 1 f $1, \frac{1}{2}$
 g $\pm\sqrt{3}$ h No solutions
 i ± 2 j $-\frac{1}{2}, 1$
 k $\pm\frac{3}{2}$ l $-1, 2$
 2 a $4, 6\frac{1}{4}$ b 4
 c $\frac{1}{9}, 6\frac{1}{4}$ d $\frac{4}{25}$
 e $\frac{1}{4}, 1\frac{9}{16}$ f $\frac{1}{9}, 25$
 3 a $x - 6\sqrt{x} + 8 = 0$ b $(4, 4), (16, 8)$
 c $4\sqrt{10}$
 4 $a = 2, b = -9, c = 7$
 5 $a = 2, b = -40, c = 128$

Exercise 1F

- 1 a \cup -shaped curve, minimum point: $(3, -1)$, axes crossing points: $(2, 0), (4, 0), (0, 8)$
 b \cup -shaped curve, minimum point: $(-2\frac{1}{2}, -20\frac{1}{4})$, axes crossing points: $(-7, 0), (2, 0), (0, -14)$
 c \cup -shaped curve, minimum point: $(-1\frac{3}{4}, -21\frac{1}{8})$, axes crossing points: $(-5, 0), (1\frac{1}{2}, 0), (0, -15)$

d \cap -shaped curve, maximum point:

$(\frac{1}{2}, 12\frac{1}{4})$, axes crossing points:

$(-3, 0), (4, 0), (0, 12)$

- 2 a $2(x - 2)^2 - 3$
 b $x = 2$
 3 a $\frac{53}{4} - (x - \frac{5}{2})^2$
 b $(2\frac{1}{2}, 13\frac{1}{4})$, maximum
 4 a $2(x + \frac{9}{4})^2 - \frac{49}{8}$
 b $(-2\frac{1}{4}, -6\frac{1}{8})$, minimum
 5 $-4\frac{1}{4}$ when $x = 3\frac{1}{2}$
 6 a $\frac{9}{8} - 2(x - \frac{1}{4})^2$
 b \cap -shaped curve, maximum point: $(\frac{1}{4}, 1\frac{1}{8})$, axes crossing points: $(-\frac{1}{2}, 0), (1, 0), (0, 1)$
 7 Proof
 8 A: $y = (x - 4)^2 + 2$ or $x^2 - 8x + 18$
 B: $y = 4(x + 2)^2 - 6$ or $4x^2 + 16x + 10$
 C: $y = 8 - \frac{1}{2}(x - 2)^2$ or $6 + 2x - \frac{1}{2}x^2$
 9 a
- | | |
|---|----------------------|
| A | $y = x^2 - 6x + 13$ |
| B | $y = x^2 - 6x + 5$ |
| C | $y = -x^2 + 6x - 5$ |
| D | $y = -x^2 + 6x - 13$ |
| E | $y = x^2 + 6x + 13$ |
| F | $y = x^2 + 6x + 5$ |
| G | $y = -x^2 - 6x - 5$ |
| H | $y = -x^2 - 6x - 13$ |
- b Student's own answers
 10 $y = 3x^2 - 6x - 24$
 11 $y = 5 + 3x - \frac{1}{2}x^2$
 12 Proof

Exercise 1G

- 1 a $0 \leq x \leq 3$ b $x < -2$ or $x > 3$
 c $4 \leq x \leq 6$ d $-\frac{3}{2} < x < 2$
 e $-6 \leq x \leq 5$ f $x < -\frac{1}{2}$ or $x > \frac{1}{3}$
- 2 a $x \leq -5$ or $x \geq 5$ b $-5 \leq x \leq -2$
 c $x < -7$ or $x > 1$ d $-\frac{3}{2} \leq x \leq \frac{2}{7}$
 e $\frac{4}{3} < x < \frac{5}{2}$ f $x < -4$ or $x > \frac{1}{2}$
- 3 a $-9 < x < 4$ b $x < 7$ or $x > 8$
 c $-12 \leq x \leq 1$ d $-3 < x < 2$
 e $x < -4$ or $x > 1$ f $-\frac{1}{2} < x < \frac{3}{5}$
 g $x \leq -9$ or $x \geq 1$ h $x < -2$ or $x > 5$
 i $-\frac{7}{2} < x < \frac{5}{3}$
- 4 $-3 < x < \frac{5}{2}$
- 5 a $5 \leq x < 7$ b $-7 \leq x < 1$
 c $x < -2$ or $x \geq 3$
- 6 $x < -5$ or $x > 8$
- 7 a $1 < x \leq \frac{3}{2}$ b $-1 < x < 0$
 c $-1 \leq x < 1$ or $x \geq 5$
 d $-3 \leq x < 2$ or $x \geq 5$
 e $-5 \leq x < -2$ or $1 \leq x < 2$
 f $x < -4$ or $\frac{1}{2} \leq x < 5$

Exercise 1H

- 1 a Two equal roots b Two distinct roots
 c Two distinct roots d Two equal roots
 e No real roots f Two distinct roots
- 2 No real roots
- 3 $b = -2, c = -35$
- 4 a $k = \pm 4$ b $k = 4$ or $k = 1$
 c $k = \frac{1}{4}$ d $k = 0$ or $k = 2$
 e $k = 0$ or $k = -\frac{8}{9}$ f $k = -10$ or $k = 14$
- 5 a $k > -13$ b $k < \frac{57}{8}$
 c $k < 2$ d $k < \frac{1}{2}$
 e $k > \frac{3}{2}$ f $k < \frac{25}{16}$

- 6 a $k > \frac{1}{2}$ b $k > \frac{13}{12}$
 c $k > \frac{26}{5}$ d $k > -\frac{39}{8}$
 e $5 - \sqrt{21} < k < 5 + \sqrt{21}$
 f $7 - 2\sqrt{10} < k < 7 + 2\sqrt{10}$
- 7 $k = \frac{p^2}{20}$
- 8 $k \leq \frac{25}{8}$
- 9 Proof
- 10 Proof
- 11 $k \leq -2\sqrt{2}$

Exercise 1I

- 1 $-5, -9$
- 2 $-1, 7$
- 3 5
- 4 a ± 10 b $(2, 4), (-2, -4)$
- 5 $-6, -2, (-1, 12), (1, 4)$
- 6 $k < -2$ or $k > 6$
- 7 $k < -4\sqrt{3}$ or $k > 4\sqrt{3}$
- 8 $k < 6$
- 9 $-3 < m < 1$
- 10 $k > 6$
- 11 $\frac{1}{2}$
- 12 Proof
- 13 Proof

End-of-chapter review exercise 1

- 1 $(\frac{1}{2}, 0)$
- 2 a $(3x - \frac{5}{2})^2 - \frac{25}{4}$ b $-\frac{1}{3} < x < 2$
- 3 $x = \pm 2, x = \pm \frac{3}{2}$
- 4 $x < -9 - 2\sqrt{3}$ or $x > -9 + 2\sqrt{3}$
- 5 $k < 1$ or $k > 2$

- 6 a $(1\frac{1}{2}, -2)$ b $k = -4$ or $k = -20$
 7 a Proof b $(6, 29)$
 c $k = 1, C = (2, 5)$
 8 a Proof b $(2, 1), (5, 7),$
 c $2 < x < 5$
 9 a $25 - (x - 5)^2$ b $(5, 25)$
 c $x \leq 1$ or $x \geq 9$
 10 i $3\sqrt{5}, (-\frac{1}{2}, 5)$ ii $k = 3$ or 11
 11 i $(2\frac{1}{2}, 2\frac{1}{2})$ ii $m = -8, (-2, 16)$
 12 i $2(x - 1)^2 - 1, (1, -1)$ ii $(-\frac{1}{2}, 3\frac{1}{2})$
 iii $y - 3 = -\frac{1}{5}(x - 2)$

2 Functions

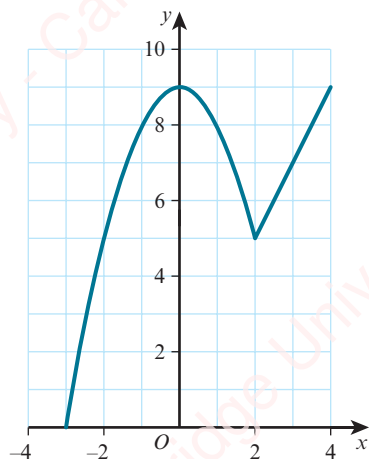
Prerequisite knowledge

- 1 10
 2 $3 - 2x$
 3 $f^{-1}(x) = \frac{x - 4}{5}$
 4 $2(x - 3)^2 - 13$

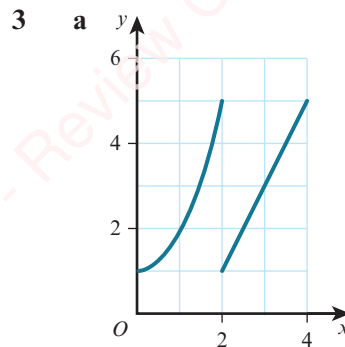
Exercise 2A

- 1 a function, one-one b function, many-one
 c function, one-one d function, one-one
 e function, one-one f function, one-one
 g function, one-one h not a function

2 a

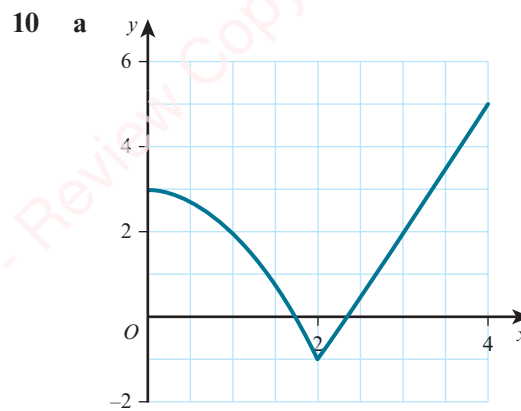


b Many-one



- b each input does not have a unique output
 4 a domain: $x \in \mathbb{R}, -1 \leq x \leq 5$
 range: $f(x) \in \mathbb{R}, -8 \leq f(x) \leq 8$
 b domain: $x \in \mathbb{R}, -3 \leq x \leq 2$
 range: $f(x) \in \mathbb{R}, -7 \leq f(x) \leq 20$

- 5 a $f(x) > 12$ b $-13 \leq f(x) \leq -3$
 c $-1 \leq f(x) \leq 9$ d $2 \leq f(x) \leq 32$
 e $\frac{1}{32} \leq f(x) \leq 16$ f $\frac{3}{2} \leq f(x) \leq 12$
 6 a $f(x) \geq -2$ b $3 \leq f(x) \leq 28$
 c $f(x) \leq 3$ d $-5 \leq f(x) \leq 7$
 7 a $f(x) \geq 5$ b $f(x) \geq -7$
 c $-17 \leq f(x) \leq 8$ d $f(x) \geq 1$
 8 a $f(x) \geq -20$ b $f(x) \geq -6\frac{1}{3}$
 9 a $f(x) \leq 23$ b $f(x) \leq 5$



- b $-1 \leq f(x) \leq 5$
 11 $f(x) \geq k - 9$
 12 $g(x) \leq \frac{a^2}{8} + 5$
 13 $a = 2$
 14 $a = 1$ or $a = -5$
 15 a $2(x - 2)^2 - 3$ b $k = 4$
 c $x \in \mathbb{R}, -3 \leq x \leq 5$

14 a $f^{-1}(x) = \frac{x+1}{x}$ b Proof

c $\frac{1 \pm \sqrt{5}}{2}$

15 b and c

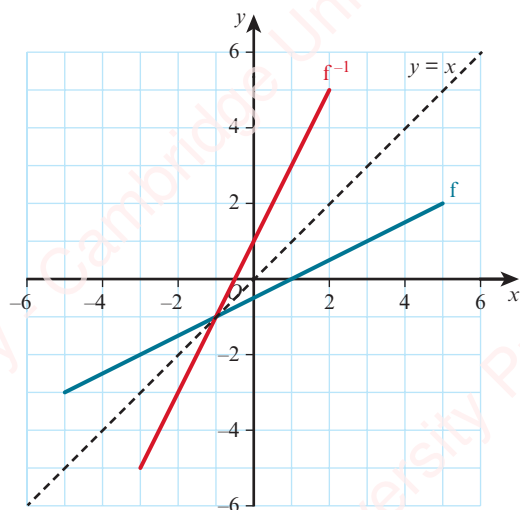
16 a $\frac{7-x}{6}$

b i $\frac{14-x}{6}$ ii $\frac{7-x}{6}$

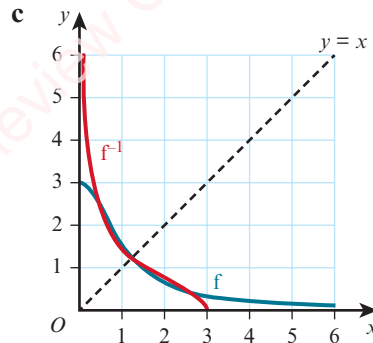
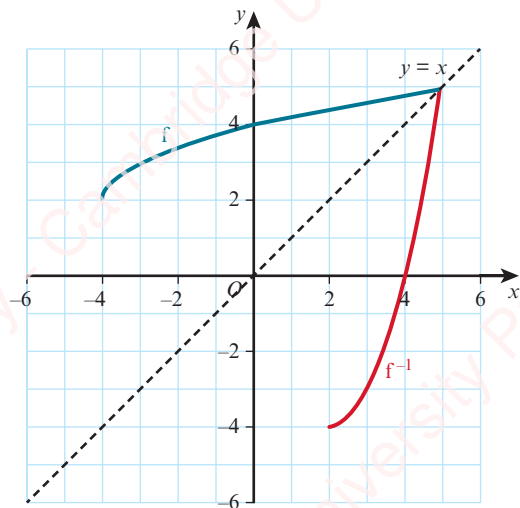
c $(fg)^{-1}(x) = g^{-1} f^{-1}(x)$

Exercise 2D

1 a



b

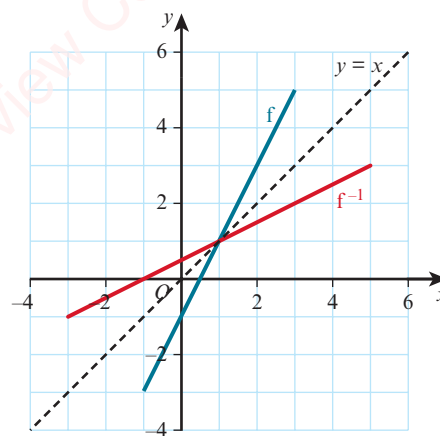


d f^{-1} does not exist since f is not one-one

2 a $f^{-1}(x) = \frac{x+1}{2}$

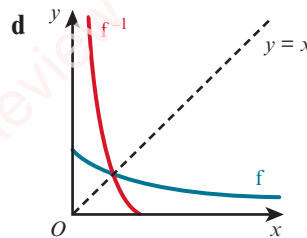
b Domain is $-3 \leq x \leq 5$, range is $-1 \leq x \leq 3$

c



3 a $0 < f(x) \leq 2$ b $f^{-1}(x) = \frac{4-2x}{x}$

c Domain is $0 < x \leq 2$, range is $f^{-1}(x) \geq 0$



4 a Symmetrical about $y = x$

b Not symmetrical about $y = x$

c Symmetrical about $y = x$

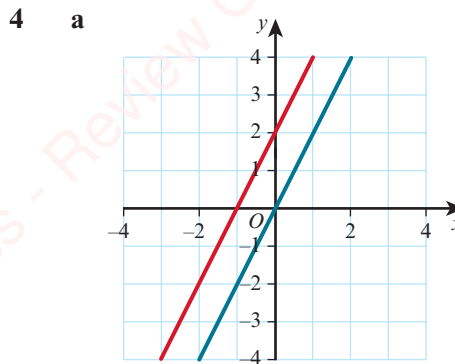
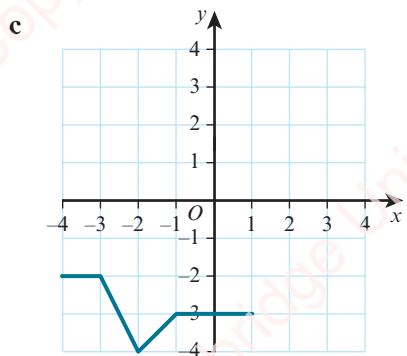
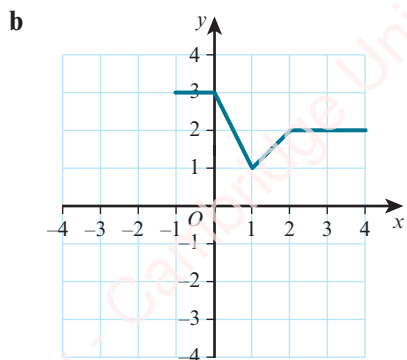
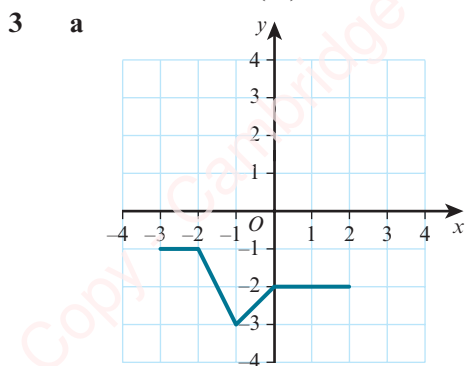
d Symmetrical about $y = x$

5 a Proof b $d = -a$

Exercise 2E

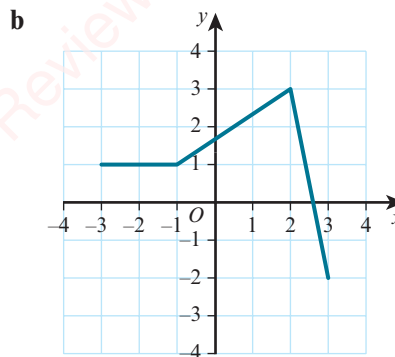
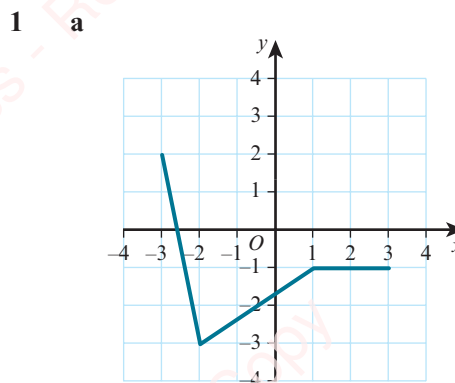
- 1 a $y = 2x^2 + 4$ b $y = 5\sqrt{x} - 2$
 c $y = 7x^2 - 2x + 1$ d $y = x^2 + 1$
 e $y = \frac{2}{x+5}$ f $y = \frac{x-3}{x-2}$
 g $y = (x+1)^2 + x + 1$ h $y = 3(x-2)^2 + 1$

- 2 a Translation $\begin{pmatrix} 0 \\ 4 \end{pmatrix}$ b Translation $\begin{pmatrix} 0 \\ -5 \end{pmatrix}$
 c Translation $\begin{pmatrix} -1 \\ 0 \end{pmatrix}$ d Translation $\begin{pmatrix} 2 \\ 0 \end{pmatrix}$
 e Translation $\begin{pmatrix} 1 \\ 0 \end{pmatrix}$ f Translation $\begin{pmatrix} 2 \\ 4 \end{pmatrix}$



- b $a = 2$ c $b = -1$
 5 $y = (x+1)(x-4)(x-7)$
 6 $y = x^2 - 6x + 8$
 7 $a = 2, b = -3, c = 1$

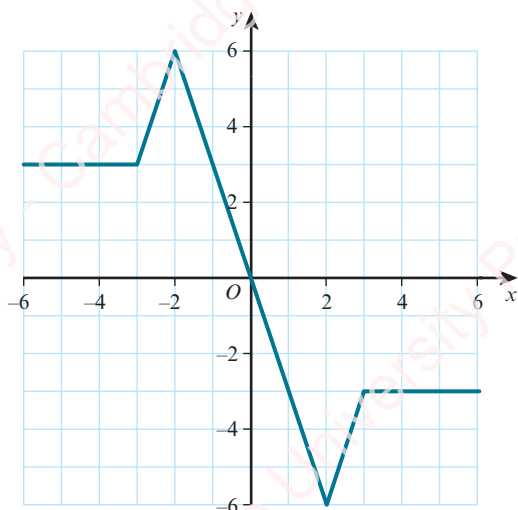
Exercise 2F



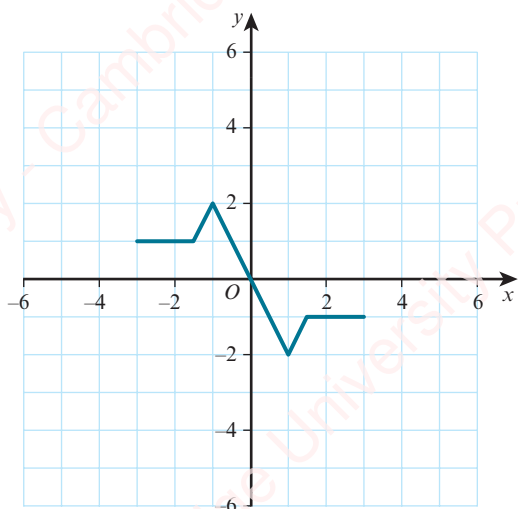
- 2 a $y = -5x^2$ b $y = 2x^4$
 c $y = 2x^2 + 3x + 1$ d $y = 3x^2 - 2x - 5$
 3 a Reflection in the x -axis
 b Reflection in the y -axis
 c Reflection in the x -axis
 d Reflection in the x -axis

Exercise 2G

1 a



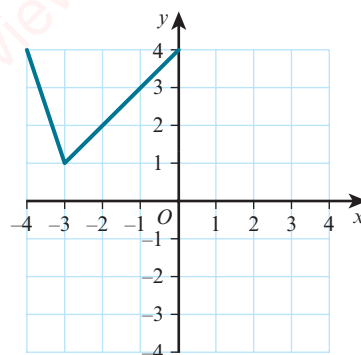
b



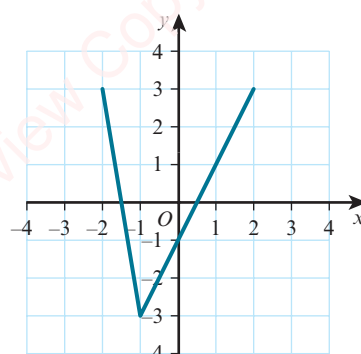
- 2 a $y = 6x^2$ b $y = 3x^3 - 3$
 c $y = 2^{x-1} + 2$ d $y = \frac{1}{2}x^2 - 4x + 10$
 e $y = 162x^3 - 108x$
- 3 a Stretch parallel to the x -axis with stretch factor $\frac{1}{2}$
 b Stretch parallel to the y -axis with stretch factor 3
 c Stretch parallel to the y -axis with stretch factor 2
 d Stretch parallel to the x -axis with stretch factor $\frac{1}{3}$

Exercise 2H

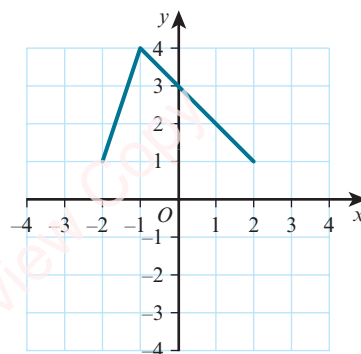
1 a



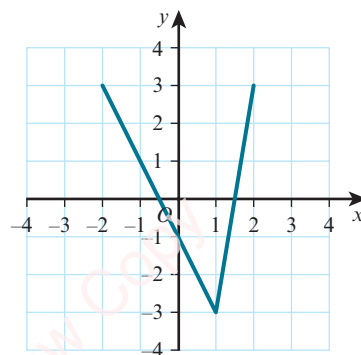
b

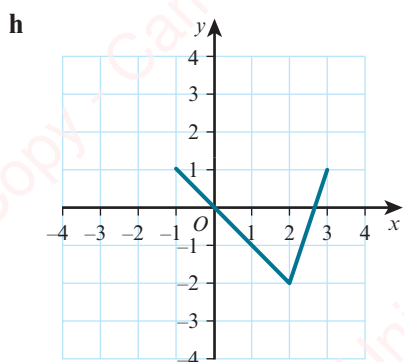
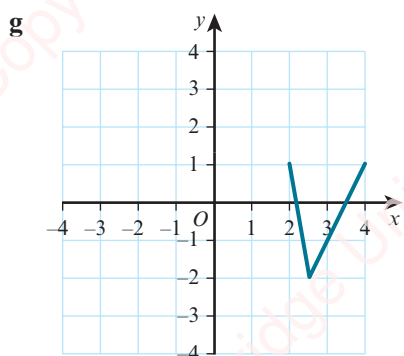
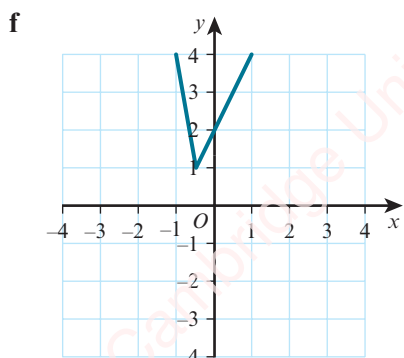
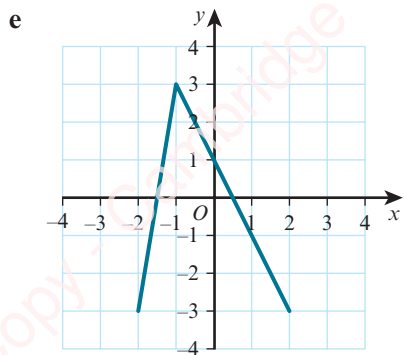


c



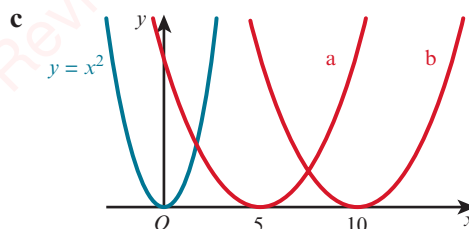
d





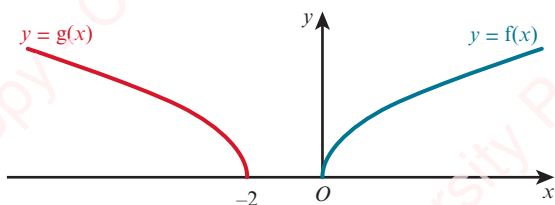
- 2 a $y = 2f(-x)$ b $y = 2 - f(x)$
 c $y = 2f(x-1) + 1$
 3 a $y = 3(x-1)^2$ b $y = 3(x-1)^2$

4 a $y = \frac{1}{4}(x-5)^2$ b $y = \left(\frac{1}{2}x-5\right)^2$



- 5 a $y = 2x^2 - 8$ b $y = -x^2 + 4x - 5$
 6 a $y = 2g(-x)$ b $y = 3 - f(x-2)$
 7 a Stretch parallel to the y -axis with stretch factor $\frac{1}{2}$ followed by a translation $\begin{pmatrix} 0 \\ 3 \end{pmatrix}$
 b Reflection in the x -axis followed by a translation $\begin{pmatrix} 0 \\ 2 \end{pmatrix}$
 c Translation $\begin{pmatrix} 6 \\ 0 \end{pmatrix}$ followed by a stretch parallel to the x -axis with stretch factor $\frac{1}{2}$
 d Stretch parallel to the y -axis with stretch factor 2 followed by a translation $\begin{pmatrix} 0 \\ -8 \end{pmatrix}$
 8 a Translation $\begin{pmatrix} -5 \\ 0 \end{pmatrix}$ followed by a stretch parallel to the y -axis with stretch factor $\frac{1}{2}$
 b Translation $\begin{pmatrix} -1 \\ 0 \end{pmatrix}$, stretch parallel to the y -axis with stretch factor $\frac{1}{2}$, reflection in the x -axis, translation $\begin{pmatrix} 0 \\ -2 \end{pmatrix}$
 c Translation $\begin{pmatrix} 3 \\ 0 \end{pmatrix}$, stretch parallel to the y -axis with stretch factor 2, reflection in the x -axis, translation $\begin{pmatrix} 0 \\ 4 \end{pmatrix}$
 9 a $y = -\sqrt{\frac{1}{2}x-1} + 3$ b $y = -\sqrt{\frac{1}{2}(x-1)} - 3$
 10 a $y = 3[(-x+4)^2 + 2] = 3(4-x)^2 + 6$
 b $y = 3[(-(x+4))^2] + 2 = 3(x+4)^2 + 2$

- 11 Translation $\begin{pmatrix} 2 \\ 0 \end{pmatrix}$ followed by reflection in the y -axis or reflection in the y -axis followed by translation $\begin{pmatrix} -2 \\ 0 \end{pmatrix}$

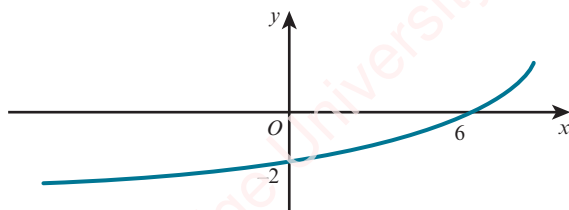


- 12 Translation $\begin{pmatrix} -10 \\ 0 \end{pmatrix}$ followed by a stretch parallel to the x -axis with stretch factor $\frac{1}{2}$ or stretch parallel to the x -axis with stretch factor $\frac{1}{2}$ followed by translation $\begin{pmatrix} -5 \\ 0 \end{pmatrix}$

End-of-chapter review exercise 2

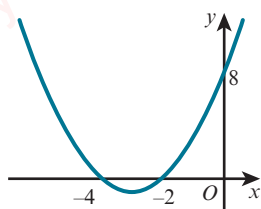
1 $\frac{25}{4} - 9\left(x - \frac{7}{6}\right)^2$

2 a



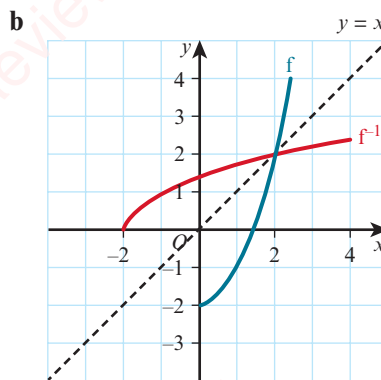
- b Translation $\begin{pmatrix} -3 \\ 0 \end{pmatrix}$ followed by a reflection in the y -axis or reflection in the y -axis followed by translation $\begin{pmatrix} 3 \\ 0 \end{pmatrix}$

3 a



b $y = 3x^2 + 6x$

4 a $f^{-1}: x \mapsto \sqrt{x+2}$ for $x \geq -2$



- 5 i $-(x-3)^2 + 4$ ii 3
iii $f^{-1}(x) = 3 + \sqrt{4-x}$, domain is $x \leq 0$

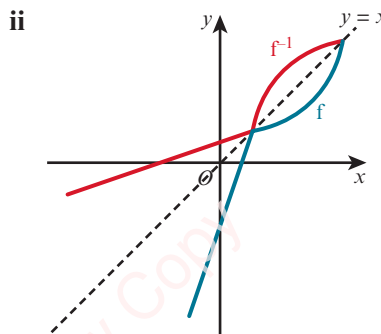
6 i $(x-2)^2 - 4 + k$

ii $f(x) \geq k - 4$

iii $p = 2$

iv $f^{-1}(x) = 2 + \sqrt{x+4-k}$, domain is $x \geq k-4$

7 i $-5 \leq f(x) \leq 4$



iii $f^{-1}(x) = \begin{cases} \frac{1}{3}(x+2) & \text{for } -5 \leq x \leq 1 \\ 5 - \frac{4}{x} & \text{for } 1 < x \leq 4 \end{cases}$

8 i $4(x-3)^2 - 25$, vertex is $(3, -25)$

ii $g(x) \geq -9$

iii $g^{-1}(x) = 3 - \frac{1}{2}\sqrt{x+25}$, domain is $x \geq -9$

9 i $2(x-3)^2 - 5$ ii 3

iii $f(x) \geq 27$

iv $f^{-1}(x) = 3 + \sqrt{\frac{x+5}{2}}$, domain is $x \geq 27$

10 i $(x-1)^2 - 16$ ii -16

iii $p = 6, q = 10$ iv $f^{-1}(x) = 1 + \sqrt{x+16}$

- 11 i $2(x-3)^2 - 11$ ii $f \geq -11$
 iii $-1 < x < 7$ iv $k = 22$
- 12 i $fg(x) = 2x^2 - 3$, $gf(x) = 4x^2 + 4x - 1$
 ii $a = -1$ iii $b = 2$
 iv $\frac{1}{2}(x^2 - 3)$ v $h^{-1}(x) = -\sqrt{x+2}$
- 13 i $2(x-2)^2 + 2$ ii $2 \leq f(x) \leq 10$
 iii $2 \leq x \leq 10$
 iv $f(x)$: half parabola from $(0, 10)$ to $(2, 2)$,
 $g(x)$: line through O at 45° ;
 $f^{-1}(x)$: reflection of $f(x)$ in $g(x)$
 v $f^{-1}(x) = 2 - \sqrt{\frac{1}{2}(x-2)}$

3 Coordinate geometry

Prerequisite knowledge

- 1 $(-4\frac{1}{2}, -2), 13$
- 2 a $-\frac{1}{6}$ b 6
- 3 a $\frac{2}{3}$ b -5
 c $7\frac{1}{2}$
- 4 a $(x-4)^2 - 21$ b $4 - \sqrt{21}, 4 + \sqrt{21}$

Exercise 3A

- 1 a $PQ = 5\sqrt{5}, QR = 4\sqrt{5}, PR = 3\sqrt{5}$,
 right-angled triangle
 b $PQ = \sqrt{197}, QR = \sqrt{146}, PR = 3\sqrt{5}$,
 not right angled
- 2 17 units²
- 3 $a = 3$ or $a = -9$
- 4 $b = 3$ or $b = -5\frac{4}{5}$
- 5 $a = 2, b = -1$
- 6 a $(-2, -1)$ b $(-1, 9)$
 c $2\sqrt{41}, 2\sqrt{101}$
- 7 $k = 4$
- 8 $38\frac{1}{2}$ units²
- 9 $k = 2$
- 10 $(-2, 6)$

- 11 a $(5, 2)$ b $8\sqrt{2}$
- 12 $A(-5, 5), B(7, 3), C(-3, -3)$

Exercise 3B

- 1 a $\frac{1}{5}, \frac{1}{6}$ b Not collinear
- 2 Proof
- 3 $-\frac{2}{5}, \frac{5}{2}$
- 4 $(7, -1)$
- 5 $k = \frac{5}{7}$
- 6 $k = 2$ or $k = 3$
- 7 $(0, -26)$
- 8 a 1 b 5
- 9 $a = 10, b = 4$
- 10 a $\frac{1}{2}$ b -2
 c $a = 6$ or $a = -4$
- 11 a $(6, 6)$ b $a = -4, b = 16, c = 11$
 c $4\sqrt{145}$ d 100

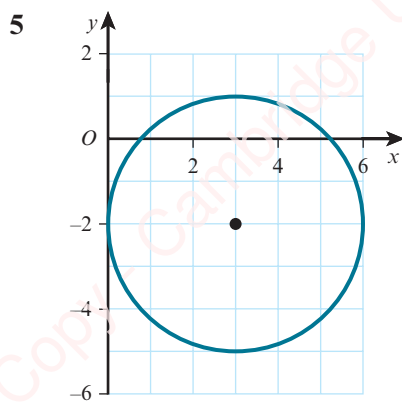
Exercise 3C

- 1 a $y = 2x + 1$ b $y = -3x - 1$
 c $2x + 3y = 1$
- 2 a $2y = 3x - 3$ b $9x + 5y = 2$
 c $2x - 3y = 9$
- 3 a $y = 3x + 4$ b $x + 2y = -8$
 c $x + 2y = 8$ d $3x + 2y = 18$
- 4 a $y = 2x + 2$ b $5x + 3y = 9$
 c $7x + 3y = -6$
- 5 $(8, 2)$
- 6 a $y = \frac{3}{2}x + 8$ b $(0, 8)$
 c 39
- 7 a $(6, 3)$ b $y = -\frac{2}{3}x + 7$
- 8 a $y = \frac{4}{3}x + 10$ b $(-7\frac{1}{2}, 0), (0, 10)$
 c $12\frac{1}{2}$
- 9 a $2y = 5x + 33$ b 33

- 10 $E(4, 6), F(10, 3)$
 11 10
 12 $(14, -2)$
 13 a $y = -3x + 2$ b $(-1, 5)$
 c $5\sqrt{10}, 4\sqrt{10}$ d 100
 14 a i $y = 4\frac{1}{2}$ ii $x + y = 7$
 b $(2\frac{1}{2}, 4\frac{1}{2})$
 15 a $y = 2x - 7$ b $(4\frac{2}{5}, 1\frac{4}{5})$
 16 $x + y = 8, 3x + y = 3$. Other solutions possible.

Exercise 3D

- 1 a $(0, 0), 4$ b $(0, 0), \frac{3\sqrt{2}}{2}$
 c $(0, 2), 5$ d $(5, -3), 2$
 e $(-7, 0), 3\sqrt{2}$ f $(3, -4), \frac{3\sqrt{10}}{2}$
 g $(4, -10), \sqrt{6}$ h $(3\frac{1}{2}, 2\frac{1}{2}), 10$
 2 a $x^2 + y^2 = 64$ b $(x - 5)^2 + (y + 2)^2 = 16$
 c $(x + 1)^2 + (y - 3)^2 = 7$
 d $(x - \frac{1}{2})^2 + (y + \frac{3}{2})^2 = \frac{25}{4}$
 3 $(x - 2)^2 + (y - 5)^2 = 25$
 4 $(x + 2)^2 + (y - 2)^2 = 52$



- 6 $(x - 6)^2 + (y + 5)^2 = 25$
 7 Proof
 8 $(x - 5)^2 + y^2 = 8$ and $(x - 5)^2 + (y - 4)^2 = 8$
 9 $(x - 4)^2 + (y - 2)^2 = 20$

- 10 $(x - 3)^2 + (y + 1)^2 = 16, (3, -1), 4$
 11 $y = \frac{3}{4}x - \frac{21}{2}$
 12 $(x - 5)^2 + (y - 2)^2 = 29$
 13 a Proof b $(x + 1)^2 + (y - 4)^2 = 20$
 14 $(x - 5)^2 + (y + 3)^2 = 40$
 15 $(x - 9)^2 + (y - 2)^2 = 85$
 16 $(x + 3)^2 + (y + 10)^2 = 100,$
 $(x - 13)^2 + (y + 10)^2 = 100$
 17 a i $1 + \sqrt{2}$ ii Student's own answer
 b i $3 + 2\sqrt{2}$ ii Student's own answer

Exercise 3E

- 1 $(-1, -4), (5, 2)$
 2 $2\sqrt{5}$
 3 Proof
 4 $-\frac{2}{29} < m < 2$
 5 a $(0, 6), (8, 10)$ b $y = -2x + 16$
 c $(5 - \sqrt{5}, 6 + 2\sqrt{5}), (5 + \sqrt{5}, 6 - 2\sqrt{5})$
 d $20\sqrt{5}$
 6 $(4, 3)$
 7 a $(x - 12)^2 + (y - 5)^2 = 25$ and
 $(x - 2)^2 + (y - 10)^2 = 100$
 b Proof

End-of-chapter review exercise 3

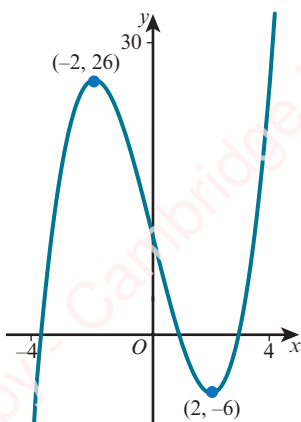
- 1 $2 < a < 26$
 2 i $\frac{4}{9}$ and $\frac{1}{4}$ ii $\frac{49}{24}$
 3 $a = -4, b = -1$ or $a = 12, b = 7$
 4 10
 5 a $a = 5, b = -2$ b $(4, -5)$
 c $y = -\frac{2}{5}x - 3\frac{2}{5}$
 6 i $16t^2$ ii Proof
 7 $(13, -7)$
 8 a $(-2, 2), (4, 5)$ b $y = -2x + 5\frac{1}{2}$

- 9 a $(-2, -3)$ b $y = -\frac{1}{2}x + 4\frac{3}{4}$
 c $\frac{19}{2} - \sqrt{113}, \frac{19}{2} + \sqrt{113}$
- 10 i $2, m = 1$ ii $(-1, 6)$
 iii $(5, 12)$
- 11 i $y = 2x - 2$ ii $(0, -2), (\frac{8}{5}, \frac{6}{5})$
- 12 i $y = -2x + 6, (3, 0)$ ii Proof
 iii $(-1, 8), 2\sqrt{10}$
- 13 a $y = -\frac{2}{3}x + 3$ b $p = -1$
 c $(x - 6)^2 + (y + 1)^2 = 26$
- 14 a $(19, 13)$ b 104
- 15 a $(\frac{10}{3}, 10)$ b $k < -12, k > 12$
- 16 a $y = -\frac{4}{3}x + 2$ b Proof
 c $(x - 15)^2 + (y - 7)^2 = 325$
- 17 a $4, (4, -2)$ b $4 - 2\sqrt{3}, 4 + 2\sqrt{3}$
 c Proof d Proof

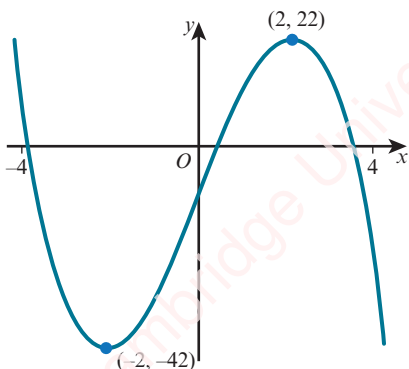
Cross-topic review exercise 1

1 $x = \pm \frac{2}{3}, x = \pm \frac{\sqrt{2}}{2}$

2 a

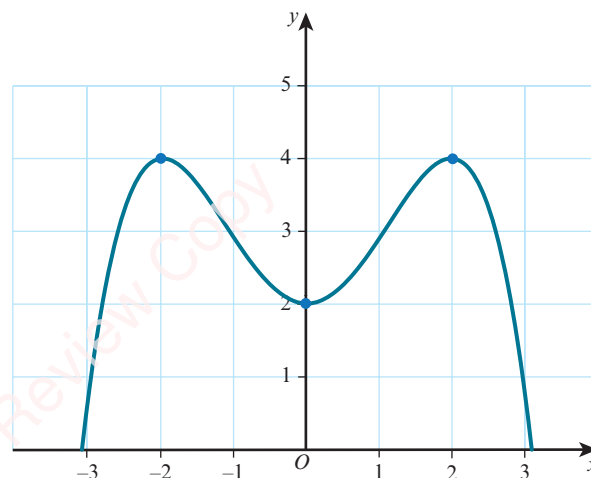


b



- 3 $a = 5, b = -2$
- 4 Translation $\begin{pmatrix} 5 \\ 0 \end{pmatrix}$, vertical stretch with stretch factor 2
- 5 $y = -x^2 + 6x - 8$

6



- 7 a $1 \leq x \leq 5$ b $-13, 3$
- 8 $(k^2, -2k)$
- 9 $6\sqrt{5}$
- 10 a $k = 14$ b $y = \frac{1}{3}x + 4$
- 11 a $(-1, -11), (6, 3)$ b $k < -\frac{25}{12}$
- 12 a $k = -\frac{1}{2}$ b $x > 5$
- 13 i $fg(x) = 5x$, range is $fg(x) \geq 0$
 ii $g^{-1}(x) = \frac{4 - 2x}{5x}$, domain is $0 < x \leq 2$
- 14 a $b = -5, c = -14$
 b i $(2.5, -20.25)$ ii $-3 < x < 8$
- 15 a $2y = 3x + 25$ b $(-3, 8)$
- 16 a $36 - (x - 6)^2$ b 36
 c $x \leq 36, g^{-1}(x) \geq 6$ d $g^{-1}(x) = 6 + \sqrt{36 - x}$
- 17 a $3(x + 2)^2 - 13$ b $(-2, -13)$
 c $6 < x < 18$
- 18 a $a = 12, b = 2$ b -3
 c $g^{-1}(x) = -3 + \sqrt{\frac{26 - x}{2}}$
- 19 a $(x - 8)^2 + (y - 3)^2 = 29$ b $5x + 2y = 75$

- 20 a $x = \frac{1}{2}$
 b $f^{-1}(x) = \frac{x+7}{3}$, $g^{-1}(x) = 5 - \frac{18}{x}$
 c Proof
- 21 a $\frac{17}{4} - \left(x + \frac{3}{2}\right)^2$ b $\left(-\frac{3}{2}, \frac{17}{4}\right)$
 c -5 and -1 d $(1, -2), (-1, 4)$
- 22 a $(8, 0)$ b 10
 c $(-2, 0), (18, 0)$ d $y = -\frac{3}{4}x + 6$
- 23 a $k = -2$
 b i $fg(x) \geq 28$
 ii $(fg)^{-1}(x) = -\sqrt{\frac{x+26}{6}}$, domain is $x \geq 28$,
 range is $(fg)^{-1}(x) \leq -3$
- 24 a i $(4, 5), (10, 2)$ ii $4x - 2y = 21$
 b $k = \pm 4\sqrt{10}$

4 Circular measure

Prerequisite knowledge

- 1 $(12 + \pi)$ cm, 3π cm²
 2 13, 67.4
 3 5.14, 15.4 cm²

Exercise 4A

- 1 a $\frac{\pi}{9}$ b $\frac{2\pi}{9}$
 c $\frac{5\pi}{36}$ d $\frac{5\pi}{18}$
 e $\frac{\pi}{36}$ f $\frac{5\pi}{6}$
 g $\frac{3\pi}{4}$ h $\frac{7\pi}{6}$
 i $\frac{5\pi}{4}$ j $\frac{5\pi}{3}$
 k $\frac{13\pi}{36}$ l 3π
 m $\frac{\pi}{20}$ n $\frac{7\pi}{36}$
 o $\frac{10\pi}{3}$
- 2 a 90° b 60° c 30° d 15°
 e 240° f 80° g 54° h 105°
 i 81° j 810° k 252° l 48°
 m 225° n 420° o 202.5°

- 3 a 0.489 b 0.559
 c 0.820 d 3.49
 e 5.59
- 4 a 68.8° b 45.8°
 c 76.8° d 87.1°
 e 45.3°
- 5 a.

Degrees	0	45	90	135	180	225	270	315	360
Radians	0	$\frac{\pi}{4}$	$\frac{\pi}{2}$	$\frac{3\pi}{4}$	π	$\frac{5\pi}{4}$	$\frac{3\pi}{2}$	$\frac{7\pi}{4}$	2π

b.

Degrees	0	30	60	90	120	150	180	210
Radians	0	$\frac{\pi}{6}$	$\frac{\pi}{3}$	$\frac{\pi}{2}$	$\frac{2\pi}{3}$	$\frac{5\pi}{6}$	π	$\frac{7\pi}{6}$

Degrees	240	270	300	330	360
Radians	$\frac{4\pi}{3}$	$\frac{3\pi}{2}$	$\frac{5\pi}{3}$	$\frac{11\pi}{6}$	2π

- 6 a 0.644 b 14.1
 c 0.622 d 0
 e $\frac{\sqrt{3}}{2}$ f 0.727
- 7 7.79 cm
 8 12.79°

Exercise 4B

- 1 a 2π cm b 3π cm
 c 6π cm d 28π cm
- 2 a 13 cm b 2.275 cm
- 3 a 0.5 rad b 0.8 rad
- 4 15.6 m
- 5 a 19.2 cm b 20.5 cm
 c 50.4 cm
- 6 a 0.927 rad b 4 cm
 c 17.6 cm
- 7 a 14 cm b 11.8 cm
 c 25.8 cm
- 8 a 13 cm b 2.35 rad
 c 56.6 cm
- 9 a Proof b 43.4 cm
- 10 Proof

Exercise 4C

- 1 a $12\pi \text{ cm}^2$ b $20\pi \text{ cm}^2$
 c $\frac{9\pi}{4} \text{ cm}^2$ d $54\pi \text{ cm}^2$
- 2 a 867 cm^2 b 3.042 cm^2
- 3 a 1.125 rad b 1.5 rad
- 4 a 1.25 rad b 40 cm^2
- 5 a 1.75 rad b 4.79 cm
 c 5.16 cm^2
- 6 $\left(32\sqrt{3} - \frac{32\pi}{3}\right) \text{ cm}^2$
- 7 a $\frac{5\sqrt{3}}{3} \text{ cm}$ b $\frac{25}{6}(2\sqrt{3} - \pi) \text{ cm}^2$
- 8 1.86 cm^2
- 9 a 29.1 cm^2 b 36.5 cm^2
 c 51.7 cm^2 d 13.9 cm^2
- 10 a Proof b Proof
- 11 $\left(\frac{2\pi r^2}{3} - \frac{\sqrt{3}r^2}{2}\right) \text{ cm}^2$
- 12 $100\left(1 + \frac{\pi}{3} - \sqrt{3}\right) \text{ cm}^2$
- 13 a $\left(\tan x + \frac{1}{\tan x}\right) \text{ cm}$ b 0.219 rad
- 14 a Proof b Proof

End-of-chapter review exercise 4

- 1 a $15 - 5\sqrt{3} + \frac{5\sqrt{3}\pi}{6}$ b $\frac{25\sqrt{3}}{4} - \frac{25\pi}{8}$
- 2 i $\alpha = \frac{\pi}{8}$ ii $8 + 5\pi$
- 3 i $8 \tan \alpha - 2\alpha$ ii $\frac{4}{\cos \alpha} + 4 \tan \alpha + 2\alpha$
- 4 i $r(1 + \theta + \cos \theta + \sin \theta)$ ii 55.2
- 5 i $AC = r - r \cos \theta$ ii $\frac{7\pi}{3} + 2\sqrt{3} - 2$
- 6 i Proof ii $36 - (r - 6)^2$
 iii $A = 36, \theta = 2$
- 7 i Proof ii r^2
- 8 i $r\left(\cos \theta + 1 - \sin \theta + \frac{\pi}{2} - \theta\right)$ ii 6.31
- 9 i $4\alpha \cos \alpha + 4\alpha + 8 - 8 \cos \alpha$ ii $\frac{\pi}{3}$
- 10 i $2\pi r + r\alpha + 2r$ ii $\frac{3r^2\alpha}{2} + \pi r^2$
 iii $\alpha = \frac{2}{5} \pi$

5 Trigonometry

Prerequisite knowledge

- 1 a $\sqrt{1+r^2}$ b $\frac{r}{\sqrt{1+r^2}}$
 c $\frac{1}{\sqrt{1+r^2}}$ d r
- 2 a i $\frac{\pi}{4}$ ii 4π iii $\frac{5\pi}{6}$
 b i 30° ii 630° iii 195°
- 3 a $0, 5$ b $-5, \frac{3}{2}$

Exercise 5A

- 1 a $\frac{3}{5}$ b $\frac{3}{4}$ c $\frac{24}{25}$
 d $\frac{20}{3}$ e $\frac{4}{5}$ f $\frac{12}{19}$
- 2 a $\frac{2}{3}$ b $\frac{\sqrt{5}}{3}$
 c 1 d $\frac{\sqrt{5}}{2}$
 e $\frac{6}{5}$ f $\frac{15(3-\sqrt{5})}{4}$
- 3 a $\frac{\sqrt{15}}{4}$ b $\frac{\sqrt{15}}{15}$
 c $\frac{15}{16}$ d $\frac{15}{16}$
 e $4 + \sqrt{15}$ f $\frac{75 - 4\sqrt{15}}{15}$
- 4 a $\frac{1}{4}$ b $\frac{1}{2}$
 c $\frac{\sqrt{3} + \sqrt{2}}{2}$ d $\sqrt{3}$
 e $\frac{2 - \sqrt{3}}{2}$ f 1
- 5 a $\frac{1}{2}$ b $\frac{1}{4}$ c $\frac{1}{2}$
 d $\frac{\sqrt{2} - 2\sqrt{6}}{2}$ e -1 f $\frac{2 + \sqrt{3}}{3}$

6

	$\theta = \frac{\pi}{4}$	$\theta = \frac{\pi}{3}$	$\theta = \frac{\pi}{6}$
$\tan \theta$	1	$\sqrt{3}$	$\frac{1}{\sqrt{3}}$
$\cos \theta$	$\frac{1}{\sqrt{2}}$	$\frac{1}{2}$	$\frac{\sqrt{3}}{2}$
$\frac{1}{\sin \theta}$	$\sqrt{2}$	$\frac{2}{\sqrt{3}}$	2

Exercise 5B

- 1 a 70° b 40°
 c 20° d 40°
- 2 a 2nd quadrant, 80° b 3rd quadrant, 80°
 c 4th quadrant, 50° d 3rd quadrant, 30°
 e 1st quadrant, 40° f 2nd quadrant, $\frac{\pi}{3}$
 g 3rd quadrant, $\frac{\pi}{6}$ h 1st quadrant, $\frac{\pi}{3}$
 i 3rd quadrant, $\frac{4\pi}{9}$ j 4th quadrant, $\frac{\pi}{8}$
- 3 a 125° b -160°
 c 688° d $\frac{5\pi}{4}$
 e $\frac{8\pi}{3}$ f $-\frac{13\pi}{6}$

Exercise 5C

- 1 a $-\sin 10^\circ$ b $\cos 55^\circ$
 c $-\tan 55^\circ$ d $-\cos 65^\circ$
 e $-\cos \frac{\pi}{5}$ f $-\sin \frac{\pi}{8}$
 g $-\cos \frac{3\pi}{10}$ h $\tan \frac{2\pi}{9}$
- 2 a $-\frac{1}{2}$ b $-\frac{\sqrt{3}}{3}$
 c $-\frac{\sqrt{2}}{2}$ d $\sqrt{3}$
 e $-\frac{\sqrt{3}}{2}$ f $\frac{1}{2}$
 g $-\frac{\sqrt{3}}{3}$ h $-\frac{1}{2}$
- 3 4th quadrant
- 4 a $-\frac{\sqrt{21}}{5}$ b $-\frac{2}{\sqrt{21}}$
- 5 a $-\frac{\sqrt{2}}{\sqrt{3}}$ b $\sqrt{2}$
- 6 a $-\frac{5}{13}$ b $\frac{12}{13}$
- 7 a a b $\frac{a}{\sqrt{1+a^2}}$
 c $\frac{a}{\sqrt{1+a^2}}$ d $-\frac{a}{\sqrt{1+a^2}}$
- 8 a $\sqrt{1-b^2}$ b $\frac{b}{\sqrt{1-b^2}}$
 c $-\sqrt{1-b^2}$ d $\sqrt{1-b^2}$

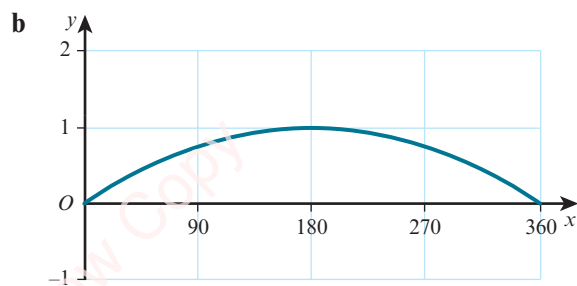
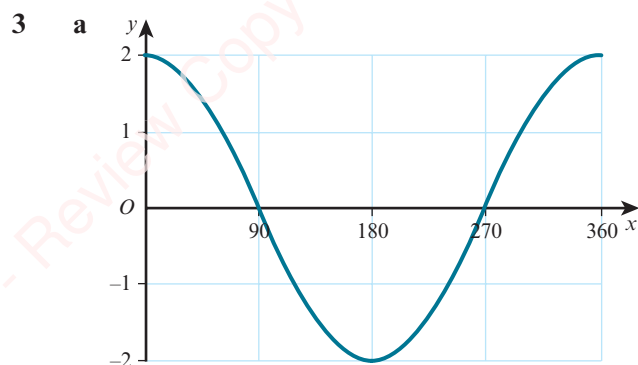
- 9 a $-\frac{12}{13}$ b $-\frac{5}{12}$
 c $\frac{3}{5}$ d $-\frac{3}{4}$
- 10 a $-\frac{2}{\sqrt{13}}$ b $\frac{3}{\sqrt{13}}$
 c $-\frac{\sqrt{7}}{4}$ d $-\frac{\sqrt{7}}{3}$

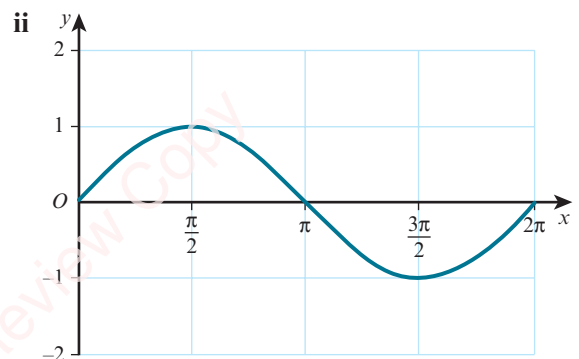
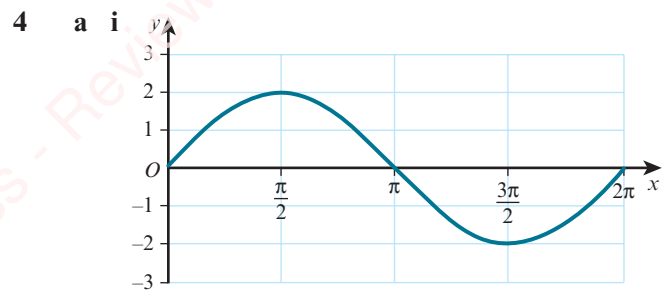
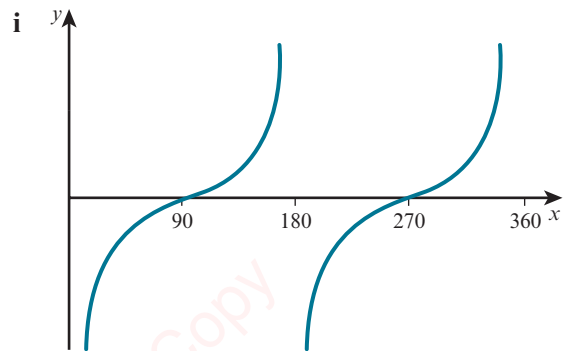
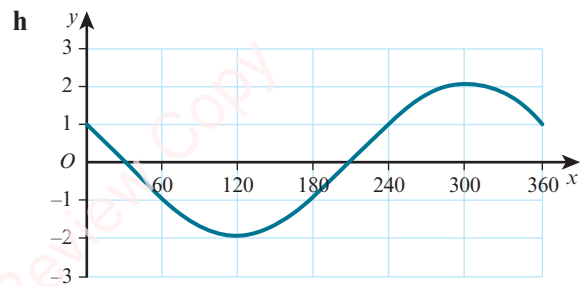
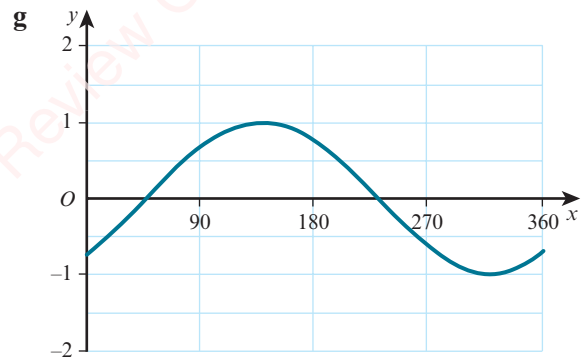
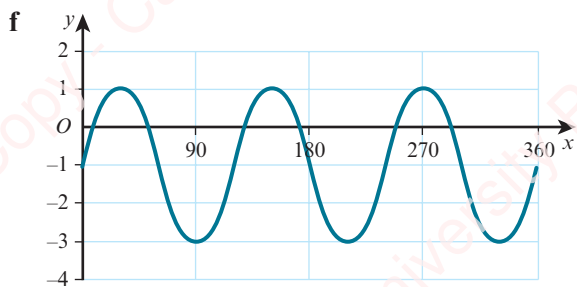
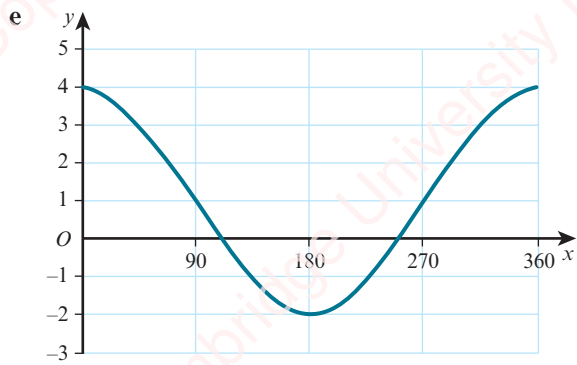
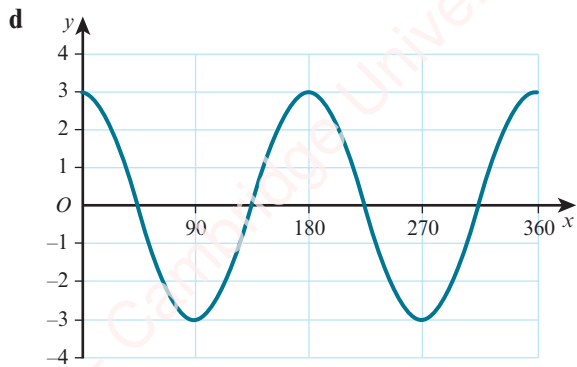
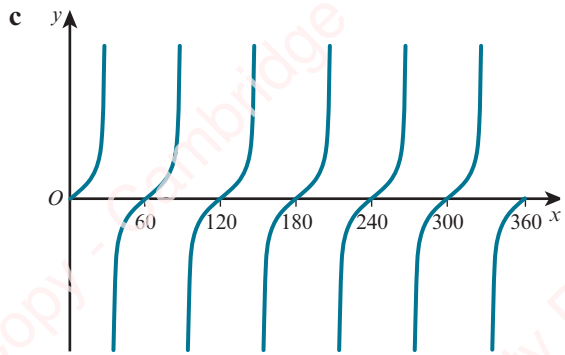
11

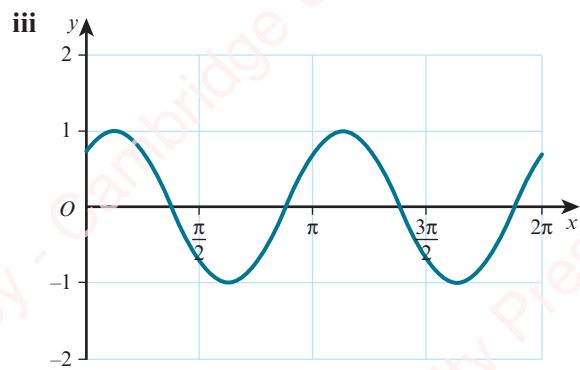
	$\theta = 120^\circ$	$\theta = 135^\circ$	$\theta = 210^\circ$
$\tan \theta$	$-\sqrt{3}$	-1	$\frac{1}{\sqrt{3}}$
$\sin \theta$	$\frac{\sqrt{3}}{2}$	$\frac{1}{\sqrt{2}}$	$-\frac{1}{2}$
$\frac{1}{\cos \theta}$	-2	$-\sqrt{2}$	$-\frac{2}{\sqrt{3}}$

Exercise 5D

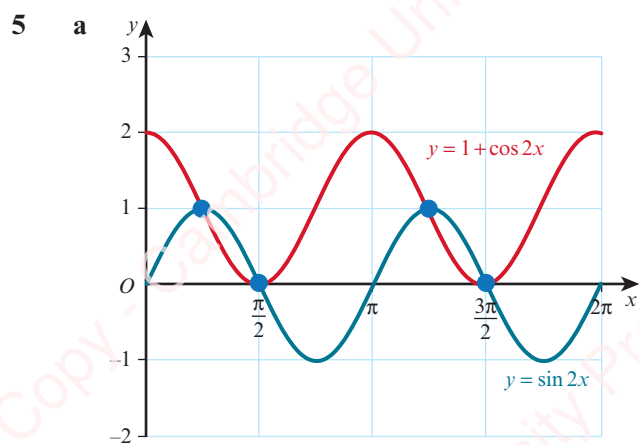
- 1 a 360° b 180°
 c 360° d 120°
 e 180° f 180°
- 2 a 1 b 5
 c 7 d 3
 e 4 f 2



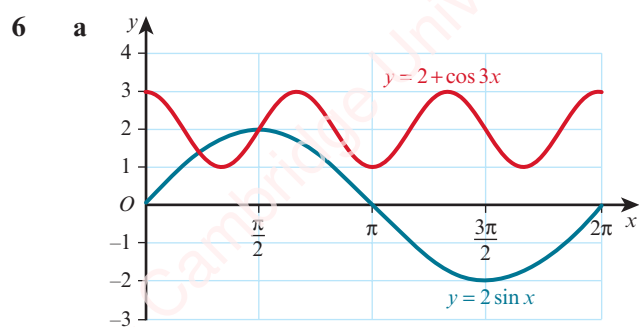




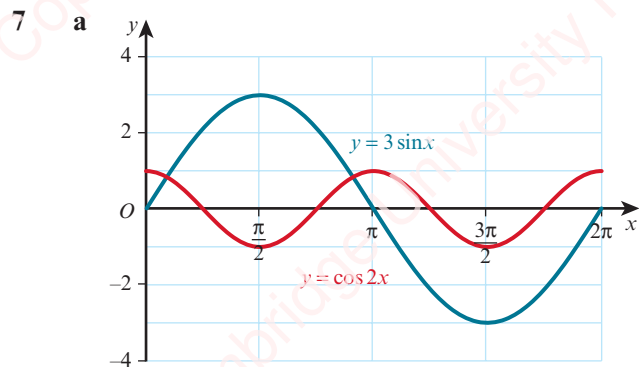
b $\left(\frac{\pi}{8}, 1\right), \left(\frac{5\pi}{8}, -1\right), \left(\frac{9\pi}{8}, 1\right), \left(\frac{13\pi}{8}, -1\right)$



b 4



b 2

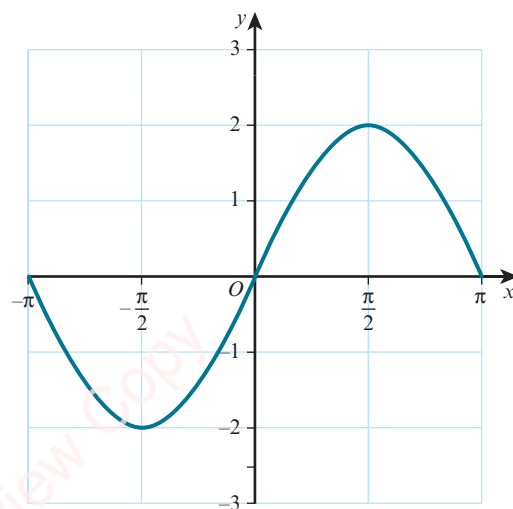


b 2

8 $a = 4, b = 2, c = 5$

9 $a = 3, b = 2, c = 3$

10 a



b $k = \frac{4}{\pi}$

c $(0, 0), \left(-\frac{\pi}{2}, -2\right)$

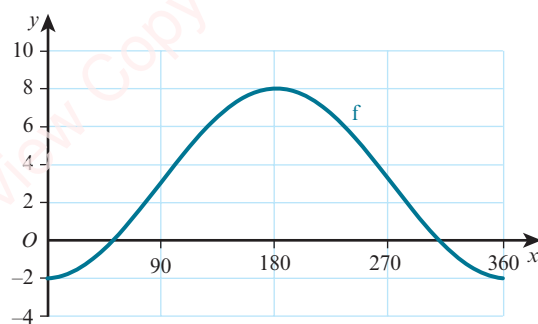
11 $a = 3, b = 1, c = 5$

12 a $a = 3, b = 2$

b $1 \leq f(x) \leq 5$

13 a $a = 3, b = 5$

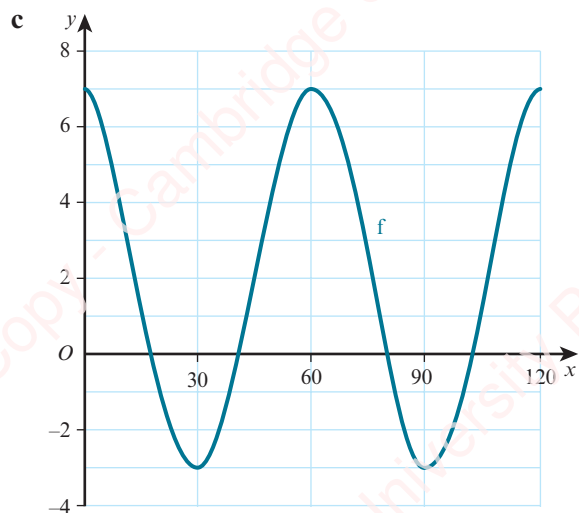
b



14 $a = 5, b = 4, c = 3$

15 a $A = 2, B = 6$

b 5



16 $y = 2 + \sin x$

17 $y = 6 + \cos x$

Exercise 5E

1 a 0°

c 60°

e -60°

2 a 0

c $\frac{\pi}{4}$

e $\frac{2\pi}{3}$

3 a $\frac{16}{25}$

4 a $-7 \leq f(x) \leq -1$

5 a $2 \leq f(x) \leq 6$

b 30°

d -90°

f 135°

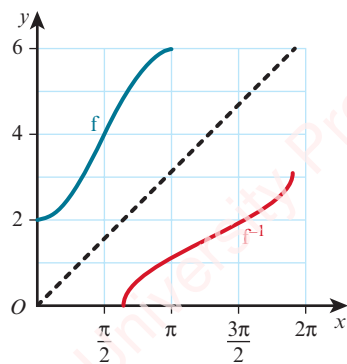
b $\frac{\pi}{4}$

d $-\frac{\pi}{6}$

f $-\frac{\pi}{3}$

b $\frac{16}{9}$

b $f^{-1}(x) = \sin^{-1}\left(\frac{x+4}{3}\right)$



b f is one-one, $f^{-1}(x) = \cos^{-1}\left(\frac{4-x}{2}\right)$

6 a $\frac{3\pi}{2}$

b $f^{-1}(x) = \sin^{-1}\left(\frac{5-x}{2}\right), 3 \leq x \leq 7$

7 a $-9 \leq f(x) \leq -1$

b $f^{-1}(x) = 2 \cos^{-1}\left(\frac{x+5}{4}\right), 0 \leq f^{-1}(x) \leq 2\pi$

Exercise 5F

1 a $56.3^\circ, 236.3^\circ$

c $45.6^\circ, 314.4^\circ$

e $126.9^\circ, 233.1^\circ$

g $60^\circ, 300^\circ$

2 a 0.305, 2.84

c 1.25, 4.39

e 1.89, 5.03

g 0.848, 2.29

3 a $26.6^\circ, 153.4^\circ$

b $17.7^\circ, 42.3^\circ, 137.7^\circ, 162.3^\circ$

c $38.0^\circ, 128.0^\circ$

e $24.1^\circ, 155.9^\circ$

g $58.3^\circ, 148.3^\circ$

4 a $90^\circ, 210^\circ$

c $139.1^\circ, 175.9^\circ$

e 278.2°

5 a $26.6^\circ, 206.6^\circ$

c $119.7^\circ, 299.7^\circ$

d $18.4^\circ, 108.4^\circ, 198.4^\circ, 288.4^\circ$

6 0.298, 1.87

7 a $0^\circ, 150^\circ, 180^\circ, 330^\circ, 360^\circ$

b $0^\circ, 36.9^\circ, 143.1^\circ, 180^\circ, 360^\circ$

c $0^\circ, 78.7^\circ, 180^\circ, 258.7^\circ, 360^\circ$

d $0^\circ, 116.6^\circ, 180^\circ, 296.6^\circ, 360^\circ$

e $0^\circ, 60^\circ, 180^\circ, 300^\circ, 360^\circ$

f $0^\circ, 76.0^\circ, 180^\circ, 256.0^\circ, 360^\circ$

8 a $60^\circ, 120^\circ, 240^\circ, 300^\circ$

b $56.3^\circ, 123.7^\circ, 236.3^\circ, 303.7^\circ$

9 a $30^\circ, 150^\circ, 270^\circ$

b $45^\circ, 108.4^\circ, 225^\circ, 288.4^\circ$

c $0^\circ, 109.5^\circ, 250.5^\circ, 360^\circ$

d $60^\circ, 180^\circ, 300^\circ$

e $0^\circ, 180^\circ, 199.5^\circ, 340.5^\circ, 360^\circ$

f $70.5^\circ, 120^\circ, 240^\circ, 289.5^\circ$

g $19.5^\circ, 160.5^\circ, 270^\circ$

h $30^\circ, 150^\circ, 270^\circ$

- 10 a 0.565, 2.58 b $\frac{\pi}{6}, \frac{5\pi}{6}$
 11 2.03, $\frac{3\pi}{4}, 5.18, \frac{7\pi}{4}$

Exercise 5G

- 1 $9 \sin^2 x - 3$
 2 a Proof b Proof
 c Proof d Proof
 e Proof f Proof
 3 a Proof b Proof
 c Proof d Proof
 4 a Proof b Proof
 c Proof d Proof
 5 a Proof b Proof
 c Proof d Proof
 e Proof f Proof
 g Proof h Proof
 6 a Proof b Proof
 c Proof d Proof
 e Proof f Proof
 7 4
 8 a $4 + 3 \sin^2 x$ b $4 \leq f(x) \leq 7$
 9 a $(\sin \theta + 2)^2 - 5$ b 4, -4
 10 a Proof
 b $\sin \theta = \frac{1-4a^2}{1+4a^2}, \cos \theta = \frac{4a}{1+4a^2}$

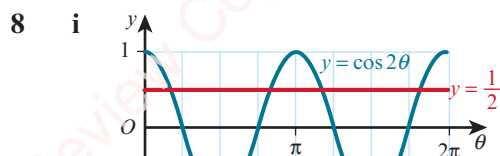
Exercise 5H

- 1 a Proof b $76.0^\circ, 256.0^\circ$
 2 a Proof b $18.4^\circ, 116.6^\circ$
 3 a Proof
 b $60^\circ, 131.8^\circ, 228.2^\circ, 300^\circ$
 4 a Proof b $30^\circ, 150^\circ, 210^\circ, 330^\circ$
 5 a Proof b $72.4^\circ, 287.6^\circ$
 6 a Proof b $65.2^\circ, 245.2^\circ$
 7 a Proof b $41.8^\circ, 138.2^\circ, 270^\circ$
 8 a Proof b $30^\circ, 150^\circ$
 9 a Proof b $66.4^\circ, 293.6^\circ$
 10 a Proof b $70.5^\circ, 289.5^\circ$
 11 a Proof b $30^\circ, 150^\circ, 210^\circ, 330^\circ$

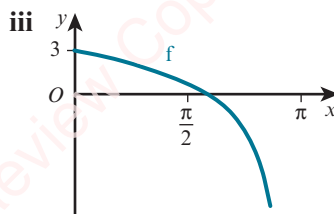
End-of-chapter review exercise 5

- 1 $a = i, b = 2$
 2 1.95
 3 a $\sqrt{1-k^2}$ b $\frac{\sqrt{1-k^2}}{k}$

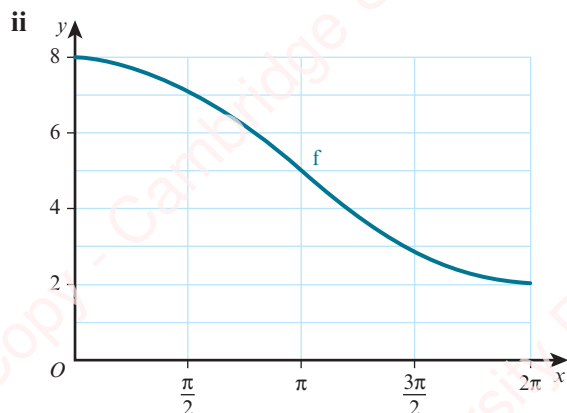
- c $-k$
 4 $x = \pm \frac{\sqrt{3}}{2}$
 5 39.3° or 129.3°
 6 30° or 150°
 7 30° or 150°



- ii 4 iii 20
 9 i Proof ii $45^\circ, 135^\circ, 225^\circ, 315^\circ$
 10 i 60° or 300° ii 120°
 11 i Proof ii 109.5° or 250.5°
 12 a $\frac{\pi}{6}, \frac{5\pi}{6}$ b $-2.21, 0.927$
 13 i $f(x) \leq 3$ ii $3 - 2\sqrt{3}$



- iv $f^{-1}(x) = 2 \tan^{-1} \left(\frac{3-x}{2} \right)$
 14 i 30° or 150° ii $n = 3, \theta = 290^\circ$
 15 i Proof
 ii $54.7^\circ, 125.3^\circ, 234.7^\circ, 305.3^\circ$
 16 i Proof ii 194.5° or 345.5°
 17 i 1.68



iii f is one-one

iv $f^{-1}(x) = 2 \cos^{-1}\left(\frac{x-5}{3}\right)$

6 Series

Prerequisite knowledge

- 1 a $4x^2 + 12x + 9$ b $9x^3 - 9x^2 - x + 1$
 2 a $125x^6$ b $-32x^{15}$
 3 a $2n + 3$ b $11 - 3n$

Exercise 6A

- 1 a $x^3 + 6x^2 + 12x + 8$
 b $1 - 4x + 6x^2 - 4x^3 + x^4$
 c $x^3 + 3x^2y + 3xy^2 + y^3$
 d $8 - 12x + 6x^2 - x^3$
 e $x^4 - 4x^3y + 6x^2y^2 - 4xy^3 + y^4$
 f $8x^3 + 36x^2y + 54xy^2 + 27y^3$
 g $16x^4 - 96x^3 + 216x^2 - 216x + 81$
 h $x^6 + \frac{9x}{2} + \frac{27}{4x^4} + \frac{27}{8x^9}$
- 2 a 12 b 10
 c -90 d 16
 e 40 f -32
 g 768 h $-\frac{5}{2}$
- 3 $A = 486, B = 540, C = 30$
- 4 ± 2
- 5 a $16 + 32x + 24x^2 + 8x^3 + x^4$
 b $97 + 56\sqrt{3}$
- 6 a $1 + 3x + 3x^2 + x^3$
 b i $16 + 8\sqrt{5}$ ii $16 - 8\sqrt{5}$
 c 32

- 7 $16 + 112x + 312x^2 + 432x^3 + 297x^4 + 81x^5$
- 8 a $x^8 - 4x^6 + 6x^4 - 4x^2 + 1$ b -16
- 9 -216
- 10 54
- 11 a $1 + 4y + 6y^2$ b 142
- 12 5
- 13 x^{11}
- 14 a $x^5 + 5x^4y + 10x^3y^2 + 10x^2y^3 + 5xy^4 + y^5$
 b 113 100
- 15 a $p = 8, q = 8$ b $36\sqrt{2}$
- 16 a $y^3 - 3y$ b $y^5 - 5y^3 + 5y$

Exercise 6B

- 1 a 35 b 84
 c 495 d 5005
- 2 a $\frac{n(n-1)}{2}$ b n
 c $\frac{n(n-1)(n-2)}{6}$
- 3 a 45 b 56
 c 364 d 792
- 4 a $1 + 16x + 112x^2$ b $1 - 30x + 405x^2$
 c $1 + \frac{7}{2}x + \frac{21}{4}x^2$ d $1 + 12x^2 + 66x^4$
 e $2187 + \frac{5103}{2}x + \frac{5103}{4}x^2$
 f $8192 - 53248x + 159744x^2$
 g $256 + 1024x^2 + 1792x^4$
 h $512 + 1152x^2 + 1152x^4$
- 5 a -84 b 5940
 c $\frac{35}{4}$ d -9720
- 6 7920
- 7 -224 000
- 8 -41 184
- 9 40 095
- 10 a $128 + 320x + 224x^2$ b $1 - 28x + 345x^2$
 c $1 - 3x + 3x^2$
- 11 a $1024 + 5120x + 11520x^2$
 b $1024 + 10240y + 30720y^2$

12 a $1 - 4x + 7x^2$ b 1

13 $16 + 224x + 1176x^2$

14 $a = -2, b = 1, p = -364$

15 $n = 8, p = 256, q = -144$

Exercise 6C

1 $a + 6d, a + 18d$

2 a 22, 1210 b 35, 3535

3 a 1037 b -1957

c $38\frac{1}{3}$ d $-3160x$

4 7

5 a 7, 29 b 2059

6 1442

7 1817

8 31

9 5586

10 25

11 \$360

12 a 17, -4 b 20

13 7, 8

14 10, -4

15 $\frac{1}{2}(5n - 11)$

16 9°

17 a $a = 8d$ b $9a$

18 Proof

19 a $4 - 3 \sin^2 x$ b Proof

20 a Proof b 900

Exercise 6D

1 a No b 3, 15 309

c $-\frac{1}{3}, -\frac{1}{27}$ d No

e No f -1, -1

2 ar^5, ar^{14}

3 $\frac{2}{3}$

4 -10.8

5 $\frac{3}{2}, 8$

6 64

7 -8, 2

8 a 765 b 255

c -85 d $700\frac{5}{9}$

9 21

10 a $8\left(\frac{3}{4}\right)^n$ b 48.8125 m

11 a $\frac{48}{x+1}$ b $2, \frac{1}{3}$

12 40, -20

13 a \$17715.61 b \$94 871.71

14 Proof

15 Proof

16 Proof

Exercise 6E

1 a 3 b $1\frac{1}{9}$

c $26\frac{2}{3}$ d $-36\frac{4}{7}$

2 $\frac{4}{3}$

3 32

4 $\frac{2}{3}, 810$

5 a $0.5\dot{7} = \frac{57}{100} + \frac{57}{10000} + \frac{57}{1000000} + \dots$

b Proof

6 0.25, 199.21875

7 0.5, 9

8 $\frac{52}{165}$

9 a $\frac{2}{3}, 13.5$ b 40.5

10 a -0.25, 256 b 204.8

11 a 90 b 405

12 a 36 b 192

13 93.75

14 $a = 2, r = \frac{3}{5}$

15 $\frac{\pi}{3} < x < \frac{\pi}{2}$

16 a 5π b $\frac{11\pi}{8}$

17 a Proof b Proof

c Proof

Exercise 6F

- 1 a 352 b 788.125
 2 a 100 b 16
 3 a 2 b 384, 32
 4 -2.5, 22.5
 5 a $\frac{3}{5}$ b 12.96, 68
 6 a 4 b $\frac{3}{2}$, $n = 6$
 7 a $x = -3$ or 5 , 3rd term = 24 or 40
 b $-\frac{4}{5}$

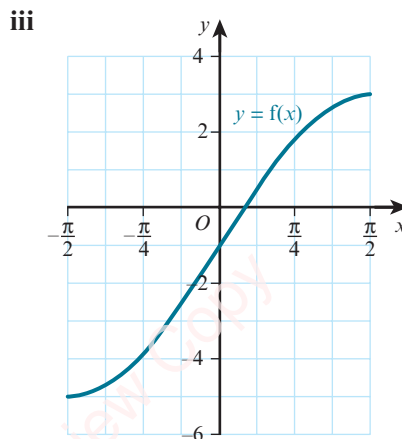
End-of-chapter review exercise 6

- 1 240
 2 5
 3 2
 4 $-\frac{864}{25}$
 5 16800
 6 40
 7 $\frac{135}{2}$
 8 a $6561x^{16} - 17496x^{15} + 20412x^{14}$
 b -37908
 9 a $1 + 8px + 28p^2x^2$ b $-\frac{17}{7}, 3$
 10 a i $1 + 10x + 40x^2$ ii $243 - 405x + 270x^2$
 b 5940
 11 23
 12 a $-\frac{2}{3}$ b 2187
 c 1312.2
 13 a $d = 2a$ b $99a$
 14 a $a = 44, d = -3$ b $n = 22$
 15 a $a = 60, d = -10.5$ b $42\frac{2}{3}$
 16 a 17 b $r = -\frac{5}{7}, S = \frac{7}{4}$
 17 a $\frac{1}{5}$ b 16
 18 i 41000 ii 22100
 19 a $a = 10, b = 45$
 b i $0 < \theta < \frac{\pi}{3}$ ii 1.125
 20 i $x = -2$ or 6 , 3rd term = 16 or 48 ii $\frac{16}{27}$

- 21 a $2\frac{1}{4}$ b 115.2°
 22 a $d = 6, a = 13$ b $a = \frac{12}{7}, r = \frac{5}{7}$

Cross-topic review exercise 2

- 1 x^{180}
 2 3840
 3 a $729x^6 - 2916x^3 + 4860$ b -5832
 4 a $1 - 10x + 40x^2$ b 12
 5 a -25.6 b $27\frac{7}{9}$
 6 a 14 b 112
 7 $\frac{625}{8}$
 8 i Proof
 ii $35.3^\circ, 144.7^\circ, 215.3^\circ, 324.7^\circ$
 9 a Proof b $225 - (r - 15)^2$
 c 15 d 225, maximum
 10 a Proof b $625 - (r - 25)^2$
 c 25 d 625, maximum
 11 a Proof b $\frac{40000}{\pi} - \pi\left(r - \frac{200}{\pi}\right)^2$
 c Proof d $\frac{40000}{\pi}$, maximum
 12 i Proof ii 0.9273
 iii 5.90 cm^2
 13 i $r^2(\tan \theta - \theta)$ ii $12 + 12\sqrt{3} + 4\pi$
 14 i $2 - 5 \cos^2 x$ ii -3 and 2
 iii 0.685, 2.46
 15 i Proof ii $26.6^\circ, 153.4^\circ$
 16 i $-5 \leq f(x) \leq 3$ ii $(0.253, 0), (0, -1)$



iv $f^{-1}(x) = \sin^{-1}\left(\frac{x+1}{4}\right)$, domain is $-5 \leq x \leq 3$,
range is $-\frac{1}{2}\pi \leq f^{-1}(x) \leq \frac{1}{2}\pi$

- 17 a 250
b i Proof ii 70

7 Differentiation

Prerequisite knowledge

- 1 a $3x^{\frac{3}{2}}$ b $5x^{\frac{2}{3}}$
c $\frac{1}{2}x^{\frac{1}{2}}$ d $\frac{1}{2}x^{-1}$
e $3x^{-2}$ f $-\frac{2}{5}x^{\frac{5}{3}}$
- 2 a $4(x-2)^{-3}$ b $2(3x+1)^{-5}$
- 3 $-\frac{3}{2}$
- 4 $y = 2x + 1$

Exercise 7A

1 a

Chord	AF	BF	CF	DF	EF
Gradient	2	2.5	2.8	2.95	2.99

- b 3
- 2 a 4 b -2
c $\frac{1}{2}$ d -3
- 3 a $5x^4$ b $9x^8$
c $-\frac{4}{x^5}$ d $-\frac{1}{x^2}$
e 0 f $\frac{2}{3\sqrt[3]{x}}$
g $5x^4$ h $3x^2$
- 4 a $8x^3$ b $15x^4$
c $3x^5$ d $-\frac{3}{x^2}$
e $\frac{10}{3x^3}$ f 0
g $\frac{2}{\sqrt{x}}$ h $-\frac{1}{\sqrt{x^5}}$
- 5 a $10x - 1$ b $6x^2 + 8$
c $10x - 3$ d $2x + 1$
e $16x^3 - 24x$ f $\frac{10}{x^3} - \frac{2}{x^2}$

g $14x + \frac{3}{x^2} - \frac{4}{x^3}$ h $3 - \frac{5}{x^2} + \frac{1}{4\sqrt{x^3}}$

i $6\sqrt{x} + \frac{3}{2\sqrt{x}} + \frac{1}{\sqrt{x^3}}$

- 6 a 3 b 0.5
c $-\frac{5}{4}$

7 15

8 -3

9 -8

10 $(-2, -10), (2, -6)$

11 $\frac{5}{4}$

12 a $(-2, 7), (3, -8)$ b -8, 2

13 $a = 2, b = -7$

14 $a = -5, b = 2$

15 $a = 4, b = -6$

16 $a = -10.5, b = 18$

17 $-2 < x < 3$

18 $x \leq -1$ and $x \geq \frac{1}{2}$

19 Proof

Exercise 7B

- 1 a $6(x+4)^5$ b $16(2x+3)^7$
c $-20(3-4x)^4$ d $\frac{9}{2}\left(\frac{1}{2}x+1\right)^8$
e $10(5x-2)^7$ f $50(2x-1)^4$
g $-56(4-7x)^3$ h $\frac{21}{5}(3x-1)^6$
i $10x(x^2+3)^4$ j $-16x(2-x^2)^7$
k $6x^2(x+2)(x+4)^2$ l $\frac{5(x^3-5)^4(2x^3+5)}{x^6}$
- 2 a $-\frac{1}{(x+2)^2}$ b $-\frac{3}{(x-5)^2}$
c $\frac{16}{(3-2x)^2}$ d $-\frac{32x}{(x^2+2)^2}$
e $-\frac{72}{(3x+1)^7}$ f $\frac{45}{2(3x+1)^6}$
g $-\frac{16(x+1)}{x^2(x+2)^2}$ h $-\frac{49(4x-5)}{(2x-5)^8 x^8}$
- 3 a $\frac{1}{2\sqrt{x-5}}$ b $\frac{1}{\sqrt{2x+3}}$
c $\frac{2x}{\sqrt{2x^2-1}}$ d $\frac{3x^2-5}{2\sqrt{x^3-5x}}$

e $-\frac{2}{\sqrt[3]{(5-2x)^2}}$

f $\frac{3}{\sqrt{3x+1}}$

g $-\frac{1}{\sqrt{(2x-5)^3}}$

h $\frac{6}{\sqrt[3]{(2-3x)^4}}$

4 10

5 12

6 $4, \frac{4}{3}$

7 (5, 1)

8 $a = 5, b = 3$

Exercise 7C

1 a $y = 3x - 7$

b $8x + y = 17$

c $y = 3x + 9$

d $2y = x - 1$

2 a $4y = x + 4$

b $y = x - 1$

c $x - 6y = 9$

d $5x - 6y = 3$

3 a $x + 4y = 4$

b $y = 4x - 7.5$

4 a Proof

b (0.6, 2.48)

5 (0, 7.5)

6 (-2.5, 8.5)

7 a $y = 4x - 68$

b (17, 0)

8 a $2 + \frac{20}{x^3}$

b Proof

9 (-7.5, 2.5)

10 (-6.2, 6.6)

11 a (-32.6, 28.4)

b 317.2 units²

12 a $(2\sqrt{3}, 8\sqrt{3}), (-2\sqrt{3}, -8\sqrt{3})$

b $x + 4y = 0$

13 (4, -1)

14 $y = 0.6x + 1.6, 30.96^\circ$

15 $\sqrt{73}$

16 a -7

b (0.4, -5.48)

Exercise 7D

1 a 2

b $30x - 14$

c $-\frac{36}{x^4}$

d $48(2x - 3)^2$

e $-\frac{4}{\sqrt{(4x-9)^3}}$

f $-\frac{27}{2\sqrt{(3x+1)^5}}$

g $\frac{4x-30}{x^4}$

h $24x^2 - 36x + 20$

i $-\frac{5x+12}{4\sqrt{x^5}}$

2 a $\frac{30}{x^4} - \frac{45}{x^7}$

b $-\frac{3}{x^3}$

c $\frac{4}{x^3} - \frac{45}{4\sqrt{x^7}}$

d $-\frac{9}{4\sqrt{(1-3x)^3}}$

e $\frac{15\sqrt{x}}{4} - 6$

f $\frac{80}{\sqrt[3]{(2x+1)^7}}$

3 $4 - 8(2x-1)^3, -48(2x-1)^2$

4 a -1

b 4

c 10

5 $-\frac{48}{(2x-1)^9}$

6 $\frac{2}{81}$

7

x	0	1	2	3	4	5	6	7
$\frac{dy}{dx}$	+	+	0	-	-	0	+	+
$\frac{d^2y}{dx^2}$	-	-	-	-	+	+	+	+

8 $x > 5$

9 Proof

10 Proof

11 a Proof

b -8, 8

12 $a = -4, b = 4$

End-of-chapter review exercise 7

1 $3x^3 + \frac{7}{4x^2}$

2 $-3\frac{5}{9}$

3 Proof

4 $-15(3-5x)^2 - 2, 150(3-5x)$

5 $-\frac{8}{15}$

6 i $4x + 5y = 66$

ii (16.5, 0)

7 i $5 - \frac{24}{x^3}$

ii Proof

8 37.4

9 (4.25, -7.5)

10 a $y = -4x + 18$

b $y = \frac{1}{4}x + 1$

11 a Proof

b i (-0.8, 15.5)

ii (2.1, 8.25)

12 $y = -\frac{1}{2}x$

- 13 i Proof ii $10\frac{3}{4}$
 14 i Proof ii $(-\frac{9}{2}, \frac{9}{4})$
 iii $(\frac{1}{2}, 4\frac{3}{4})$
 15 i $y - 2 = \frac{1}{2}(x - 1), y - 2 = -2(x - 1)$
 ii $2\frac{1}{2}$
 iii $(\frac{6}{11}, \frac{12}{11})$, E not midpoint of OA

8 Further differentiation

Prerequisite knowledge

- 1 a $x < -1$ and $x > 3$ b $-2 < x < 3$
 2 a $6x - 1, 6$ b $-\frac{3}{x^3}, \frac{9}{x^4}$
 c $\frac{9\sqrt{x}}{2}, \frac{9}{4\sqrt{x}}$
 3 a $10(2x - 1)^4$ b $\frac{18}{(1 - 3x)^3}$

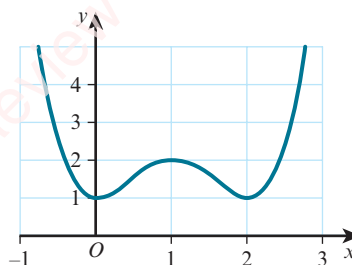
Exercise 8A

- 1 a $x > 4$ b $x > 1$
 c $x < -1.75$ d $x < 0$ and $x > 8$
 e $x < 1$ and $x > 4$ f $-2\frac{2}{3} < x < 2$
 2 a $x < 1\frac{1}{3}$ b $x > 4.5$
 c $2 < x < 5$ d $-1 < x < 3$
 e $x < 2$ and $x > 6\frac{2}{3}$ f $x < -4$ and $x > 2$
 3 $1.5 < x < 3.5$
 4 $\frac{8}{(1 - 2x)^2}$, increasing
 5 $\frac{2x - 6}{(x + 2)^3}$, neither
 6 Proof
 7 $8x + 20, 8x + 20 \geq 0$, if $x \geq 0$
 8 Proof
 9 $7 < x < 20$

Exercise 8B

- 1 a (2, 4) minimum
 b (-0.5, 6.25) maximum
 c (-2, 22) maximum; (2, -10) minimum
 d (-3, -17) minimum; (1, 15) maximum
 e (-1, -4) minimum
 f (1, -7) maximum; (2, -11) minimum

- 2 a (9, 6) minimum b (1, 12) minimum
 c (-3, -12) maximum; (3, 0) minimum
 d (-2, -28) maximum; (2, 36) minimum
 e (4, 4) maximum f (2, 6) minimum
 3 $\frac{18}{x^3}, \frac{18}{x^3} \neq 0$
 4 a -2, 3 b -44, 81
 5 a $a = 3$ b $-3 < x < 1$
 6 a $a = -15, b = 36$ b (2, -2), maximum
 7 Proof
 8 $x = \frac{3 + k}{2}$, minimum; $x = \frac{3 - k}{2}$, maximum
 9 (0, 1), minimum; (1, 2), maximum;
 (2, 1), minimum



- 10 a $a = -6, b = 5$ b minimum
 c (0, 5), maximum d (2, -11), -12
 11 a $a = 4, b = 16$ b minimum
 c $x < 0$ and $x > 2$
 12 a $a = 54, b = -22$ b minimum
 c $x < 0$ and $0 < x < 3$
 13 a $a = -3, b = -12$ b (-1, 14)
 c (2, -13) = minimum, (-1, 14) = maximum
 d (0.5, 0.5), -13.5

Exercise 8C

- 1 a $y = 9 - x$
 b i $P = 9x^2 - x^3$ ii 108
 c i $Q = 5x^2 - 36x + 162$ ii 97.2
 2 a $\theta = \frac{40 - 2r}{r}$ b Proof
 c $r = 10$ d $A = 100$, maximum
 3 a $y = \frac{50 - x}{2}$ b Proof
 c $A = 312.5, x = 25$
 4 a $3x^2 - 10x + 160$ b $x = 1\frac{2}{3}, 151\frac{2}{3} \text{ cm}^2$
 5 a Proof b $A = 37.5$, maximum
 6 a $QR = 9 - p^2$ b Proof
 c $p = \sqrt{3}$ d $A = 12\sqrt{3}$, maximum

- 7 a Proof b $V = 486, x = 3$
c Maximum
- 8 a $y = \frac{288}{x^2}$ b Proof
c 432, 12 cm by 6 cm by 8 cm
- 9 a $y = 1 - \frac{1}{2}x - \frac{1}{4}\pi x$ b Proof
c $\frac{dA}{dx} = 1 - x - \frac{1}{4}\pi x, \frac{d^2A}{dx^2} = -1 - \frac{1}{4}\pi$
d $\frac{4}{4 + \pi}$ e $A = \frac{2}{4 + \pi}$, maximum
- 10 a $h = \frac{5 - 2r - \pi r}{2}$ b Proof
c $\frac{dA}{dr} = 5 - 4r - \pi r, \frac{d^2A}{dr^2} = -4 - \pi$
d $\frac{5}{4 + \pi}$ e $\frac{25}{8 + 2\pi}$, maximum
- 11 a $r = \frac{50 - 2x}{\pi}$ b Proof
c $\frac{100}{(\pi + 4)} = 14.0, \frac{2500}{(4 + \pi)} = 350$, minimum
- 12 a $h = \frac{432}{r^2}$ b Proof
c $r = 6$ d $A = 216\pi$, minimum
- 13 a $y = \frac{500 - 24x^2}{10x}$ b Proof
c $\frac{5\sqrt{10}}{6}$ d Proof
- 14 a $h = \frac{160}{r} - \frac{3}{2}r$ b Proof
c $r = 8$
- 15 a $r = \sqrt{20h - h^2}$ b Proof
c $13\frac{1}{3}$ d 1241, maximum

Exercise 8D

- 1 -0.315 units per second, decreasing
2 $\frac{1}{300}$ units per second
3 -0.04 units per second
4 0.08 units per second
5 1.25 units per second
6 0.09 units per second, increasing
7 1, 6
8 0.016 units per second
9 $\frac{1}{3}, 3$

Exercise 8E

- 1 $\frac{4}{5}\pi \text{ cm}^2 \text{ s}^{-1}$
2 $18 \text{ cm}^3 \text{ s}^{-1}$
3 $\pi \text{ cm}^3 \text{ s}^{-1}$
4 0.003 cm s^{-1}
5 0.125 cm s^{-1}
6 $\frac{1}{320} \text{ cm s}^{-1}$
7 $9\pi \text{ cm}^2 \text{ s}^{-1}$
- 8 a Proof b $\frac{\sqrt{3}}{120} \text{ cm s}^{-1}$
- 9 a $\frac{1}{3} \text{ cm s}^{-1}$ b $\frac{1}{7} \text{ cm s}^{-1}$
- 10 a Proof b $-\frac{9}{100\pi} \text{ cm s}^{-1}$
- 11 $32\pi \text{ cm}^2 \text{ s}^{-1}$
- 12 a $2\sqrt{\frac{10}{\pi}} \text{ cm}$ b $\frac{5}{4\pi}\sqrt{\frac{\pi}{10}} \text{ cm s}^{-1}$
- 13 a $40\pi \text{ cm}^3 \text{ s}^{-1}$
b i 1.024 cm s^{-1} ii $8\pi \text{ cm}^2 \text{ s}^{-1}$

End-of-chapter review exercise 8

- 1 $\frac{2}{45\pi} \text{ cm s}^{-1}$
2 $300\pi \text{ m}^2 \text{ hr}^{-1}$
3 Maximum
4 $k = 0.0032 \text{ kg cm}^3, 0.096 \text{ kg day}^{-1}$
5 i $A = 2p^2 + p^3$ ii 0.4
6 i Proof ii 20 m by 24 m
7 i Proof ii 120, minimum
8 i $y = \frac{4(6-x)}{3}$ ii Proof
iii $A = 72$
9 i $\frac{dy}{dx} = -\frac{8}{x^2} + 2, \frac{d^2y}{dx^2} = \frac{16}{x^3}$
ii (2, 8), minimum since $\frac{d^2y}{dx^2} > 0$ when $x = 2$
(-2, -8), maximum since $\frac{d^2y}{dx^2} < 0$ when $x = -2$
10 i $y = 30 - x - \frac{\pi x}{4}$ ii Proof
iii $x = 15$ iv Maximum

- 11 a $-2 < x < \frac{4}{3}$
 b Maximum at $(-\frac{5}{3}, \frac{364}{27})$, minimum at (1, 4)
- 12 i Proof ii Maximum
- 13 i $(-\frac{2p}{3}, \frac{4p^3}{27})$
 ii (0, 0) minimum, $(-\frac{2p}{3}, \frac{4p^3}{27})$ maximum
 iii $0 < p < 3$

9 Integration

Prerequisite knowledge

- 1 a -19 b -1
 2 a $(-\frac{2}{3}, 5)$ b (0, 9)
 3 a $24x^7 - 13$ b $10x - 4 + \frac{5}{\sqrt{x}}$

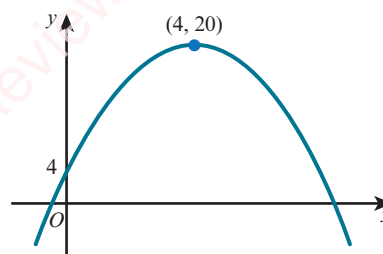
Exercise 9A

- 1 a $y = 5x^3 + c$ b $y = 2x^7 + c$
 c $y = 3x^4 + c$ d $y = -\frac{3}{x} + c$
 e $y = -\frac{1}{4x^2} + c$ f $y = 8\sqrt{x} + c$
- 2 a $f(x) = x^5 - \frac{x^4}{2} + 2x + c$
 b $f(x) = \frac{x^6}{2} + \frac{x^3}{3} - x^2 + c$
 c $f(x) = 3x^2 - \frac{1}{x^2} - \frac{8}{x} + c$
 d $f(x) = -\frac{3}{2x^6} + \frac{3}{x} - 4x + c$
- 3 a $y = \frac{x^3}{3} + \frac{5x^2}{2} + c$
 b $y = \frac{3x^4}{2} + \frac{2x^3}{3} + c$
 c $y = \frac{x^4}{4} - 2x^3 - 8x^2 + c$
 d $y = \frac{x^2}{4} - \frac{5}{4x^2} + \frac{1}{x} + c$
 e $y = \frac{2x^{\frac{7}{2}}}{7} - \frac{12x^{\frac{5}{2}}}{5} + 6x^{\frac{3}{2}} + c$
 f $y = 2x^{\frac{5}{2}} + 2x^{\frac{3}{2}} + 2\sqrt{x} + c$
- 4 a $2x^6 + c$ b $5x^4 + c$
 c $-\frac{3}{x} + c$ d $-\frac{2}{x^2} + c$

- e $\frac{4\sqrt{x}}{3} + c$ f $-\frac{10}{\sqrt{x}} + c$
- 5 a $\frac{x^3}{3} + \frac{5x^2}{2} + 4x + c$ b $\frac{x^3}{3} - 3x^2 + 9x + c$
 c $-\frac{8x^{\frac{3}{2}}}{3} + 2x^2 + x + c$ d $\frac{3x^{\frac{10}{3}}}{10} + \frac{3x^{\frac{4}{3}}}{4} + c$
 e $\frac{x}{2} + \frac{1}{2x} + c$ f $\frac{x}{2} - \frac{3}{2x^2} + c$
 g $\frac{x^2}{6} + \frac{4\sqrt{x}}{3} + c$ h $\frac{2x^{\frac{7}{2}}}{7} + \frac{20}{\sqrt{x}} + c$
 i $2x^2 + \frac{12}{x} - \frac{9}{4x^4} + c$

Exercise 9B

- 1 a $y = x^3 + x + 2$ b $y = 2x^3 - x^2 + 5$
 c $y = 10 - \frac{4}{x}$ d $y = x^2 + \frac{6}{x} - 4$
 e $y = 4\sqrt{x} - x + 2$
 f $y = 2\sqrt{x} - 2x + \frac{2}{3}x^{\frac{3}{2}} - 1$
- 2 $y = \frac{3}{x} + 2$
 3 $y = 2x^3 - 6x^2 + 5x - 4$
 4 $y = 5x^3 + \frac{3}{x^2} - 2$
 5 a $y = 2x^2\sqrt{x} + 2x - 1$ b $y = 42x - 97$
 6 $y = 2x^2 + 3x - 7$
 7 $f(x) = 4 + 8x - x^2$



- 8 a $y = x^3 + \frac{1}{2}x^2 - 10x + 3$
 b $x < -2$ and $x > 1\frac{2}{3}$
- 9 a $y = 2x^3 + 6x^2 + 10x + 4$ b Proof
- 10 $y = 2 + 4x - 2x^2 - x^3$
- 11 a -3.5
 b P = minimum, Q = maximum
- 12 a -6 b $y = \frac{1}{2}x^2 - 6x + 2$
- 13 $f'(x) = 2x - \frac{2}{x^2}$, $f(x) = x^2 + \frac{2}{x} - 4$

14 $(-11, 408\frac{1}{3})$

15 a $y = 9 + 3x - x^2$ b $5y = x + 21$

16 a $y = 2x\sqrt{x} - 6x + 10$ b $(4, 2)$, minimum

17 $(1, 7)$, maximum

18 a $y = x^2 - 5x + 2$ b $x + y = -1$

c $(1, -2)$

Exercise 9C

1 a $\frac{1}{18}(2x-7)^9 + c$ b $\frac{1}{18}(3x+1)^6 + c$

c $\frac{2}{45}(5x-2)^9 + c$ d $-\frac{1}{4}(1-2x)^6 + c$

e $-\frac{3}{16}(5-4x)^{\frac{4}{3}} + c$ f $\frac{1}{5}(2x+1)^{\frac{5}{2}} + c$

g $\frac{4}{3}\sqrt{3x-2} + c$ h $-\frac{2}{(2x+1)^2} + c$

i $\frac{5}{32(7-2x)^4} + c$

2 a $y = \frac{1}{8}(2x-1)^4 + 2$ b $y = \frac{1}{3}(2x+5)^{\frac{3}{2}} - 7$

c $y = 2\sqrt{x-2} + 5$ d $y = \frac{2}{3-2x} + 6$

3 $y = 3(x-5)^4 - 1$

4 a $x + 5y = 7$ b $y = 5\sqrt{2x-3} - 4$

5 a Maximum

b $y = 8\sqrt{3x+1} - 2x^2 - 2x + 5$

6 $y = 4\sqrt{2x-5} - 2$

Exercise 9D

1 a $8x(x^2+2)^3$ b $\frac{1}{8}(x^2+2)^4 + c$

2 a $20x(2x^2-1)^4$ b $\frac{1}{20}(2x^2-1)^5 + c$

3 a $k = -2$ b $-\frac{2}{x^2-5} + c$

4 a $\frac{6x}{(4-3x^2)^2}$ b $\frac{1}{8-6x^2} + c$

5 a $6(2x-3)(x^2-3x+5)^5$

b $\frac{(x^2-3x+5)^6}{3} + c$

6 a $\frac{4(\sqrt{x}+3)^7}{\sqrt{x}}$ b $\frac{1}{4}(\sqrt{x}+3)^8 + c$

7 a $15\sqrt{x}(2x\sqrt{x}-1)^4$ b $\frac{1}{5}(2x\sqrt{x}-1)^5 + c$

Exercise 9E

1 a 7 b $\frac{16}{9}$

c -6 d 21

e 9 f $\frac{5}{2}$

2 a $\frac{11}{2}$ b 3

c $\frac{107}{6}$ d $\frac{4}{15}$

e $\frac{37}{8}$ f 18

3 a 10 b $\frac{26}{3}$

c $\frac{2}{5}$ d 4

e 2 f 8

4 a $-\frac{4x}{(x^2+5)^2}$ b $\frac{4}{45}$

5 a $15x^2(x^3-2)^4$ b $2\frac{1}{15}$

6 a $\frac{(\sqrt{x}+1)^4}{4\sqrt{x}}$ b $84\frac{2}{5}$

Exercise 9F

1 a $21\frac{1}{3}$ b 8

c $20\frac{5}{6}$ d $5\frac{1}{3}$

2 Proof

3 a $11\frac{5}{6}$ b $40\frac{1}{2}$

c $4\frac{3}{32}$ d $21\frac{1}{12}$

4 a $7\frac{1}{5}$ b $5\frac{1}{2}$

c 15.84 d 14

e 16 f 9

5 a $48\frac{3}{4}$ b 6

6 $3\frac{1}{3}$

7 $10\frac{2}{3}$

8 a 9 b 1.6

9 a Proof b $3 - \sqrt{5}$

10 $18\frac{2}{3}$

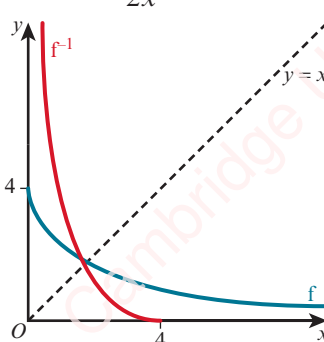
11 a $(-1, 0)$ b 90

12 $10\frac{1}{2}$

13 34

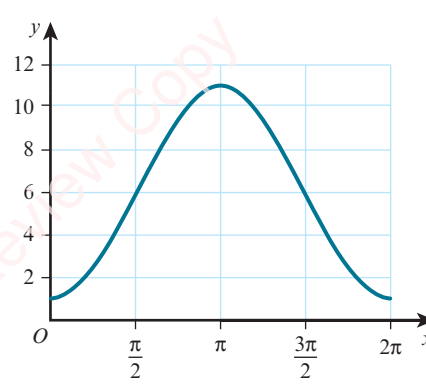
14 26

Cross-topic review exercise 3

- 1 $y = \frac{2}{3}x^3 - 3x + 7$
- 2 i -0.6
ii $y = 2x - \frac{16}{3}(3x+4)^{\frac{1}{2}} + 12$
- 3 i $y = 2x^{\frac{3}{2}} - 6x + 2$ ii $x = 4$, minimum
- 4 i $y = -\frac{3}{2(1+2x)} + 1$ ii $x > 1, x < -2$
- 5 i $(\frac{1}{2}, 0)$ ii $\frac{1}{6}$
- 6 i $\frac{4}{9}$ ii $-\frac{2}{27}$
- 7 a Proof b Proof
c $\frac{1250}{(\pi+4)} = 175$ (3 s.f.), maximum
- 8 i 12 ii $x = -1$ or $x = -3, 1\frac{1}{3}$
- 9 i $\frac{dy}{dx} = \frac{9}{(2-x)^2}$, no turning points since $\frac{dy}{dx} \neq 0$
ii $\frac{81\pi}{2}$ iii $k < -8, k > 4$
- 10 a $f'(x) = -\frac{8}{(2x+1)^2}, \frac{8}{(2x+1)^2} < 0$
b $f^{-1}(x) = \frac{4-x}{2x}, 0 < x \leq 4$
c 
- 11 i $y = \frac{2}{3}x^{\frac{3}{2}} - 2x^{\frac{1}{2}} - \frac{2}{3}$ ii $\frac{1}{2}x^{\frac{1}{2}} + \frac{1}{2}x^{-\frac{3}{2}}$
iii $(1, -2)$, minimum
- 12 i $y - 6 = -\frac{2}{7}(x - 2)$ ii $y = x^2 + \frac{2}{x} + 1$
iii $x = 1$, minimum since $f''(1) > 0$
- 13 i 13
ii $x = -1$ (max), $x = 2$ (min)

- 14 i $B(\frac{5}{4}, 0), C(0, \frac{3}{4})$ ii $\frac{\sqrt{17}}{4}$
iii $\frac{3}{40}$
- 15 i Proof ii $\frac{284\pi}{3}$

Practice exam-style paper

- 1 $f'(x) = 2 + \frac{15}{x^4} > 0$ for all x
- 2 $y = -x^3 + 6x^2 - 12x + 11$
- 3 Proof
- 4 a $2187 - 10206x + 20412x^2$ b -30618
- 5 a $\frac{3}{2}(4\pi - 3\sqrt{3}) \text{ cm}^2$
b $(2\pi + 3 + 3\sqrt{3}) \text{ cm}$
- 6 a $(x-3)^2 + (y+2)^2 = 20$ b $x - 2y = 17$
- 7 a 7, -8
b i $\frac{1}{3}$ ii $\frac{27}{8}$
- 8 a $21 - 2(x-3)^2$ b $(3, 21)$
c $x \leq 3 - \sqrt{13}, x \geq 3 + \sqrt{13}$
- 9 a $1 \leq f(x) \leq 11$
b 
- c 0.927 rad, 5.36 rad
d $g^{-1}(x) = \cos^{-1}\left(\frac{6-x}{5}\right)$
- 10 a $3x + 4y = 17$ b $\frac{1}{240}$ units per second
- 11 a $-\frac{16}{x^2} - 2x, \frac{32}{x^3} - 2$ b $(-2, -12)$, maximum
c $\frac{431\pi}{5}$

Glossary

A

Amplitude: the distance between a maximum (or minimum) point and the principal axis of a sinusoidal function

Arithmetic progression: each term in the progression differs from the term before by a constant

Asymptote: a straight line such that the distance between a curve and the line approaches zero as they tend to infinity

B

Basic angle: the acute angle made with the x -axis

Binomial: a polynomial with two terms

Binomial coefficients: the coefficients in a binomial expansion

Binomial theorem: the rule for expanding $(1 + x)^n$ or $(a + b)^n$

C

Chain rule: the rule for computing the derivative of the composition of two functions

Common difference: the difference between successive terms in an arithmetic progression

Common ratio: the constant ratio of successive terms in a geometric progression

Completed square form: the equation $(x - a)^2 + (y - b)^2 = r^2$, where (a, b) is the centre and r is the radius of the circle

Completing the square: writing the expression $ax^2 + bx + c$ in the form $d(x + e)^2 + f$

Composite function: a function obtained from two given functions by applying first one function and then applying the second function to the result

Convergent series: a sequence that tends to a finite number

D

Decreasing function: a function whose value decreases as x increases

Definite integral: an integral between limits whose result does not contain a constant of integration

Derivative: denoted by $\frac{dy}{dx}$ of $f(x)$; gives the gradient of a curve

Differentiation: the process of finding the gradient of a curve

Differentiation from first principles: the process of finding the gradient of a curve using small increments

Discriminant: the part of the quadratic formula underneath the square root sign

Domain: the set of input values for a function

F

Factorial: $6 \times 5 \times 4 \times 3 \times 2 \times 1 = 6!$ (read as '6 factorial')

First derivative: see Derivative

Function: a rule that maps each x value to just one y value for a defined set of input (x) values

G

General form of a circle: the equation $x^2 + y^2 + 2gx + 2fy + c = 0$, where $(-g, -f)$ is the centre and $\sqrt{g^2 + f^2 - c}$ is the radius of the circle

Geometric progression: each term in the progression is a constant multiple of the preceding term

Gradient function: the derivative $f'(x)$ is also known as the gradient function of the curve $y = f(x)$

I

Identity: a mathematical relationship equating one quantity to another

Improper integrals: a definite integral that has either one limit or both limits are infinite, or a definite integral where the function to be integrated approaches an infinite value at either or both endpoints in the interval (of integration)

Increasing function: a function whose value increases as x increases

Indefinite integral: an integral without limits whose result contains a constant of integration

Integration: the reverse process of differentiation

Inverse function: the inverse of a function, $f^{-1}(x)$, is the function that undoes what $f(x)$ has done

M

Many-one: a function which has one output value for each input value but each output value can have more than one input value

Mapping: a diagram to show how the numbers in the domain and range are paired

Maximum point: a point, P , on a curve where the value of y at this point is greater than the value of y at other points close to P

Minimum point: a point, Q , on a curve where the value of y at this point is less than the value of y at other points close to Q

N

Normal: the line perpendicular to the tangent at a point on a curve

O

One-one: a function where exactly one input value gives rise to each value in the range

P

Parabola: the graph of a quadratic function

Pascal's triangle: a triangular array of the binomial coefficients, where each number is the sum of the two numbers above

Period: the length of one repetition or cycle of a periodic function

Periodic functions: a function that repeats its values in regular intervals or periods

Point of inflexion: a point on a curve at which the direction of curvature changes

Principal angle: the angle that the calculator gives is called the principal angle

Q

Quadrant: the Cartesian plane is divided into four quadrants

Quadratic formula: the formula $x = \frac{-b \pm \sqrt{b^2 - 4ac}}{2a}$,

which is used to solve the equation $ax^2 + bx + c = 0$

R

Radian: one radian is the angle subtended at the centre of a circle by an arc that is equal in length to the radius of a circle

Range: the set of output values for a function

Reference angle: the acute angle made with the x -axis

Roots: if $f(x)$ is a function, then the solutions to the equation $f(x) = 0$ are called the roots of the equation

S

Second derivative: denoted by $\frac{d^2y}{dx^2}$ or $f''(x)$ and is used to determine the nature of stationary points on a curve

Series: the sum of the terms in a sequence

Self-inverse function: a function f where $f^{-1}(x) = f(x)$ for all x

Solid of revolution: the solid formed when an area is rotated through 360° about an axis

Stationary point: a point on a curve where the gradient is zero, also known as a turning point

T

Tangent: a straight line that touches a curve at a point

Term: a number in a sequence

Turning point: a point on a curve where the gradient is zero, also known as a stationary point

V

Vertex: the vertex of a parabola is the maximum or minimum point

Volume of revolution: the volume of the solid formed when an area is rotated through 360° about an axis

Index

- addition/subtraction rule,
 differentiation 195
 amplitude of a periodic function 129
 angles
 degrees 100
 general definition of 121–2
 radians 101–2
 arcs, length of 104–5
 area bounded by a curve and a line
 260–1
 area bounded by two curves 260–1
 area enclosed by a curve and the y -axis
 255–6
 area under a curve 253–5
 arithmetic progressions 166–7, 180
 sum of 167–9
 asymptotes 129
- basic angle (reference angle) 121–2
 binomial coefficients 160–4
 binomial expansions 156–8
 binomial theorem 161
- calculus 191
 see also differentiation; integration
 Cantor, Georg 181
 Cartesian coordinate system 83
 quadrants of 122
 chain rule, differentiation 198–200
 connected rates of change 228–9
 circles
 area of a sector 107–8
 equation of 82–7
 intersection with a line 88–90
 length of an arc 104–5
 right-angle facts 85
 codomain (range) of a function 35–7
 inverse functions 43, 45
 combined transformations of functions
 59–60
 trigonometric functions 132
 two horizontal transformations 61–3
 two vertical transformations 60–1
 common difference, arithmetic
 progressions 166
 common ratio, geometric progressions 171
 communication vi
 completed square form, equation of a
 circle 83
- completing the square 6–8
 graph sketching 19
 proof of the quadratic formula 10
 composite functions 39–41
 conic sections 71
 connected rates of change 228–9
 practical applications 230–2
 constant of integration 244–5
 convergent series 176
 cosine
 angles between 0° and 90° 118–20
 general angles 123–6
 graph of 128–9
 inverse of 137, 138
 transformations of 132
 trigonometric equations 140–4
 trigonometric identities 145–7, 149
- decreasing functions 213–15
 definite integration 250–2
 area bounded by a curve and a line
 260–1
 area bounded by two curves 260–1
 area enclosed by a curve and the
 y -axis 255–6
 area under a curve 253–5
 improper integrals 264–7
 volumes of revolution 268–70
 degrees 100
 converting to and from radians
 101–2
 derivatives 193
 first and second 205–6
 see also differentiation
- Descartes, René 83
 differentiation 191–6
 addition/subtraction rule 195
 chain rule 198–200
 constants 195
 increasing and decreasing functions
 213–15
 notation 193
 power rule 194–5
 practical applications of connected
 rates of change 230–2
 practical maximum and minimum
 problems 221–3
 rates of change 227–9
 real life uses of 212
- scalar multiple rule 195
 second derivatives 205–6
 stationary points 216–19
 tangents and normals 201–3
 differentiation from first principles 193
 discriminant 24
 domain of a function 35–7
 inverse functions 43, 45
- equation of a circle 82–3, 86–7
 completed square form 83–4
 expanded general form 84–5
 equation of a straight line 78–80
 tangents and normals 202
- factorial notation 163–4
 factorisation, quadratic equations 3–5
 first derivative test 217
 first derivatives 205
 functions
 composite 39–41
 definitions 34
 domain and range 35–7
 graph of a function and its inverse
 48–9
 increasing and decreasing 213–15
 inverse of 43–5, 48–9
 many-one 35
 one-one 34–5
 quadratic *see* quadratic functions
 self-inverse 44
 transformations of 51
 combined transformations 59–63
 reflections 55–6
 stretches 57–8
 translations 52–3
 trigonometric *see* cosine; sine;
 tangent; trigonometry
 use in modelling 34
- Galileo Galilei 2
 Gauss, Carl 167
 geometric progressions 171–2, 180
 infinite geometric series 175–8
 sum of 173–4
 gradients 75, 192–3
 and equation of a straight line 78–80
 of tangents and normals 201–3
 see also differentiation

- gradients of parallel and perpendicular lines 75–7
 graph of a function and its inverse 48–9
 graph sketching 17–19
 quadratic inequalities 22
 graphs of trigonometric functions
 transformations 130–3
 $\sin x$ and $\cos x$ 128–9
 $\tan x$ 129
- horizontal transformations,
 combination of 61–2
- identities, trigonometric 145–7, 149
 image set of a function *see* range
 (codomain) of a function
- improper integrals
 type 1 264–6
 type 2 266–7
- increasing functions 213–15
 indefinite integrals 241
 inequalities, quadratic 21–3
 infinite geometric series 175–8
 infinity 181
 improper integrals 264–7
- inflexion, points of 216
 integration 239, 249
 area bounded by a curve and a line 260–1
 area bounded by two curves 260–1
 area enclosed by a curve and the y -axis 255–6
 area under a curve 253–5
 definite 250–2
 of expressions of the form $(ax + b)^n$ 247–8
 finding the constant of 244–5
 formulae for 241–3
 improper integrals 264–7
 notation 240
 as the reverse of differentiation 239–40
 volumes of revolution 268–70
- intersection of a line and a parabola 27–8
 inverse functions 43–5
 graphs of 48–9
 trigonometric functions 136–9
- Lagrange's notation 193
 latitude 104
 Leibnitz, Gottfried 193, 239
 length of a line segment 72–4
 limits of integration 250
- line segments
 gradient 75
 length and mid-point 72–4
 parallel and perpendicular 75–7
 see also straight lines
- lines of symmetry, quadratic functions 17–19
 longitude 104
- many-one functions 35
 mappings *see* functions
 maximum points 17–19, 216–17
 practical problems 221–3
 and second derivatives 218–19
 mid-point of a line segment 72–4
 minimum points 17–19, 216–17
 practical problems 221–3
 and second derivatives 218–19
- modelling vi–vii
- Newton, Isaac 193, 239
 normals, gradient 201–3
 n th term of a geometric progression 171–2
 n th term of an arithmetic progression 166–7
- one-one functions 34–5
 oscillations 117
- parabolas 17–19
 intersection with a line 27–8
 lines of symmetry 17–19
 maximum and minimum values 17–19
- paraboloids 18
 parallel lines 75
 Pascal's triangle 157–8
 periodic functions 129
 perpendicular lines 75
 points of inflexion 216
 power rule, differentiation 194–5
 principal angle 137, 138
 problem solving vi
- quadrants of the Cartesian plane 121
 quadratic curves, intersection with a line 27–8
 quadratic equations
 completing the square 6–8
 functions of x 15–16
 number of roots 24–5
 simultaneous equations 11–13
 solution by factorisation 3–5
- quadratic formula 10
 quadratic functions 2
 graph sketching 17–19
 lines of symmetry 17–19
 maximum and minimum values 17–19
 quadratic inequalities 21–3
- radians 101
 area of a sector 107–8
 converting to and from degrees 101–2
 length of an arc 104–5
 simple multiples of π 102
- range (codomain) of a function 35–7
 inverse functions 43, 45
- rates of change 227–8
 connected 228–9
 practical applications 230–2
- recurring decimals 176
 reference angle (basic angle) 121–2
 reflections 55–6
 revolution, volumes of 268–70
 right-angle facts for circles 85
 roots of a quadratic equation 24–5
- scalar multiple rule, differentiation 195
 second derivatives 205–6
 and stationary points 218–19
- sectors, area of 107–8
 self-inverse functions 44
 graphs of 48
- sequences
 arithmetic progressions 166–9
 geometric progressions 171–4
 infinite geometric series 175–8
- series 156, 167
 binomial coefficients 160–4
 binomial expansion of $(a + b)^n$ 156–8
- simultaneous equations 11–13
- sine
 angles between 0° and 90° 118–20
 general angles 123–6
 graph of 128–9
 inverse of 136, 138–9
 transformations of 130–1
 trigonometric equations 140–4
 trigonometric identities 145–7, 149
- sketching a graph 17–19
 quadratic inequalities 22
- solids of revolution 268
 sphere, surface area of 14

- stationary points 17–19, 216–17
 practical maximum and minimum problems 221–3
 and second derivatives 218–19
- Stevin, Simon 176
- straight lines
 equation of 78–80
 intersection with a circle 88–90
 intersection with a quadratic curve 27–8
see also line segments
- stretch factors 57–8
- stretches 57–8
 trigonometric functions 130
- sum of an arithmetic progression 167–9
- sum of a geometric progression 173–4
- sum of an infinite geometric series 175–8
- sum to infinity of a series 176–8
- tangent (trigonometric ratio)
 angles between 0° and 90° 118–20
 general angles 123–6
 graph of 129
 inverse of 137
 trigonometric equations 141–3
 trigonometric identities 145–7, 149
- tangents to a curve 27
 gradient 201–3
- terms of a sequence 166
- trajectories 2
- transformations of functions 51
 combined transformations 59–63
 reflections 55–6
 stretches 57–8
 translations 52–3
 trigonometric functions 130–3
- translations 52–3
 trigonometric functions 131
- trigonometric equations 140–4, 149
- trigonometric identities 145–7, 149
- trigonometry 117
 angles between 0° and 90° 118–20
 general definition of an angle 121–2
 graphs of functions 127–33
 inverse functions 136–9
 ratios of general angles 123–6
 transformations of functions 130–3
- turning points 17–19, 216
see also stationary points
- Underground Mathematics vii
- vertex of a parabola 17–19
- vertical transformations, combination of 60–1
- volumes of revolution 268–9
 rotation around the x -axis 269–70
 rotation around the y -axis 268–9
- waves 117